

DDA JSA

Previous Year Paper
21 Sept, 2023 Shift 2



Test Prime

**ALL EXAMS,
ONE SUBSCRIPTION**



70,000+
Mock Tests



**Personalised
Report Card**



**Unlimited
Re-Attempt**



600+
Exam Covered



**Previous Year
Papers**



500%
Refund



ATTEMPT FREE MOCK NOW



DELHI DEVELOPMENT AUTHORITY
RECRUITMENT CELL
VIKAS SADAN, INA, NEW DELHI - 110023
<https://www.dda.gov.in>

Advertisement No. 02/2023/Recrtt. Cell/Pers./DDA

Participant ID	
Participant Name	
Test Center Name	
Test Date	21/09/2023
Test Time	11:30 AM - 12:30 PM
Subject	Junior Secretariat Assistant

Section : General Intelligence

Q.1 In the following question, select the missing number from the given series.
81, 82, 86, 102, 166, ?

Ans ☒ 1. 422
☒ 2. 420
☒ 3. 421
☒ 4. 423

Question ID : 630680372804
Option 1 ID : 6306801452501
Option 2 ID : 6306801452499
Option 3 ID : 6306801452500
Option 4 ID : 6306801452502
Status : Answered
Chosen Option : 1


Q.2 In the following question, select the related letter pair from the given alternatives.
AMZ : DPC :: ?


Ans ☒ 1. HBA : HAR
☒ 2. PTW : SWZ
☒ 3. LLH : UXN
☒ 4. URR : RRB


Question ID : 630680372798
Option 1 ID : 6306801452477
Option 2 ID : 6306801452475
Option 3 ID : 6306801452478
Option 4 ID : 6306801452476
Status : Not Answered
Chosen Option : --


Q.3 Select the option that is related to the fifth number cluster in the same way as the second number cluster is related to the first number cluster and fourth number cluster is related to third number cluster.
7 : 64 :: 12 : 169 :: 6 : ?

- Ans

 1. 49

 2. 81

 3. 54

 4. 42

Question ID : 630680372810

Option 1 ID : 6306801452525

Option 2 ID : 6306801452526

Option 3 ID : 6306801452524

Option 4 ID : 6306801452523

Status : Answered

Chosen Option : 1

Q.4 In the following question, select the odd letter/letters from the given alternatives.

- Ans

 1. EGJ

 2. CEG

 3. IKN

 4. VXA

Question ID : 630680372799

Option 1 ID : 6306801452479

Option 2 ID : 6306801452482

Option 3 ID : 6306801452481


Option 4 ID : 6306801452480


Status : Answered

Chosen Option : 2

Q.5 In the following question, select the odd letter/letters from the given alternatives.

- Ans

 1. ZWT

 2. GDA

 3. OLI

 4. YVR

Question ID : 630680372800

Option 1 ID : 6306801452483

Option 2 ID : 6306801452485

Option 3 ID : 6306801452484

Option 4 ID : 6306801452486

Status : Answered

Chosen Option : 4

Q.6 Consider the five three letter words given below and the answer the questions based on it.
(Left) KPS RZB BKM NLW FWJ (Right)
What will be the place value of the 2nd letter of the 2nd word from the right end as per the English alphabetical order?

- Ans ☒ 1. 11
☒ 2. 12
☒ 3. 6
☒ 4. 2

Question ID : 630680372794
Option 1 ID : 6306801452461
Option 2 ID : 6306801452459
Option 3 ID : 6306801452462
Option 4 ID : 6306801452460
Status : Answered
Chosen Option : 2

Q.7 In the following question below are given some statements followed by some conclusions based on those statements. Taking the given statements to be true even if they seem to be at variance from commonly known facts. Read all the conclusions and then decide which of the given conclusion logically follows the given statements.

Statements:

- I. Some T are Q.
II. All Q are M.

Conclusion:

- I. All M are Q.
II. All T are Q.
III. Some M are not T.

- Ans ☒ 1. All conclusion follows
☒ 2. Neither conclusion follows
☒ 3. Both conclusions I and III follows
☒ 4. Both conclusions II and III follows

Question ID : 630680372791
Option 1 ID : 6306801452449
Option 2 ID : 6306801452450
Option 3 ID : 6306801452447
Option 4 ID : 6306801452448
Status : Answered
Chosen Option : 2

Q.8 By interchanging which two numbers the equation will be correct?
 $9 - 4 \times 3 + 6 \times 7 \div 1 = 12$

- Ans ☒ 1. 7 and 9
☒ 2. 3 and 6
☒ 3. 9 and 3
☒ 4. 7 and 4

Question ID : 630680372808
Option 1 ID : 6306801452515
Option 2 ID : 6306801452517
Option 3 ID : 6306801452518
Option 4 ID : 6306801452516
Status : Answered
Chosen Option : 4

Q.9 A series is given with one term missing. Select the correct alternative from the given ones that will complete the series.
SNI, VSJ, YXK, BCL, ?

- Ans

☒ 1. RNR

☒ 2. QNR

☒ 3. EMQ

☒ 4. EHM

Question ID : 630680372792

Option 1 ID : 6306801452454

Option 2 ID : 6306801452453

Option 3 ID : 6306801452452

Option 4 ID : 6306801452451

Status : Answered

Chosen Option : 4

Q.10 In the following question, select the missing number from the given series.
4, 6, 14, 44, 178, ?

- Ans

☒ 1. 891

☒ 2. 892

☒ 3. 877

☒ 4. 890

Question ID : 630680372805

Option 1 ID : 6306801452503

Option 2 ID : 6306801452505

Option 3 ID : 6306801452504

Option 4 ID : 6306801452506

Status : Answered

Chosen Option : 2

Q.11 In the following question, select the missing number from the given series.
98, 87, 75, 62, 48, ?

- Ans

☒ 1. 34

☒ 2. 30

☒ 3. 40

☒ 4. 33

Question ID : 630680372803

Option 1 ID : 6306801452498

Option 2 ID : 6306801452495

Option 3 ID : 6306801452497

Option 4 ID : 6306801452496

Status : Answered

Chosen Option : 4

Q.12 Six friends A, B, C, D, E and F are sitting around a circular table facing towards the centre (not necessarily in the same order). C is second to the left of A. B is third to right of C. D is third to the left of E. E is the immediate neighbour of both C and A. Who is to the immediate left of F?

- Ans
- ☒ 1. B
 - ☒ 2. E
 - ☒ 3. C
 - ☒ 4. D

Question ID : 630680372786
Option 1 ID : 6306801452430
Option 2 ID : 6306801452429
Option 3 ID : 6306801452428
Option 4 ID : 6306801452427
Status : Answered
Chosen Option : 4

Q.13 By interchanging which two numbers the equation will be correct?
 $5 \times 9 - 3 + 8 \div 2 = 10$

- Ans
- ☒ 1. 9 and 8
 - ☒ 2. 3 and 9
 - ☒ 3. 8 and 5
 - ☒ 4. 3 and 5

Question ID : 630680372809
Option 1 ID : 6306801452522
Option 2 ID : 6306801452521
Option 3 ID : 6306801452520
Option 4 ID : 6306801452519
Status : Answered
Chosen Option : 2

Q.14 What is the approximate value of $(23.04)2 \times 46.12 \div 1.99 + 128.78$?

- Ans
- ☒ 1. 12876
 - ☒ 2. 11002
 - ☒ 3. 12300
 - ☒ 4. 17290

Question ID : 630680372807
Option 1 ID : 6306801452513
Option 2 ID : 6306801452512
Option 3 ID : 6306801452511
Option 4 ID : 6306801452514
Status : Not Attempted and Marked For Review
Chosen Option : --

Q.15 In the following question, select the related letters from the given alternatives.

DD : BA :: IV : ?

Ans ☒ 1. QP

☒ 2. GS

☒ 3. PG

☒ 4. IZ

Question ID : 630680372797

Option 1 ID : 6306801452472

Option 2 ID : 6306801452471

Option 3 ID : 6306801452473

Option 4 ID : 6306801452474

Status : Answered

Chosen Option : 2

Q.16 In the following question below are given some statements followed by some conclusions based on those statements. Taking the given statements to be true even if they seem to be at variance from commonly known facts. Read all the conclusions and then decide which of the given conclusion logically follows the given statements.

Statements:

I. All H are A.

II. No B is H.

Conclusion:

I. Some H are not B.

II. No B is A.

Ans ☒ 1. Both conclusions I and II follows

☒ 2. Only conclusion II follows

☒ 3. Only conclusion I follows

☒ 4. Neither conclusion follows

Question ID : 630680372790

Option 1 ID : 6306801452445

Option 2 ID : 6306801452444

Option 3 ID : 6306801452443

Option 4 ID : 6306801452446

Status : Answered

Chosen Option : 3

Q.17 What is the approximate value of $(11.0017)^2 + \sqrt{120.82} \times 4.896$?

Ans ☒ 1. 93

☒ 2. 123

☒ 3. 176

☒ 4. 234

Question ID : 630680372806

Option 1 ID : 6306801452508

Option 2 ID : 6306801452507

Option 3 ID : 6306801452510

Option 4 ID : 6306801452509

Status : Answered

Chosen Option : 3

Q.18 Eight persons namely - A, B, C, D, E, F, G and H live on separate floors of an eight-floor building in Friends apartment. Ground floor is numbered 1; first floor is numbered 2 and so on until the topmost floor which is numbered 8.Only two people live between A and B. G lives immediately above D. E lives immediately above C. E lives above H. F lives on an odd-numbered floor. Only one person lives between E and H. A lives on the floor numbered five. B lives above A. Who lives just below H?

- Ans

✓ 1. F

✗ 2. A

✗ 3. B

✗ 4. G

Question ID : 630680372788
Option 1 ID : 6306801452436
Option 2 ID : 6306801452435
Option 3 ID : 6306801452437
Option 4 ID : 6306801452438
Status : Answered
Chosen Option : 4

Q.19 In the following question, select the missing number from the given series.
6, 17, 29, 42, 56, ?

- Ans

✗ 1. 73

✗ 2. 78

✓ 3. 71

✗ 4. 70

Question ID : 630680372802
Option 1 ID : 6306801452494
Option 2 ID : 6306801452492
Option 3 ID : 6306801452493
Option 4 ID : 6306801452491
Status : Answered
Chosen Option : 3

Q.20 In a certain code language, 'MBTSA' is written as '26095', 'TDAN' is written as '5328', 'YZBN' is written as '0713'. What can be the code for 'M' in that code language?

- Ans

✓ 1. 6

✗ 2. 0

✗ 3. 2

✗ 4. 5

Question ID : 630680372796
Option 1 ID : 6306801452469
Option 2 ID : 6306801452470
Option 3 ID : 6306801452467
Option 4 ID : 6306801452468
Status : Answered
Chosen Option : 1

Q.21 Seven friends namely – Rahul, Sachin, Pradeep, Jatin, Yash, Anmol and Chirag are living in a building of seven floors, lowermost floor is numbered 1, floor above it is numbered 2 and so on till the top-most floor which is numbered 7. Each person lives on a single floor. Rahul lives on a floor numbered four. No one lives below Chirag. Number of persons live between Anmol and Rahul are same as the number of persons live between Rahul and Yash. Sachin lives five floor above Jatin. Anmol live above Yash. Who lives on the middle floor?

- Ans

☒ 1. Jatin

☒ 2. Chirag

☒ 3. Rahul

☒ 4. Sachin

Question ID : 630680372789

Option 1 ID : 6306801452442

Option 2 ID : 6306801452439

Option 3 ID : 6306801452441

Option 4 ID : 6306801452440

Status : Answered

Chosen Option : 3

Q.22 In a certain code language, ‘QMDOE’ is written as ‘53498’, ‘AMEZ’ is written as ‘9263’, ‘BDST’ is written as ‘7180’. What can be the code for ‘Q’ in that code language?

- Ans

☒ 1. 8

☒ 2. 9

☒ 3. 3

☒ 4. 4

Question ID : 630680372795

Option 1 ID : 6306801452466

Option 2 ID : 6306801452463

Option 3 ID : 6306801452464

Option 4 ID : 6306801452465

Status : Answered

Chosen Option : 4

Q.23 Six boys B1, B2, B3, B4, B5 and B6 are sitting in a row facing towards the south (not necessarily in the same order). B1 and B2 are at the ends. B3 is to the immediate right of B1. Only B4 is between B5 and B6. B5 is third to the left of B2.

Which of the following statement(s) is/are correct?
I. B3 is second to the right of B4.
II. B6 is to the immediate left of B2.

- Ans

☒ 1. Neither I nor II

☒ 2. Both I and II

☒ 3. Only II

☒ 4. Only I

Question ID : 630680372787

Option 1 ID : 6306801452434

Option 2 ID : 6306801452433

Option 3 ID : 6306801452432

Option 4 ID : 6306801452431

Status : Answered

Chosen Option : 3

Q.24 From point Y, Rakesh walks towards North and Rajesh walks towards West. After some time Rakesh is in which direction from Rajesh?

- Ans** ☒ 1. South-West
☒ 2. North-East
☐ 3. West
☐ 4. South

Question ID : 630680372801
 Option 1 ID : 6306801452490
 Option 2 ID : 6306801452487
 Option 3 ID : 6306801452488
 Option 4 ID : 6306801452489
 Status : Answered
 Chosen Option : 2

Q.25 A series is given with one term missing. Select the correct alternative from the given ones that will complete the series.
 PQRS, TKZI, XEHY, BYPO, ?

- Ans** ☐ 1. FMNR
☐ 2. FYRZ
☒ 3. FSXE
☐ 4. FTQY

Question ID : 630680372793
 Option 1 ID : 6306801452457
 Option 2 ID : 6306801452455
 Option 3 ID : 6306801452456
 Option 4 ID : 6306801452458
 Status : Answered
 Chosen Option : 3

Section : General Awareness

Q.1 Which among the following languages belongs to the Dravidian language family?

- Ans** ☒ 1. Gondi
☐ 2. Konkani
☐ 3. Mundari
☐ 4. Kinnauri

Question ID : 630680372776
 Option 1 ID : 6306801452390
 Option 2 ID : 6306801452388
 Option 3 ID : 6306801452389
 Option 4 ID : 6306801452387
 Status : Answered
 Chosen Option : 2

Q.2 Bharatskills Forum was launched under which Ministry of the Government of India?

- Ans** ☒ 1. Ministry of Skill Development and Entrepreneurship
☒ 2. Ministry of Communications
☒ 3. Ministry of Social Justice and Empowerment
☒ 4. Ministry of Education

Question ID : 630680372764
 Option 1 ID : 6306801452340
 Option 2 ID : 6306801452341
 Option 3 ID : 6306801452342
 Option 4 ID : 6306801452339
 Status : Answered
 Chosen Option : 1

Q.3 MATSYA 6000 vehicle is associated with which of the following missions?

- Ans** ☒ 1. Gaganyaan
☒ 2. Samudrayaan
☒ 3. Mangalyaan
☒ 4. Varunayaan

Question ID : 630680372763
 Option 1 ID : 6306801452336
 Option 2 ID : 6306801452337
 Option 3 ID : 6306801452338
 Option 4 ID : 6306801452335
 Status : Answered
 Chosen Option : 2

Q.4 In India, which of the following region is the storehouse of minerals?

- Ans** ☒ 1. The northern plains
☒ 2. The mountain regions
☒ 3. The plateau regions
☒ 4. The coastal plains

Question ID : 630680372780
 Option 1 ID : 6306801452404
 Option 2 ID : 6306801452403
 Option 3 ID : 6306801452405
 Option 4 ID : 6306801452406
 Status : Answered
 Chosen Option : 3

Q.5 Which of the following statements is/are correct regarding 'Hamari Dharohar' scheme in India?

- I. This scheme has been formulated to preserve the rich heritage of minority communities of India.
II. This scheme has been merged as a component of Pradhan Mantri Virasat Ka Samvardhan (PM VIKAS) scheme with effect from Financial Year 2022-23.

Ans ☒ 1. Both I and II
☒ 2. Only I
☒ 3. Only II
☒ 4. Neither I nor II

Question ID : 630680372765
Option 1 ID : 6306801452345
Option 2 ID : 6306801452343
Option 3 ID : 6306801452344
Option 4 ID : 6306801452346
Status : Not Answered
Chosen Option : --

Q.6 Which of the following statements is correct regarding the Arya Samaj?

- I. It was founded in 1865.
II. It was founded by Swami Dayanand Saraswati.

Ans ☒ 1. Only I
☒ 2. Only II
☒ 3. Neither I nor II
☒ 4. Both I and II

Question ID : 630680372770
Option 1 ID : 6306801452363
Option 2 ID : 6306801452364
Option 3 ID : 6306801452366
Option 4 ID : 6306801452365
Status : Answered
Chosen Option : 4

Q.7 M4 measure of money supply can be written as _____.

Ans ☒ 1. $M2 + (\text{Total deposits with Post Office savings organisations} - \text{National savings certificates})$
☒ 2. $M3 + (\text{Total deposits with Post Office savings organisations} - \text{National savings certificates})$
☒ 3. $M3 + (\text{Total deposits with Post Office savings organisations} + \text{National savings certificates})$
☒ 4. $M2 + (\text{Total deposits with Post Office savings organisations} + \text{National savings certificates})$

Question ID : 630680372767
Option 1 ID : 6306801452352
Option 2 ID : 6306801452351
Option 3 ID : 6306801452353
Option 4 ID : 6306801452354
Status : Answered
Chosen Option : 3

Q.8 The Durand Cup is associated with _____.

- Ans ☒ 1. cricket
☒ 2. hockey
☒ 3. football
☒ 4. tennis

Question ID : 630680372761
Option 1 ID : 6306801452327
Option 2 ID : 6306801452329
Option 3 ID : 6306801452328
Option 4 ID : 6306801452330
Status : Answered
Chosen Option : 3

Q.9 The policy of 'paramountcy' was initiated under _____.

- Ans ☒ 1. Lord Cornwallis
☒ 2. Lord Dalhousie
☒ 3. Lord William Bentinck
☒ 4. Lord Hastings

Question ID : 630680372769
Option 1 ID : 6306801452359
Option 2 ID : 6306801452361
Option 3 ID : 6306801452362
Option 4 ID : 6306801452360
Status : Not Answered
Chosen Option : --

Q.10 As per Census 2011, which among the following states has male-female sex ratio above 950?

- I. Assam
II. Uttarakhand

- Ans ☒ 1. Neither I nor II
☒ 2. Only II
☒ 3. Only I
☒ 4. Both I and II

Question ID : 630680372784
Option 1 ID : 6306801452422
Option 2 ID : 6306801452420
Option 3 ID : 6306801452419
Option 4 ID : 6306801452421
Status : Not Answered
Chosen Option : --

Q.11 Which of the following pairs of 'player – sports' is correctly matched?

- I. Nayan Moni Saikia – Kabaddi
II. Sreeja Akula – Table Tennis

Ans ☒ 1. Only II

☒ 2. Only I

☒ 3. Neither I nor II

☒ 4. Both I and II

Question ID : 630680372762

Option 1 ID : 6306801452332

Option 2 ID : 6306801452331

Option 3 ID : 6306801452334

Option 4 ID : 6306801452333

Status : Not Answered

Chosen Option : --

Q.12 Which of the following pairs of 'festival – state' is correctly matched?

- I. Kambala – Karnataka
II. Bonalu – Himachal Pradesh

Ans ☒ 1. Only I

☒ 2. Both I and II

☒ 3. Only II

☒ 4. Neither I nor II

Question ID : 630680372779

Option 1 ID : 6306801452399

Option 2 ID : 6306801452401

Option 3 ID : 6306801452400

Option 4 ID : 6306801452402

Status : Not Answered

Chosen Option : --

Q.13 Mongols ruler Genghis Khan ruled over which of the following regions?

- I. Parts of Central Asia
II. Parts of China

Ans ☒ 1. Only I

☒ 2. Neither I nor II

☒ 3. Both I and II

☒ 4. Only II

Question ID : 630680372773

Option 1 ID : 6306801452375

Option 2 ID : 6306801452378

Option 3 ID : 6306801452377

Option 4 ID : 6306801452376

Status : Answered

Chosen Option : 3

Q.14 The _____ is a relation between the quantity of the good chosen by a consumer and the price of the good.

- Ans**
- ☒ 1. indifference curve
 - ☒ 2. Lorenz curve
 - ☒ 3. Laffer curve
 - ☒ 4. demand curve

Question ID : 630680372766
Option 1 ID : 6306801452350
Option 2 ID : 6306801452349
Option 3 ID : 6306801452347
Option 4 ID : 6306801452348
Status : Not Answered
Chosen Option : --

Q.15 Which of the following statement is correct?

- I. The one horned rhinoceros are found in Jungles of Assam and West Bengal.
- II. Tropical Evergreen Forests are found in heavy rainfall areas of western ghats.

- Ans**
- ☒ 1. Both I and II
 - ☒ 2. Neither I nor II
 - ☒ 3. Only I
 - ☒ 4. Only II

Question ID : 630680372782
Option 1 ID : 6306801452413
Option 2 ID : 6306801452414
Option 3 ID : 6306801452411
Option 4 ID : 6306801452412
Status : Not Answered
Chosen Option : --

Q.16 Which of the following tax is mentioned as 'kadamai' in the inscriptions of the Cholas?

- Ans**
- ☒ 1. Forced labour
 - ☒ 2. Land revenue
 - ☒ 3. Sales and Purchase tax
 - ☒ 4. Police tax

Question ID : 630680372771
Option 1 ID : 6306801452370
Option 2 ID : 6306801452367
Option 3 ID : 6306801452369
Option 4 ID : 6306801452368
Status : Not Answered
Chosen Option : --

Q.17 V S Naipaul won the Booker Prize in 1997 for which of the following books?

- Ans**
- ☒ 1. Midnight Children
 - ☒ 2. The Inheritance of Loss
 - ☒ 3. In a Free State
 - ☒ 4. The God of Small Things

Question ID : 630680372774
Option 1 ID : 6306801452379
Option 2 ID : 6306801452382
Option 3 ID : 6306801452381
Option 4 ID : 6306801452380
Status : Answered
Chosen Option : 2

Q.18 In 1930, Mahatma Gandhi started his famous salt march accompanied by _____ of his trusted volunteers.

- Ans** ☒ 1. 82
☒ 2. 78
☒ 3. 56
☒ 4. 64

Question ID : 630680372768
 Option 1 ID : 6306801452358
 Option 2 ID : 6306801452357
 Option 3 ID : 6306801452355
 Option 4 ID : 6306801452356
 Status : Not Answered
 Chosen Option : --

Q.19 The deflection of winds towards right in the northern and left in the southern hemisphere is also known as _____.

- Ans** ☒ 1. Couloumb's law
☒ 2. Lenz's law
☒ 3. Newton's law
☒ 4. Ferrel's law

Question ID : 630680372781
 Option 1 ID : 6306801452409
 Option 2 ID : 6306801452407
 Option 3 ID : 6306801452410
 Option 4 ID : 6306801452408
 Status : Answered
 Chosen Option : 4

Q.20 Gulam Mohammad Shaikh won the Sahitya Akademi Award 2022 for which language?

- Ans** ☒ 1. Gujarati
☒ 2. Sindhi
☒ 3. Urdu
☒ 4. Kashmiri

Question ID : 630680372775
 Option 1 ID : 6306801452385
 Option 2 ID : 6306801452383
 Option 3 ID : 6306801452386
 Option 4 ID : 6306801452384
 Status : Answered
 Chosen Option : 1

Q.21 Which of the following festivals is associated with boat race in Manipur?

- Ans** ☒ 1. Cheiraoba
☒ 2. Ningol Chakkouba
☒ 3. Hiyang Tannaba
☒ 4. Sanamahi Cheng Hongba

Question ID : 630680372778
 Option 1 ID : 6306801452398
 Option 2 ID : 6306801452395
 Option 3 ID : 6306801452396
 Option 4 ID : 6306801452397
 Status : Not Answered
 Chosen Option : --

Q.22 As per Census 2011, the literacy rate for males in India is _____.

- Ans
- ☐ 1. 72.98 percent
 - ☐ 2. 78.9 percent
 - ☐ 3. 80.9 percent
 - ☒ 4. 64.63 percent

Question ID : 630680372783
Option 1 ID : 6306801452416
Option 2 ID : 6306801452417
Option 3 ID : 6306801452418
Option 4 ID : 6306801452415
Status : Answered
Chosen Option : 2

Q.23 Which of the following pair is correctly matched?

- I. Animals – Multicellular
- II. Chlamydomonas – Unicellular

- Ans
- ☐ 1. Only II
 - ☐ 2. Only I
 - ☐ 3. Neither I nor II
 - ☒ 4. Both I and II

Question ID : 630680372785
Option 1 ID : 6306801452424
Option 2 ID : 6306801452423
Option 3 ID : 6306801452426
Option 4 ID : 6306801452425
Status : Not Answered
Chosen Option : --

Q.24 Which among the following statements is correct regarding Konkani language?

- I. It is written in the Devanagari script.
- II. It was included in the 8th Schedule of the Indian Constitution in 1967.

- Ans
- ☐ 1. Neither I nor II
 - ☐ 2. Both I and II
 - ☒ 3. Only I
 - ☐ 4. Only II

Question ID : 630680372777
Option 1 ID : 6306801452394
Option 2 ID : 6306801452393
Option 3 ID : 6306801452391
Option 4 ID : 6306801452392
Status : Answered
Chosen Option : 2

Q.25 Which of the following dynasty ruled between 1320 and 1414 in Delhi?

- Ans**
- ☐ 1. Khalji dynasty
 - ☐ 2. Sayyid dynasty
 - ☐ 3. Lodi dynasty
 - ☒ 4. Tughluq dynasty

Question ID : 630680372772
 Option 1 ID : 6306801452374
 Option 2 ID : 6306801452371
 Option 3 ID : 6306801452372
 Option 4 ID : 6306801452373
 Status : Answered
 Chosen Option : 2

Section : Quantitative Aptitude (Basic Arithmetic Skill)

Q.1 Average of 40 numbers is 12. If every number is doubled, then what will be the new average of the numbers?

- Ans**
- ☐ 1. 27
 - ☐ 2. 30
 - ☐ 3. 26
 - ☒ 4. 24

Question ID : 630680372825
 Option 1 ID : 6306801452584
 Option 2 ID : 6306801452586
 Option 3 ID : 6306801452583
 Option 4 ID : 6306801452585
 Status : Answered
 Chosen Option : 4

Q.2 If $2^{3a+1} = 1024$ then find the value of a?

- Ans**
- ☐ 1. 5
 - ☐ 2. 2
 - ☐ 3. 4
 - ☒ 4. 3

Question ID : 630680372827
 Option 1 ID : 6306801452593
 Option 2 ID : 6306801452591
 Option 3 ID : 6306801452594
 Option 4 ID : 6306801452592
 Status : Answered
 Chosen Option : 4

Q.3 40% of the people read newspaper A, 50% read newspaper B and 10% read both the papers. What percentage of the people read neither newspaper?

- Ans**
- ☒ 1. 25%
 - ☒ 2. 40%
 - ☒ 3. 20%
 - ☒ 4. 15%

Question ID : 630680372815
Option 1 ID : 6306801452544
Option 2 ID : 6306801452543
Option 3 ID : 6306801452545
Option 4 ID : 6306801452546
Status : Answered
Chosen Option : 3

Q.4 A class is $12\frac{1}{4}$ m long and 7 m wide. The maximum length of a square tile to fill the floor of the class with whole number of tiles should be:

- Ans**
- ☒ 1. 250 cm
 - ☒ 2. 300 cm
 - ☒ 3. 175 cm
 - ☒ 4. 200 cm

Question ID : 630680372831
Option 1 ID : 6306801452608
Option 2 ID : 6306801452610
Option 3 ID : 6306801452607
Option 4 ID : 6306801452609
Status : Answered
Chosen Option : 1

Q.5 Two vessels P and Q contain milk and water mixed in the ratio 5 : 3 and 2 : 3. When these mixtures are mixed to form a new mixture containing half milk and half water, they must be taken in the ratio:

- Ans**
- ☒ 1. 2 : 5
 - ☒ 2. 4 : 5
 - ☒ 3. 6 : 3
 - ☒ 4. 5 : 2

Question ID : 630680372819
Option 1 ID : 6306801452562
Option 2 ID : 6306801452559
Option 3 ID : 6306801452561
Option 4 ID : 6306801452560
Status : Answered
Chosen Option : 1

Q.6 Average age of 7 boys of a class is 28 years. Average age of first three boys is 30 years. Age of fourth boy is 4 years less than the age of fifth boy. Ages of last two boys is same and is 5 year more than the average age of first three boys. What is the average age of fourth and fifth boys?

- Ans**
- ☒ 1. 11 years
 - ☒ 2. 12 years
 - ☒ 3. 18 years
 - ☒ 4. 36 years

Question ID : 630680372813
 Option 1 ID : 6306801452535
 Option 2 ID : 6306801452537
 Option 3 ID : 6306801452538
 Option 4 ID : 6306801452536
 Status : Answered
 Chosen Option : 3

Q.7 The marked price of a bulb is 10% more than the cost price and a discount of 10% is given on the marked price. What is the profit or loss percentage of the seller in this type of sale?

- Ans**
- ☒ 1. Gain 10%
 - ☒ 2. Loses 1%
 - ☒ 3. Bears no Loss and no gain
 - ☒ 4. Gain 1%

Question ID : 630680372818
 Option 1 ID : 6306801452558
 Option 2 ID : 6306801452556
 Option 3 ID : 6306801452557
 Option 4 ID : 6306801452555
 Status : Answered
 Chosen Option : 2

Q.8 What would be the annual interest accrued on a deposit of Rs. 20,000 in a bank that pays a 8 % per annum rate of simple interest

- Ans**
- ☒ 1. 1600
 - ☒ 2. 1680
 - ☒ 3. 800
 - ☒ 4. 400

Question ID : 630680372821
 Option 1 ID : 6306801452568
 Option 2 ID : 6306801452570
 Option 3 ID : 6306801452569
 Option 4 ID : 6306801452567
 Status : Answered
 Chosen Option : 1

Q.9 If $\cos \theta = \frac{8}{17}$, then find the value of $\tan \theta$. θ is acute angle.

- Ans
- ☒ 1. $\frac{15}{17}$
 - ☒ 2. $\frac{8}{17}$
 - ☒ 3. $\frac{8}{15}$
 - ☒ 4. $\frac{15}{8}$

Question ID : 630680372835
 Option 1 ID : 6306801452624
 Option 2 ID : 6306801452625
 Option 3 ID : 6306801452623
 Option 4 ID : 6306801452626
 Status : Answered
 Chosen Option : 4

Q.10 A rectangular room 3.78 m long and 5.25 m broad is to be paved exactly with square marble, all of the same size. The minimum number of such marble is:

- Ans
- ☒ 1. 250
 - ☒ 2. 300
 - ☒ 3. 400
 - ☒ 4. 450

Question ID : 630680372832
 Option 1 ID : 6306801452614
 Option 2 ID : 6306801452613
 Option 3 ID : 6306801452611
 Option 4 ID : 6306801452612
 Status : Not Answered
 Chosen Option : --

Q.11 If $\sin \theta = \frac{60}{61}$, then find value of $\sec \theta$. θ is acute angle.

- Ans
- ☒ 1. $\frac{11}{61}$
 - ☒ 2. $\frac{61}{11}$
 - ☒ 3. $\frac{61}{60}$
 - ☒ 4. $\frac{60}{11}$

Question ID : 630680372834
 Option 1 ID : 6306801452619
 Option 2 ID : 6306801452621
 Option 3 ID : 6306801452622
 Option 4 ID : 6306801452620
 Status : Answered
 Chosen Option : 2

Q.12 A and B can complete a work in 12 days and 15 days respectively. They started doing the work together but after 5 days B had to leave and A alone completed the remaining work. The whole work was completed in :

- Ans**
- ☒ 1. 15 days
 - ☒ 2. 8 days
 - ☒ 3. 12 days
 - ☒ 4. 16 days

Question ID : 630680372822
Option 1 ID : 6306801452571
Option 2 ID : 6306801452574
Option 3 ID : 6306801452573
Option 4 ID : 6306801452572
Status : Answered
Chosen Option : 2

Q.13 The ratio of the length and breadth of a area is 3 : 2. If the breadth is 40 m less than the length, what is the perimeter of the field ?

- Ans**
- ☒ 1. 200 m
 - ☒ 2. 250 m
 - ☒ 3. 400 m
 - ☒ 4. 300 m

Question ID : 630680372829
Option 1 ID : 6306801452599
Option 2 ID : 6306801452601
Option 3 ID : 6306801452600
Option 4 ID : 6306801452602
Status : Answered
Chosen Option : 3

Q.14 In an examination, a child scored 30% marks in the first paper out of a total of 180. How much should he score in the second paper out of a total of 150, if he is to get an overall average of at least 50%?

- Ans**
- ☒ 1. 44 %
 - ☒ 2. 43 %
 - ☒ 3. 73 %
 - ☒ 4. 74 %

Question ID : 630680372816
Option 1 ID : 6306801452547
Option 2 ID : 6306801452548
Option 3 ID : 6306801452550
Option 4 ID : 6306801452549
Status : Answered
Chosen Option : 2

Q.15 The solutions of the equation $x + y - 5 = 0$ & $x - y - 3 = 0$ is:

- Ans
- ☒ 1. $(-1, 4)$
 - ☒ 2. $(4, -1)$
 - ☒ 3. $(4, 1)$
 - ☒ 4. $(1, 4)$

Question ID : 630680372826
Option 1 ID : 6306801452588
Option 2 ID : 6306801452589
Option 3 ID : 6306801452590
Option 4 ID : 6306801452587
Status : Not Answered
Chosen Option : --

Q.16 The sum of the three consecutive odd numbers is 75. What is the average of the three numbers?

- Ans
- ☒ 1. 29
 - ☒ 2. 23
 - ☒ 3. 25
 - ☒ 4. 19

Question ID : 630680372824
Option 1 ID : 6306801452582
Option 2 ID : 6306801452581
Option 3 ID : 6306801452579
Option 4 ID : 6306801452580
Status : Answered
Chosen Option : 3

Q.17 The length of a rectangular land is $4\frac{1}{2}$ times that of its breadth. If the area of the land is 200 square metres, then what is its length?

- Ans
- ☒ 1. 2.8 m
 - ☒ 2. 2.0 m
 - ☒ 3. 6.2 m
 - ☒ 4. 2.62 m

Question ID : 630680372828
Option 1 ID : 6306801452596
Option 2 ID : 6306801452595
Option 3 ID : 6306801452597
Option 4 ID : 6306801452598
Status : Not Answered
Chosen Option : --

Q.18 A goat passing through two hands, is sold at a profit of 38% at the original cost price. If the first shopkeeper makes a profit of 20%, then the profit percent made by the second is:

- Ans**
- ☒ 1. 10 %
 - ☒ 2. 5 %
 - ☒ 3. 15 %
 - ☒ 4. 12 %

Question ID : 630680372817
 Option 1 ID : 6306801452552
 Option 2 ID : 6306801452554
 Option 3 ID : 6306801452551
 Option 4 ID : 6306801452553
 Status : **Not Answered**
 Chosen Option : --

Q.19 The perimeter of a floor of a hall is 18 m. What is the area of four walls of the hall, if its height is 3 m

- Ans**
- ☒ 1. 30 m²
 - ☒ 2. 24 m²
 - ☒ 3. 50 m²
 - ☒ 4. 54 m²

Question ID : 630680372833
 Option 1 ID : 6306801452616
 Option 2 ID : 6306801452617
 Option 3 ID : 6306801452615
 Option 4 ID : 6306801452618
 Status : **Answered**
 Chosen Option : 4

Q.20 A rectangular Table has an area of 120 square metres and a perimeter of 46 m., The length of its diagonal is:

- Ans**
- ☒ 1. 20 m
 - ☒ 2. 30 m
 - ☒ 3. 22 m
 - ☒ 4. 17 m

Question ID : 630680372830
 Option 1 ID : 6306801452605
 Option 2 ID : 6306801452604
 Option 3 ID : 6306801452603
 Option 4 ID : 6306801452606
 Status : **Answered**
 Chosen Option : 4

Q.21 What is the value of $\sqrt{5476}$?

- Ans ☒ 1. 74
☐ 2. 56
☐ 3. 64
☐ 4. 66

Question ID : 630680372811
 Option 1 ID : 6306801452530
 Option 2 ID : 6306801452527
 Option 3 ID : 6306801452528
 Option 4 ID : 6306801452529
 Status : Answered
 Chosen Option : 1

Q.22 How many numbers between 100 and 500 are completely divisible by 2, 3 and 5?

- Ans ☐ 1. 16
☒ 2. 13
☐ 3. 15
☐ 4. 17

Question ID : 630680372812
 Option 1 ID : 6306801452533
 Option 2 ID : 6306801452531
 Option 3 ID : 6306801452532
 Option 4 ID : 6306801452534
 Status : Not Answered
 Chosen Option : --

Q.23 In what ratio must wheat be mixed at Rs 5 per kg to wheat at Rs 20 per kg so that mixture be worth Rs 15 per kg?

- Ans ☐ 1. 1 : 4
☐ 2. 2 : 1
☐ 3. 4 : 1
☒ 4. 1 : 2

Question ID : 630680372814
 Option 1 ID : 6306801452540
 Option 2 ID : 6306801452541
 Option 3 ID : 6306801452539
 Option 4 ID : 6306801452542
 Status : Answered
 Chosen Option : 4

Q.24 In a mixture of 60 liters, the ratio of sugar and water is 2 : 1. If this ratio is to be 1 : 2, the quantity of water to be further added is:

- Ans**
- ☒ 1. 10 liters
 - ☒ 2. 30 liters
 - ☒ 3. 50 liters
 - ☒ 4. 60 liters

Question ID : 630680372820
Option 1 ID : 6306801452565
Option 2 ID : 6306801452563
Option 3 ID : 6306801452564
Option 4 ID : 6306801452566
Status : Answered
Chosen Option : 4

Q.25 A and B can do a work in 10 days, B and C can do the same work in 12 days. A, B and C together can finish it in 6 days. A and C together will do it in:

- Ans**
- ☒ 1. $7\frac{2}{3}$ Days
 - ☒ 2. $6\frac{2}{3}$ Days
 - ☒ 3. $7\frac{1}{3}$ Days
 - ☒ 4. $6\frac{1}{3}$ Days

Question ID : 630680372823
Option 1 ID : 6306801452578
Option 2 ID : 6306801452576
Option 3 ID : 6306801452577
Option 4 ID : 6306801452575
Status : Answered
Chosen Option : 2

Section : English Language (Basic Knowledge)

Q.1 Select the most appropriate option to complete the following sentence:
He tried _____ answering my question.

- Ans**
- ☒ 1. Did avoid
 - ☒ 2. To avoid
 - ☒ 3. Done avoiding
 - ☒ 4. To avoiding

Question ID : 630680372752
Option 1 ID : 6306801452293
Option 2 ID : 6306801452292
Option 3 ID : 6306801452294
Option 4 ID : 6306801452291
Status : Answered
Chosen Option : 2

Q.2 Choose the most logical order of the sentences from among the four given choices to construct a coherent paragraph.

Assessing a company's financial performance is an integral part of the decision-making process for investors, creditors, and other stakeholders.

A) Financial ratios are typically categorized into liquidity, activity, profitability, capital budgeting, and market ratios.

B) Financial ratios are an essential tool that assists in evaluating a firm's performance by comparing it to its industry average, past performance, and other companies.

C) While all these ratios provide valuable insights into a company's financial performance, activity ratios are the most important ones.

D) Activity ratios help to analyze how efficiently a company uses its funds. These ratios measure a company's ability to turn its assets into cash and generate sales revenue.

- Ans ☒ 1. ABDC
☒ 2. BACD
☒ 3. ABCD
☒ 4. BADC

Question ID : 630680372744
Option 1 ID : 6306801452260
Option 2 ID : 6306801452259
Option 3 ID : 6306801452261
Option 4 ID : 6306801452262
Status : Answered
Chosen Option : 2

Q.3 Choose the most appropriate meaning of the below mentioned word:
Hefty

- Ans ☒ 1. Flimsy
☒ 2. Feathery
☒ 3. Massive
☒ 4. Underweight

Question ID : 630680372756
Option 1 ID : 6306801452310
Option 2 ID : 6306801452309
Option 3 ID : 6306801452307
Option 4 ID : 6306801452308
Status : Answered
Chosen Option : 3

Q.4 Despite the _____ of entertainment, the life of a professional entertainer is not an easy one.

- Ans ☒ 1. galore
☒ 2. repulsion
☒ 3. challenge
☒ 4. allure


Question ID : 630680372748
Option 1 ID : 6306801452276
Option 2 ID : 6306801452278
Option 3 ID : 6306801452277
Option 4 ID : 6306801452275
Status : Answered
Chosen Option : 4


Q.5 Choose the correct answer from below options that suits the below mentioned question:
 The tornado _____ through the city's industrial district.

- Ans

 1. tour

 2. tore

 3. tor


 4. torr


Question ID : 630680372760
 Option 1 ID : 6306801452325
 Option 2 ID : 6306801452326
 Option 3 ID : 6306801452324
 Option 4 ID : 6306801452323
 Status : Answered
 Chosen Option : 3


Q.6 Choose the most logical order of the sentences from among the four given choices to construct a coherent paragraph.


Food waste is a major issue globally, where millions of tons of food fit for consumption are discarded by consumers and retailers in industrialized nations.
 A) Environmentally, food waste leads to more rotting food, creating more methane, which is one of the most harmful greenhouse gases contributing to climate change.
 B) Wastage of food also wastes other crucial resources such as energy and water used in food production and cooking, which could have been used more effectively to feed the hungry and support sustainable food production.
 C) We should all play our part by becoming more conscious of our food choices and making informed decisions.
 D) Reducing food waste is our collective responsibility as individuals, families, and communities.

- Ans

 1. DABC

 2. ABDC

 3. DACB

 4. BADC

Question ID : 630680372745
 Option 1 ID : 6306801452265
 Option 2 ID : 6306801452263
 Option 3 ID : 6306801452266
 Option 4 ID : 6306801452264
 Status : Answered
 Chosen Option : 1

Q.7 Choose the most appropriate one-word substitution for
“A fortress on a commanding height for defense of a city”

- Ans

 1. Headquarters

 2. Metropolis

 3. Megapolis

 4. Citadel

Question ID : 630680372740
 Option 1 ID : 6306801452246
 Option 2 ID : 6306801452243
 Option 3 ID : 6306801452244
 Option 4 ID : 6306801452245
 Status : Answered
 Chosen Option : 4

Q.8 Carl and his brother were planning to go on a cruise to Malaysia. There were three main cruise companies for them to choose _____.

- Ans** ☒ 1. from
☒ 2. with
☒ 3. in
☒ 4. at

Question ID : 630680372749
 Option 1 ID : 6306801452282
 Option 2 ID : 6306801452279
 Option 3 ID : 6306801452281
 Option 4 ID : 6306801452280
 Status : Answered
 Chosen Option : 1

Q.9 Select the most appropriate option to complete the following sentence:
 My car isn't very reliable. It keeps _____.

- Ans** ☒ 1. Broke down
☒ 2. Breaking down
☒ 3. To get broke
☒ 4. Break down

Question ID : 630680372751
 Option 1 ID : 6306801452287
 Option 2 ID : 6306801452289
 Option 3 ID : 6306801452290
 Option 4 ID : 6306801452288
 Status : Answered
 Chosen Option : 2

Q.10 Choose the most appropriate meaning of the below quoted idiom:
"Speak of the devil"

- Ans** ☒ 1. Mentioning someone and they appear out of nowhere
☒ 2. Speaking of all the evil things to scare someone
☒ 3. Breaking somebody's trust due to devil intentions
☒ 4. Interrupt somebody's conversation intentionally

Question ID : 630680372753
 Option 1 ID : 6306801452297
 Option 2 ID : 6306801452295
 Option 3 ID : 6306801452296
 Option 4 ID : 6306801452298
 Status : Answered
 Chosen Option : 1

Q.11 The owner said that he had already sent his car to the mechanic and thankfully, it was just a minor paint job. The damages only ____ up to \$300.

- Ans

☒

1. came

☐

2. gone

☐

3. went

☐

4. come

Question ID : 630680372747

Option 1 ID : 6306801452273

Option 2 ID : 6306801452274

Option 3 ID : 6306801452272

Option 4 ID : 6306801452271

Status : Answered

Chosen Option : 3

Q.12 Choose the most appropriate one-word substitution for “one who collects postage stamps”

- Ans

☐

1. Curator

☐

2. Philanthropist

☒

3. Philatelist

☐

4. Numismatist

Question ID : 630680372741

Option 1 ID : 6306801452250

Option 2 ID : 6306801452249

Option 3 ID : 6306801452247

Option 4 ID : 6306801452248

Status : Answered

Chosen Option : 3

Q.13 Choose the most appropriate meaning of the below quoted idiom “Draw the line”

- Ans

☐

1. To say something else and mean differently

☒

2. To stop before a point where something okay gets not okay.

☐

3. To make someone extremely comfortable in a conversation

☐

4. Making beautiful painting

Question ID : 630680372754

Option 1 ID : 6306801452301

Option 2 ID : 6306801452302

Option 3 ID : 6306801452300

Option 4 ID : 6306801452299

Status : Answered

Chosen Option : 2

Q.14 Choose the correct answer from below options that suits the below mentioned question:
I don't know _____ I should leave or stay.

- Ans

☒

1. wether

☒

2. whether

☒

3. wither

☒

4. weather

Question ID : 630680372759

Option 1 ID : 6306801452322

Option 2 ID : 6306801452321

Option 3 ID : 6306801452320

Option 4 ID : 6306801452319

Status : Answered

Chosen Option : 2

Q.15 Choose the answer below that spells the word in bold correctly:
The Renaissance first emphasized the value of scientific progress, but it was not until the 18th century Industrial Revolution in the West that the impact of science on everyday living became **aparent**.

- Ans

☒

1. apperent

☒

2. aparrent

☒

3. apparent

☒

4. aperent

Question ID : 630680372758

Option 1 ID : 6306801452315

Option 2 ID : 6306801452317

Option 3 ID : 6306801452316

Option 4 ID : 6306801452318

Status : Answered

Chosen Option : 3

Q.16 Parts of the following sentence have been given as option that contains an error in spelling. If you don't find any error, mark "No error" as your answer.
In pre-scientific times, food was often monotoneous and dangerous, but today it is varied, thanks to improved sea, land, and air transport.

- Ans

☒

1. often

☒

2. monotoneous

☒

3. No error

☒

4. dangerous

Question ID : 630680372757

Option 1 ID : 6306801452313

Option 2 ID : 6306801452311

Option 3 ID : 6306801452314

Option 4 ID : 6306801452312

Status : Answered

Chosen Option : 2

Q.17 Select the most appropriate option to complete the following sentence:
Sue works_____. She never seems to stop.

- Ans ☒ 1. increasingly
☒ 2. fluently
☒ 3. continuously
☒ 4. amazingly

Question ID : 630680372750
Option 1 ID : 6306801452285
Option 2 ID : 6306801452283
Option 3 ID : 6306801452284
Option 4 ID : 6306801452286
Status : Answered
Chosen Option : 3

Q.18 Choose the most appropriate meaning of the below mentioned word:
Nasty

- Ans ☒ 1. Awful
☒ 2. Polite
☒ 3. Agreeable
☒ 4. Calm

Question ID : 630680372755
Option 1 ID : 6306801452306
Option 2 ID : 6306801452305
Option 3 ID : 6306801452303
Option 4 ID : 6306801452304
Status : Answered
Chosen Option : 1

Q.19 Select the most appropriate option that can substitute the underlined segment in the given sentence.
If you try to do something every day you will made progress.

- Ans ☒ 1. Will be made
☒ 2. Won't make
☒ 3. Might be
☒ 4. Will make

Question ID : 630680372742
Option 1 ID : 6306801452252
Option 2 ID : 6306801452251
Option 3 ID : 6306801452253
Option 4 ID : 6306801452254
Status : Answered
Chosen Option : 4

Q.20 Select the most appropriate option that can substitute the underlined segment in the given sentence.
It is very difficult for her to _____ secret.

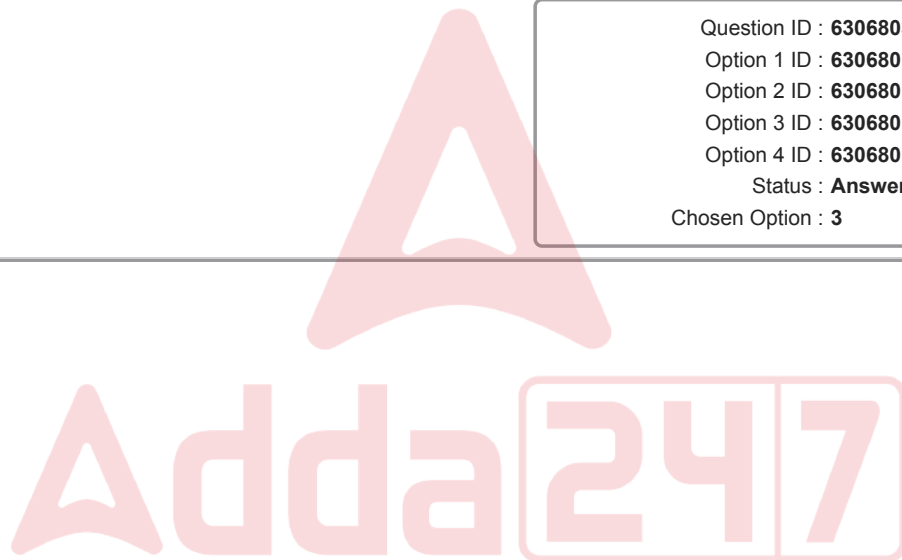
- Ans** ☒ 1. Cry a secret
☒ 2. Keep a secret
☒ 3. Make a secret
☒ 4. Touch a secret

Question ID : 630680372743
Option 1 ID : 6306801452258
Option 2 ID : 6306801452257
Option 3 ID : 6306801452255
Option 4 ID : 6306801452256
Status : Answered
Chosen Option : 2

Q.21 Early this morning, I was in my car preparing _____ my children to school.

- Ans** ☒ 1. To driving
☒ 2. To drove
☒ 3. to drive
☒ 4. drove

Question ID : 630680372746
Option 1 ID : 6306801452267
Option 2 ID : 6306801452268
Option 3 ID : 6306801452269
Option 4 ID : 6306801452270
Status : Answered
Chosen Option : 3



Comprehension:

Read the following passage and answer the given questions:
Forests have been an integral part of human life since the earliest times. They have provided shelter, transportation, and various products essential for our daily needs. The value of forests has been recognized throughout history, and measures have been taken to prevent their wanton and needless destruction.

Wood has been the basic material used for shelter since primitive times. From the wigwam to the African hut, wood has been used to build frames for housing to provide protection from the elements and wild animals. Even today, wood remains an important part of modern construction, from frames and doors to furniture. Forests provide important resources for modern industries, such as the production of paper. Logs and timber are cut and turned into wood pulp for the production of paper, including daily newspapers. The demand for paper is high, and this underscores the importance of forests in our lives. Forests are also a source of important oils, such as turpentine from North American pine forests and palm oil from palm forests. Olive oil is produced from olive trees, and the American sugar maple provides sugar from its sap. Other forest products include flock for mattresses from the cotton trees of West Africa and the shelter necessary for the growth of cocoa beans.

Forests play a vital role in preventing soil erosion. They protect the soil from winds and water, and they revitalize the soil with humus and vegetable matter. Forests also attract rain clouds, and clearing forests can lead to desertification. Forests provide habitat and shelter for wildlife and insects. Climbing shrubs, flowers, and creepers thrive in the protective environment of forests. Whether tropical, deciduous, or coniferous, forests offer natural beauty that humans can appreciate.

In conclusion, forests and the trees they are composed of are vital to our existence. Their importance is reflected in the many ways they have contributed to human life, from providing shelter and transportation to supplying essential products for modern industries. Preserving forests ensures a sustainable supply of timber and other forest products while protecting the environment and its inhabitants.

SubQuestion No : 22

Q.22 Identify the inferences drawn from the passage

- Ans ☒ 1. Whether tropical, deciduous, or coniferous, forests offer natural beauty that humans can appreciate.
- ☒ 2. Forests provide important resources for modern industries, such as the production of paper. Logs and timber are cut and turned into wood pulp for the production of paper.
- ☒ 3. Forests and the trees they are composed of are vital to our existence. Their importance is reflected in the many ways they have contributed to human life, from providing shelter and transportation to supplying essential products for modern industries.
- ☒ 4. The value of forests has been recognized throughout history, however measures have not been taken to prevent their wanton and needless destruction.

Question ID : 630680372739
Option 1 ID : 6306801452242
Option 2 ID : 6306801452240
Option 3 ID : 6306801452241
Option 4 ID : 6306801452239

Status : Answered
Chosen Option : 3

Comprehension:

Read the following passage and answer the given questions:

Forests have been an integral part of human life since the earliest times. They have provided shelter, transportation, and various products essential for our daily needs. The value of forests has been recognized throughout history, and measures have been taken to prevent their wanton and needless destruction.

Wood has been the basic material used for shelter since primitive times. From the wigwam to the African hut, wood has been used to build frames for housing to provide protection from the elements and wild animals. Even today, wood remains an important part of modern construction, from frames and doors to furniture. Forests provide important resources for modern industries, such as the production of paper. Logs and timber are cut and turned into wood pulp for the production of paper, including daily newspapers. The demand for paper is high, and this underscores the importance of forests in our lives. Forests are also a source of important oils, such as turpentine from North American pine forests and palm oil from palm forests. Olive oil is produced from olive trees, and the American sugar maple provides sugar from its sap. Other forest products include flock for mattresses from the cotton trees of West Africa and the shelter necessary for the growth of cocoa beans.

Forests play a vital role in preventing soil erosion. They protect the soil from winds and water, and they revitalize the soil with humus and vegetable matter. Forests also attract rain clouds, and clearing forests can lead to desertification. Forests provide habitat and shelter for wildlife and insects. Climbing shrubs, flowers, and creepers thrive in the protective environment of forests. Whether tropical, deciduous, or coniferous, forests offer natural beauty that humans can appreciate.

In conclusion, forests and the trees they are composed of are vital to our existence. Their importance is reflected in the many ways they have contributed to human life, from providing shelter and transportation to supplying essential products for modern industries. Preserving forests ensures a sustainable supply of timber and other forest products while protecting the environment and its inhabitants.

SubQuestion No : 23

Q.23 What is the meaning of "vital"?

Ans ✓ 1. important

✗ 2. extra

✗ 3. Not required

✗ 4. optional

Question ID : 630680372738

Option 1 ID : 6306801452237

Option 2 ID : 6306801452235

Option 3 ID : 6306801452236

Option 4 ID : 6306801452238

Status : Answered

Chosen Option : 1

Comprehension:

Read the following passage and answer the given questions:
Forests have been an integral part of human life since the earliest times. They have provided shelter, transportation, and various products essential for our daily needs. The value of forests has been recognized throughout history, and measures have been taken to prevent their wanton and needless destruction.

Wood has been the basic material used for shelter since primitive times. From the wigwam to the African hut, wood has been used to build frames for housing to provide protection from the elements and wild animals. Even today, wood remains an important part of modern construction, from frames and doors to furniture. Forests provide important resources for modern industries, such as the production of paper. Logs and timber are cut and turned into wood pulp for the production of paper, including daily newspapers. The demand for paper is high, and this underscores the importance of forests in our lives. Forests are also a source of important oils, such as turpentine from North American pine forests and palm oil from palm forests. Olive oil is produced from olive trees, and the American sugar maple provides sugar from its sap. Other forest products include flock for mattresses from the cotton trees of West Africa and the shelter necessary for the growth of cocoa beans.

Forests play a vital role in preventing soil erosion. They protect the soil from winds and water, and they revitalize the soil with humus and vegetable matter. Forests also attract rain clouds, and clearing forests can lead to desertification. Forests provide habitat and shelter for wildlife and insects. Climbing shrubs, flowers, and creepers thrive in the protective environment of forests. Whether tropical, deciduous, or coniferous, forests offer natural beauty that humans can appreciate.

In conclusion, forests and the trees they are composed of are vital to our existence. Their importance is reflected in the many ways they have contributed to human life, from providing shelter and transportation to supplying essential products for modern industries. Preserving forests ensures a sustainable supply of timber and other forest products while protecting the environment and its inhabitants.

SubQuestion No : 24

Q.24 Identify the central theme of the passage

- Ans
- ✗

1. Forests provide habitat and shelter for wildlife and insects. Climbing shrubs, flowers, and creepers thrive in the protective environment of forests.
- ✓

2. Forests and the trees they are composed of are vital to our existence. Preserving forests ensures a sustainable supply of timber and other forest products while protecting the environment and its inhabitants.
- ✗

3. Forests only provide shelter, transportation, and various products essential for our daily needs.
- ✗

4. The value of forests has been recognized throughout history, and measures have been taken to prevent their wanton and needless destruction.

Question ID : 630680372736

Option 1 ID : 6306801452227

Option 2 ID : 6306801452230

Option 3 ID : 6306801452229

Option 4 ID : 6306801452228

Status : Answered

Chosen Option : 4

Comprehension:

Read the following passage and answer the given questions:

Forests have been an integral part of human life since the earliest times. They have provided shelter, transportation, and various products essential for our daily needs. The value of forests has been recognized throughout history, and measures have been taken to prevent their wanton and needless destruction.

Wood has been the basic material used for shelter since primitive times. From the wigwam to the African hut, wood has been used to build frames for housing to provide protection from the elements and wild animals. Even today, wood remains an important part of modern construction, from frames and doors to furniture. Forests provide important resources for modern industries, such as the production of paper. Logs and timber are cut and turned into wood pulp for the production of paper, including daily newspapers. The demand for paper is high, and this underscores the importance of forests in our lives. Forests are also a source of important oils, such as turpentine from North American pine forests and palm oil from palm forests. Olive oil is produced from olive trees, and the American sugar maple provides sugar from its sap. Other forest products include flock for mattresses from the cotton trees of West Africa and the shelter necessary for the growth of cocoa beans.

Forests play a vital role in preventing soil erosion. They protect the soil from winds and water, and they revitalize the soil with humus and vegetable matter. Forests also attract rain clouds, and clearing forests can lead to desertification. Forests provide habitat and shelter for wildlife and insects. Climbing shrubs, flowers, and creepers thrive in the protective environment of forests. Whether tropical, deciduous, or coniferous, forests offer natural beauty that humans can appreciate.

In conclusion, forests and the trees they are composed of are vital to our existence. Their importance is reflected in the many ways they have contributed to human life, from providing shelter and transportation to supplying essential products for modern industries. Preserving forests ensures a sustainable supply of timber and other forest products while protecting the environment and its inhabitants.

SubQuestion No : 25

Q.25 Identify the suitable title for the passage

- Ans** ☒ 1. Forests and Human Life
- ☒ 2. The Importance of Forests in Our Lives
- ☒ 3. The extinction of forests from human life
- ☒ 4. Shelter & Transportation

Question ID : 630680372737
Option 1 ID : 6306801452231
Option 2 ID : 6306801452232
Option 3 ID : 6306801452234
Option 4 ID : 6306801452233
Status : Answered

Chosen Option : 2