

DDA JSA

Previous Year Paper
24 Sept, 2023 Shift 3



Test Prime

**ALL EXAMS,
ONE SUBSCRIPTION**



70,000+
Mock Tests



**Personalised
Report Card**



**Unlimited
Re-Attempt**



600+
Exam Covered



**Previous Year
Papers**



**500%
Refund**



ATTEMPT FREE MOCK NOW



DELHI DEVELOPMENT AUTHORITY
RECRUITMENT CELL
VIKAS SADAN, INA, NEW DELHI - 110023
(<https://www.dda.gov.in>)

Advertisement No. 02/2023/Recrtt. Cell/Pers./DDA

Test Date	24/09/2023
Test Time	2:30 PM - 3:30 PM
Subject	Junior Secretariat Assistant

Section : General Intelligence

Q.1 Consider the five three letter words given below and the answer the questions based on it.
(Left) FON JPM PAQ NKS LMF (Right)
As per the English alphabetical order, what will be the sum of the place values of the 2nd letter of the 2nd word from the left end and 2nd letter of the 5th word from the right end?

- Ans ☒ 1. 15
☒ 2. 31
☒ 3. 36
☒ 4. 23

Question ID : 630680379236
Option 1 ID : 6306801477988
Option 2 ID : 6306801477990
Option 3 ID : 6306801477987
Option 4 ID : 6306801477989
Status : Not Answered
Chosen Option : --

Q.2 A series is given with one term missing. Select the correct alternative from the given ones that will complete the series.
FLAI, IFJW, LZSK, OTBY, ?

- Ans ☒ 1. RNKM
☐ 2. TRQM
☐ 3. MNOP
☐ 4. RQRT

Question ID : 630680379235
Option 1 ID : 6306801477984
Option 2 ID : 6306801477983
Option 3 ID : 6306801477986
Option 4 ID : 6306801477985
Status : Answered
Chosen Option : 1

Q.3 Seven students Raju, Pintu, Rohit, Nisha, Neha, Puja and Ananya are sitting around a circular table facing towards the centre (not necessarily in the same order). Raju is third to the left of Ananya. Nisha is to the immediate left of Ananya. Neha is not the immediate neighbour of Puja. Pintu is second to the left of Puja. Rohit is the immediate neighbour of both Puja and Pintu. Who is second to the left of Ananya?

- Ans ☐ 1. Nisha
☐ 2. Puja
☐ 3. Rohit
☒ 4. Neha

Question ID : 630680379228
Option 1 ID : 6306801477956
Option 2 ID : 6306801477958
Option 3 ID : 6306801477957
Option 4 ID : 6306801477955
Status : Not Answered
Chosen Option : --

Q.4 In the following question below are given some statements followed by some conclusions based on those statements. Taking the given statements to be true even if they seem to be at variance from commonly known facts. Read all the conclusions and then decide which of the given conclusion logically follows the given statements.

Statements:

- I. All X are Y.
II. No J is X.

Conclusion:

- I. All Y are X.
II. Some Y are X.
III. Some X are J.

- Ans ☐ 1. Both conclusions I and III follows
☐ 2. Neither conclusion follows
☐ 3. All conclusion follows
☒ 4. Only conclusion II follows

Question ID : 630680379233
Option 1 ID : 6306801477976
Option 2 ID : 6306801477978
Option 3 ID : 6306801477977
Option 4 ID : 6306801477975
Status : Answered
Chosen Option : 4

Q.5 Select the option that is related to the fifth number cluster in the same way as the second number cluster is related to the first number cluster and fourth number cluster is related to third number cluster.
246 : 347 :: 777 : 878 :: 539 : ?

- Ans
- ☒ 1. 648
 - ☒ 2. 728
 - ☒ 3. 719
 - ☒ 4. 640

Question ID : 630680379252
Option 1 ID : 6306801478054
Option 2 ID : 6306801478053
Option 3 ID : 6306801478051
Option 4 ID : 6306801478052

Status : Answered

Chosen Option : 4

Q.6 In the following question, select the related letters from the given alternatives.
BO : FS :: CP : ?

- Ans
- ☒ 1. MA
 - ☒ 2. HG
 - ☒ 3. BS
 - ☒ 4. GT

Question ID : 630680379243
Option 1 ID : 6306801478015
Option 2 ID : 6306801478018
Option 3 ID : 6306801478017
Option 4 ID : 6306801478016

Status : Answered

Chosen Option : 4

Q.7 In the following question, select the odd letter/letters from the given alternatives.

- Ans
- ☒ 1. PKG
 - ☒ 2. RNJ
 - ☒ 3. YUQ
 - ☒ 4. MIE

Question ID : 630680379241
Option 1 ID : 6306801478009
Option 2 ID : 6306801478007
Option 3 ID : 6306801478008
Option 4 ID : 6306801478010

Status : Answered

Chosen Option : 1

Q.8 What is the approximate value of $(0.000000784)^4 + 538.84 - 24.92 \times 12.2$?

Ans ☒ 1. 240

☒ 2. 298

☒ 3. 172

☒ 4. 361

Question ID : 630680379248

Option 1 ID : 6306801478036

Option 2 ID : 6306801478035

Option 3 ID : 6306801478037

Option 4 ID : 6306801478038

Status : Not Answered

Chosen Option : --

Q.9 In the following question, select the related letters from the given alternatives.

SF : OB :: RE : ?

Ans ☒ 1. NA

☒ 2. ZA

☒ 3. MV

☒ 4. RS

Question ID : 630680379244

Option 1 ID : 6306801478022

Option 2 ID : 6306801478020

Option 3 ID : 6306801478021

Option 4 ID : 6306801478019

Status : Answered

Chosen Option : 1

Q.10 In the following question, select the related letter pair from the given alternatives.

NZT : KWQ :: ?

Ans ☒ 1. ULS : TZW

☒ 2. COL : TOO

☒ 3. OUY : LRV

☒ 4. NOD : AAZ

Question ID : 630680379240

Option 1 ID : 6306801478005

Option 2 ID : 6306801478003

Option 3 ID : 6306801478004

Option 4 ID : 6306801478006

Status : Answered

Chosen Option : 3

Q.11 In the following question, select the odd letter/letters from the given alternatives.

Ans ☒ 1. AYV

☒ 2. MKI

☒ 3. QOL

☒ 4. GEB

Question ID : 630680379242

Option 1 ID : 6306801478013

Option 2 ID : 6306801478012

Option 3 ID : 6306801478011

Option 4 ID : 6306801478014

Status : Answered

Chosen Option : 2

Q.12 What is the approximate value of 9.08% of 5015.893 + 8.33% of 672.1?

- Ans

1. 324

2. 438

3. 512

4. 586

Question ID : 630680379249

Option 1 ID : 6306801478039

Option 2 ID : 6306801478041

Option 3 ID : 6306801478042

Option 4 ID : 6306801478040

Status : Not Answered

Chosen Option : --

Q.13 Eight persons A1, A2, A3, A4, A5, A6, A7 and A8 live in an eight storied building, one on each floor but not necessarily in the same order. The lowermost floor is numbered 1, and the floor above it is numbered 2 and so on. Only two persons live below the floor on which A7 lives. Only one person lives between A7 and A1. A8 lives on an odd numbered floor but not on floor number 7. Only two persons live between A8 and A2. A2 does not live on the topmost floor. A1 does not live on the lowermost floor. A4 lives immediately below A3. Neither A4 nor A5 lives on floor numbered 6. Who lives on the ground floor?

- Ans

1. A8

2. A4

3. A7

4. A1

Question ID : 630680379230

Option 1 ID : 6306801477963

Option 2 ID : 6306801477964

Option 3 ID : 6306801477966

Option 4 ID : 6306801477965

Status : Not Answered

Chosen Option : --

Q.14 In the following question, select the missing number from the given series.
1088, 1083, 1063, ?, 663

- Ans

1. 981

2. 983

3. 1000

4. 750

Question ID : 630680379246

Option 1 ID : 6306801478027

Option 2 ID : 6306801478028

Option 3 ID : 6306801478029

Option 4 ID : 6306801478030

Status : Answered

Chosen Option : 2

Q.15 In a certain code language, 'SZBNP' is written as '96038', 'AMPZS' is written as '37820', 'PABQ' is written as '2136'. What can be the code for 'S' in that code language?

Ans ☒ 1. 0

☐ 2. 3

☐ 3. 6

☐ 4. 9

Question ID : 630680379238

Option 1 ID : 6306801477997

Option 2 ID : 6306801477996

Option 3 ID : 6306801477998

Option 4 ID : 6306801477995

Status : Answered

Chosen Option : 1

Q.16 Seven girls G1, G2, G3, G4, G5, G6 and G7 are sitting in a row facing towards the south (not necessarily in the same order). G3 is to the immediate left of G4. G2 is at one of the end. G5 is the immediate neighbour of G2. Only G7 is between G5 and G6. Only G4 is between G3 and G6.

Which of the following statement(s) is/are correct?

I. G3 is third to the right of G5.

II. G1 is to the immediate left of G3.

Ans ☐ 1. Only I

☒ 2. Only II

☐ 3. Neither I nor II

☐ 4. Both I and II

Question ID : 630680379229

Option 1 ID : 6306801477959

Option 2 ID : 6306801477960

Option 3 ID : 6306801477962

Option 4 ID : 6306801477961

Status : Answered

Chosen Option : 2

Q.17 In the following question, select the related letters from the given alternatives.
TXB : UYC :: GKO : ?

Ans ☐ 1. IMA

☐ 2. ABC

☐ 3. HLP

☒ 4. PQR

Question ID : 630680379245

Option 1 ID : 6306801478026

Option 2 ID : 6306801478024

Option 3 ID : 6306801478023

Option 4 ID : 6306801478025

Status : Answered

Chosen Option : 3

Q.18 By interchanging which two numbers the equation will be correct?

$$9 \times 6 + 5 \div 1 - 4 = 20$$

Ans ☒ 1. 5 and 4

☒ 2. 6 and 4

☒ 3. 6 and 1

☒ 4. 9 and 4

Question ID : 630680379251

Option 1 ID : 6306801478048

Option 2 ID : 6306801478049

Option 3 ID : 6306801478050

Option 4 ID : 6306801478047

Status : Answered

Chosen Option : 4

Q.19 Eight persons Punit, Vijay, Roshni, Sumit, Jashan, Kunal, Rajesh and Naina live in an eight storied building, one on each floor but not necessarily in the same order. The lowermost floor is numbered 1, and the floor above it is numbered 2 and so on. Only two persons live below the floor on which Rajesh lives. Only one person lives between Rajesh and Punit. Naina lives on an odd numbered floor but not on floor number 7. Only two persons live between Naina and Vijay. Vijay does not live on the topmost floor. Punit does not live on the lowermost floor. Sumit lives immediately below Roshni. Neither Sumit nor Jashan lives on floor numbered 6. Who lives on the floor just above Punit?

Ans ☒ 1. Vijay

☒ 2. Kunal

☒ 3. Sumit

☒ 4. Roshni

Question ID : 630680379231

Option 1 ID : 6306801477968

Option 2 ID : 6306801477967

Option 3 ID : 6306801477970

Option 4 ID : 6306801477969

Status : Not Answered

Chosen Option : --

Q.20 In a certain code language, 'ZNHD' is written as '7519', 'HMDE' is written as '2167', 'NEAO' is written as '3852'. What is the code for 'Z' in that code language?

Ans ☒ 1. 5

☒ 2. 7

☒ 3. 9

☒ 4. 1

Question ID : 630680379237

Option 1 ID : 6306801477994

Option 2 ID : 6306801477991

Option 3 ID : 6306801477993

Option 4 ID : 6306801477992

Status : Answered

Chosen Option : 3

Q.21 In the following question, select the related letters from the given alternatives.
LY : JV :: AN : ?

- Ans ☒ 1. WR
☒ 2. PQ
☒ 3. YK
☒ 4. HV

Question ID : 630680379239
Option 1 ID : 6306801478002
Option 2 ID : 6306801478000
Option 3 ID : 6306801477999
Option 4 ID : 6306801478001
Status : Answered
Chosen Option : 3

Q.22 By interchanging which two numbers the equation will be correct?
 $8 \div 6 \times 9 + 7 - 4 = 9$

- Ans ☒ 1. 7 and 4
☒ 2. 8 and 7
☒ 3. 8 and 4
☒ 4. 6 and 7

Question ID : 630680379250
Option 1 ID : 6306801478045
Option 2 ID : 6306801478043
Option 3 ID : 6306801478046
Option 4 ID : 6306801478044
Status : Answered
Chosen Option : 1

Q.23 In the following question below are given some statements followed by some conclusions based on those statements. Taking the given statements to be true even if they seem to be at variance from commonly known facts. Read all the conclusions and then decide which of the given conclusion logically follows the given statements.

Statements:

- I. No H is B.
II. All K are H.

Conclusion:

- I. No B is H.
II. Some H are K.

- Ans ☒ 1. Both conclusions I and II follows
☒ 2. Only conclusion II follows
☒ 3. Only conclusion I follows
☒ 4. Neither conclusion follows

Question ID : 630680379232
Option 1 ID : 6306801477973
Option 2 ID : 6306801477972
Option 3 ID : 6306801477971
Option 4 ID : 6306801477974
Status : Answered
Chosen Option : 1

Q.24 A series is given with one term missing. Select the correct alternative from the given ones that will complete the series.
HJM, MPU, RVC, WBK, ?

- Ans ☒ 1. RQR
☒ 2. MOR
☒ 3. BHS
☒ 4. NTS

Question ID : 630680379234
Option 1 ID : 6306801477981
Option 2 ID : 6306801477982
Option 3 ID : 6306801477980
Option 4 ID : 6306801477979
Status : Answered
Chosen Option : 3

Q.25 In the following question, select the missing number from the given series.
3, 7, 15, 31, ?

- Ans ☒ 1. 61
☒ 2. 62
☒ 3. 63
☒ 4. 65

Question ID : 630680379247
Option 1 ID : 6306801478031
Option 2 ID : 6306801478032
Option 3 ID : 6306801478033
Option 4 ID : 6306801478034
Status : Answered
Chosen Option : 3

Section : General Awareness

Q.1 Imposition of price ceiling _____ the equilibrium price leads to an _____.

- Ans ☒ 1. above, excess supply
☒ 2. below, excess demand
☒ 3. below, excess supply
☒ 4. above, excess demand

Question ID : 630680379209
Option 1 ID : 6306801477879
Option 2 ID : 6306801477882
Option 3 ID : 6306801477880
Option 4 ID : 6306801477881
Status : Answered
Chosen Option : 2

Q.2 Which among the following languages was added in the Eighth Schedule of the Indian Constitution in 2004?

- I. Bodo
II. Dogri

Ans ☒ 1. Only II
☒ 2. Only I
☒ 3. Both I and II
☒ 4. Neither I nor II

Question ID : 630680379219
Option 1 ID : 6306801477920
Option 2 ID : 6306801477919
Option 3 ID : 6306801477921
Option 4 ID : 6306801477922
Status : Answered
Chosen Option : 3

Q.3 In the twelfth century a long Sanskrit poem containing the history of kings who ruled over _____ was composed by an author named Kalhana.

Ans ☒ 1. Kashmir
☒ 2. Karnataka
☒ 3. Gujarat
☒ 4. Andhra

Question ID : 630680379214
Option 1 ID : 6306801477899
Option 2 ID : 6306801477901
Option 3 ID : 6306801477902
Option 4 ID : 6306801477900
Status : Not Answered
Chosen Option : --

Q.4 As per Census 2011, the sex ratio (number of females per 1000 males) of India for urban areas is _____.

Ans ☒ 1. 929
☒ 2. 943
☒ 3. 934
☒ 4. 949

Question ID : 630680379225
Option 1 ID : 6306801477943
Option 2 ID : 6306801477945
Option 3 ID : 6306801477944
Option 4 ID : 6306801477946
Status : Answered
Chosen Option : 3

Q.5 Arundhati Roy won the Booker Prize in 1997 for which of the following books?

- Ans ☒ 1. The God of Small Things
☒ 2. The Inheritance of Loss
☒ 3. Midnight Children
☒ 4. A Bend in the River

Question ID : 630680379216
 Option 1 ID : 6306801477908
 Option 2 ID : 6306801477910
 Option 3 ID : 6306801477907
 Option 4 ID : 6306801477909
 Status : Answered
 Chosen Option : 1

Q.6 As per Census 2011, which among the following states has male literacy rate above 80 percent?
 I. Punjab
 II. Goa

- Ans ☒ 1. Only II
☒ 2. Both I and II
☒ 3. Neither I nor II
☒ 4. Only I

Question ID : 630680379226
 Option 1 ID : 6306801477948
 Option 2 ID : 6306801477949
 Option 3 ID : 6306801477950
 Option 4 ID : 6306801477947
 Status : Answered
 Chosen Option : 1

Q.7 Which among the following statements is correct regarding the mutiny of 1857?
 I. Nana Saheb declared that he was a governor under Emperor Bahadur Shah Zafar.
 II. In Jhansi, Rani Lakshmibai joined the rebel sepoys and fought the British along with Tantia Tope.

- Ans ☒ 1. Neither I nor II
☒ 2. Both I and II
☒ 3. Only I
☒ 4. Only II

Question ID : 630680379212
 Option 1 ID : 6306801477894
 Option 2 ID : 6306801477893
 Option 3 ID : 6306801477891
 Option 4 ID : 6306801477892
 Status : Not Answered
 Chosen Option : --

Q.8 Khalsa College, Amritsar Was established in _____ by the leaders of the Singh Sabha movement.

- Ans ☒ 1. 1882
☒ 2. 1892
☒ 3. 1886
☒ 4. 1896

Question ID : 630680379210
 Option 1 ID : 6306801477883
 Option 2 ID : 6306801477885
 Option 3 ID : 6306801477884
 Option 4 ID : 6306801477886
 Status : Answered
 Chosen Option : 2

Q.9 Which of the following hormone helps in regulating blood sugar levels of human body?

- Ans ☒ 1. Thymus
☒ 2. Adrenalin
☒ 3. Testosteron
☒ 4. Insulin

Question ID : 630680379227
 Option 1 ID : 6306801477953
 Option 2 ID : 6306801477951
 Option 3 ID : 6306801477952
 Option 4 ID : 6306801477954
 Status : Answered
 Chosen Option : 4

Q.10 Which is the first Northeastern state of India to pass its 'Mental Health and Social Care Policy'?

- Ans ☒ 1. Tripura
☒ 2. Sikkim
☒ 3. Manipur
☒ 4. Meghalaya

Question ID : 630680379206
 Option 1 ID : 6306801477867
 Option 2 ID : 6306801477870
 Option 3 ID : 6306801477868
 Option 4 ID : 6306801477869
 Status : Not Answered
 Chosen Option : --

Q.11 Which of the following statement is correct with respect to the ruler Dantidurga?
I. In the mid-eighth century, Dantidurga overthrew his Chalukya overlord.
II. Dantidurga performed the ritual called hiranya-garbha.

- Ans ☒ 1. Only I
☒ 2. Neither I nor II
☒ 3. Both I and II
☒ 4. Only II

Question ID : 630680379215
Option 1 ID : 6306801477903
Option 2 ID : 6306801477906
Option 3 ID : 6306801477905
Option 4 ID : 6306801477904

Status : Answered
Chosen Option : 4

Q.12 Which of the following statements is correct regarding Atal Pension Yojana?
I. Any Indian Citizen between 18-70 years of age can join this scheme through their savings bank account or post office savings bank account.
II. This scheme is being implemented with effect from 1st June, 2015.

- Ans ☒ 1. Both I and II
☒ 2. Only I
☒ 3. Neither I nor II
☒ 4. Only II

Question ID : 630680379207
Option 1 ID : 6306801477873
Option 2 ID : 6306801477871
Option 3 ID : 6306801477874
Option 4 ID : 6306801477872

Status : Answered
Chosen Option : 4

Q.13 Which of the following festivals marks the Tibetan New Year?

- Ans ☒ 1. Vishu
☒ 2. Rongker
☒ 3. Losar
☒ 4. Ugadi

Question ID : 630680379220
Option 1 ID : 6306801477925
Option 2 ID : 6306801477926
Option 3 ID : 6306801477924
Option 4 ID : 6306801477923

Status : Answered
Chosen Option : 3

Q.14 Who is the author of the novel 'Fire on the Mountain'?

- Ans ☒ 1. Mulk Raj Anand
☒ 2. Anita Desai
☒ 3. R.K. Narayan
☒ 4. Bhabani Bhattacharya

Question ID : 630680379217
 Option 1 ID : 6306801477912
 Option 2 ID : 6306801477911
 Option 3 ID : 6306801477913
 Option 4 ID : 6306801477914
 Status : Answered
 Chosen Option : 4

Q.15 Which of the following is NOT a natural lake of India?

- Ans ☒ 1. Pulicat lake
☒ 2. Sambhar lake
☒ 3. Guru Gobind Sagar lake
☒ 4. Wular lake

Question ID : 630680379222
 Option 1 ID : 6306801477932
 Option 2 ID : 6306801477933
 Option 3 ID : 6306801477934
 Option 4 ID : 6306801477931
 Status : Answered
 Chosen Option : 3

Q.16 Firuz Shah Tughluq ruled in Delhi in which of the following period?

- Ans ☒ 1. 1320–1324
☒ 2. 1351–1388
☒ 3. 1296–1316
☒ 4. 1290–1296

Question ID : 630680379213
 Option 1 ID : 6306801477897
 Option 2 ID : 6306801477898
 Option 3 ID : 6306801477896
 Option 4 ID : 6306801477895
 Status : Answered
 Chosen Option : 1

Q.17 As of June 2022, which of the following languages has been given status of classical languages in India?

- Ans ☒ 1. Sindhi
☒ 2. Konkani
☒ 3. Punjabi
☒ 4. Sanskrit

Question ID : 630680379218
 Option 1 ID : 6306801477916
 Option 2 ID : 6306801477915
 Option 3 ID : 6306801477917
 Option 4 ID : 6306801477918
 Status : Not Answered
 Chosen Option : --

Q.18 Vikas Thakur was conferred with the Arjuna Award 2022 in which sports?

- Ans ☒ 1. Boxing
☒ 2. Shooting
☒ 3. Weightlifting
☒ 4. Swimming

Question ID : 630680379203
 Option 1 ID : 6306801477858
 Option 2 ID : 6306801477856
 Option 3 ID : 6306801477857
 Option 4 ID : 6306801477855
 Status : Not Answered
 Chosen Option : --

Q.19 The demand curve that a firm faces in a perfectly competitive market is _____.

- Ans ☒ 1. inelastic
☒ 2. elastic
☒ 3. perfectly inelastic
☒ 4. perfectly elastic

Question ID : 630680379208
 Option 1 ID : 6306801477876
 Option 2 ID : 6306801477875
 Option 3 ID : 6306801477878
 Option 4 ID : 6306801477877
 Status : Not Answered
 Chosen Option : --

Q.20 Which among the following teams won the highest number of Gold medals in the National Games 2022?

- Ans ☒ 1. Services
☒ 2. West Bengal
☒ 3. Gujarat
☒ 4. Punjab

Question ID : 630680379204
 Option 1 ID : 6306801477860
 Option 2 ID : 6306801477861
 Option 3 ID : 6306801477859
 Option 4 ID : 6306801477862
 Status : Answered
 Chosen Option : 1

Q.21 In April 2023, the Union Cabinet approved the project to build LIGO-India, gravitational-wave detector in _____.

- Ans ☒ 1. Ladakh
☒ 2. Gujarat
☒ 3. Maharashtra
☒ 4. Punjab

Question ID : 630680379205
 Option 1 ID : 6306801477864
 Option 2 ID : 6306801477865
 Option 3 ID : 6306801477866
 Option 4 ID : 6306801477863
 Status : Not Answered
 Chosen Option : --

Q.22 Which of the following pairs of 'festival – state' is correctly matched?

- I. Wangala – Meghalaya
II. Hornbill – Mizoram

Ans ☒ 1. Neither I nor II
☒ 2. Both I and II
☒ 3. Only II
☒ 4. Only I

Question ID : 630680379221
Option 1 ID : 6306801477930
Option 2 ID : 6306801477929
Option 3 ID : 6306801477928
Option 4 ID : 6306801477927
Status : Answered
Chosen Option : 4

Q.23 Whom was the first woman President of the Indian National Congress?

Ans ☒ 1. Umabai Kundapur
☒ 2. Sarojini Naidu
☒ 3. Vijaya Lakshmi Pandit
☒ 4. Annie Besant

Question ID : 630680379211
Option 1 ID : 6306801477887
Option 2 ID : 6306801477888
Option 3 ID : 6306801477890
Option 4 ID : 6306801477889
Status : Answered
Chosen Option : 4

Q.24 Which of the following statement is correct?

- I. The difference in pressure over Tahiti in pacific ocean and Darwin in northern Australia is computed to predict the intensity of monsoons in India.
II. If the pressure difference between Tahiti and Darwin is positive it would mean below average and late monsoon in India.

Ans ☒ 1. Neither I nor II
☒ 2. Only II
☒ 3. Only I
☒ 4. Both I and II

Question ID : 630680379224
Option 1 ID : 6306801477942
Option 2 ID : 6306801477940
Option 3 ID : 6306801477939
Option 4 ID : 6306801477941
Status : Not Answered
Chosen Option : --

Q.25 According to India State of Forest Report 2021 which among the following Indian state has more than 75 percent of geographical area under forest cover?

- Ans ☒ 1. Chhattisgarh
☒ 2. Sikkim
☒ 3. Madhya Pradesh
☒ 4. Arunachal Pradesh

Question ID : 630680379223
Option 1 ID : 6306801477935
Option 2 ID : 6306801477938
Option 3 ID : 6306801477936
Option 4 ID : 6306801477937
Status : Answered
Chosen Option : 4

Section : Quantitative Aptitude (Basic Arithmetic Skill)

Q.1 A child who secures 20% marks in a test fails by 30 marks. Another child who secures 32% marks gets 42 marks more than those required to pass. Pass percentage of marks is

- Ans ☒ 1. 42%
☒ 2. 34%
☒ 3. 23%
☒ 4. 25%

Question ID : 630680379258
Option 1 ID : 6306801478078
Option 2 ID : 6306801478077
Option 3 ID : 6306801478076
Option 4 ID : 6306801478075
Status : Answered
Chosen Option : 1

Q.2 Three equal glasses are filled with mixtures of milk and water. The ratio of milk and water is given below:
1st glass = 3:4, 2nd glass = 4:5 and 3rd glass = 5:6 .The contents of three glasses are emptied into a single vessel. What is the ratio of milk to water in the mixture now?

- Ans ☒ 1. 4566 : 544
☒ 2. 920 : 1159
☒ 3. 234 : 432
☒ 4. 543 : 5787

Question ID : 630680379262
Option 1 ID : 6306801478094
Option 2 ID : 6306801478091
Option 3 ID : 6306801478092
Option 4 ID : 6306801478093
Status : Answered
Chosen Option : 2

Q.3 A sum of money amounts to ₹14,000 in 2 years at 20 % simple interest per annum. Find the sum.

- Ans
- ☒ 1. 14000
 - ☒ 2. 12000
 - ☒ 3. 13000
 - ☒ 4. 10000

Question ID : 630680379263
Option 1 ID : 6306801478096
Option 2 ID : 6306801478095
Option 3 ID : 6306801478098
Option 4 ID : 6306801478097
Status : Answered
Chosen Option : 4

Q.4 If $\cot \theta = \frac{12}{35}$, then find the value of $\cos \theta$. θ is acute angle.

- Ans
- ☒ 1. $\frac{35}{37}$
 - ☒ 2. $\frac{35}{12}$
 - ☒ 3. $\frac{37}{35}$
 - ☒ 4. $\frac{12}{37}$

Question ID : 630680379277
Option 1 ID : 6306801478151
Option 2 ID : 6306801478154
Option 3 ID : 6306801478153
Option 4 ID : 6306801478152
Status : Answered
Chosen Option : 4

Q.5 What is the value of $\sqrt{9801}$?

- Ans
- ☒ 1. 91
 - ☒ 2. 99
 - ☒ 3. 81
 - ☒ 4. 79

Question ID : 630680379253
Option 1 ID : 6306801478057
Option 2 ID : 6306801478058
Option 3 ID : 6306801478056
Option 4 ID : 6306801478055
Status : Answered
Chosen Option : 2

Q.6 How many meters of 63 cm wide tiles will be required to cover the floor of a room 14 m by 9 m?

- Ans
- ☒ 1. 300 m
 - ☒ 2. 200 m
 - ☒ 3. 500 m
 - ☒ 4. 400 m

Question ID : 630680379271
Option 1 ID : 6306801478128
Option 2 ID : 6306801478127
Option 3 ID : 6306801478130
Option 4 ID : 6306801478129
Status : Answered
Chosen Option : 2

Q.7 If $\tan \theta = \frac{40}{9}$, then find the value of $\sin \theta$. θ is acute angle.

- Ans
- ☒ 1. $\frac{40}{41}$
 - ☒ 2. $\frac{41}{40}$
 - ☒ 3. $\frac{9}{40}$
 - ☒ 4. $\frac{9}{41}$

Question ID : 630680379276
Option 1 ID : 6306801478147
Option 2 ID : 6306801478150
Option 3 ID : 6306801478149
Option 4 ID : 6306801478148
Status : Answered
Chosen Option : 1

Q.8 In an examination, there were 2000 candidates, out of which 900 were man's and rest were women's. If 32% of the man and 38% of the woman passed, then the percentage of failures is

- Ans
- ☒ 1. 54.7%
 - ☒ 2. 50.7%
 - ☒ 3. 64.7%
 - ☒ 4. 60.7%

Question ID : 630680379257
Option 1 ID : 6306801478071
Option 2 ID : 6306801478074
Option 3 ID : 6306801478073
Option 4 ID : 6306801478072
Status : Answered
Chosen Option : 3

Q.9 The solutions of the equation $x - y - 1 = 0$ are:

- Ans
- ☒ 1. (0,1)
 - ☒ 2. (-1,1)
 - ☒ 3. (1,0)
 - ☒ 4. (1,1)

Question ID : 630680379269
Option 1 ID : 6306801478121
Option 2 ID : 6306801478120
Option 3 ID : 6306801478122
Option 4 ID : 6306801478119

Status : Answered

Chosen Option : 3

Q.10 How many 3 digits number are divisible by 9?

- Ans
- ☒ 1. 101
 - ☒ 2. 103
 - ☒ 3. 102
 - ☒ 4. 100

Question ID : 630680379254
Option 1 ID : 6306801478061
Option 2 ID : 6306801478059
Option 3 ID : 6306801478060
Option 4 ID : 6306801478062

Status : Not Answered

Chosen Option : --

Q.11 A can do a piece of work in 15 days, B in 10 days and C in 20 days. B and C start the work but are forced to leave after 3 days. Remaining work is done by A, how long will it take?

- Ans
- ☒ 1. $16\frac{1}{3}$ Days
 - ☒ 2. $8\frac{1}{4}$ Days
 - ☒ 3. $8\frac{1}{3}$ Days
 - ☒ 4. $17\frac{1}{4}$ Days

Question ID : 630680379265
Option 1 ID : 6306801478104
Option 2 ID : 6306801478103
Option 3 ID : 6306801478105
Option 4 ID : 6306801478106

Status : Answered

Chosen Option : 2

Q.12 The ratio of price of watch and mobile are 7 : 1. The price of watch is Rs. 840 more than price of mobile. What is the price of mobile?

- Ans** ☒ 1. Rs. 120
☒ 2. Rs. 140
☒ 3. Rs. 840
☒ 4. Rs. 980

Question ID : 630680379266
Option 1 ID : 6306801478110
Option 2 ID : 6306801478108
Option 3 ID : 6306801478109
Option 4 ID : 6306801478107
Status : Answered
Chosen Option : 2

Q.13 X can do a piece of work in 30 days. He works at it for 8 days and then Y finished it in 11 days. How long will they together take to complete the work?

- Ans** ☒ 1. 10 days
☒ 2. 11 days
☒ 3. 9 days
☒ 4. 15 days

Question ID : 630680379264
Option 1 ID : 6306801478099
Option 2 ID : 6306801478100
Option 3 ID : 6306801478101
Option 4 ID : 6306801478102
Status : Answered
Chosen Option : 1

Q.14 The length of a rectangular pond is three times its breadth. If the area of a rectangular pond is 6075 square metres, what is its length?

- Ans** ☒ 1. 45 m
☒ 2. 135 m
☒ 3. 75 m
☒ 4. 130 m

Question ID : 630680379274
Option 1 ID : 6306801478139
Option 2 ID : 6306801478142
Option 3 ID : 6306801478140
Option 4 ID : 6306801478141
Status : Answered
Chosen Option : 1

Q.15 The ratio of the incomes of P and Q is 7 : 9 and the ratio of their expenditures is 13 : 14. If they save Rs 1000 and Rs. 4000 respectively, then what is their total income?

- Ans** ☒ 1. Rs. 36000
☒ 2. Rs. 28000
☒ 3. Rs. 12000
☒ 4. Rs. 32000

Question ID : 630680379267
Option 1 ID : 6306801478112
Option 2 ID : 6306801478113
Option 3 ID : 6306801478114
Option 4 ID : 6306801478111
Status : Answered
Chosen Option : 4

Q.16 The total cost of flooring a classroom at ₹8.50 per square metre is ₹ 510. If the length of the classroom is 8 m, its breadth is:

- Ans** ☒ 1. 15 m
☒ 2. 9m
☒ 3. 8.2m
☒ 4. 7.5m

Question ID : 630680379273
Option 1 ID : 6306801478138
Option 2 ID : 6306801478137
Option 3 ID : 6306801478135
Option 4 ID : 6306801478136
Status : Answered
Chosen Option : 4

Q.17 Of the three numbers, first is one-third of Second and is also three-fourth of the third number. If the average of three numbers is 112, then what is the smallest number?

- Ans** ☒ 1. 60
☒ 2. 36
☒ 3. 65
☒ 4. 63

Question ID : 630680379255
Option 1 ID : 6306801478064
Option 2 ID : 6306801478063
Option 3 ID : 6306801478066
Option 4 ID : 6306801478065
Status : Answered
Chosen Option : 2

Q.18 A torch is listed at ₹1500, with a discount of 20%. What additional discount must be offered to the customer to bring the net price to ₹1080?

- Ans**
- ☒ 1. 10%
 - ☒ 2. $11\frac{1}{9}\%$
 - ☒ 3. 8%
 - ☒ 4. 15%

Question ID : 630680379260
Option 1 ID : 6306801478085
Option 2 ID : 6306801478086
Option 3 ID : 6306801478083
Option 4 ID : 6306801478084
Status : Answered
Chosen Option : 1

Q.19 A dinner set carrying a sale price ticket of Rs 5000 is sold at a discount of 4%, 21 thereby gaining 20%. The seller's cost price of the dinner set is:

- Ans**
- ☒ 1. ₹ 3600
 - ☒ 2. ₹ 4200
 - ☒ 3. ₹3800
 - ☒ 4. ₹ 4000

Question ID : 630680379259
Option 1 ID : 6306801478079
Option 2 ID : 6306801478081
Option 3 ID : 6306801478080
Option 4 ID : 6306801478082
Status : Answered
Chosen Option : 1

Q.20 A path of uniform width runs round the inside of a rectangular Playground 38 m long and 32 m wide. If the path occupies 600 m² then the width of the path is:

- Ans**
- ☒ 1. 10m
 - ☒ 2. 20m
 - ☒ 3. 5m
 - ☒ 4. 15m

Question ID : 630680379272
Option 1 ID : 6306801478131
Option 2 ID : 6306801478134
Option 3 ID : 6306801478132
Option 4 ID : 6306801478133
Status : Answered
Chosen Option : 3

Q.21 20 litres of a mixture contains oil and water in the ratio 5 : 3. If 4 litres of this mixture is replaced by 4 litres of oil, then the ratio of oil and water in the new mixture is:

- Ans ☒ 1. 2 : 5
☒ 2. 7 : 3
☒ 3. 8 : 4
☒ 4. 5 : 6

Question ID : 630680379261
Option 1 ID : 6306801478088
Option 2 ID : 6306801478089
Option 3 ID : 6306801478090
Option 4 ID : 6306801478087
Status : Answered
Chosen Option : 4

Q.22 The system of equations $x + y = K$ and $6x + 3y = 3$ has a no solution when:

- Ans ☒ 1. $K = 1$
☒ 2. $K \neq 2$
☒ 3. $K = 2$
☒ 4. $K \neq 3$

Question ID : 630680379268
Option 1 ID : 6306801478117
Option 2 ID : 6306801478115
Option 3 ID : 6306801478118
Option 4 ID : 6306801478116
Status : Not Answered
Chosen Option : --

Q.23 A rectangle measures 8 cm on breadth and its diagonal measures 10 cm. What is the perimeter of the rectangle?

- Ans ☒ 1. 20 cm
☒ 2. 35 cm
☒ 3. 25 cm
☒ 4. 28 cm

Question ID : 630680379270
Option 1 ID : 6306801478123
Option 2 ID : 6306801478126
Option 3 ID : 6306801478124
Option 4 ID : 6306801478125
Status : Answered
Chosen Option : 4

Q.24 In what ratio water be mixed with milk to gain 20% by selling the mixture at cost price?

- Ans**
- ☐ 1. 5 : 2
 - ☐ 2. 5 : 1
 - ☐ 3. 2 : 5
 - ☒ 4. 1 : 5

Question ID : 630680379256
Option 1 ID : 6306801478069
Option 2 ID : 6306801478068
Option 3 ID : 6306801478070
Option 4 ID : 6306801478067
Status : Answered
Chosen Option : 4

Q.25 The length of a rectangular field is increased by 25%. To keep its area unchanged, the width of the plot should be:

- Ans**
- ☐ 1. Reduced by 30%
 - ☐ 2. Reduced by 15%
 - ☐ 3. Reduced by 10%
 - ☒ 4. Reduced by 20%

Question ID : 630680379275
Option 1 ID : 6306801478146
Option 2 ID : 6306801478143
Option 3 ID : 6306801478144
Option 4 ID : 6306801478145
Status : Answered
Chosen Option : 4

Section : English Language (Basic Knowledge)


Q.1 Kathy was hired as the new VP of ABC company. She approached change-making like a _____, driven by her passion for what she believed in.


- Ans**
- ☐ 1. Tyro
 - ☐ 2. Dabbler
 - ☐ 3. Novice
 - ☒ 4. crusader


Question ID : 630680379190
Option 1 ID : 6306801477805
Option 2 ID : 6306801477804
Option 3 ID : 6306801477806
Option 4 ID : 6306801477803
Status : Answered
Chosen Option : 4


Q.2 Choose the correct answer from below options that suits the below mentioned question:
 The children ____ a resemblance to their grandfather.

- Ans

 1. beer

 2. bear


 3. bare


 4. Ber


Question ID : 630680379202
 Option 1 ID : 6306801477853
 Option 2 ID : 6306801477854
 Option 3 ID : 6306801477851
 Option 4 ID : 6306801477852
 Status : Answered
 Chosen Option : 2


Q.3 Choose the correct answer from below options that suits the below mentioned question:
 The snowstorm will ____ thousands of travelers.

- Ans

 1. infect

 2. effect


 3. affectt


 4. affect


Question ID : 630680379201
 Option 1 ID : 6306801477848
 Option 2 ID : 6306801477847
 Option 3 ID : 6306801477850
 Option 4 ID : 6306801477849
 Status : Answered
 Chosen Option : 4


Q.4 Choose the most appropriate meaning of the below quoted idiom:
 “Costs an arm and a leg”.

- Ans

 1. To describe a conflict between two people

 2. To describe something very cheap

 3. To describe something that is very expensive

 4. To start saving for something precious

Question ID : 630680379196
 Option 1 ID : 6306801477829
 Option 2 ID : 6306801477828
 Option 3 ID : 6306801477830
 Option 4 ID : 6306801477827
 Status : Answered
 Chosen Option : 3

Q.5 Choose the most logical order of the sentences from among the four given choices to construct a coherent paragraph.

Retirement is a phase in life that everyone looks forward to, but it can be challenging if an individual is not well prepared. With a decrease in regular income, retirees may struggle to meet their financial obligations and maintain a comfortable standard of living.

- A) With the rise in unemployment, the number of people relying on the social security plan has increased, leading to a shortage of funds. This situation presents a challenge for people who depend solely on the social security plan for their retirement.
B) Healthcare services are critical in the elderly years, and access to good quality healthcare can be expensive. Therefore, a reliable retirement savings plan can provide for this need.
C) The social security plan is formulated to protect people after retirement, but it faces a financial crisis due to unemployment issues.
D) For a comfortable life after employment, an individual needs to have a reliable saving plan that ensures that they can easily access services like healthcare.

- Ans ☒ 1. BADC
☒ 2. ABDC
☒ 3. DACB
☒ 4. DBCA

Question ID : 630680379186
Option 1 ID : 6306801477790
Option 2 ID : 6306801477788
Option 3 ID : 6306801477789
Option 4 ID : 6306801477787
Status : Answered
Chosen Option : 4

Q.6 After _____ consideration, Carl and his brother decided to opt for a Starry Cruise package. It was the most affordable.

- Ans ☒ 1. few
☒ 2. more
☒ 3. many
☒ 4. much

Question ID : 630680379189
Option 1 ID : 6306801477802
Option 2 ID : 6306801477799
Option 3 ID : 6306801477800
Option 4 ID : 6306801477801
Status : Answered
Chosen Option : 3

Q.7 Select the most appropriate option to complete the following sentence:
Have you ever considered _____ to live in another country?

- Ans ☒ 1. Did go
☒ 2. going
☒ 3. To go
☒ 4. went

Question ID : 630680379194
Option 1 ID : 6306801477821
Option 2 ID : 6306801477820
Option 3 ID : 6306801477822
Option 4 ID : 6306801477819
Status : Answered
Chosen Option : 3

Q.8 Choose the most appropriate one-word substitution for “One who loves good food and knows a lot about it”

- Ans ☒ 1. Gourmet
☒ 2. Chef
☒ 3. Megapolis
☒ 4. Entremetier

Question ID : 630680379182
Option 1 ID : 6306801477773
Option 2 ID : 6306801477771
Option 3 ID : 6306801477772
Option 4 ID : 6306801477774
Status : Answered
Chosen Option : 1

Q.9 Choose the most logical order of the sentences from among the four given choices to construct a coherent paragraph.

Wars have been a constant feature of human history, with conflicts breaking out between countries and within nations. Civil wars can arise due to differences based on race, religion, or socio-economic factors, among others.

- A) The effects of war are both physical and psychological, and societies are deeply impacted. Wars destroy residential areas, public infrastructure, and hospitals, causing a significant setback to the basic needs of human existence.
B) Therefore, avoiding war must be a top priority. The only way to protect lives and ensure stability is by practicing tolerance and respect for one another. Otherwise, our society is at risk of becoming extinct like the dinosaurs.
C) Populations are displaced, and they have to constantly move for security. Regardless of the type of war, the effects are often devastating and far-reaching.
D) It brings untold misery and political and economic instability. People's lives and daily existence come under threat, making it difficult to find jobs or live normal day-to-day lives.

- Ans ☒ 1. ADCB
☒ 2. BADC
☒ 3. ADBC
☒ 4. DACB

Question ID : 630680379187
Option 1 ID : 6306801477793
Option 2 ID : 6306801477792
Option 3 ID : 6306801477791
Option 4 ID : 6306801477794
Status : Not Answered
Chosen Option : --

Q.10 Choose the most appropriate meaning of the below mentioned word:
Calibrate

- Ans ☒ 1. Spoil
☒ 2. Ruin
☒ 3. Derange
☒ 4. Regulate

Question ID : 630680379198
Option 1 ID : 6306801477838
Option 2 ID : 6306801477836
Option 3 ID : 6306801477837
Option 4 ID : 6306801477835
Status : Answered
Chosen Option : 4

Q.11 The travel package had a day of land shopping when the ship docked ____ refueling.

- Ans ☒ 1. at
☒ 2. with
☒ 3. in
☒ 4. for

Question ID : 630680379191
Option 1 ID : 6306801477809
Option 2 ID : 6306801477807
Option 3 ID : 6306801477808
Option 4 ID : 6306801477810
Status : Answered
Chosen Option : 4

Q.12 Choose the answer below that spells the word in bold correctly:
The drive and perseverance of SME (small & medium enterprises) owners often leads to their products being noticed by consumers, even though their profit margins may not be as high as those of larger companies.

- Ans ☒ 1. purseverance
☒ 2. perseverance
☒ 3. persverance
☒ 4. perseeverance

Question ID : 630680379200
Option 1 ID : 6306801477846
Option 2 ID : 6306801477844
Option 3 ID : 6306801477843
Option 4 ID : 6306801477845
Status : Answered
Chosen Option : 2

Q.13 Over the weekend, Carl and his brother looked through ____ websites of each cruise company for more information.

- Ans ☒ 1. the
☒ 2. at
☒ 3. in
☒ 4. from

Question ID : 630680379188
Option 1 ID : 6306801477797
Option 2 ID : 6306801477795
Option 3 ID : 6306801477798
Option 4 ID : 6306801477796
Status : Answered
Chosen Option : 2

Q.14 Select the most appropriate option to complete the following sentence:
If you walk into the road without looking, you risk _____ knocked down.

- Ans ☒ 1. Is being
☒ 2. been
☒ 3. being
☒ 4. might

Question ID : 630680379193
Option 1 ID : 6306801477816
Option 2 ID : 6306801477815
Option 3 ID : 6306801477817
Option 4 ID : 6306801477818
Status : Answered
Chosen Option : 2

Q.15 Select the most appropriate option that can substitute the underlined segment in the given sentence.
Have you want me to come with you to the dentist?

- Ans ☒ 1. Do you want
☒ 2. No substitution
☒ 3. Has you wanted me
☒ 4. Had you want me

Question ID : 630680379184
Option 1 ID : 6306801477782
Option 2 ID : 6306801477779
Option 3 ID : 6306801477781
Option 4 ID : 6306801477780
Status : Answered
Chosen Option : 1

Q.16 Choose the most appropriate one-word substitution for "Anything which is no longer in use"

- Ans ☒ 1. Pristine
☒ 2. Obsolete
☒ 3. New
☒ 4. Lapsed

Question ID : 630680379183
Option 1 ID : 6306801477777
Option 2 ID : 6306801477775
Option 3 ID : 6306801477776
Option 4 ID : 6306801477778
Status : Answered
Chosen Option : 2

Q.17 Select the most appropriate option to complete the following sentence:
There was a _____ change in the weather.

- Ans ☒ 1. suddenly
☒ 2. sudden
☒ 3. silly
☒ 4. friendly

Question ID : 630680379192
Option 1 ID : 6306801477811
Option 2 ID : 6306801477812
Option 3 ID : 6306801477813
Option 4 ID : 6306801477814
Status : Answered
Chosen Option : 2

Q.18 Choose the most appropriate meaning of the below quoted idiom:
"Call it a day"

- Ans ☒ 1. No intentions of working at all
☒ 2. To start working on something immediately
☒ 3. To finish a work in a timely manner
☒ 4. To stop working on something and plan to pick it up again later

Question ID : 630680379195
Option 1 ID : 6306801477826
Option 2 ID : 6306801477823
Option 3 ID : 6306801477824
Option 4 ID : 6306801477825
Status : Answered
Chosen Option : 1

Q.19 Select the most appropriate option that can substitute the underlined segment in the given sentence.
The planets are _____ around the sun.

- Ans ☒ 1. rotating
☒ 2. rounding
☒ 3. Circling
☒ 4. revolving

Question ID : 630680379185
Option 1 ID : 6306801477786
Option 2 ID : 6306801477784
Option 3 ID : 6306801477783
Option 4 ID : 6306801477785
Status : Answered
Chosen Option : 4

Q.20 Choose the most appropriate meaning of the below mentioned word:
Debris

- Ans ☒ 1. Treasure
☒ 2. Prize
☒ 3. Rubbish
☒ 4. Pearl

Question ID : 630680379197
Option 1 ID : 6306801477831
Option 2 ID : 6306801477833
Option 3 ID : 6306801477834
Option 4 ID : 6306801477832
Status : Answered
Chosen Option : 4

Q.21 Parts of the following sentence have been given as option that contains an error in spelling. If you don't find any error, mark "No error" as your answer.
Three independant daily newspapers had been ordered to suspend publication effective immediately.

- Ans ☒ 1. publication
☒ 2. independant
☒ 3. immediately
☒ 4. No error

Question ID : 630680379199
Option 1 ID : 6306801477840
Option 2 ID : 6306801477839
Option 3 ID : 6306801477841
Option 4 ID : 6306801477842
Status : Answered
Chosen Option : 2

Comprehension:

Read the passage and answer the given questions

In its broadest sense, science encompasses the knowledge and experience that distinguishes humans from animals. This includes the ability to discern safe from poisonous foods, build shelters, and create tools for survival. However, for many people, science is often associated with abstract subjects like physics, chemistry, and biology, which are learned as part of formal education but seemingly have little relevance to daily living. This misconception could not be further from the truth, as our way of life is deeply dependent on the fruits of scientific progress.

The Renaissance first emphasized the value of scientific progress, but it was not until the 18th century Industrial Revolution in the West that the impact of science on everyday living became apparent. Advancements in land-tillage, commercial production, transportation, and mass-produced consumer goods were the hallmarks of this period. Since then, the application of science to meet the needs of everyday living has accelerated, in step with the rate of scientific discovery. Today, we have access to an enormous range of consumer goods, from frying pans to jet planes and from alarm clocks to computers. These products make life easier and more comfortable but are merely the adjuncts of civilization. Progress in real living is achieved through education, the arts, and the pursuit of beauty.

Science has given us safe and nutritious food, free from harmful bacteria and toxins, packaged in clean containers or hygienic tins. In pre-scientific times, food was often monotonous and dangerous, but today it is varied, thanks to improved sea, land, and air transport. Science has also made travel and leisure accessible to everyone, not just the privileged few. The steamer, the aircraft, and the motor-car have opened new horizons, and the increase in wealth brought about by science has given us the means to enjoy new leisure opportunities. The greatest advances in medicine have been made through the use of antibiotics and isotopes, which speedily cure many diseases and alleviate pain and illness.

In conclusion, science has completely transformed our everyday lives when properly applied. However, science can also be misused, with harmful consequences for the environment, workers, and human health. Chemicals can poison the land, industrial disease can harm workers, and science can be mobilized for warfare and destruction. Science is a powerful tool, but it is important to use it wisely from safe and nutritious food to comfortable and affordable clothing, from efficient office work to accessible travel and leisure, science has made it possible for us to enjoy a comfortable and healthy existence. However, it is important to use science judiciously, as it can have harmful consequences if misused.

SubQuestion No : 22

Q.22 What is the meaning of "apparent"?

- Ans
- ☒ 1. unlikely
 - ☒ 2. doubtful
 - ☒ 3. unclear
 - ☒ 4. possible

Question ID : 630680379180

Option 1 ID : 6306801477764

Option 2 ID : 6306801477763

Option 3 ID : 6306801477766

Option 4 ID : 6306801477765

Status : Answered

Chosen Option : 4

Comprehension:

Read the passage and answer the given questions

In its broadest sense, science encompasses the knowledge and experience that distinguishes humans from animals. This includes the ability to discern safe from poisonous foods, build shelters, and create tools for survival. However, for many people, science is often associated with abstract subjects like physics, chemistry, and biology, which are learned as part of formal education but seemingly have little relevance to daily living. This misconception could not be further from the truth, as our way of life is deeply dependent on the fruits of scientific progress.

The Renaissance first emphasized the value of scientific progress, but it was not until the 18th century Industrial Revolution in the West that the impact of science on everyday living became apparent. Advancements in land-tillage, commercial production, transportation, and mass-produced consumer goods were the hallmarks of this period. Since then, the application of science to meet the needs of everyday living has accelerated, in step with the rate of scientific discovery. Today, we have access to an enormous range of consumer goods, from frying pans to jet planes and from alarm clocks to computers. These products make life easier and more comfortable but are merely the adjuncts of civilization. Progress in real living is achieved through education, the arts, and the pursuit of beauty.

Science has given us safe and nutritious food, free from harmful bacteria and toxins, packaged in clean containers or hygienic tins. In pre-scientific times, food was often monotonous and dangerous, but today it is varied, thanks to improved sea, land, and air transport. Science has also made travel and leisure accessible to everyone, not just the privileged few. The steamer, the aircraft, and the motor-car have opened new horizons, and the increase in wealth brought about by science has given us the means to enjoy new leisure opportunities. The greatest advances in medicine have been made through the use of antibiotics and isotopes, which speedily cure many diseases and alleviate pain and illness.

In conclusion, science has completely transformed our everyday lives when properly applied. However, science can also be misused, with harmful consequences for the environment, workers, and human health. Chemicals can poison the land, industrial disease can harm workers, and science can be mobilized for warfare and destruction. Science is a powerful tool, but it is important to use it wisely from safe and nutritious food to comfortable and affordable clothing, from efficient office work to accessible travel and leisure, science has made it possible for us to enjoy a comfortable and healthy existence. However, it is important to use science judiciously, as it can have harmful consequences if misused.

SubQuestion No : 23

Q.23 Identify the suitable title for the passage

- Ans** ☒ 1. The Impact of Science on Everyday Life
- ☐ 2. Science and its harmful consequences
- ☐ 3. Challenges of scientific discovery
- ☐ 4. The Renaissance & Science

Question ID : 630680379179

Option 1 ID : 6306801477760

Option 2 ID : 6306801477762

Option 3 ID : 6306801477761

Option 4 ID : 6306801477759

Status : Not Answered

Chosen Option : --

Comprehension:

Read the passage and answer the given questions

In its broadest sense, science encompasses the knowledge and experience that distinguishes humans from animals. This includes the ability to discern safe from poisonous foods, build shelters, and create tools for survival. However, for many people, science is often associated with abstract subjects like physics, chemistry, and biology, which are learned as part of formal education but seemingly have little relevance to daily living. This misconception could not be further from the truth, as our way of life is deeply dependent on the fruits of scientific progress.

The Renaissance first emphasized the value of scientific progress, but it was not until the 18th century Industrial Revolution in the West that the impact of science on everyday living became apparent. Advancements in land-tillage, commercial production, transportation, and mass-produced consumer goods were the hallmarks of this period. Since then, the application of science to meet the needs of everyday living has accelerated, in step with the rate of scientific discovery. Today, we have access to an enormous range of consumer goods, from frying pans to jet planes and from alarm clocks to computers. These products make life easier and more comfortable but are merely the adjuncts of civilization. Progress in real living is achieved through education, the arts, and the pursuit of beauty.

Science has given us safe and nutritious food, free from harmful bacteria and toxins, packaged in clean containers or hygienic tins. In pre-scientific times, food was often monotonous and dangerous, but today it is varied, thanks to improved sea, land, and air transport. Science has also made travel and leisure accessible to everyone, not just the privileged few. The steamer, the aircraft, and the motor-car have opened new horizons, and the increase in wealth brought about by science has given us the means to enjoy new leisure opportunities. The greatest advances in medicine have been made through the use of antibiotics and isotopes, which speedily cure many diseases and alleviate pain and illness.

In conclusion, science has completely transformed our everyday lives when properly applied. However, science can also be misused, with harmful consequences for the environment, workers, and human health. Chemicals can poison the land, industrial disease can harm workers, and science can be mobilized for warfare and destruction. Science is a powerful tool, but it is important to use it wisely from safe and nutritious food to comfortable and affordable clothing, from efficient office work to accessible travel and leisure, science has made it possible for us to enjoy a comfortable and healthy existence. However, it is important to use science judiciously, as it can have harmful consequences if misused.

SubQuestion No : 24

Q.24 Identify the central theme of the passage

- Ans** ☒ 1. Science has made travel and leisure accessible to everyone, not just the privileged few. The steamer, the aircraft, and the motor-car have opened new horizons, and the increase in wealth brought about by science has given us the means to enjoy new leisure opportunities.
- ☒ 2. Science encompasses the knowledge and experience that distinguishes humans from animals. This includes the ability to discern safe from poisonous foods, build shelters, and create tools for survival
- ☒ 3. The Renaissance emphasized the value of scientific progress, but it was not until the 18th century Industrial Revolution in the West that the impact of science on everyday living became apparent.
- ☒ 4. Science has completely transformed our everyday lives when properly applied. science has made it possible for us to enjoy a comfortable and healthy existence

Question ID : 630680379178

Option 1 ID : 6306801477757

Option 2 ID : 6306801477756

Option 3 ID : 6306801477755

Option 4 ID : 6306801477758

Status : Answered

Chosen Option : 3

Comprehension:

Read the passage and answer the given questions

In its broadest sense, science encompasses the knowledge and experience that distinguishes humans from animals. This includes the ability to discern safe from poisonous foods, build shelters, and create tools for survival. However, for many people, science is often associated with abstract subjects like physics, chemistry, and biology, which are learned as part of formal education but seemingly have little relevance to daily living. This misconception could not be further from the truth, as our way of life is deeply dependent on the fruits of scientific progress.

The Renaissance first emphasized the value of scientific progress, but it was not until the 18th century Industrial Revolution in the West that the impact of science on everyday living became apparent. Advancements in land-tillage, commercial production, transportation, and mass-produced consumer goods were the hallmarks of this period. Since then, the application of science to meet the needs of everyday living has accelerated, in step with the rate of scientific discovery. Today, we have access to an enormous range of consumer goods, from frying pans to jet planes and from alarm clocks to computers. These products make life easier and more comfortable but are merely the adjuncts of civilization. Progress in real living is achieved through education, the arts, and the pursuit of beauty.

Science has given us safe and nutritious food, free from harmful bacteria and toxins, packaged in clean containers or hygienic tins. In pre-scientific times, food was often monotonous and dangerous, but today it is varied, thanks to improved sea, land, and air transport. Science has also made travel and leisure accessible to everyone, not just the privileged few. The steamer, the aircraft, and the motor-car have opened new horizons, and the increase in wealth brought about by science has given us the means to enjoy new leisure opportunities. The greatest advances in medicine have been made through the use of antibiotics and isotopes, which speedily cure many diseases and alleviate pain and illness.

In conclusion, science has completely transformed our everyday lives when properly applied. However, science can also be misused, with harmful consequences for the environment, workers, and human health. Chemicals can poison the land, industrial disease can harm workers, and science can be mobilized for warfare and destruction. Science is a powerful tool, but it is important to use it wisely from safe and nutritious food to comfortable and affordable clothing, from efficient office work to accessible travel and leisure, science has made it possible for us to enjoy a comfortable and healthy existence. However, it is important to use science judiciously, as it can have harmful consequences if misused.

SubQuestion No : 25

Q.25 Identify the inferences drawn from the passage

- Ans ☒ 1. Human being's life is not so deeply dependent on the fruits of scientific progress.
- ☒ 2. Science is often associated with abstract subjects like physics, chemistry, and biology, which are learned as part of formal education but seemingly have little relevance to daily living.
- ☒ 3. Science has completely transformed our everyday lives when properly applied. However, science can also be misused, with harmful consequences for the environment, workers, and human health
- ☒ 4. In pre-scientific times, food was often monotonous and dangerous, but today it is varied, thanks to improved sea, land, and air transport.

Question ID : 630680379181

Option 1 ID : 6306801477770

Option 2 ID : 6306801477768

Option 3 ID : 6306801477769

Option 4 ID : 6306801477767

Status : Not Answered

Chosen Option : --