



रेल भर्ती बोर्ड / RAILWAY RECRUITMENT BOARDS  
सी ई एन आर आर सी - ०१/२०१९ - CEN RRC - 01/2019



Roll Number	
Candidate Name	
Test Center Name	iON Digital Zone iDZ 2 Mathura Road
Test Date	09/09/2022
Test Time	5:00 PM - 6:30 PM
Subject	Level 1

\* Note

Correct Answer will carry 1 mark per Question.  
Incorrect Answer will carry 1/3 Negative mark per Question.

- Options shown in green color with a tick icon are correct.
- Chosen option on the right of the question indicates the option selected by the candidate.

Section : Level 1

**Q.1** The Revised PMJVK Scheme 2022-23, will now be implemented in all districts of the country including all the aspirational districts. States/ UTs can propose infrastructure projects in the identified areas where the concentration of minority population is more than \_\_\_\_\_ in the catchment area (5 km radius).

- Ans
- 1. 10%
  - 2. 15%
  - 3. 20%
  - 4. 25%

Question ID : 7518976546  
Option 1 ID : 75189726181  
Option 2 ID : 75189726182  
Option 3 ID : 75189726183  
Option 4 ID : 75189726184  
Status : Not Answered  
Chosen Option : --

**Q.2** In 1989, which committee recommended constitutional recognition for the local government bodies?

- Ans
- 1. Vasudev Committee
  - 2. PK Thungon Committee
  - 3. Vaghul Committee
  - 4. AK Mathur Committee

Question ID : 7518979453  
Option 1 ID : 75189737811  
Option 2 ID : 75189737809  
Option 3 ID : 75189737812  
Option 4 ID : 75189737810  
Status : Not Answered  
Chosen Option : --

Q.3 Refer to the following number series and answer the question.

13 10 17 25 58 63 94 8 92 29

How many even numbers are immediately followed by a multiple of 3?

- Ans
- 1. 4
  - 2. 2
  - 3. 3
  - 4. 1

Question ID : 7518979753  
Option 1 ID : 75189739009  
Option 2 ID : 75189739011  
Option 3 ID : 75189739010  
Option 4 ID : 75189739012  
Status : Answered  
Chosen Option : 4

Q.4 The quadratic equation which has real and equal roots  $\frac{3}{5}$  is:

- Ans
- 1.  $x^2 - 30x + 3 = 0$
  - 2.  $x^2 - 6x + 9 = 0$
  - 3.  $25x^2 - 30x + 9 = 0$
  - 4.  $5x^2 - 6x + 9 = 0$

Question ID : 7518979309  
Option 1 ID : 75189737235  
Option 2 ID : 75189737234  
Option 3 ID : 75189737236  
Option 4 ID : 75189737233  
Status : Answered  
Chosen Option : 3

Q.5 Which of the following numbers will replace the question mark (?) in the given series?

96, 98, 102, 110, 126, ?

- Ans
- 1. 162
  - 2. 166
  - 3. 158
  - 4. 160

Question ID : 7518978303  
Option 1 ID : 75189733212  
Option 2 ID : 75189733211  
Option 3 ID : 75189733209  
Option 4 ID : 75189733210  
Status : Answered  
Chosen Option : 3

**Q.6** The curved surface area of a cylinder is  $1848 \text{ cm}^2$  and its base radius is 19.6 cm. The height of the cylinder is:

- Ans**
- 1. 13 cm
  - 2. 14 cm
  - 3. 15 cm
  - 4. 17 cm

Question ID : 7518979326

Option 1 ID : 75189737302

Option 2 ID : 75189737303

Option 3 ID : 75189737304

Option 4 ID : 75189737301

Status : Answered

Chosen Option : 3

**Q.7** Given below is a statement followed by two possible conclusions I and II. Read the information carefully and select the correct option.

**Statement:**

The state government of state X has decided to move 40% of the city buses from the south of city A to the west of city A for the monsoon season.

Which of the following can be concluded from the given information?

I. The inflow of passengers in the western part of the city is usually substantially more during the monsoon season than the rest of the year.

II. The buses that remain in the south of city A will be sufficient to manage the general inflow of passengers.

- Ans**  1.

Neither I nor II can be concluded from the given information.

- 2. Only II can be concluded from the given information.
- 3. Both I and II can be concluded from the given information.
- 4. Only I can be concluded from the given information.

Question ID : 7518979089

Option 1 ID : 75189736356

Option 2 ID : 75189736354

Option 3 ID : 75189736355

Option 4 ID : 75189736353

Status : Answered

Chosen Option : 4

Q.8 Select the number from among the given options that can replace the question mark (?) in the following series.

67, 67, 56, ?, 45, 45, 34, 34, 23, 23, 12

- Ans
- 1. 67
  - 2. 45
  - 3. 53
  - 4. 56

Question ID : 7518978036  
Option 1 ID : 75189732143  
Option 2 ID : 75189732141  
Option 3 ID : 75189732144  
Option 4 ID : 75189732142  
Status : Answered  
Chosen Option : 4

Q.9 In a cell, where does the process of breakdown of glucose, a 6-carbon molecule, to pyruvate, a 3-carbon molecule, take place?

- Ans
- 1. Cytoplasm
  - 2. Chloroplast
  - 3. Golgi apparatus
  - 4. Mitochondria

Question ID : 7518977798  
Option 1 ID : 75189731190  
Option 2 ID : 75189731191  
Option 3 ID : 75189731192  
Option 4 ID : 75189731189  
Status : Answered  
Chosen Option : 2

Q.10 Refer to the following letter, number, symbol series and answer the question.

(Left) H ^ 5 T & M 4 @ 5 # 1 4 J 3 P H 9 L ! 5 2 (Right)

If all numbers are dropped from the series, which of the following will be fifth from the right?

- Ans
- 1. J
  - 2. @
  - 3. L
  - 4. P

Question ID : 7518979161  
Option 1 ID : 75189736643  
Option 2 ID : 75189736642  
Option 3 ID : 75189736641  
Option 4 ID : 75189736644  
Status : Answered  
Chosen Option : 1

Q.11 If the length of a conductor is increased five times, keeping material and thickness same, its resistance will

- Ans
- 1. become one-fifth of the original
  - 2. remain same
  - 3. become five times of the original
  - 4. become double

Question ID : 7518979553  
Option 1 ID : 75189738211  
Option 2 ID : 75189738210  
Option 3 ID : 75189738212  
Option 4 ID : 75189738209  
Status : Answered  
Chosen Option : 1

Q.12 A, K, G, D, H and Y are sitting in a straight row facing north. K is at one extreme end. Y is sitting third from the right of K and second to the left of A. D and H are immediate neighbours. G is sitting to the immediate left of A. D sits third to the left of G. Who is to the immediate right of K?

- Ans
- 1. H
  - 2. G
  - 3. D
  - 4. Y

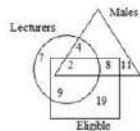
Question ID : 7518978952  
Option 1 ID : 75189735805  
Option 2 ID : 75189735808  
Option 3 ID : 75189735806  
Option 4 ID : 75189735807  
Status : Answered  
Chosen Option : 3

Q.13 As stated by the law of variable proportions, as additional units of a variable factor are combined with a given level of fixed factors and technology, the marginal product of the variable factor \_\_\_\_\_.

- Ans
- 1. increases sharply
  - 2. first declines and then increases
  - 3. declines sharply
  - 4. first increases and then declines

Question ID : 7518978555  
Option 1 ID : 75189734219  
Option 2 ID : 75189734218  
Option 3 ID : 75189734220  
Option 4 ID : 75189734217  
Status : Answered  
Chosen Option : 4

**Q.14** Study the given diagram carefully and answer the question. The numbers in different sections indicate the number of persons.



How many such male lecturers are there who are NOT eligible?

- Ans**
- 1. 10
  - 2. 2
  - 3. 4
  - 4. 6

Question ID : 7518979723  
 Option 1 ID : 75189738892  
 Option 2 ID : 75189738891  
 Option 3 ID : 75189738889  
 Option 4 ID : 75189738890  
 Status : Answered  
 Chosen Option : 3

**Q.15** In the year 2021, who among the following received the Shanti Swarup Bhatnagar Award in biological science?

- Ans**
- 1. Aditi Sen De
  - 2. Amit Singh
  - 3. Jyotirmayee Dash
  - 4. Kayarat Sai Krishnan

Question ID : 7518977150  
 Option 1 ID : 75189728600  
 Option 2 ID : 75189728597  
 Option 3 ID : 75189728599  
 Option 4 ID : 75189728598  
 Status : Not Answered  
 Chosen Option : --

Q.16 If  $7\sin^2x + 3\cos^2x = 4$ , and  $x$  is acute angle, then the value of  $\cot x + \tan x$  will be:

- Ans
- 1.  $\frac{5}{\sqrt{3}}$
  - 2.  $\frac{2}{\sqrt{3}}$
  - 3.  $\frac{4}{\sqrt{3}}$
  - 4.  $\frac{7}{\sqrt{3}}$

Question ID : 7518979346  
Option 1 ID : 75189737383  
Option 2 ID : 75189737381  
Option 3 ID : 75189737382  
Option 4 ID : 75189737384  
Status : Answered  
Chosen Option : 3

Q.17 According to the 2011 census of languages, which is the second highest spoken language in India?

- Ans
- 1. Telugu
  - 2. Tamil
  - 3. Gujarati
  - 4. Bengali

Question ID : 7518979389  
Option 1 ID : 75189737553  
Option 2 ID : 75189737555  
Option 3 ID : 75189737556  
Option 4 ID : 75189737554  
Status : Answered  
Chosen Option : 4

Q.18 The Third Five-Year Plan of India was launched under the leadership of \_\_\_\_\_.

- Ans
- 1. Gulzarilal Nanda
  - 2. Jawaharlal Nehru
  - 3. Morarji Desai
  - 4. Lal Bahadur Shastri

Question ID : 7518977519  
Option 1 ID : 75189730074  
Option 2 ID : 75189730075  
Option 3 ID : 75189730076  
Option 4 ID : 75189730073  
Status : Answered  
Chosen Option : 2

Q.19 Who among the following became the Vice -President of India from 11th August 2022?

- Ans
- 1. B. D. Mishra
  - 2. Biswabhusan Harichandan
  - 3. Phagu Chauhan
  - 4. Jagdeep Dhankhar

Question ID : 7518979448  
Option 1 ID : 75189737790  
Option 2 ID : 75189737789  
Option 3 ID : 75189737792  
Option 4 ID : 75189737791  
Status : Answered  
Chosen Option : 4

Q.20 The value of  $[(5^2)^4 \times 5^3] \div 5^9$  is:

- Ans
- 1. 25
  - 2. 125
  - 3.  $\frac{1}{5}$
  - 4. 5

Question ID : 7518979203  
Option 1 ID : 75189736811  
Option 2 ID : 75189736810  
Option 3 ID : 75189736812  
Option 4 ID : 75189736809  
Status : Answered  
Chosen Option : 1

Q.21 Name the instrument used by the physicians to measure blood pressure.

- Ans
- 1. Echocardiogram
  - 2. Sphygmomanometer
  - 3. Stethoscope
  - 4. Spirometer

Question ID : 7518974392  
Option 1 ID : 75189717565  
Option 2 ID : 75189717566  
Option 3 ID : 75189717567  
Option 4 ID : 75189717568  
Status : Answered  
Chosen Option : 2

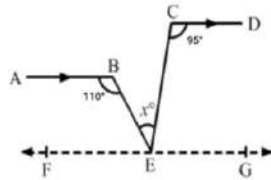


Q.22 Value of refractive index can be calculated by using:

- Ans
- 1. Newton's law
  - 2. Ohm's law
  - 3. Snell's law
  - 4. Maxwell's law

Question ID : 7518979506  
 Option 1 ID : 75189738024  
 Option 2 ID : 75189738021  
 Option 3 ID : 75189738023  
 Option 4 ID : 75189738022  
 Status : Not Answered  
 Chosen Option : --

Q.23 In the given figure, lines AB and CD are parallel to line FG. E is a point on the line FG. It is given that  $\angle ABE = 110^\circ$ ,  $\angle ECD = 95^\circ$  and  $\angle BEC = x^\circ$ . The value of x is:



- Ans
- 1.  $25^\circ$
  - 2.  $80^\circ$
  - 3.  $60^\circ$
  - 4.  $30^\circ$

Question ID : 7518979334  
 Option 1 ID : 75189737333  
 Option 2 ID : 75189737335  
 Option 3 ID : 75189737334  
 Option 4 ID : 75189737336  
 Status : Answered  
 Chosen Option : 1

Q.24 The population of a village increases at the rate of 10% per annum. If its population 2 years ago was 10,000, the present population is:

- Ans
- 1. 12,000
  - 2. 12,400
  - 3. 12,100
  - 4. 11,000

Question ID : 7518979241  
 Option 1 ID : 75189736962  
 Option 2 ID : 75189736964  
 Option 3 ID : 75189736963  
 Option 4 ID : 75189736961  
 Status : Answered  
 Chosen Option : 3

Q.25 The Union Territory of Lakshadweep has \_\_\_\_\_ inhabited islands as of March 2022.

- Ans
- 1. 14
  - 2. 10
  - 3. 16
  - 4. 12

Question ID : 7518978567  
Option 1 ID : 75189734267  
Option 2 ID : 75189734266  
Option 3 ID : 75189734268  
Option 4 ID : 75189734265  
Status : Not Answered  
Chosen Option : --

Q.26 A dishonest shopkeeper uses false weights. He gains 30% on purchasing and 30% on selling. His profit percentage is:

- Ans
- 1. 99%
  - 2. 79%
  - 3. 69%
  - 4. 89%

Question ID : 7518978687  
Option 1 ID : 75189734745  
Option 2 ID : 75189734747  
Option 3 ID : 75189734748  
Option 4 ID : 75189734746  
Status : Answered  
Chosen Option : 3

Q.27 Consider the below statements and identify the correct answer.

Statement-I: The stinging hair of nettle leaves injects methanoic acid causing burning pain.

Statement-II: Use of a mild base like baking soda on the stung area gives relief.

- Ans
- 1. Only Statement II is correct.
  - 2. Only Statement I is correct.
  - 3. Both statements are correct. Statement II is not related to Statement I.
  - 4. Both Statements are correct. Statement II is related to Statement I.

Question ID : 7518973636  
Option 1 ID : 75189714544  
Option 2 ID : 75189714543  
Option 3 ID : 75189714541  
Option 4 ID : 75189714542  
Status : Not Answered  
Chosen Option : --

Q.28 In  $\Delta PQR$ , if  $\angle P : \angle Q : \angle R = 6 : 7 : 5$  then, the measure of  $\angle Q$  is:

- Ans
- 1.  $55^\circ$
  - 2.  $70^\circ$
  - 3.  $75^\circ$
  - 4.  $60^\circ$

Question ID : 7518979336  
Option 1 ID : 75189737341  
Option 2 ID : 75189737342  
Option 3 ID : 75189737344  
Option 4 ID : 75189737343  
Status : Answered  
Chosen Option : 2

Q.29 Five boxes A, B, C, D, and E are kept one over the other but not necessarily in the same order. The box A is not kept above or below box C or E which are kept together. Box B is kept at the third place above box C. There is only one box between box D and E and one of them is kept at the bottom. Which box is kept in the middle?

- Ans
- 1. D
  - 2. A
  - 3. B
  - 4. C

Question ID : 7518977900  
Option 1 ID : 75189731600  
Option 2 ID : 75189731597  
Option 3 ID : 75189731598  
Option 4 ID : 75189731599  
Status : Answered  
Chosen Option : 1

Q.30 Seven people, A, B, C, D, E, F and G, are sitting in a straight row, facing north. Only three people sit between A and G. Only two people sit to the left of A. F is not an immediate neighbour of G. F sits second to the right of E. C sits to the immediate right of B. Who sits at the extreme left end of the row?

- Ans
- 1. C
  - 2. A
  - 3. G
  - 4. D

Question ID : 7518978174  
Option 1 ID : 75189732695  
Option 2 ID : 75189732694  
Option 3 ID : 75189732696  
Option 4 ID : 75189732693  
Status : Answered  
Chosen Option : 4

**Q.31** If 3 is added to each odd digit and 1 is subtracted from each even digit in the number 4815421, what will be the sum of the digits that are third from the left and third from the right in the new number thus formed?

- Ans**
- 1. 11
  - 2. 10
  - 3. 9
  - 4. 7

Question ID : 7518978330  
Option 1 ID : 75189733319  
Option 2 ID : 75189733320  
Option 3 ID : 75189733317  
Option 4 ID : 75189733318  
Status : Answered  
Chosen Option : 4

**Q.32** To obtain a virtual and erect image by reflection from a concave mirror of focal length 20 cm, the object should be placed:

- Ans**
- 1. at zero
  - 2. between 0-20 cm
  - 3. between 20-40 cm
  - 4. at 20 cm

Question ID : 7518979490  
Option 1 ID : 75189737960  
Option 2 ID : 75189737959  
Option 3 ID : 75189737958  
Option 4 ID : 75189737957  
Status : Not Answered  
Chosen Option : --

**Q.33** When blue and orange lights, which are parallel to each other, are passed through prism then:

- Ans**
- 1. blue ray will bend more
  - 2. both emergent rays will be parallel
  - 3. blue ray will bend towards the top
  - 4. orange ray will bend more

Question ID : 7518979525  
Option 1 ID : 75189738100  
Option 2 ID : 75189738097  
Option 3 ID : 75189738098  
Option 4 ID : 75189738099  
Status : Answered  
Chosen Option : 2

**Q.34** What is the form of contraception that can help stop the spread of sexually transmitted diseases to some extent?

- Ans**
- 1. IUD
  - 2. Vasectomy
  - 3. Oral contraceptive pills
  - 4. Condoms

Question ID : 7518974424  
Option 1 ID : 75189717695  
Option 2 ID : 75189717693  
Option 3 ID : 75189717694  
Option 4 ID : 75189717696  
Status : Answered  
Chosen Option : 4

**Q.35** Six persons, P, Q, R, S, T and U travelled in different months of the same year viz. January, February, March, July, September and December.  
R travelled in September. Only one person travelled between R and T. No one travelled between U and P. P travelled in a month after U. More than two people travelled between P and S. Who among them travelled in July?

- Ans**
- 1. Q
  - 2. S
  - 3. P
  - 4. T

Question ID : 7518978192  
Option 1 ID : 75189732766  
Option 2 ID : 75189732765  
Option 3 ID : 75189732768  
Option 4 ID : 75189732767  
Status : Answered  
Chosen Option : 1

**Q.36** The cost of 2 kg of apples and 2 kg of grapes on a day was found to be ₹160. After a month, the cost of 4 kg of apples and 3 kg of grapes was ₹300. Assuming the costs were not changed during the month, the cost of apples (per kg) will be:

- Ans**
- 1. ₹20
  - 2. ₹40
  - 3. ₹120
  - 4. ₹60

Question ID : 7518979286  
Option 1 ID : 75189737143  
Option 2 ID : 75189737142  
Option 3 ID : 75189737141  
Option 4 ID : 75189737144  
Status : Answered  
Chosen Option : 4

**Q.37** Select the set in which the numbers are related in the same way as are the numbers of the following sets.

NOTE: Operations should be performed on the whole numbers, without breaking down the numbers into its constituent digits. E.g. 13 – Operations on 13 such as adding/subtracting/multiplying etc. to 13 can be performed. Breaking down 13 into 1 and 3 and then performing mathematical operations on 1 and 3 is not allowed)

(1, 2)

(5, 10)

**Ans** ✓ 1. 4, 8

✗ 2. 7, 405

✗ 3. 2, 10

✗ 4. 3, 33

Question ID : 7518978059

Option 1 ID : 75189732234

Option 2 ID : 75189732235

Option 3 ID : 75189732233

Option 4 ID : 75189732236

Status : Answered

Chosen Option : 1

**Q.38** Which Muslim festival is celebrated to mark the culmination of the hajj (pilgrimage) rites at Minā, Saudi Arabia, near Mecca?

**Ans** ✗ 1. Milad un-Nabi

✓ 2. Eid Al-Adha

✗ 3. Muharram

✗ 4. Eid-Ul-Fitr

Question ID : 7518979397

Option 1 ID : 75189737586

Option 2 ID : 75189737585

Option 3 ID : 75189737588

Option 4 ID : 75189737587

Status : Answered

Chosen Option : 2

**Q.39** Which of the following alphanumeric-clusters will replace the question mark (?) in the given series to make it logically complete?

P5U, N7U, L3O, J8R, ?

- Ans**
- 1. H2F
  - 2. H4D
  - 3. H2J
  - 4. H3E

Question ID : 7518979744  
Option 1 ID : 75189738974  
Option 2 ID : 75189738976  
Option 3 ID : 75189738975  
Option 4 ID : 75189738973  
Status : Answered  
Chosen Option : 3

**Q.40** \_\_\_\_\_ is a government scheme meant for old age protection and social security of Unorganised workers.

- Ans**
- 1. Varishtha Pension Bima Yojana.
  - 2. Pradhan Mantri Shram Yogi Maandhan Yojana
  - 3. Atal Pension Yojna
  - 4. Life Cover under Pradhan Mantri Jan Dhan Yojana

Question ID : 7518978839  
Option 1 ID : 75189735355  
Option 2 ID : 75189735356  
Option 3 ID : 75189735353  
Option 4 ID : 75189735354  
Status : Answered  
Chosen Option : 2

**Q.41** The sum of two times Manavi's present age and Tanvi's present age is 35 years. Tanvi's father is presently three times as old as Tanvi. Manavi's brother's present age is 6 years more than Manavi's present age. The sum of the present ages of Tanvi's father and Manavi's brother is 56 years. What is the sum of the present ages (in years) of Manavi and Tanvi?

- Ans**
- 1. 24
  - 2. 27
  - 3. 23
  - 4. 31

Question ID : 7518978449  
Option 1 ID : 75189733795  
Option 2 ID : 75189733794  
Option 3 ID : 75189733796  
Option 4 ID : 75189733793  
Status : Answered  
Chosen Option : 3



In the given reaction, which product remains in the solution?

- Ans
- 1.  $BaCl_2$
  - 2.  $BaSO_4$
  - 3.  $NaCl$
  - 4.  $Na_2SO_4$

Question ID : 7518979620  
Option 1 ID : 75189738479  
Option 2 ID : 75189738477  
Option 3 ID : 75189738478  
Option 4 ID : 75189738480  
Status : Not Answered  
Chosen Option : --

Q.43 Which of the following is NOT a location for the Kumbh mela religious festival?

- Ans
- 1. Bodh Gaya
  - 2. Allahabad
  - 3. Haridwar
  - 4. Ujjain

Question ID : 7518979380  
Option 1 ID : 75189737520  
Option 2 ID : 75189737519  
Option 3 ID : 75189737518  
Option 4 ID : 75189737517  
Status : Answered  
Chosen Option : 1

Q.44 A man travels from point A to B at a speed of  $56\frac{1}{4}$  km/h and returns to A through same route by increasing his speed by  $33\frac{1}{5}\%$  of his earlier speed. His average speed (in km/h) for the whole journey is

- Ans
- 1.  $63\frac{1}{2}$
  - 2.  $60\frac{5}{7}$
  - 3.  $62\frac{1}{4}$
  - 4.  $64\frac{2}{7}$

Question ID : 7518978412  
Option 1 ID : 75189733647  
Option 2 ID : 75189733645  
Option 3 ID : 75189733646  
Option 4 ID : 75189733648  
Status : Answered  
Chosen Option : 3



Q.45 Apart from nucleus of the cell, which two cell organelles have their own DNA and Ribosomes?

- Ans
- 1. Plastids and Mitochondria
  - 2. Mitochondria and Lysosomes
  - 3. Plastids and Golgi bodies
  - 4. Mitochondria and Golgi bodies

Question ID : 7518974515

Option 1 ID : 75189718059

Option 2 ID : 75189718058

Option 3 ID : 75189718057

Option 4 ID : 75189718060

Status : Answered

Chosen Option : 4

Q.46 Which of the following molecules has only single bonds?

- Ans
- 1.  $O_2$
  - 2.  $CH_4$
  - 3.  $CO_2$
  - 4.  $N_2$

Question ID : 7518973389

Option 1 ID : 75189713556

Option 2 ID : 75189713553

Option 3 ID : 75189713554

Option 4 ID : 75189713555

Status : Answered

Chosen Option : 1

Q.47 A point on the principal axis which is at double the distance between P and F for a spherical mirror is:

- Ans
- 1. principal focus
  - 2. infinity
  - 3. centre of curvature
  - 4. pole

Question ID : 7518979470

Option 1 ID : 75189737880

Option 2 ID : 75189737877

Option 3 ID : 75189737878

Option 4 ID : 75189737879

Status : Not Answered

Chosen Option : --

**Q.48** The expenditure of Sudha is 125% more than her savings. If her expenditure decreases by 6% and savings increase by 26.5%, then by what percent does her income increase?

- Ans**
- 1. 20.5%
  - 2. 18.5%
  - 3. 8%
  - 4. 4%

Question ID : 7518978362  
Option 1 ID : 75189733445  
Option 2 ID : 75189733446  
Option 3 ID : 75189733447  
Option 4 ID : 75189733448  
Status : Answered  
Chosen Option : 2

**Q.49** Pole P is to the west of pole T and north of pole R. Pole Q is to the west of pole R and north of pole W. What is the position of pole R with respect to pole T?

- Ans**
- 1. North
  - 2. South
  - 3. South-west
  - 4. North-east

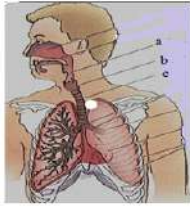
Question ID : 7518977366  
Option 1 ID : 75189729463  
Option 2 ID : 75189729461  
Option 3 ID : 75189729462  
Option 4 ID : 75189729464  
Status : Answered  
Chosen Option : 3

**Q.50** Six students, J, K, L, M, N and O, decided to race during a PE lesson. Each had a different speed in the race. N ran faster than M but slower than L. M ran slower than J but faster than O. K ran faster than L. J ran slower than L. Who among the six ran the fastest?

- Ans**
- 1. K
  - 2. N
  - 3. L
  - 4. J

Question ID : 7518974971  
Option 1 ID : 75189719881  
Option 2 ID : 75189719884  
Option 3 ID : 75189719882  
Option 4 ID : 75189719883  
Status : Answered  
Chosen Option : 1

**Q.51** The labelling for the parts a, b and c of the human respiratory system shown below are given as options. Identify the correct option.



- Ans**
- 1. a - Trachea, b - Larynx, c - Pharynx
  - 2. a - Larynx, b - Pharynx, c - Trachea
  - 3. a - Pharynx, b - Larynx, c - Trachea
  - 4. a - Pharynx, b - Trachea, c - Larynx

Question ID : **7518974590**  
 Option 1 ID : **75189718360**  
 Option 2 ID : **75189718357**  
 Option 3 ID : **75189718359**  
 Option 4 ID : **75189718358**  
 Status : **Answered**  
 Chosen Option : **3**

**Q.52** Study the given table and answer the question that follows.

The table presents the total number of new life policies (in thousands) sold by different bank branches over the years.

	2001	2002	2003	2004	2005
Branch A	53	34	54	54	76
Branch B	23	57	65	25	45
Branch C	54	54	56	76	34
Branch D	26	25	45	65	48
Branch E	64	76	76	92	90
Branch F	35	45	56	45	76
Branch G	62	52	45	65	45
Branch H	55	13	76	92	34

Which pair of branches have recorded lowest number of policy sales in these years taken together?

- Ans**
- 1. Branch C and branch D
  - 2. Branch E and branch F
  - 3. Branch B and branch D
  - 4. Branch A and branch E

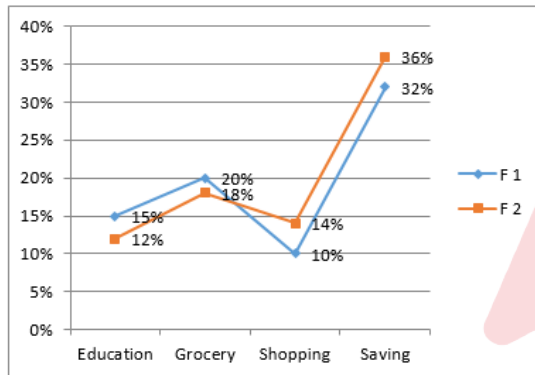
Question ID : **7518978102**  
 Option 1 ID : **75189732406**  
 Option 2 ID : **75189732407**  
 Option 3 ID : **75189732408**  
 Option 4 ID : **75189732405**  
 Status : **Answered**  
 Chosen Option : **3**

Q.53 International chess Olympiad 2022 is hosted by which of the following cities?

- Ans  1. Chennai  
 2. Kolkata  
 3. Bengaluru  
 4. Trivandrum

Question ID : 7518976795  
 Option 1 ID : 75189727178  
 Option 2 ID : 75189727179  
 Option 3 ID : 75189727177  
 Option 4 ID : 75189727180  
 Status : Answered  
 Chosen Option : 1

Q.54 The given graph provides the details of expenses (in percentage) by two families (F1 and F2). Study the graph and answer the question.



Find the average percentage expense for grocery and shopping by family F 1.

- Ans  1. 31%  
 2. 16%  
 3. 15%  
 4. 33%

Question ID : 7518979798  
 Option 1 ID : 75189739192  
 Option 2 ID : 75189739190  
 Option 3 ID : 75189739189  
 Option 4 ID : 75189739191  
 Status : Answered  
 Chosen Option : 3

Q.55 If '+' means '×', '×' means '+', '-' means '+', and '-' means '+', then what will be the value of the given expression?

$$999 - 3 + 10 \times 5 + 4$$

- Ans
- 1. 550
  - 2. 3000
  - 3. 1000
  - 4. 1001

Question ID : 7518979790  
Option 1 ID : 75189739157  
Option 2 ID : 75189739159  
Option 3 ID : 75189739158  
Option 4 ID : 75189739160

Status : Answered

Chosen Option : 4

Q.56

In March 2022, who was selected for the 31<sup>st</sup> GD Birla Award for Outstanding Contribution and Scientific Research in the field of Physics?

- Ans
- 1. Professor Amrita Hazra
  - 2. Professor Pinaki Talukdar
  - 3. Professor Narayan Pradhan
  - 4. Professor Deepak Dhar

Question ID : 7518973761  
Option 1 ID : 75189715044  
Option 2 ID : 75189715042  
Option 3 ID : 75189715041  
Option 4 ID : 75189715043

Status : Answered

Chosen Option : 4

Q.57 Poona Pact was between Mahatma Gandhi and \_\_\_\_\_.

- Ans
- 1. Dr B.R. Ambedkar
  - 2. Lord Irwin
  - 3. Lord Mountbatten
  - 4. Sardar Vallabhbhai Patel

Question ID : 7518977174  
Option 1 ID : 75189728693  
Option 2 ID : 75189728694  
Option 3 ID : 75189728696  
Option 4 ID : 75189728695  
Status : Answered  
Chosen Option : 1

Q.58 How many formula units of  $\text{CaSO}_4$  are attached to one molecule of water of crystallisation in Plaster of Paris?

- Ans
- 1. 2
  - 2. 4
  - 3. 1
  - 4. 3

Question ID : 7518979663  
Option 1 ID : 75189738650  
Option 2 ID : 75189738652  
Option 3 ID : 75189738649  
Option 4 ID : 75189738651  
Status : Answered  
Chosen Option : 1

Q.59 The highest common factor of any two distinct prime numbers is:

- Ans
- 1. 3
  - 2. 0
  - 3. 2
  - 4. 1

Question ID : 7518978642  
Option 1 ID : 75189734565  
Option 2 ID : 75189734568  
Option 3 ID : 75189734566  
Option 4 ID : 75189734567  
Status : Answered  
Chosen Option : 4

**Q.60** The Government of India set up a committee to review the Fiscal Responsibility and Budget Management Act 2003, under the Chairmanship of NK Singh, in the year \_\_\_\_\_.

- Ans**
- 1. 2014
  - 2. 2016
  - 3. 2013
  - 4. 2015

Question ID : **7518978541**  
 Option 1 ID : **75189734162**  
 Option 2 ID : **75189734164**  
 Option 3 ID : **75189734161**  
 Option 4 ID : **75189734163**  
 Status : **Answered**  
 Chosen Option : **1**

**Q.61** A, B and C can complete a piece of work in 20, 24 and 30 days, respectively. The number of days they take to finish it if they work together will be:

- Ans**
- 1. 8 days
  - 2. 5 days
  - 3. 6 days
  - 4. 7 days

Question ID : **7518979263**  
 Option 1 ID : **75189737051**  
 Option 2 ID : **75189737052**  
 Option 3 ID : **75189737049**  
 Option 4 ID : **75189737050**  
 Status : **Answered**  
 Chosen Option : **1**

**Q.62** Humans has been practicing water harvesting since ancient times. Some different forms of water harvesting structures are given in Column I and the place they are practiced in Column II. Select the option that shows the correct matching.

Column I (Water harvesting structures)	Column II (Places where they are practiced)
A. Surangams	i) Bihar
B. Pynes	ii) Rajasthan
C. Kulhs	iii) Kerala
D. Khadlins	iv) Himachal Pradesh

- Ans**
- 1. A-ii, B-iii, C-i, D-iv
  - 2. A-iii, B-i, C-iv, D-ii
  - 3. A-i, B-ii, C-iii, D-iv
  - 4. A-iii, B-ii, C-iv, D-i

Question ID : **7518974704**  
 Option 1 ID : **75189718814**  
 Option 2 ID : **75189718816**  
 Option 3 ID : **75189718813**  
 Option 4 ID : **75189718815**  
 Status : **Not Answered**  
 Chosen Option : **--**

**Q.63** A team of 30 men is supposed to complete a work in 41 days. After 25 days, 6 more men are employed, and the work is finished one day earlier. By how many days would it have been delayed, if 6 more men were not employed?

- Ans**
- 1. 2 days
  - 2. 4 days
  - 3. 3 days
  - 4. 1 day

Question ID : 7518979267  
Option 1 ID : 75189737066  
Option 2 ID : 75189737068  
Option 3 ID : 75189737067  
Option 4 ID : 75189737065  
Status : Not Answered  
Chosen Option : --

**Q.64** In a code language, 'you are my world' is written as 'kai po che lu', 'my home world' is written as 'je po kai', and 'she was my girl' is written as 'da mu kai va'. What is the code for the word 'world' in that language?

- Ans**
- 1. kai
  - 2. mu
  - 3. po
  - 4. lu

Question ID : 7518977676  
Option 1 ID : 75189730704  
Option 2 ID : 75189730701  
Option 3 ID : 75189730703  
Option 4 ID : 75189730702  
Status : Answered  
Chosen Option : 3

**Q.65** Who stated that the principle of maximum social advantage is the most fundamental principle lying at the root of public finance?

- Ans**
- 1. John R Hicks
  - 2. Hugh Dalton
  - 3. Arthur Cecil Pigou
  - 4. Martin EP Seligman

Question ID : 7518974226  
Option 1 ID : 75189716904  
Option 2 ID : 75189716902  
Option 3 ID : 75189716901  
Option 4 ID : 75189716903  
Status : Not Answered  
Chosen Option : --



Q.66 The safety device that works on the heating effect of electric current is:

- Ans
- 1. Switch
  - 2. Fuse
  - 3. Electric motor
  - 4. Heater

Question ID : 7518979567  
Option 1 ID : 75189738265  
Option 2 ID : 75189738266  
Option 3 ID : 75189738267  
Option 4 ID : 75189738268

Status : Answered  
Chosen Option : 1

Q.67 Three statements are followed by three conclusions numbered I, II and III. Assuming the statements to be true, even if they do not conform to real world knowledge, decide which of the given conclusions/possibilities can be true on the basis of the statements.

Statements:

1. Some biscuits are cookies.
2. Some cookies are pastries.
3. All pastries are creams.

Conclusions:

- I. Some pastries are biscuits.
- II. Some creams are biscuits.
- III. Some creams are cookies.

- Ans
- 1. Only conclusion II is true
  - 2. Only conclusion III is true
  - 3. Only conclusion I and II are true
  - 4. Only conclusion I is true

Question ID : 7518978209  
Option 1 ID : 75189732834  
Option 2 ID : 75189732835  
Option 3 ID : 75189732836  
Option 4 ID : 75189732833

Status : Answered  
Chosen Option : 2

Q.68 Which reaction is an example of a double displacement reaction?

- Ans
- 1.  $\text{Pb(s)} + \text{CuCl}_2(\text{aq}) \longrightarrow \text{PbCl}_2(\text{aq}) + \text{Cu(s)}$
  - 2.  $\text{Na}_2\text{SO}_4(\text{aq}) + \text{BaCl}_2(\text{aq}) \longrightarrow \text{BaSO}_4(\text{s}) + 2\text{NaCl}(\text{aq})$
  - 3.  $\text{Zn(s)} + \text{CuSO}_4(\text{aq}) \longrightarrow \text{ZnSO}_4(\text{aq}) + \text{Cu(s)}$
  - 4.  $\text{Fe(s)} + \text{CuSO}_4(\text{aq}) \longrightarrow \text{FeSO}_4(\text{aq}) + \text{Cu(s)}$

Question ID : 7518979621

Option 1 ID : 75189738484

Option 2 ID : 75189738482

Option 3 ID : 75189738483

Option 4 ID : 75189738481

Status : Answered

Chosen Option : 2

Q.69 What will be the value of the given expression if 4 and 7 are interchanged and also '\*' and '+' are interchanged?

$$63 \times 3 - 4 + 18 \div 7$$

- Ans
- 1. 56
  - 2. 86
  - 3. 48
  - 4. 68

Question ID : 7518979796

Option 1 ID : 75189739181

Option 2 ID : 75189739182

Option 3 ID : 75189739183

Option 4 ID : 75189739184

Status : Answered

Chosen Option : 2

Q.70 What is the altitude of the outermost range of Himalayas, the Shiwaliks?

- Ans
- 1. 800 to 1000 meter
  - 2. 600 to 800 meter
  - 3. 900 to 1100 meter
  - 4. 700 to 900 meter

Question ID : 7518979421

Option 1 ID : 75189737682

Option 2 ID : 75189737684

Option 3 ID : 75189737681

Option 4 ID : 75189737683

Status : Answered

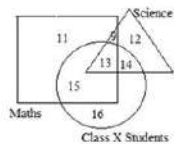
Chosen Option : 3

Q.71 Which air mass is warm?

- Ans
- 1. Continental Polar
  - 2. Continental Tropical
  - 3. Maritime Polar
  - 4. Continental Arctic

Question ID : 7518977252  
 Option 1 ID : 75189729005  
 Option 2 ID : 75189729008  
 Option 3 ID : 75189729007  
 Option 4 ID : 75189729006  
 Status : Answered  
 Chosen Option : 3

Q.72 Study the given diagram carefully and answer the question. The numbers in different sections indicate the number of persons.



How many class X students like to study either Maths or Science but NOT both?

- Ans
- 1. 13
  - 2. 28
  - 3. 29
  - 4. 27

Question ID : 7518979725  
 Option 1 ID : 75189738899  
 Option 2 ID : 75189738897  
 Option 3 ID : 75189738900  
 Option 4 ID : 75189738898  
 Status : Answered  
 Chosen Option : 3

Q.73 A number when increased by  $47\frac{1}{2}\%$ , gives 590. The number is:

- Ans
- 1. 700
  - 2. 500
  - 3. 600
  - 4. 400

Question ID : 7518978657  
 Option 1 ID : 75189734625  
 Option 2 ID : 75189734627  
 Option 3 ID : 75189734626  
 Option 4 ID : 75189734628  
 Status : Answered  
 Chosen Option : 4

**Q.74** Each vowel in the word HAPPILY is changed to the letter following it in the English alphabetical order and each consonant is changed to the letter preceding it in the English alphabetical order. Which of the following letters will appear twice in the group of letters thus formed?

- Ans**
- 1. O
  - 2. P
  - 3. K
  - 4. B

Question ID : 7518978245  
Option 1 ID : 75189732979  
Option 2 ID : 75189732977  
Option 3 ID : 75189732980  
Option 4 ID : 75189732978  
Status : Answered  
Chosen Option : 1

**Q.75** Express  $0.1\bar{7}$  in the form  $\frac{p}{q}$ , where p and q are integers and  $q \neq 0$ .

- Ans**
- 1.  $\frac{7}{45}$
  - 2.  $\frac{6}{49}$
  - 3.  $\frac{8}{45}$
  - 4.  $\frac{5}{49}$

Question ID : 7518979213  
Option 1 ID : 75189736849  
Option 2 ID : 75189736851  
Option 3 ID : 75189736850  
Option 4 ID : 75189736852  
Status : Answered  
Chosen Option : 1

**Q.76** Using empirical relation between the mean, median and mode, find the value of the median if the mean is 35 and mode is 140.

- Ans**
- 1. 90
  - 2. 100
  - 3. 70
  - 4. 80

Question ID : 7518978724  
Option 1 ID : 75189734894  
Option 2 ID : 75189734893  
Option 3 ID : 75189734896  
Option 4 ID : 75189734895  
Status : Answered  
Chosen Option : 3

Q.77 As on April 2022, the Indian Constitution contains \_\_\_\_\_ Articles, with 12 Schedules.

- Ans
- 1. 448
  - 2. 484
  - 3. 378
  - 4. 336

Question ID : 7518978921  
Option 1 ID : 75189735682  
Option 2 ID : 75189735683  
Option 3 ID : 75189735684  
Option 4 ID : 75189735681  
Status : Answered  
Chosen Option : 1

Q.78 A shopkeeper sells one battery for ₹650 at a profit of 30% and another battery for ₹950 at a loss of 5%. His overall gain or loss percentage is:

- Ans
- 1.  $8\frac{2}{3}\%$  gain
  - 2.  $9\frac{2}{3}\%$  loss
  - 3.  $6\frac{2}{3}\%$  gain
  - 4.  $7\frac{2}{3}\%$  loss

Question ID : 7518978686  
Option 1 ID : 75189734742  
Option 2 ID : 75189734741  
Option 3 ID : 75189734744  
Option 4 ID : 75189734743  
Status : Answered  
Chosen Option : 3

Q.79 Resistance of a conducting wire is 15 ohm. If another wire of the same material and length but having one-third radius is taken, then the resistance of the second wire will be \_\_\_\_\_.

- Ans
- 1. 45 ohm
  - 2. 5 ohm
  - 3. 60 ohm
  - 4. 135 ohm

Question ID : 7518979555  
Option 1 ID : 75189738218  
Option 2 ID : 75189738217  
Option 3 ID : 75189738220  
Option 4 ID : 75189738219  
Status : Answered  
Chosen Option : 2

**Q.80** Raghav starts from Point A and drives 30 km towards the north. He then takes a right turn, drives 34 km, turns right and drives 41 km. He then takes a right turn and drives 47 km. He takes a final right turn, drives 11 km and stops at Point P. How far and towards which direction should he drive in order to reach Point A from Point P in a straight line? (All turns are 90 degree turns only)

- Ans**
- 1. 13 km towards the south
  - 2. 13 km towards the east
  - 3. 15 km towards the west
  - 4. 23 km towards the east

Question ID : 7518978285

Option 1 ID : 75189733140

Option 2 ID : 75189733137

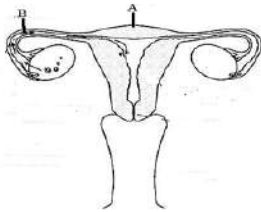
Option 3 ID : 75189733138

Option 4 ID : 75189733139

Status : Answered

Chosen Option : 2

**Q.81** The figure given below shows the sectional view of the human female reproductive system. Identify the option stating correct functions of the labelled parts A and B.



- Ans**
- 1. A - Fertilisation of egg, B - Implantation and development of embryo
  - 2. A - Implantation and development of embryo, B - Fertilisation of egg
  - 3. A - Fertilisation of egg, B - Formation of egg
  - 4. A - Formation of egg, B - Fertilisation of egg

Question ID : 7518974615

Option 1 ID : 75189718460

Option 2 ID : 75189718457

Option 3 ID : 75189718458

Option 4 ID : 75189718459

Status : Answered

Chosen Option : 2

**Q.82** Select the option in which the numbers are related in the same way as are the numbers of the given sets.

(NOTE: Operations should be performed on the whole numbers without breaking down the numbers into its constituent digits.

E.g. 13 – Operations on 13 such as adding /deleting /multiplying etc. to 13 can be performed. Breaking down 13 into 1 and 3 and then performing mathematical operations on 1 and 3 is not allowed)

(4, 13, 3)

(4, 19, 5)

**Ans**  1. (18, 28, 2)

2. (6, 14, 2)

3. (1, 25, 8)

4. (5, 30, 7)

Question ID : 7518979784

Option 1 ID : 75189739134

Option 2 ID : 75189739136

Option 3 ID : 75189739133

Option 4 ID : 75189739135

Status : Answered

Chosen Option : 2

**Q.83** Which country has been declared as the winner of the 3<sup>rd</sup> edition of the SAFF U-18 Women's Football Championship 2022?

**Ans**  1. Bangladesh

2. Pakistan

3. India

4. Nepal

Question ID : 7518979350

Option 1 ID : 75189737398

Option 2 ID : 75189737399

Option 3 ID : 75189737397

Option 4 ID : 75189737400

Status : Answered

Chosen Option : 3

**Q.84** In the given letter-cluster pairs, the first letter-cluster is related to the second letter-cluster following a certain logic. Study the given pairs carefully and from the given options, select the pair that follows the same logic.

HIY : ZVK

KUY : ZWN

- Ans**
- 1. KYT : WAL
  - 2. ABG : HCD
  - 3. APK : BRN
  - 4. AED : EGD

Question ID : 7518978034

Option 1 ID : 75189732133

Option 2 ID : 75189732134

Option 3 ID : 75189732135

Option 4 ID : 75189732136

Status : Answered

Chosen Option : 4

**Q.85** The elements having atomic numbers 15, 16, 17, and 18, respectively, are:

- Ans**
- 1. P, S, Cl and Ar
  - 2. Ar, Cl, S and P
  - 3. S, P, Cl and Ar
  - 4. P, S, Ar and Cl

Question ID : 7518979671

Option 1 ID : 75189738681

Option 2 ID : 75189738682

Option 3 ID : 75189738683

Option 4 ID : 75189738684

Status : Answered

Chosen Option : 3

**Q.86** In a class of 23 students Parul ranked 6<sup>th</sup> from the top and Shomya ranked 19<sup>th</sup> from the bottom. How many students ranked between Parul and Shomya?

- Ans**
- 1. 1
  - 2. 2
  - 3. 0
  - 4. 12

Question ID : 7518977892

Option 1 ID : 75189731566

Option 2 ID : 75189731567

Option 3 ID : 75189731565

Option 4 ID : 75189731568

Status : Answered

Chosen Option : 1



Q.87 If the 8-digit number  $3x5479y4$  is divisible by 88 and the 8-digit number  $425139z2$  is divisible by 9, then what is the greatest possible value of  $(3x + 2y - z)$ ?

- Ans
- 1. 25
  - 2. 33
  - 3. 35
  - 4. 37

Question ID : 7518978350  
Option 1 ID : 75189733397  
Option 2 ID : 75189733398  
Option 3 ID : 75189733399  
Option 4 ID : 75189733400  
Status : Answered  
Chosen Option : 3

Q.88 The quadratic equation whose roots are 2 and  $-\frac{1}{2}$  is:

- Ans
- 1.  $3x^2 - 3x - 2 = 0$
  - 2.  $5x^2 - 3x - 2 = 0$
  - 3.  $2x^2 - 5x - 2 = 0$
  - 4.  $2x^2 - 3x - 2 = 0$

Question ID : 7518979311  
Option 1 ID : 75189737241  
Option 2 ID : 75189737243  
Option 3 ID : 75189737242  
Option 4 ID : 75189737244  
Status : Answered  
Chosen Option : 3

Q.89 Magnetic field lines around the current carrying circular loop are:

- Ans
- 1. perpendicular to conductor
  - 2. concentric circles
  - 3. semi-circular
  - 4. parallel lines

Question ID : 7518979581  
Option 1 ID : 75189738321  
Option 2 ID : 75189738324  
Option 3 ID : 75189738323  
Option 4 ID : 75189738322  
Status : Answered  
Chosen Option : 2

Q.90 If  $(a + b) = 11$  and  $(a - b) = 3$  then, the value of  $(a^2 + b^2)$  is:

- Ans
- 1. 65
  - 2. 70
  - 3. 75
  - 4. 63

Question ID : 7518979282  
Option 1 ID : 75189737127  
Option 2 ID : 75189737126  
Option 3 ID : 75189737128  
Option 4 ID : 75189737125  
Status : Answered  
Chosen Option : 1

Q.91 A strong magnet is moved towards a stationary coil. The induced current in the coil is the maximum when the angle between the direction of motion of the magnet and the plane of the coil is \_\_\_\_\_.

- Ans
- 1.  $15^\circ$
  - 2.  $45^\circ$
  - 3.  $75^\circ$
  - 4.  $90^\circ$

Question ID : 7518976755  
Option 1 ID : 75189727017  
Option 2 ID : 75189727018  
Option 3 ID : 75189727019  
Option 4 ID : 75189727020  
Status : Answered  
Chosen Option : 2

Q.92 How many such pairs of letters are there in the word REGULATION (in the forward direction) which have as many letters between them in the word as there are in the English alphabetical order?

- Ans
- 1. 1
  - 2. 3
  - 3. 4
  - 4. 2

Question ID : 7518977960  
Option 1 ID : 75189731837  
Option 2 ID : 75189731839  
Option 3 ID : 75189731840  
Option 4 ID : 75189731838  
Status : Answered  
Chosen Option : 3

Q.93 Which of the following leads to global warming?

- Ans
- 1. Increase in the levels of atmospheric ozone
  - 2. Increase in CO<sub>2</sub> percentage in the air
  - 3. Afforestation
  - 4. Accumulation of plastic waste

Question ID : 7518977858  
Option 1 ID : 75189731431  
Option 2 ID : 75189731430  
Option 3 ID : 75189731429  
Option 4 ID : 75189731432  
Status : Answered  
Chosen Option : 2

Q.94 What was the fundamental property used by Mendeleev to arrange elements in his Periodic Table?

- Ans
- 1. Liquid nature
  - 2. Solid nature
  - 3. Gaseous nature
  - 4. Atomic mass

Question ID : 7518979681  
Option 1 ID : 75189738724  
Option 2 ID : 75189738723  
Option 3 ID : 75189738721  
Option 4 ID : 75189738722  
Status : Answered  
Chosen Option : 4

Q.95 The sum of three consecutive natural numbers is 141. The middle number is:

- Ans
- 1. 46
  - 2. 47
  - 3. 56
  - 4. 57

Question ID : 7518978741  
Option 1 ID : 75189734964  
Option 2 ID : 75189734963  
Option 3 ID : 75189734962  
Option 4 ID : 75189734961  
Status : Answered  
Chosen Option : 2

Q.96 The value of  $5 + (12 - 3 \times 4) - 6 \div 2$  is:

- Ans
- 1. 6
  - 2. -6
  - 3. 2
  - 4. -2

Question ID : 7518979197  
Option 1 ID : 75189736786  
Option 2 ID : 75189736785  
Option 3 ID : 75189736788  
Option 4 ID : 75189736787  
Status : Answered  
Chosen Option : 3

Q.97 Which formula is related to an unsaturated carbon compound?

- Ans
- 1.  $C_2H_4$
  - 2.  $C_2H_6$
  - 3.  $C_3H_8$
  - 4.  $C_4H_{10}$

Question ID : 7518979591  
Option 1 ID : 75189738361  
Option 2 ID : 75189738362  
Option 3 ID : 75189738363  
Option 4 ID : 75189738364  
Status : Answered  
Chosen Option : 3

Q.98 In a certain code language, 'SYMBOLIC' is written as 'CPTZNMJD' and 'SYMPATHY' is written as 'QBTZNUIZ'. How will 'SURVIVAL' be written in that language?

- Ans
- 1. WJTUSVBM
  - 2. TJWVSMBW
  - 3. WJTWSBWM
  - 4. WJTWSWBM

Question ID : 7518977678  
Option 1 ID : 75189730711  
Option 2 ID : 75189730710  
Option 3 ID : 75189730709  
Option 4 ID : 75189730712  
Status : Answered  
Chosen Option : 4

**Q.99** Six friends P, Q, R, M, N and O prepared together for a class test and each one scored different marks. Only 3 friends scored less marks than R. N scored less marks than only 1 friend. Only O scored marks between the marks of P and M. Who scored the highest marks?

- Ans**
- 1. R
  - 2. M
  - 3. P
  - 4. Q

Question ID : 7518979739  
Option 1 ID : 75189738956  
Option 2 ID : 75189738953  
Option 3 ID : 75189738954  
Option 4 ID : 75189738955  
Status : Answered  
Chosen Option : 4

**Q.100** If the radius of a sphere is 5 cm, then its surface area is:

- Ans**
- 1.  $121 \pi \text{ cm}^2$
  - 2.  $81 \pi \text{ cm}^2$
  - 3.  $100 \pi \text{ cm}^2$
  - 4.  $144 \pi \text{ cm}^2$

Question ID : 7518978786  
Option 1 ID : 75189735143  
Option 2 ID : 75189735141  
Option 3 ID : 75189735144  
Option 4 ID : 75189735142  
Status : Answered  
Chosen Option : 3