



रेल भर्ती बोर्ड / RAILWAY RECRUITMENT BOARDS
सी ई एन आर आर सी - ०१/२०१९ - CEN RRC - 01/2019



Roll Number	
Candidate Name	
Test Center Name	SINCO LEARNING CENTER
Test Date	22/08/2022
Test Time	9:00 AM - 10:30 AM
Subject	Level 1

* Note

Correct Answer will carry 1 mark per Question.
Incorrect Answer will carry 1/3 Negative mark per Question.

- Options shown in green color with a tick icon are correct.
- Chosen option on the right of the question indicates the option selected by the candidate.

Section : Level 1

Q.1 Rani borrowed an amount of ₹2,00,000 from the bank to start a business. How much simple interest will she pay at the rate of 7% per annum after 2 years?

- Ans
- 1. ₹26,000
 - 2. ₹28,500
 - 3. ₹28,000
 - 4. ₹24,000

Question ID : 7518975846
Option 1 ID : 75189723381
Option 2 ID : 75189723384
Option 3 ID : 75189723383
Option 4 ID : 75189723382
Status : Answered
Chosen Option : 3

Q.2 As of July 2022, which of the following states has set up Bharosa Centres – a one-stop facility to aid women and children subjected to sexual assaults and violence?

- Ans
- 1. Telangana
 - 2. Kerala
 - 3. Odisha
 - 4. Gujarat

Question ID : 7518976557
Option 1 ID : 75189726226
Option 2 ID : 75189726227
Option 3 ID : 75189726225
Option 4 ID : 75189726228
Status : Not Answered
Chosen Option : --

Q.3 The diagonal of a quadrilateral is 32 m long, and its two offsets are 6 m and 10 m long. The area of the quadrilateral is

- Ans**
- 1. 256 m²
 - 2. 220 m²
 - 3. 276 m²
 - 4. 250 m²

Question ID : 7518975747

Option 1 ID : 75189722987

Option 2 ID : 75189722985

Option 3 ID : 75189722988

Option 4 ID : 75189722986

Status : **Not Answered**

Chosen Option : --

Q.4 Mahesh started from a point facing towards the west, turned left and walked for X m, then turned right and walked for 22 m, then turned left and walked for 11 m, and then turned left again and walked for 22 m. He is exactly 21 m away from the starting point. What is the value of X which was covered in the first leg of his journey?

(All turns are 90 degree turns only)

- Ans**
- 1. 11 m
 - 2. 10 m
 - 3. 12 m
 - 4. 21 m

Question ID : 7518974845

Option 1 ID : 75189719378

Option 2 ID : 75189719377

Option 3 ID : 75189719379

Option 4 ID : 75189719380

Status : **Answered**

Chosen Option : 2

Q.5 Which of the following sports events was hosted by India from 20 January 2022 in Mumbai, Navi Mumbai and Pune?

- Ans**
- 1. AFC Women's Asian Cup
 - 2. FIFA Women's World Cup
 - 3. Asian Champions Trophy
 - 4. Asian Track & Para-Cycling Championships

Question ID : 7518974128

Option 1 ID : 75189716511

Option 2 ID : 75189716510

Option 3 ID : 75189716509

Option 4 ID : 75189716512

Status : **Not Answered**

Chosen Option : --

Q.6 The ratio of a field produced due to a current carrying circular coil of n turns, to that of a field produced due to a single circular loop of the same radius carrying the same current is:

- Ans
- 1. $1 : n$
 - 2. $n : 1$
 - 3. $1 : n^2$
 - 4. $1 : 1$

Question ID : 7518975519
Option 1 ID : 75189722074
Option 2 ID : 75189722073
Option 3 ID : 75189722075
Option 4 ID : 75189722076

Status : Answered
Chosen Option : 2

Q.7 Find the nature of the roots of $x^2 - 14x + 49 = 0$

- Ans
- 1. Distinct roots
 - 2. Real and equal roots
 - 3. Imaginary roots
 - 4. No real roots

Question ID : 7518975738
Option 1 ID : 75189722951
Option 2 ID : 75189722950
Option 3 ID : 75189722952
Option 4 ID : 75189722949

Status : Answered
Chosen Option : 2

Q.8 Elements of which of the following groups have the tendency to form acidic oxide?

- Ans
- 1. 2
 - 2. 1
 - 3. 16
 - 4. 13

Question ID : 7518973520
Option 1 ID : 75189714078
Option 2 ID : 75189714077
Option 3 ID : 75189714080
Option 4 ID : 75189714079

Status : Answered
Chosen Option : 2

Q.9 Answer the following question which is based on the given four letter clusters.

STED, LAYM, JOEK, CLDP

If in each of the clusters, each letter is changed to the next letter in the English alphabetical order, how many letter clusters thus formed will have no vowel?

- Ans
- 1. None
 - 2. Three
 - 3. One
 - 4. Two

Question ID : 7518974815

Option 1 ID : 75189719260

Option 2 ID : 75189719257

Option 3 ID : 75189719259

Option 4 ID : 75189719258

Status : Answered

Chosen Option : 4

Q.10 Which of the following options is the closest approximate value which will come in place of question mark(?) in the following equation?

$$(\sqrt{360} + 12 \div 6 \times 3 - \sqrt{170}) \div 2 = ?$$

- Ans
- 1. 4
 - 2. 6
 - 3. 5
 - 4. 8

Question ID : 7518975091

Option 1 ID : 75189720361

Option 2 ID : 75189720362

Option 3 ID : 75189720364

Option 4 ID : 75189720363

Status : Answered

Chosen Option : 2

Q.11 Bhawna Jat, Ravina and Munita Prajapati's combined effort won India a bronze medal in the team category of the women's 20 km race walk event at the World Race Walking Team Championships 2022 in: _____.

- Ans
- 1. Oman
 - 2. United Arab Emirates
 - 3. Sweden
 - 4. Norway

Question ID : 7518976511

Option 1 ID : 75189726043

Option 2 ID : 75189726042

Option 3 ID : 75189726044

Option 4 ID : 75189726041

Status : Not Answered

Chosen Option : --

Q.12 Yeast is used in making _____.

- Ans
- 1. antibiotics
 - 2. wine
 - 3. cheese
 - 4. curd

Question ID : 7518974336
Option 1 ID : 75189717344
Option 2 ID : 75189717342
Option 3 ID : 75189717343
Option 4 ID : 75189717341
Status : Answered
Chosen Option : 2

Q.13 Simplify: $3x(x - 6) + x^2 + 6x - 9 + 24 - x^3$.

- Ans
- 1. $15 - 12x + 4x^2 + x^3$
 - 2. $15 + 12x + 4x^2 - x^3$
 - 3. $15 - 12x + 4x^2 - x^3$
 - 4. $15 + 12x + 4x^2 + x^3$

Question ID : 7518975907
Option 1 ID : 75189723628
Option 2 ID : 75189723625
Option 3 ID : 75189723626
Option 4 ID : 75189723627
Status : Answered
Chosen Option : 3

Q.14 How many subjects are entitled and listed in the Indian Constitution for Panchayat?

- Ans
- 1. 29
 - 2. 33
 - 3. 25
 - 4. 19

Question ID : 7518973942
Option 1 ID : 75189715768
Option 2 ID : 75189715767
Option 3 ID : 75189715765
Option 4 ID : 75189715766
Status : Answered
Chosen Option : 1

Q.15 In the given letter-cluster pairs, the first letter-cluster is related to the second letter-cluster following a certain logic. Study the given pairs carefully, and from the given options, select the pair that follows the same logic.

PARTS : RDVYY

CLOSE : EOSXK

- Ans**
- 1. MANGO : ODRTS
 - 2. TEMPO : PQOFU
 - 3. RHINO : TKMSU
 - 4. CLASS : EODVV

Question ID : 7518975276
 Option 1 ID : 75189721104
 Option 2 ID : 75189721101
 Option 3 ID : 75189721102
 Option 4 ID : 75189721103
 Status : Answered
 Chosen Option : 3

Q.16 Study the given letter, number, symbol series and answer the question that follows.

T % N 9 * M \$ 3 U = L 8 Y @ G & 3 E > W

Find out the total number of letters that are immediately followed by a symbol and immediately preceded by a number.

- Ans**
- 1. 4
 - 2. 3
 - 3. 1
 - 4. 2

Question ID : 7518974796
 Option 1 ID : 75189719184
 Option 2 ID : 75189719183
 Option 3 ID : 75189719181
 Option 4 ID : 75189719182
 Status : Answered
 Chosen Option : 4

Q.17 An element A reacts with water to form a solution which turns phenolphthalein solution pink. The element A is most likely to be:

- Ans**
- 1. Ag
 - 2. Mg
 - 3. S
 - 4. C

Question ID : 7518973691
 Option 1 ID : 75189714764
 Option 2 ID : 75189714762
 Option 3 ID : 75189714761
 Option 4 ID : 75189714763
 Status : Not Answered
 Chosen Option : --

Q.18 In this question, a group of numbers/symbols is coded using letters as per the table given below and the conditions which follow. The correct combination of codes following the conditions is your answer.

Number/Symbol	7	8	5	&	6	%	2
Codes	S	D	M	U	T	L	A

Conditions:

- (i) If the first element is an odd number and the last element is an even number, the codes for these two (the first and the last elements) are to be interchanged.
- (ii) If the second element is a symbol and the fifth element is an even number, the codes for these two (the second and the fifth elements) are to be interchanged.
- (iii) If the third element is a number and the fourth element is a symbol, both these elements (the third and the fourth elements) are to be coded as Y.

Question: 7 6 & 5 8 % 6 2

- Ans**
- ✓ 1. **ATUMDLTS**
 - ✗ 2. **ATYYDLTS**
 - ✗ 3. **ADUMTLTS**
 - ✗ 4. **STUMDLTA**

Question ID : **7518975249**
 Option 1 ID : **75189720995**
 Option 2 ID : **75189720993**
 Option 3 ID : **75189720994**
 Option 4 ID : **75189720996**
 Status : **Answered**
 Chosen Option : **2**

Q.19 The Regional Rural Banks Act was passed in which year by the Government of India?

- Ans**
- ✓ 1. **1976**
 - ✗ 2. **1996**
 - ✗ 3. **1966**
 - ✗ 4. **1986**



Question ID : **7518974233**
 Option 1 ID : **75189716930**
 Option 2 ID : **75189716932**
 Option 3 ID : **75189716929**
 Option 4 ID : **75189716931**
 Status : **Not Answered**
 Chosen Option : **--**

Q.20

In which state will India's first graphene innovation centre be established?

Ans

- 1. Maharashtra
- 2. Punjab
- 3. Haryana
- 4. Kerala

Question ID : 7518973781

Option 1 ID : 75189715121

Option 2 ID : 75189715124

Option 3 ID : 75189715123

Option 4 ID : 75189715122

Status : Answered

Chosen Option : 4

Q.21 A concave mirror forms a real, inverted and same sized image of an object. Where is the object placed?

Ans

- 1. Between f and pole
- 2. At C
- 3. At infinity
- 4. Between f and C

Question ID : 7518975353

Option 1 ID : 75189721411

Option 2 ID : 75189721409

Option 3 ID : 75189721412

Option 4 ID : 75189721410

Status : Answered

Chosen Option : 2

Q.22 Which of the following is a sacred text related to Buddhism?

Ans

- 1. Agama
- 2. Tripitaka
- 3. Tanakh
- 4. Hadith

Question ID : 7518974192

Option 1 ID : 75189716766

Option 2 ID : 75189716767

Option 3 ID : 75189716768

Option 4 ID : 75189716765

Status : Answered

Chosen Option : 2

Q.23 A father is presently 3 times his daughter's age. After 10 years he will be twice as old as her. Find the daughter's present age.

- Ans**
- 1. 15 years
 - 2. 5 years
 - 3. 20 years
 - 4. 10 years

Question ID : 7518975714

Option 1 ID : 75189722855

Option 2 ID : 75189722853

Option 3 ID : 75189722856

Option 4 ID : 75189722854

Status : Answered

Chosen Option : 4

Q.24

Who immediately succeeded Raja Ram Mohan Roy as leader of the Brahma Samaj?

- Ans**
- 1. Ravindra Nath Tagore
 - 2. Dwarkanath Tagore
 - 3. Dr. Atma Ram
 - 4. Debendra Nath Tagore

Question ID : 7518973805

Option 1 ID : 75189715219

Option 2 ID : 75189715217

Option 3 ID : 75189715220

Option 4 ID : 75189715218

Status : Answered

Chosen Option : 3

Q.25 In this question, a statement is followed by two conclusions. Which of the two conclusions is/are true with respect to the statement?

Statement: $T = S \geq N = A \leq U > P < Q$

Conclusions:

I. $S > Q$

II. $A \leq T$

- Ans**
- 1. Neither conclusion I nor II is true
 - 2. Both conclusions I and II are true
 - 3. Only conclusion I is true
 - 4. Only conclusion II is true

Question ID : 7518974958

Option 1 ID : 75189719832

Option 2 ID : 75189719831

Option 3 ID : 75189719829

Option 4 ID : 75189719830

Status : Answered

Chosen Option : 4

Q.26 Six students P, Q, R, S, T and U sit in a straight line, facing north. P and S are sitting at the extreme ends of the line. T is sitting adjacent to P, while U is sitting adjacent to S. Only one person sits between Q and S. Who is sitting adjacent to Q apart from R?

- Ans**
- 1. T
 - 2. U
 - 3. R
 - 4. S

Question ID : 7518974713

Option 1 ID : 75189718852

Option 2 ID : 75189718851

Option 3 ID : 75189718850

Option 4 ID : 75189718849

Status : Answered

Chosen Option : 2

Q.27 Seven boxes, P, Q, R, S, T, U and V, are kept one over the other but not necessarily in the same order. R is kept just below T. V is kept just above Q, which is just above S. Only three boxes are kept between V and U. V is the topmost box. Which is the correct position of Box P?

- Ans**
- 1. Immediately below S
 - 2. Immediately below U
 - 3. Immediately above Q
 - 4. Second box from the top

Question ID : 7518975162
Option 1 ID : 75189720646
Option 2 ID : 75189720648
Option 3 ID : 75189720647
Option 4 ID : 75189720645
Status : Answered
Chosen Option : 1

Q.28 Metal oxides are generally _____ in nature.

- Ans**
- 1. neutral
 - 2. sweet
 - 3. acidic
 - 4. basic

Question ID : 7518973452
Option 1 ID : 75189713807
Option 2 ID : 75189713808
Option 3 ID : 75189713805
Option 4 ID : 75189713806
Status : Answered
Chosen Option : 4

Q.29 Humans have _____ pairs of autosomes.

- Ans**
- 1. 2
 - 2. 23
 - 3. 22
 - 4. 46

Question ID : 7518974442
Option 1 ID : 75189717768
Option 2 ID : 75189717766
Option 3 ID : 75189717765
Option 4 ID : 75189717767
Status : Answered
Chosen Option : 3

Q.30 Which of the following features is associated with deserts?

- Ans
- 1. Barchans
 - 2. Alluvial fan
 - 3. Moraines
 - 4. Tarn pools

Question ID : 7518974255
Option 1 ID : 75189717018
Option 2 ID : 75189717017
Option 3 ID : 75189717019
Option 4 ID : 75189717020
Status : Answered
Chosen Option : 3

Q.31 A number, when divided by the sum of 335 and 265, gives three times the difference between 335 and 265 as the quotient and 35 as the remainder. What is that number?

- Ans
- 1. 126035
 - 2. 128235
 - 3. 124535
 - 4. 127535

Question ID : 7518976242
Option 1 ID : 75189724967
Option 2 ID : 75189724966
Option 3 ID : 75189724965
Option 4 ID : 75189724968
Status : Answered
Chosen Option : 1

Q.32 To investigate the conduction of electric current, Ravi performed an experiment. He took different aqueous solutions or liquids (as electrolyte) and tried to pass electricity and connected the circuit with a bulb. In the presence of which of the following, will the bulb NOT glow?

- Ans
- 1. Sodium chloride (aq)
 - 2. Octane (l)
 - 3. Calcium chloride (aq)
 - 4. Copper sulphate (aq)

Question ID : 7518973392
Option 1 ID : 75189713565
Option 2 ID : 75189713566
Option 3 ID : 75189713567
Option 4 ID : 75189713568
Status : Answered
Chosen Option : 2

Q.33 A statement is given followed by two arguments I and II. Read the statement and the arguments carefully and select the appropriate answer from the given options.

Statement:

In spite of all apartments having the same square foot area, rents of the apartments above the 6th floor are higher in most high-rise apartment buildings.

Arguments:

- I. It is riskier to live on higher floors, since the dependence on lifts is much more critical than the lower floors which can be accessed by stairs.
- II. Air pollution is several times lower on higher floors than on the lower floors.

Ans ✓ 1.

Argument I weakens, while argument II strengthens the statement

✗ 2. Both arguments I and II weaken the statement

✗ 3. Both arguments I and II strengthen the statement

✗ 4.

Argument II weakens, while argument I strengthens the statement

Question ID : 7518976399
Option 1 ID : 75189725593
Option 2 ID : 75189725595
Option 3 ID : 75189725596
Option 4 ID : 75189725594

Status : Answered

Chosen Option : 2

Q.34 Starting from a point X, Shekhar walks 70 m towards the north. Then, he takes a left turn and walks 150 m. Then, he takes a left turn and walks 70 m. Finally, he takes a left turn and walks 90 m to reach point Y. How far and in which direction is point X from point Y? (All turns are 90 degree turns only)

Ans ✗ 1. 50 m, West

✗ 2. 60 m, West

✗ 3. 50 m, South

✓ 4. 60 m, East

Question ID : 7518975040
Option 1 ID : 75189720160
Option 2 ID : 75189720157
Option 3 ID : 75189720158
Option 4 ID : 75189720159

Status : Answered

Chosen Option : 4

Q.35 Six students, P, Q, R, S, T and U each are of different heights. P is taller than only two students. T is taller than only one student but shorter than exactly four students. S is taller than only four students but is not the tallest. Q is taller than none of the students. R is not the tallest. Who is the tallest student?

- Ans**
- 1. P
 - 2. U
 - 3. S
 - 4. T

Question ID : 7518974778
Option 1 ID : 75189719112
Option 2 ID : 75189719111
Option 3 ID : 75189719109
Option 4 ID : 75189719110
Status : Answered
Chosen Option : 2

Q.36 At a function, the chief guest was accompanied by some people, and all were sitting in the audience gallery facing towards the west. P sits second to the left of the chief guest, Q sits fourth to the right of P. The number of people sitting to the right of Q is exactly one less than the number of people sitting to the left of Q. No one sits to the left of P. How many total people were sitting in the audience gallery?

- Ans**
- 1. 7
 - 2. 8
 - 3. 10
 - 4. 9

Question ID : 7518974739
Option 1 ID : 75189718955
Option 2 ID : 75189718954
Option 3 ID : 75189718956
Option 4 ID : 75189718953
Status : Answered
Chosen Option : 2

Q.37

Prasanta Chandra Mahalanobis founded which of the following?

Ans

- 1. Bhartiya Vidya Bhavan
- 2. Indian Statistical Institute
- 3. Miranda House
- 4. University of Lucknow

Question ID : 7518973880
Option 1 ID : 75189715520
Option 2 ID : 75189715518
Option 3 ID : 75189715517
Option 4 ID : 75189715519

Status : Answered

Chosen Option : 2

Q.38 Two numbers are in the ratio 5: 7. If their HCF is 17, then find the numbers.

Ans

- 1. 85, 119
- 2. 102, 136
- 3. 68, 85
- 4. 85, 102

Question ID : 7518976037
Option 1 ID : 75189724148
Option 2 ID : 75189724147
Option 3 ID : 75189724145
Option 4 ID : 75189724146

Status : Answered

Chosen Option : 1

Q.39 Find the value of $2\sec^2 A + 4\operatorname{cosec}^2 A - 2\tan^2 A - 4\cot^2 A$.

Ans

- 1. 6
- 2. 4
- 3. 2
- 4. 8

Question ID : 7518976216
Option 1 ID : 75189724863
Option 2 ID : 75189724862
Option 3 ID : 75189724861
Option 4 ID : 75189724864

Status : Answered

Chosen Option : 1

Q.40 The speed of light in two transparent media A and B are 2×10^8 m/sec and 2.25×10^8 m/sec. The refractive index of medium A with respect to medium B is equal to:

- Ans
- 1. 4.50
 - 2. 1.125
 - 3. 0.89
 - 4. 4.25

Question ID : 7518975404
Option 1 ID : 75189721616
Option 2 ID : 75189721613
Option 3 ID : 75189721614
Option 4 ID : 75189721615
Status : Answered
Chosen Option : 2

Q.41 Which is the most popular festival among the Garos tribe of Meghalaya?

- Ans
- 1. Wangala Festival
 - 2. Yaoshang Festival
 - 3. Porag Festival
 - 4. Nuakhai Festival

Question ID : 7518974004
Option 1 ID : 75189716013
Option 2 ID : 75189716014
Option 3 ID : 75189716015
Option 4 ID : 75189716016
Status : Answered
Chosen Option : 4

Q.42 Alcohols react with sodium leading to the evolution of which of the following gases?

- Ans
- 1. No evolution of Gas
 - 2. Carbon dioxide
 - 3. Hydrogen
 - 4. Oxygen

Question ID : 7518973537
Option 1 ID : 75189714148
Option 2 ID : 75189714146
Option 3 ID : 75189714147
Option 4 ID : 75189714145
Status : Answered
Chosen Option : 3

Q.43 Simplify: $6^2 + 7^2 + \sqrt{16}$

- Ans
- 1. 89
 - 2. 80
 - 3. 94
 - 4. 98

Question ID : 7518975801
 Option 1 ID : 75189723202
 Option 2 ID : 75189723204
 Option 3 ID : 75189723203
 Option 4 ID : 75189723201
 Status : Answered
 Chosen Option : 1

Q.44 In $\triangle ABC$ and $\triangle DEF$, $\angle A = 40^\circ$, $\angle B = 55^\circ$, $\angle D = 55^\circ$, $\angle E = 85^\circ$ and $m(\overline{AB}) = m(\overline{FD})$. Then which of the options below is correct?

- Ans
- 1. $\triangle ABC \cong \triangle DFE$
 - 2. $\triangle ABC \cong \triangle EDF$
 - 3. $\triangle ABC \cong \triangle FED$
 - 4. $\triangle ABC \cong \triangle FDE$

Question ID : 7518975987
 Option 1 ID : 75189723946
 Option 2 ID : 75189723948
 Option 3 ID : 75189723947
 Option 4 ID : 75189723945
 Status : Answered
 Chosen Option : 4

Q.45 Simplify $1.\overline{24}$ as an improper fraction.

- Ans
- 1. $\frac{123}{90}$
 - 2. $\frac{41}{33}$
 - 3. $\frac{91}{90}$
 - 4. $\frac{124}{99}$

Question ID : 7518976027
 Option 1 ID : 75189724107
 Option 2 ID : 75189724105
 Option 3 ID : 75189724108
 Option 4 ID : 75189724106
 Status : Answered
 Chosen Option : 2

Q.46 Ravi started a business by investing ₹50,000. After six months Raju joined him and invested an amount of ₹1,00,000. In one year since Ravi invested, they earned a profit of ₹63,000. What is Raju's share of the profit?

- Ans**
- 1. ₹32,500
 - 2. ₹ 31,000
 - 3. ₹32,000
 - 4. ₹31,500

Question ID : 7518975836
Option 1 ID : 75189723342
Option 2 ID : 75189723344
Option 3 ID : 75189723343
Option 4 ID : 75189723341
Status : Answered
Chosen Option : 4

Q.47 Select the option that is related to the fifth number in the same way as the second number is related to the first number and the fourth number is related to the third number.

12 : 145 :: 9 : 82 :: 11 : ?

- Ans**
- 1. 121
 - 2. 123
 - 3. 122
 - 4. 120

Question ID : 7518975081
Option 1 ID : 75189720323
Option 2 ID : 75189720321
Option 3 ID : 75189720322
Option 4 ID : 75189720324
Status : Answered
Chosen Option : 3

Q.48 Movement in most of the animals is a co-ordinated activity of which of the following system/systems?

- Ans**
- 1. Only skeletal and nervous systems
 - 2. Only muscular system
 - 3. Muscular, skeletal and nervous systems
 - 4. Only nervous system

Question ID : 7518974564
Option 1 ID : 75189718254
Option 2 ID : 75189718255
Option 3 ID : 75189718253
Option 4 ID : 75189718256
Status : Answered
Chosen Option : 3

Q.49 What will come in place of the question mark (?) in the following equation, if '+' is interchanged with '-', and '-' is interchanged with '×'?

$$7 \times 7 + 8 - 12 \times 6 + 17 - 14 - 100 = ?$$

- Ans**
- 1. 125
 - 2. 99
 - 3. 132
 - 4. 107

Question ID : 7518974888

Option 1 ID : 75189719549

Option 2 ID : 75189719551

Option 3 ID : 75189719550

Option 4 ID : 75189719552

Status : Answered

Chosen Option : 4

Q.50 Eight lawyers with the initials A, K, L, M, N, O, P and Q were sitting around a square table and were facing the centre. Four of them were sitting at the corners, while the other four were at the exact centre of the sides. L, at a corner, was to the immediate right of M and was diagonally opposite to A. Q, sitting at a corner, was next to both M and K. P was second to the left of A. N was not sitting diagonally opposite to M. Which lawyer was second to the left of K?

- Ans**
- 1. P
 - 2. N
 - 3. O
 - 4. L

Question ID : 7518974897

Option 1 ID : 75189719587

Option 2 ID : 75189719586

Option 3 ID : 75189719585

Option 4 ID : 75189719588

Status : Answered

Chosen Option : 2

Q.51 When the minute hand covers a distance of 2 hours and 20 minutes, then what is the angular distance covered by it?

- Ans**
- 1. 590°
 - 2. 720°
 - 3. 480°
 - 4. 840°

Question ID : 7518976425

Option 1 ID : 75189725698

Option 2 ID : 75189725699

Option 3 ID : 75189725697

Option 4 ID : 75189725700

Status : Answered

Chosen Option : 4

Q.52 With whom did the Indian Army sign a contract worth ₹3131.82 crore for manufacture and supply of missiles?

Ans

- 1. Troop Comforts Limited
- 2. Bharat Dynamics Limited
- 3. India Optel Limited
- 4. Yantra India Limited

Question ID : 7518973794
Option 1 ID : 75189715174
Option 2 ID : 75189715173
Option 3 ID : 75189715176
Option 4 ID : 75189715175
Status : Answered
Chosen Option : 2

Q.53 This question is based on the following 3-letter words.

RAT DOT FRY CUT

If in each of the words, each letter is changed to the next letter in the English alphabetical order, how many words thus formed will have no vowel?

- Ans**
- 1. Three
 - 2. None
 - 3. Two
 - 4. One

Question ID : 7518975237
Option 1 ID : 75189720948
Option 2 ID : 75189720945
Option 3 ID : 75189720947
Option 4 ID : 75189720946
Status : Answered
Chosen Option : 4

Q.54

In which of the following cities is 'The Central Institute of Indian Languages (CIIL)' located?

Ans

- 1. Bengaluru
- 2. Mysuru
- 3. Hubli
- 4. Mangaluru

Question ID : 7518973817

Option 1 ID : 75189715265

Option 2 ID : 75189715266

Option 3 ID : 75189715268

Option 4 ID : 75189715267

Status : Not Answered

Chosen Option : --

Q.55

Who has been honoured with the Padma Bhushan award in Science and Engineering in January 2022?

Ans

- 1. Sirpi Balasubramaniam
- 2. Sanjaya Rajaram
- 3. Buddhadeb Bhattacharjee
- 4. Subbanna Ayyappan

Question ID : 7518973955

Option 1 ID : 75189715819

Option 2 ID : 75189715817

Option 3 ID : 75189715820

Option 4 ID : 75189715818

Status : Answered

Chosen Option : 4

Q.56

The Chhota Nagpur Plateau can be found in which of the following Indian states?

Ans

- 1. Karnataka
- 2. Rajasthan
- 3. Jharkhand
- 4. Assam

Question ID : 7518974270

Option 1 ID : 75189717078

Option 2 ID : 75189717077

Option 3 ID : 75189717079

Option 4 ID : 75189717080

Status : Answered

Chosen Option : 3

Q.57 A student scored 80/80 marks in term 1 and 75/90 marks in term 2. What will be his percentage of final score, if the weightage given to the terms is 40% and 60%, respectively. (correct to the nearest integer)

- Ans**
- 1. 90%
 - 2. 95%
 - 3. 70%
 - 4. 85%

Question ID : 7518975670
Option 1 ID : 75189722679
Option 2 ID : 75189722678
Option 3 ID : 75189722677
Option 4 ID : 75189722680
Status : Answered
Chosen Option : 1

Q.58 Three statements are given, followed by three conclusions numbered I, II and III. Assuming the statements to be true, even if they seem to be at variance with commonly known facts, decide which of the conclusions logically follow(s) from the statements.

Statements:

1. All tigers are lions.
2. No cat is lion.
3. Some jaguars are cats.

Conclusions:

- I. Some jaguars are lions.
- II. No jaguar is tiger.
- III. Some lions are tigers.

- Ans**
- 1. Only conclusions II and III follow.
 - 2. Only III follows
 - 3. Only conclusions I and II follow.
 - 4. Only conclusions I follows

Question ID : 7518974743
Option 1 ID : 75189718970
Option 2 ID : 75189718971
Option 3 ID : 75189718972
Option 4 ID : 75189718969
Status : Answered
Chosen Option : 1

Q.59 P, Q, R, S, T and U live on six different floors of the same building. The lowermost floor in the building is numbered 1, the floor above it is numbered 2, and so on till the topmost floor is numbered 6. Exactly three persons live between the floors of R and Q. T lives on the floor immediately above P's floor. U lives on the floor immediately above Q's floor. R lives on the floor immediately below S's floor. T lives on floor number 4. Q does not live on floor number 5. Who lives on floor number 6?

- Ans**
- 1. U
 - 2. R
 - 3. S
 - 4. P

Question ID : 7518975155

Option 1 ID : 75189720617

Option 2 ID : 75189720619

Option 3 ID : 75189720620

Option 4 ID : 75189720618

Status : Answered

Chosen Option : 3

Q.60 The process of producing an induced current by a changing magnetic field is called:

- Ans**
- 1. electromagnetism
 - 2. electromagnetic induction
 - 3. electromagnetic radiation
 - 4. electric conduction

Question ID : 7518975541

Option 1 ID : 75189722161

Option 2 ID : 75189722162

Option 3 ID : 75189722164

Option 4 ID : 75189722163

Status : Answered

Chosen Option : 2

Q.61 The following table shows the number of male and female students studying in different streams (i.e. Arts, Science, Commerce and Law) of a college. Study the table and answer the question.

Streams	Male	Female
Arts	202	112
Science	260	280
Commerce	116	190
Law	78	65
Total	656	647

What is the percentage of female Commerce students in the total students of the college?

- Ans**
- 1. 13.28%
 - 2. 14.58%
 - 3. 16.46%
 - 4. 15.95%

Question ID : 7518975344
 Option 1 ID : 75189721373
 Option 2 ID : 75189721374
 Option 3 ID : 75189721376
 Option 4 ID : 75189721375
 Status : Answered
 Chosen Option : 2

Q.62 Which of the following terms will replace the question mark (?) in the given series to make it logically complete ?

D6W, G7T, M11N, V20E, ?

- Ans**
- 1. H34S
 - 2. H36S
 - 3. G36S
 - 4. H36T

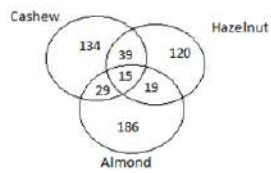
Question ID : 7518974976
 Option 1 ID : 75189719901
 Option 2 ID : 75189719902
 Option 3 ID : 75189719903
 Option 4 ID : 75189719904
 Status : Answered
 Chosen Option : 2

Q.63 A metallic wire of resistance $100\ \Omega$ is bent into a circle having circumference equal to the length of the wire. The equivalent resistance between two diametrically opposite points of the circle is:

- Ans**
- 1. $100\ \Omega$
 - 2. $75\ \Omega$
 - 3. $50\ \Omega$
 - 4. $25\ \Omega$

Question ID : **7518975483**
 Option 1 ID : **75189721932**
 Option 2 ID : **75189721931**
 Option 3 ID : **75189721930**
 Option 4 ID : **75189721929**
 Status : **Answered**
 Chosen Option : **4**

Q.64 Study the given diagram carefully and answer the following question. The numbers in different sections indicate the number of persons who like different dry fruits during snack time.



How many people like Hazelnut but NOT Cashew?

- Ans**
- 1. 39
 - 2. 139
 - 3. 120
 - 4. 15



Question ID : **7518974946**
 Option 1 ID : **75189719782**
 Option 2 ID : **75189719784**
 Option 3 ID : **75189719783**
 Option 4 ID : **75189719781**
 Status : **Answered**
 Chosen Option : **2**

Q.65 Which of the following Acts legally guarantees 100 days of wage employment in a financial year to adult members of a rural household, who are seeking employment and willing to do unskilled manual work?

- Ans**
- 1. Nehru National Rural Employment Guarantee Act
 - 2. Mahatma Gandhi National Rural Employment Guarantee Act
 - 3. Indira National Rural Employment Guarantee Act
 - 4. Ambedkar National Rural Employment Guarantee Act

Question ID : 7518974044
Option 1 ID : 75189716176
Option 2 ID : 75189716174
Option 3 ID : 75189716173
Option 4 ID : 75189716175
Status : Answered
Chosen Option : 2

Q.66 The population of a town is 2,24,375. If it increases at the rate of 4% per annum, what will be its population 2 years hence?

- Ans**
- 1. 2,42,684
 - 2. 2,40,468
 - 3. 2,36,864
 - 4. 2,32,846

Question ID : 7518976050
Option 1 ID : 75189724200
Option 2 ID : 75189724199
Option 3 ID : 75189724198
Option 4 ID : 75189724197
Status : Answered
Chosen Option : 1

Q.67 A triangle has sides of length 5 cm, 7 cm and 10 cm. Find the area of the triangle (in cm^2).

- Ans**
- 1. 350
 - 2. $2\sqrt{66}$
 - 3. 25
 - 4. $7\sqrt{10}$

Question ID : 7518976178
Option 1 ID : 75189724712
Option 2 ID : 75189724710
Option 3 ID : 75189724709
Option 4 ID : 75189724711
Status : Answered
Chosen Option : 2

Q.68

The value of $\left(a + \frac{1}{b}\right)^r \left(a - \frac{1}{b}\right)^s \div \left(b + \frac{1}{a}\right)^r \left(b - \frac{1}{a}\right)^s$ is:

Ans

- ✓ 1. $\left(\frac{a}{b}\right)^{r+s}$
- ✗ 2. $\left(\frac{b}{a}\right)^{r+s}$
- ✗ 3. $(ab)^{r+s}$
- ✗ 4. $\frac{a^r}{b^s}$

Question ID : 7518976223

Option 1 ID : 75189724889

Option 2 ID : 75189724890

Option 3 ID : 75189724891

Option 4 ID : 75189724892

Status : Answered

Chosen Option : 1

Q.69 In today's scenario, which change seen in human attitude has helped in decreasing the production of non-biodegradable waste to some extent?

Ans

- ✗ 1. Use of Plastic in Packaging
- ✗ 2. Use and throw attitude
- ✗ 3. Improvement in lifestyle
- ✓ 4. Use of jute bags

Question ID : 7518974682

Option 1 ID : 75189718726

Option 2 ID : 75189718727

Option 3 ID : 75189718725

Option 4 ID : 75189718728

Status : Answered

Chosen Option : 4

Q.70 Two types of cell divisions, A and B, are shown in the figure below. Which option provides the correct answer for:

i. Types of cell division

ii. When and where does division B take place?



A

B

Ans 1.

i. A - Meiosis, B - Mitosis

ii. Meiosis takes place in reproductive cells for the formation of gametes

2.

i. A - Mitosis, B - Meiosis

ii. Meiosis takes place in reproductive cells for the formation of gametes

i. A - Mitosis, B - Meiosis

3.

ii. Meiosis takes place in body cells for growth

i. A and B – Meiosis

4.

ii. Meiosis takes place in body cells for growth

Question ID : 7518974566
 Option 1 ID : 75189718262
 Option 2 ID : 75189718261
 Option 3 ID : 75189718263
 Option 4 ID : 75189718264

Status : Answered

Chosen Option : 4

Q.71 Newlands Octaves start with _____ and end with _____, respectively.

Ans 1. Li; Na

2. H; Th

3. Mg; Ca

4. He; Ar

Question ID : 7518973503
 Option 1 ID : 75189714009
 Option 2 ID : 75189714010
 Option 3 ID : 75189714011
 Option 4 ID : 75189714012

Status : Answered

Chosen Option : 4

Q.72 A blanket is sold for ₹1,148, which results in a loss of 30%. For how much should it be sold to gain 5%?

- Ans
- 1. ₹1,734
 - 2. ₹1,543
 - 3. ₹1,423
 - 4. ₹1,722

Question ID : 7518975630
Option 1 ID : 75189722517
Option 2 ID : 75189722519
Option 3 ID : 75189722518
Option 4 ID : 75189722520
Status : Answered
Chosen Option : 4

Q.73 Which reproductive parts of the flower contain the germ cells?

- Ans
- 1. Stamens and pistils
 - 2. Sepals and stamen
 - 3. Anther and sepals
 - 4. Petals and style

Question ID : 7518974457
Option 1 ID : 75189717828
Option 2 ID : 75189717825
Option 3 ID : 75189717826
Option 4 ID : 75189717827
Status : Answered
Chosen Option : 4

Q.74 Kohli is younger than Rohit by 3 years. If the ages of Kohli and Rohit are in the ratio 7 : 8, how old is Kohli?

- Ans
- 1. 18 years
 - 2. 27 years
 - 3. 24 years
 - 4. 21 years

Question ID : 7518976335
Option 1 ID : 75189725337
Option 2 ID : 75189725338
Option 3 ID : 75189725340
Option 4 ID : 75189725339
Status : Answered
Chosen Option : 4

Q.75 For a trip of 800 km, a truck travels the first 300 km at a speed of 50 km/h. At what speed should it cover the remaining distance, so that the average speed is 60 km/h?

- Ans**
- 1. 72 km/h
 - 2. $\frac{600}{13}$ km/h
 - 3. 52 km/h
 - 4. $\frac{750}{11}$ km/h

Question ID : 7518975674
Option 1 ID : 75189722696
Option 2 ID : 75189722693
Option 3 ID : 75189722694
Option 4 ID : 75189722695
Status : Answered
Chosen Option : 4

Q.76 If two angles of a triangle measure 60° and 80° , respectively, then the measure of the third angle of this triangle is:

- Ans**
- 1. 40°
 - 2. 70°
 - 3. 50°
 - 4. 60°

Question ID : 7518975985
Option 1 ID : 75189723937
Option 2 ID : 75189723940
Option 3 ID : 75189723938
Option 4 ID : 75189723939
Status : Answered
Chosen Option : 1

Q.77 The price of an article is increased by 20% and then two successive discounts of 5% each are allowed. The selling price of the article is _____ above its cost price.

- Ans**
- 1. 6.9%
 - 2. 7.8%
 - 3. 9.2%
 - 4. 8.3%

Question ID : 7518976286
Option 1 ID : 75189725142
Option 2 ID : 75189725143
Option 3 ID : 75189725141
Option 4 ID : 75189725144
Status : Answered
Chosen Option : 4

Q.78 In a certain code language, 'ACADEMY' is written as 'FSJHDEB' and 'BARRIER' is written as 'YKNVUCC'. How will 'ATTEMPT' be written in that language?

- Ans**
- 1. AVRIWVB
 - 2. AVRNWVB
 - 3. BVWMRVA
 - 4. AVRMWVB

Question ID : 7518975020
 Option 1 ID : 75189720077
 Option 2 ID : 75189720079
 Option 3 ID : 75189720080
 Option 4 ID : 75189720078
 Status : Answered
 Chosen Option : 1

Q.79 Find the quadratic equation that has $(1 + \sqrt{3})$ as one of its roots.

- Ans**
- 1. $x^2 + 2x + 1 = 0$
 - 2. $x^2 + 2x + 2 = 0$
 - 3. $x^2 - 2x - 2 = 0$
 - 4. $x^2 + \sqrt{3}x + 1 = 0$

Question ID : 7518976166
 Option 1 ID : 75189724663
 Option 2 ID : 75189724664
 Option 3 ID : 75189724662
 Option 4 ID : 75189724661
 Status : Answered
 Chosen Option : 3

Q.80 Which of the following terms refers to a climatic condition in the marine environment that results in a period of warming of the water body?

- Ans**
- 1. El Nino
 - 2. El Mino
 - 3. La Mino
 - 4. La Nina

Question ID : 7518974072
 Option 1 ID : 75189716285
 Option 2 ID : 75189716287
 Option 3 ID : 75189716288
 Option 4 ID : 75189716286
 Status : Answered
 Chosen Option : 1

Q.81 Select the set in which the numbers are related in the same way as are the numbers of the following sets.

(NOTE: Operations should be performed on the whole numbers, without breaking down the numbers into its constituent digits. E.g. 13 – Operations on 13 such as adding/subtracting/multiplying etc. to 13 can be performed. Breaking down 13 into 1 and 3 and then performing mathematical operations on 1 and 3 are not allowed.)

(24, 12, 72)

(15, 16, 60)

- Ans**
- 1. (18, 12, 56)
 - 2. (30, 40, 156)
 - 3. (17, 20, 65)
 - 4. (20, 24, 120)

Question ID : 7518975304

Option 1 ID : 75189721214

Option 2 ID : 75189721215

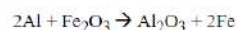
Option 3 ID : 75189721216

Option 4 ID : 75189721213

Status : Not Answered

Chosen Option : --

Q.82 In the given chemical reaction, which of the following chemical species acts as an oxidising agent and as a reducing agent, respectively?



- Ans**
- 1. Al and Fe
 - 2. Fe and Al
 - 3. Al_2O_3 and Fe
 - 4. Fe_2O_3 and Al

Question ID : 7518973455

Option 1 ID : 75189713819

Option 2 ID : 75189713817

Option 3 ID : 75189713818

Option 4 ID : 75189713820

Status : Answered

Chosen Option : 2

Q.83 A 210 m long train crosses a man walking at a speed of 4.5 km/h in the opposite direction in 12 seconds. What is the speed (in km/h) of the train?

- Ans**
- 1. 59.5
 - 2. 60.5
 - 3. 61.5
 - 4. 58.5

Question ID : 7518976293

Option 1 ID : 75189725170

Option 2 ID : 75189725171

Option 3 ID : 75189725172

Option 4 ID : 75189725169

Status : Answered

Chosen Option : 1

Q.84 A 91 cm-long wire is cut into two pieces so that one piece length is three-fourth of the other. Find the length of the shorter piece.

- Ans**
- 1. 42.17 cm
 - 2. 39 cm
 - 3. 36.23 cm
 - 4. 38 cm

Question ID : 7518976139
Option 1 ID : 75189724555
Option 2 ID : 75189724553
Option 3 ID : 75189724554
Option 4 ID : 75189724556
Status : Answered
Chosen Option : 2

Q.85 The resistance of a conductor is NOT dependent on:

- Ans**
- 1. area of cross section of the conductor
 - 2. current flowing through the conductor
 - 3. length of the conductor
 - 4. temperature of the conductor

Question ID : 7518975466
Option 1 ID : 75189721864
Option 2 ID : 75189721861
Option 3 ID : 75189721863
Option 4 ID : 75189721862
Status : Answered
Chosen Option : 2

Q.86 The Goods and Services Tax, which includes both goods and services, was introduced by the Government of India with effect from _____.

- Ans**
- 1. 1 July 2017
 - 2. 28 February 2016
 - 3. 1 March 2018
 - 4. 1 April 2015

Question ID : 7518974039
Option 1 ID : 75189716155
Option 2 ID : 75189716153
Option 3 ID : 75189716156
Option 4 ID : 75189716154
Status : Answered
Chosen Option : 1

Q.87 Colourless plastids are called _____.

- Ans
- ✓ 1. leucoplasts
 - ✗ 2. apicoplasts
 - ✗ 3. chloroplasts
 - ✗ 4. chromoplasts

Question ID : 7518974314

Option 1 ID : 75189717255

Option 2 ID : 75189717256

Option 3 ID : 75189717253

Option 4 ID : 75189717254

Status : Answered

Chosen Option : 3

Q.88 The refractive index of a given transparent medium is 1.5. The speed of light in the medium is equal to:

- Ans
- ✗ 1. $4.5 \times 10^8 \text{ m/sec}$
 - ✓ 2. $2 \times 10^8 \text{ m/sec}$
 - ✗ 3. $3 \times 10^8 \text{ m/sec}$
 - ✗ 4. $0.5 \times 10^8 \text{ m/sec}$

Question ID : 7518975401

Option 1 ID : 75189721603

Option 2 ID : 75189721601

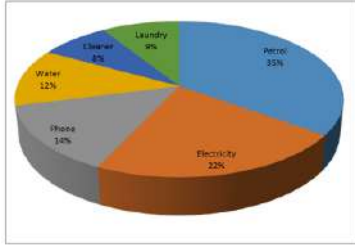
Option 3 ID : 75189721602

Option 4 ID : 75189721604

Status : Answered

Chosen Option : 2

Q.89 The following chart shows the percentage of expenditure of Mr. Kumar on various heads in a month. The total monthly expenditure of the house is Rs. 1,12,000 (Rupees One lac twelve thousand only). Study the chart and answer the question.



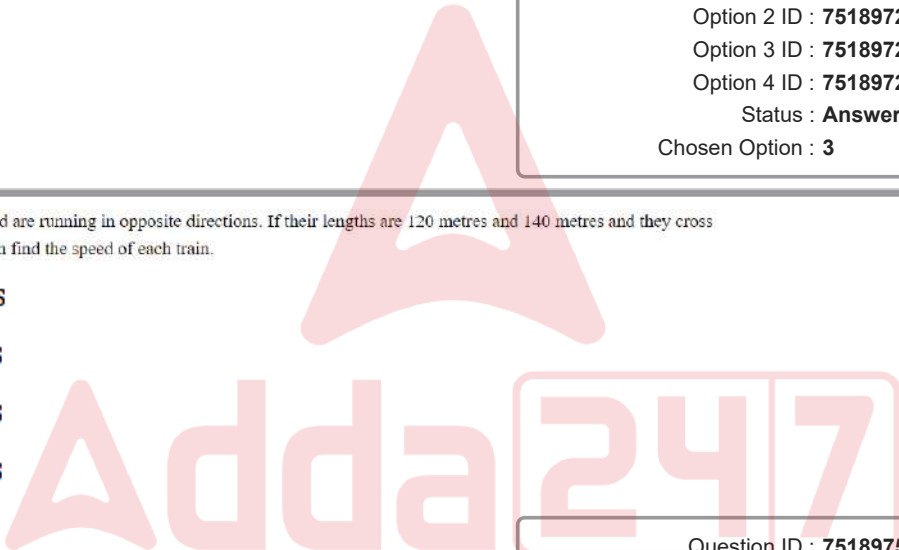
What is the total expenditure of Mr. Kumar on Petrol and Water taken together during this month?

- Ans**
- 1. Rs. 54440
 - 2. Rs. 52220
 - 3. Rs. 52640
 - 4. Rs. 51600

Question ID : 7518975341
 Option 1 ID : 75189721364
 Option 2 ID : 75189721362
 Option 3 ID : 75189721363
 Option 4 ID : 75189721361
 Status : Answered
 Chosen Option : 3

Q.90 Two trains of equal speed are running in opposite directions. If their lengths are 120 metres and 140 metres and they cross each other in 10 sec, then find the speed of each train.

- Ans**
- 1. 13 m/s
 - 2. 10 m/s
 - 3. 16 m/s
 - 4. 14 m/s



Question ID : 7518975876
 Option 1 ID : 75189723502
 Option 2 ID : 75189723501
 Option 3 ID : 75189723504
 Option 4 ID : 75189723503
 Status : Answered
 Chosen Option : 1

Q.91 A potential difference of 5 V when applied across a conductor produces a current of 2.5 mA. The resistance of the conductor (in Ω) is:

- Ans**
- 1. 20
 - 2. 2
 - 3. 2000
 - 4. 200

Question ID : 7518975450
Option 1 ID : 75189721798
Option 2 ID : 75189721797
Option 3 ID : 75189721800
Option 4 ID : 75189721799
Status : Answered
Chosen Option : 3

Q.92 Which two signs should be interchanged to make the given equation correct?

$$28 - 28 \div 14 + 7 \times 2 = 16$$

- Ans**
- 1. \times and $-$
 - 2. \times and \div
 - 3. $+$ and \div
 - 4. $+$ and $-$

Question ID : 7518975329
Option 1 ID : 75189721313
Option 2 ID : 75189721314
Option 3 ID : 75189721315
Option 4 ID : 75189721316
Status : Answered
Chosen Option : 4

Q.93 Consider the below statements and identify the correct answer.

Statement- I: Human stomach produces nitric acid.

Statement-II: Hydrochloric acid helps in the digestion of food without harming the stomach.

Ans ✓ 1. Only Statement II is correct.

✗ 2.

Both statements are correct. Statement II is correct explanation of Statement I.

✗ 3. Only Statement I is correct.

✗ 4.

Both Statements are correct. Statement I is correct explanation of Statement II.

Question ID : 7518973635

Option 1 ID : 75189714540

Option 2 ID : 75189714537

Option 3 ID : 75189714539

Option 4 ID : 75189714538

Status : Answered

Chosen Option : 1

Q.94 Three statements are given followed by four conclusions I, II, III and IV. You have to consider these statements to be true, even if they seem at variance from commonly known facts. Decide which of the given conclusions logically follow/s from the given statements.

Statements:

1. Some pamphlets are copies.
2. All copies are readers.
3. All readers are scrolls.

Conclusions:

- I. All pamphlets are scrolls.
- II. All copies are scrolls.
- III. Some readers are copies.
- IV. Some scrolls are pamphlets.

Ans ✗ 1. Only conclusions II and IV follow.

✓ 2. Only conclusions II, III and IV follow.

✗ 3. Only conclusions I, III and IV follow.

✗ 4. Only conclusions I and III follow.

Question ID : 7518974746

Option 1 ID : 75189718984

Option 2 ID : 75189718982

Option 3 ID : 75189718983

Option 4 ID : 75189718981

Status : Answered

Chosen Option : 2

Q.95 Who has the executive authority to advise the State Government on legal matters and to perform other duties of legal character?

- Ans
- 1. Comptroller and Auditor General
 - 2. Advocate-General
 - 3. Solicitor General
 - 4. Attorney General

Question ID : 7518974101
Option 1 ID : 75189716402
Option 2 ID : 75189716401
Option 3 ID : 75189716404
Option 4 ID : 75189716403
Status : Answered
Chosen Option : 2

Q.96 Which feature of the Indian Constitution refers to the existence of governments at the state level and at the centre?

- Ans
- 1. Fundamental rights
 - 2. Parliamentary form of government
 - 3. Federalism
 - 4. Secularism

Question ID : 7518974092
Option 1 ID : 75189716367
Option 2 ID : 75189716365
Option 3 ID : 75189716366
Option 4 ID : 75189716368
Status : Answered
Chosen Option : 2

Q.97 Which of the following numbers will replace the question mark (?) in the given series?

7, 20, 37, 56, 79, 108, ?

- Ans
- 1. 122
 - 2. 126
 - 3. 136
 - 4. 139

Question ID : 7518975289
Option 1 ID : 75189721153
Option 2 ID : 75189721154
Option 3 ID : 75189721155
Option 4 ID : 75189721156
Status : Answered
Chosen Option : 4

Q.98 The magnification 'm' produced by a convex lens when the object is placed at a distance $2f$ from the lens is given by:

- Ans
- 1. $m = -2$
 - 2. $m = +2$
 - 3. $m = -1$
 - 4. $m = +1$

Question ID : 7518975392
Option 1 ID : 75189721568
Option 2 ID : 75189721567
Option 3 ID : 75189721566
Option 4 ID : 75189721565
Status : Answered
Chosen Option : 1

Q.99 Which of the following numbers will replace the question mark (?) in the given series?

45, 65, 90, 125, 180, ?

- Ans
- 1. 270
 - 2. 275
 - 3. 280
 - 4. 285

Question ID : 7518975059
Option 1 ID : 75189720235
Option 2 ID : 75189720233
Option 3 ID : 75189720234
Option 4 ID : 75189720236
Status : Answered
Chosen Option : 2

Q.100 _____ is a type of water collection system found in Madhya Pradesh.

- Ans
- 1. Bundhis
 - 2. Kattas
 - 3. Surangams
 - 4. Kulhs

Question ID : 7518974505
Option 1 ID : 75189718017
Option 2 ID : 75189718019
Option 3 ID : 75189718018
Option 4 ID : 75189718020
Status : Not Answered
Chosen Option : --