

# Education Consultant India Ltd.

## Notations :

- 1.Options shown in green color and with ✓ icon are correct.
- 2.Options shown in red color and with ✘ icon are incorrect.

<b>Question Paper Name:</b>	Lower Division Clerk 17th August 2019 S2
<b>Subject Name:</b>	LOWER DIVISION CLERK
<b>Creation Date:</b>	2019-08-17 15:22:50
<b>Duration:</b>	120
<b>Total Marks:</b>	200
<b>Display Marks:</b>	Yes
<b>Share Answer Key With Delivery Engine:</b>	No
<b>Actual Answer Key:</b>	Yes
<b>Calculator:</b>	None
<b>Magnifying Glass Required?:</b>	No
<b>Ruler Required?:</b>	No
<b>Eraser Required?:</b>	No
<b>Scratch Pad Required?:</b>	No
<b>Rough Sketch/Notepad Required?:</b>	No
<b>Protractor Required?:</b>	No
<b>Show Watermark on Console?:</b>	Yes
<b>Highlighter:</b>	No
<b>Auto Save on Console?:</b>	No

## Mental Ability 1

<b>Group Number :</b>	1
<b>Group Id :</b>	545927281
<b>Group Maximum Duration :</b>	0
<b>Group Minimum Duration :</b>	0
<b>Revisit allowed for view? :</b>	No
<b>Revisit allowed for edit? :</b>	No
<b>Break time:</b>	0
<b>Group Marks:</b>	20
<b>Revisit allowed for group Instructions? :</b>	Yes
<b>Maximum Instruction Time:</b>	0
<b>Minimum Instruction Time:</b>	0

## Mental Ability 1

<b>Section Id :</b>	545927281
<b>Section Number :</b>	1
<b>Section type :</b>	Online
<b>Mandatory or Optional:</b>	Mandatory
<b>Number of Questions:</b>	20
<b>Number of Questions to be attempted:</b>	20
<b>Section Marks:</b>	20

Display Number Panel: Yes  
Group All Questions: No

Sub-Section Number: 1  
Sub-Section Id: 545927337  
Question Shuffling Allowed : Yes

Question Number : 1 Question Id : 5459275657 Question Type : MCQ Option Shuffling : Yes Display Question Number : Yes  
Single Line Question Option : No Option Orientation : Vertical

Correct Marks : 1 Wrong Marks : 0.25

Arrange the given words in the sequence in which they occur in the dictionary.

1. Devotion
2. Devilish
3. Develing
4. Devested
5. Develop

Options :

1. ✘ 32451
2. ✘ 35241
3. ✘ 35412
4. ✔ 35421

Question Number : 1 Question Id : 5459275657 Question Type : MCQ Option Shuffling : Yes Display Question Number : Yes  
Single Line Question Option : No Option Orientation : Vertical

Correct Marks : 1 Wrong Marks : 0.25

निम्नलिखित शब्दों को शब्दकोश में आने वाले क्रम के अनुसार लिखें

1. Devotion
2. Devilish
3. Develing
4. Devested
5. Develop

Options :

1. ✘ 32451
2. ✘ 35241
3. ✘ 35412
4. ✔ 35421

Question Number : 2 Question Id : 5459275658 Question Type : MCQ Option Shuffling : Yes Display Question Number : Yes  
Single Line Question Option : No Option Orientation : Vertical

Correct Marks : 1 Wrong Marks : 0.25

A series is given with one term wrong. Select that wrong term from the given alternatives.

E110, G132, I159, K181, M228

Options :

1. ✘ E110
2. ✘ G132
3. ✘ I159
4. ✔ K181

Question Number : 2 Question Id : 5459275658 Question Type : MCQ Option Shuffling : Yes Display Question Number : Yes  
Single Line Question Option : No Option Orientation : Vertical

Correct Marks : 1 Wrong Marks : 0.25

एक अनुक्रम दिया गया है, जिसमें से एक पद गलत है। दिए गए विकल्पों में से उस गलत पद को चुनिए।

E110, G132, I159, K181, M228

Options :

1. ✘ E110
2. ✘ G132
3. ✘ I159
4. ✔ K181

Question Number : 3 Question Id : 5459275659 Question Type : MCQ Option Shuffling : Yes Display Question Number : Yes  
Single Line Question Option : No Option Orientation : Vertical

Correct Marks : 1 Wrong Marks : 0.25

A series is given with one term missing. Select the correct alternative from the given ones that will complete the series.

EF, JK, OP, TU, ?

Options :

1. ✘ WX
2. ✘ XY
3. ✘ AB
4. ✔ YZ

Question Number : 3 Question Id : 5459275659 Question Type : MCQ Option Shuffling : Yes Display Question Number : Yes  
Single Line Question Option : No Option Orientation : Vertical

Correct Marks : 1 Wrong Marks : 0.25

एक अनुक्रम दिया गया है, जिसमें से एक पद लुप्त है। दिए गए विकल्पों में से वह सही विकल्प चुनिए, जो अनुक्रम को पूरा करे।

EF, JK, OP, TU, ?

Options :

1. ✘ WX
2. ✘ XY
3. ✘ AB
4. ✔ YZ

Question Number : 4 Question Id : 5459275660 Question Type : MCQ Option Shuffling : Yes Display Question Number : Yes  
Single Line Question Option : No Option Orientation : Vertical

Correct Marks : 1 Wrong Marks : 0.25

In the following question, select the odd word from the given alternatives.

Options :

1. ✘ Triangle
2. ✘ Square
3. ✔ Figure
4. ✘ Hexagon

Question Number : 4 Question Id : 5459275660 Question Type : MCQ Option Shuffling : Yes Display Question Number : Yes  
Single Line Question Option : No Option Orientation : Vertical

Correct Marks : 1 Wrong Marks : 0.25

निम्नलिखित प्रश्न में दिए गए विकल्पों में से विषम शब्द को चुनिए।

Options :

1. ✘ त्रिभुज
2. ✘ वर्ग
3. ✔ आकृति
4. ✘ षट्भुज

Question Number : 5 Question Id : 5459275661 Question Type : MCQ Option Shuffling : Yes Display Question Number : Yes  
Single Line Question Option : No Option Orientation : Vertical

Correct Marks : 1 Wrong Marks : 0.25

In the following question, four letter pairs are given. The letters on left side of (-) is related to the letters on the right side of (-) with some Logic/Rule/Relation. Three are similar on basis of same Logic/Rule/Relation. Select the odd one out from the given alternatives.

Options :

1. ✘ TP-RN
2. ✘ JS-HQ
3. ✘ LM-JK
4. ✔ AT-ZR

Question Number : 5 Question Id : 5459275661 Question Type : MCQ Option Shuffling : Yes Display Question Number : Yes  
Single Line Question Option : No Option Orientation : Vertical

Correct Marks : 1 Wrong Marks : 0.25

नीचे दिए गए प्रश्न में, चार अक्षर युग्म दिए गए हैं। (-) के बायीं ओर दिये गये अक्षर (-) के दायीं ओर दिये गये अक्षर से किसी तर्क/नियम/संबंध से संबंधित है। तीन उसी एक तर्क/नियम/संबंध के आधार पर समान हैं। दिए गए विकल्पों में से विषम को चुनिए।

Options :

1. ✘ TP-RN
2. ✘ JS-HQ
3. ✘ LM-JK
4. ✔ AT-ZR

Question Number : 6 Question Id : 5459275662 Question Type : MCQ Option Shuffling : Yes Display Question Number : Yes  
Single Line Question Option : No Option Orientation : Vertical

Correct Marks : 1 Wrong Marks : 0.25

In the following question, select the odd word pair from the given alternatives.

Options :

1. ✘ Guns : Armoury
2. ✘ Medicine : Dispensary
3. ✘ Patient : Hospital
4. ✔ Garage : Car

Question Number : 6 Question Id : 5459275662 Question Type : MCQ Option Shuffling : Yes Display Question Number : Yes  
Single Line Question Option : No Option Orientation : Vertical

Correct Marks : 1 Wrong Marks : 0.25

निम्नलिखित प्रश्न में दिए गए विकल्पों में से विषम शब्द युग्म को चुनिए।

Options :

1. ✘ बंदूकें : शस्त्रशाला
2. ✘ दवाई : औषधालय
3. ✘ रोगी : अस्पताल
4. ✔ गैराज : कार

Question Number : 7 Question Id : 5459275663 Question Type : MCQ Option Shuffling : Yes Display Question Number : Yes  
Single Line Question Option : No Option Orientation : Vertical

Correct Marks : 1 Wrong Marks : 0.25

Select the option that is related to the third term in the same way as the second term is related to the first term.

Note: For this question, discrepancy is found in question/answer. So, this question is ignored for all candidates.

Options :

1. QW
2. QV
3. PW
4. PV

Question Number : 7 Question Id : 5459275663 Question Type : MCQ Option Shuffling : Yes Display Question Number : Yes  
Single Line Question Option : No Option Orientation : Vertical

Correct Marks : 1 Wrong Marks : 0.25

दिए गए विकल्पों में से उस विकल्प को चुने जो तीसरे पद से उसी प्रकार से संबंधित है जिस प्रकार दूसरा पद पहले से संबंधित है

Note: For this question, discrepancy is found in question/answer. So, this question is ignored for all candidates.

Options :

1. QW
2. QV
3. PW
4. PV

Question Number : 8 Question Id : 5459275664 Question Type : MCQ Option Shuffling : Yes Display Question Number : Yes  
Single Line Question Option : No Option Orientation : Vertical

Correct Marks : 1 Wrong Marks : 0.25

Select the option that is related to the third term in the same way as the second term is related to the first term.

Note: For this question, discrepancy is found in question/answer. So, this question is ignored for all candidates.

Options :

1. Lion
2. Bird
3. Horse
4. Elephant

Question Number : 8 Question Id : 5459275664 Question Type : MCQ Option Shuffling : Yes Display Question Number : Yes  
Single Line Question Option : No Option Orientation : Vertical

Correct Marks : 1 Wrong Marks : 0.25

दिए गए विकल्पों में से उस विकल्प को चुने जो तीसरे पद से उसी प्रकार से संबंधित है जिस प्रकार दूसरा पद पहले से संबंधित है

Note: For this question, discrepancy is found in question/answer. So, this question is ignored for all candidates.

Options :

1. सिंह
2. पक्षी
3. घोड़ा
4. हाथी

Question Number : 9 Question Id : 5459275665 Question Type : MCQ Option Shuffling : Yes Display Question Number : Yes  
Single Line Question Option : No Option Orientation : Vertical

Correct Marks : 1 Wrong Marks : 0.25

Select the option that is related to the third term in the same way as the second term is related to the first term.

Note: For this question, discrepancy is found in question/answer. So, this question is ignored for all candidates.

Options :

1. Plough
2. Axe
3. Hammer
4. Spade

Question Number : 9 Question Id : 5459275665 Question Type : MCQ Option Shuffling : Yes Display Question Number : Yes  
Single Line Question Option : No Option Orientation : Vertical

Correct Marks : 1 Wrong Marks : 0.25

दिए गए विकल्पों में से उस विकल्प को चुने जो तीसरे पद से उसी प्रकार से संबंधित है जिस प्रकार दूसरा पद पहले से संबंधित है

Note: For this question, discrepancy is found in question/answer. So, this question is ignored for all candidates.

Options :

1. हल
2. कुल्हाड़ी
3. हथौड़ा
4. कुदाली

Question Number : 10 Question Id : 5459275666 Question Type : MCQ Option Shuffling : Yes Display Question Number : Yes  
Single Line Question Option : No Option Orientation : Vertical

Correct Marks : 1 Wrong Marks : 0.25

In a certain code language, 'TEST' is written as '60', 'CLUB' is written as '34'. What is the code for 'REST' in that code language?

Options :

1. ✘ 60
2. ✘ 56
3. ✔ 58
4. ✘ 62

Question Number : 10 Question Id : 5459275666 Question Type : MCQ Option Shuffling : Yes Display Question Number : Yes  
Single Line Question Option : No Option Orientation : Vertical

Correct Marks : 1 Wrong Marks : 0.25

एक विशिष्ट कोड भाषा में, 'TEST' को '60' लिखा जाता है, 'CLUB' को '34' लिखा जाता है। इस कोड भाषा में 'REST' का कोड क्या है?

Options :

1. ✘ 60
2. ✘ 56
3. ✔ 58
4. ✘ 62

Question Number : 11 Question Id : 5459275667 Question Type : MCQ Option Shuffling : Yes Display Question Number : Yes  
Single Line Question Option : No Option Orientation : Vertical

Correct Marks : 1 Wrong Marks : 0.25

In a certain code language, 'PHRASE' is written as 'RFTYUC'. What is the code for 'TABLE' in that code language?

Options :

1. ✘ UYDJE
2. ✘ VYDJF

3. ✓ VYDJG

4. ✗ VYJDG

Question Number : 11 Question Id : 5459275667 Question Type : MCQ Option Shuffling : Yes Display Question Number : Yes  
Single Line Question Option : No Option Orientation : Vertical

Correct Marks : 1 Wrong Marks : 0.25

एक विशिष्ट कोड भाषा में, 'PHRASE' को 'RFTYUC' लिखा जाता है। इस कोड भाषा में 'TABLE' का कोड क्या है?

Options :

1. ✗ UYDJE

2. ✗ VYDJF

3. ✓ VYDJG

4. ✗ VYJDG

Question Number : 12 Question Id : 5459275668 Question Type : MCQ Option Shuffling : Yes Display Question Number : Yes  
Single Line Question Option : No Option Orientation : Vertical

Correct Marks : 1 Wrong Marks : 0.25

In a certain code language, 'RED' is called 'WOOD', 'WOOD' is called 'BREAD', 'BREAD' is called 'PLASTIC', 'PLASTIC' is called 'MILK', 'MILK' is called 'WHITE'. What do we eat?

Options :

1. ✓ PLASTIC

2. ✗ MILK

3. ✗ WOOD

4. ✗ WHITE

Question Number : 12 Question Id : 5459275668 Question Type : MCQ Option Shuffling : Yes Display Question Number : Yes  
Single Line Question Option : No Option Orientation : Vertical

Correct Marks : 1 Wrong Marks : 0.25

एक विशिष्ट कोड भाषा में, 'लाल' को 'लकड़ी' कहा जाता है, 'लकड़ी' को 'रोटी' कहा जाता है, 'रोटी' को 'प्लास्टिक' कहा जाता है, 'प्लास्टिक' को 'दूध' कहा जाता है, 'दूध' को 'सफेद' कहा जाता है। हम क्या खाते हैं?

Options :

1. ✓ प्लास्टिक

2. ✗ दूध

3. ✗ लकड़ी

4. ✗ सफेद

Question Number : 13 Question Id : 5459275669 Question Type : MCQ Option Shuffling : Yes Display Question Number : Yes  
Single Line Question Option : No Option Orientation : Vertical

Correct Marks : 1 Wrong Marks : 0.25

Six teachers P, Q, R, S, T, and U are sitting around a circular table facing towards the centre. T is to the immediate left of S. Only R is between P and Q. Only U is between P and T. Who is second to the left of R?

Options :

1. ✗ U

2. ✗ Q

3. ✓ S

4. ✗ T

Question Number : 13 Question Id : 5459275669 Question Type : MCQ Option Shuffling : Yes Display Question Number : Yes  
Single Line Question Option : No Option Orientation : Vertical

Correct Marks : 1 Wrong Marks : 0.25

छः शिक्षक P, Q, R, S, T और U केंद्र की ओर मुख करके एक वृत्ताकार मेज़ के इर्द-गिर्द बैठे हुए हैं। T, S के तुरंत बायीं ओर है। P और Q के बीच में केवल R है। P और T के बीच में केवल U है। R के बायीं ओर दूसरा कौन है?

Options :

- ✘ U
- ✘ Q
- ✔ S
- ✘ T

Question Number : 14 Question Id : 5459275670 Question Type : MCQ Option Shuffling : Yes Display Question Number : Yes Single Line Question Option : No Option Orientation : Vertical

Correct Marks : 1 Wrong Marks : 0.25

A person has five dumbbells L, M, N, O, and P of different weights. O weighs twice as much as N. M weighs two and a half times as much as N. L weighs twice as much as M. P weighs less than L but more than N. O weighs half as much as P. Which of the following is lightest in weight?

Options :

- ✘ L
- ✘ M
- ✔ N
- ✘ O

Question Number : 14 Question Id : 5459275670 Question Type : MCQ Option Shuffling : Yes Display Question Number : Yes Single Line Question Option : No Option Orientation : Vertical

Correct Marks : 1 Wrong Marks : 0.25

एक व्यक्ति के पास विभिन्न भारों के पाँच डम्बल L, M, N, O, और P हैं। O का भार N का दोगुना है। M का भार N का ढाई गुना है। L का भार M का दोगुना है। P का भार L से कम है लेकिन N से अधिक है। O का भार P का आधा है। निम्नलिखित में से कौन सा भार में सबसे हल्का है?

Options :

- ✘ L
- ✘ M
- ✔ N
- ✘ O

Question Number : 15 Question Id : 5459275671 Question Type : MCQ Option Shuffling : Yes Display Question Number : Yes Single Line Question Option : No Option Orientation : Vertical

Correct Marks : 1 Wrong Marks : 0.25

Six people P, Q, R, S, T, and U are sitting in a row facing towards north (not necessarily in the same order). Only P is sitting between Q and R. Q is sitting next to S. S is sitting next to T. T is sitting on the extreme left. Who are sitting adjacent to R?

Options :

- ✘ S and U
- ✘ T and S
- ✔ P and U
- ✘ S and P

Question Number : 15 Question Id : 5459275671 Question Type : MCQ Option Shuffling : Yes Display Question Number : Yes Single Line Question Option : No Option Orientation : Vertical

Correct Marks : 1 Wrong Marks : 0.25

छः व्यक्ति P, Q, R, S, T तथा U उत्तर की ओर मुख करके एक पंक्ति में बैठे हैं (जरूरी नहीं की इसी क्रम में हों)। Q और R के बीच में केवल P बैठा है। Q, S के बगल में बैठा है। S, T के बगल में बैठा है। T सबसे बायीं ओर बैठा है। R के दोनों तरफ कौन बैठे हैं?

Options :

- ✘ S और U



2. ✘ T और S
3. ✔ P और U
4. ✘ S और P

Question Number : 16 Question Id : 5459275672 Question Type : MCQ Option Shuffling : Yes Display Question Number : Yes  
Single Line Question Option : No Option Orientation : Vertical

Correct Marks : 1 Wrong Marks : 0.25

Five people are sitting on five different steps of a staircase. Heena is sitting above Esha and Mohit is sitting below Sheena. Esha is sitting above Sheena and Dhruv is sitting below Mohit. Which of the following statement is correct?

Options :

1. ✘ Esha is between Sheena and Mohit
2. ✘ Heena is at the bottom
3. ✔ Two people are sitting between Dhruv and Esha
4. ✘ Sheena is at the top

Question Number : 16 Question Id : 5459275672 Question Type : MCQ Option Shuffling : Yes Display Question Number : Yes  
Single Line Question Option : No Option Orientation : Vertical

Correct Marks : 1 Wrong Marks : 0.25

पाँच व्यक्ति एक सीढ़ी के पाँच अलग-अलग चरणों पर बैठे हैं। हीना, ईशा से ऊपर बैठी है और मोहित, शीना से नीचे बैठा है। ईशा, शीना से ऊपर बैठी है और ध्रुव, मोहित से नीचे बैठा है। निम्नलिखित में से कौन सा कथन सही है?

Options :

1. ✘ इशा, शीना तथा मोहित के बीच में है
2. ✘ हीना सबसे नीचे है
3. ✔ ध्रुव तथा इशा के मध्य दो व्यक्ति बैठे हैं
4. ✘ शीना सबसे ऊपर है

Question Number : 17 Question Id : 5459275673 Question Type : MCQ Option Shuffling : Yes Display Question Number : Yes  
Single Line Question Option : No Option Orientation : Vertical

Correct Marks : 1 Wrong Marks : 0.25

Sheena ate only mangoes and apples. Sushila ate all the fruits except grapes. Sharda ate only apples and bananas. Gauri ate all the fruits except oranges and peaches. Riya ate all the fruits except peaches, grapes and mangoes. How many girls ate bananas?

Options :

1. ✘ Two
2. ✔ Four
3. ✘ Three
4. ✘ One

Question Number : 17 Question Id : 5459275673 Question Type : MCQ Option Shuffling : Yes Display Question Number : Yes  
Single Line Question Option : No Option Orientation : Vertical

Correct Marks : 1 Wrong Marks : 0.25

शीना ने केवल आम और सेब खाए। सुशीला ने अंगूर को छोड़कर बाकी सभी फल खाए। शारदा ने केवल सेब और केले खाए। गौरी ने संतरे और आड़ू को छोड़कर बाकी सभी फल खाए। रिया ने आड़ू, अंगूर और आम को छोड़कर बाकी सभी फल खाए। केला कितनी लड़कियों ने खाया?

Options :

1. ✘ दो
2. ✔ चार
3. ✘ तीन
4. ✘ एक

Question Number : 18 Question Id : 5459275674 Question Type : MCQ Option Shuffling : Yes Display Question Number : Yes  
Single Line Question Option : No Option Orientation : Vertical

Correct Marks : 1 Wrong Marks : 0.25

In the following question below are given some statements followed by some conclusions based on those statements. Taking the given statements to be true even if they seem to be at variance from commonly known facts. Read all the conclusions and then decide which of the given conclusion logically follows the given statements.

Statements:

- I. All tables are chairs.
- II. All chairs are pens.

Conclusions:

- I. Some tables are pens.
- II. All pens are tables.

Options :

1. ✓ Only conclusion I follow
2. ✗ Only conclusion II follow
3. ✗ Both conclusion I and II follow
4. ✗ Neither conclusion follow

Question Number : 18 Question Id : 5459275674 Question Type : MCQ Option Shuffling : Yes Display Question Number : Yes  
Single Line Question Option : No Option Orientation : Vertical

Correct Marks : 1 Wrong Marks : 0.25

नीचे दिए गए प्रश्न में कुछ कथन और उनके बाद उन कथनों पर आधारित कुछ निष्कर्ष दिए गए हैं। दिए गए कथनों को सही माने, चाहे उनमें सामान्य ज्ञात तथ्यों से भिन्नता हो। सभी निष्कर्ष पढ़ें और फिर निर्धारित करें कि दिए गए कौन से निष्कर्ष, दिए गए कथनों के आधार पर युक्तिसंगत हैं।

कथन:

- I. सभी मेज कुर्सियाँ हैं।
- II. सभी कुर्सियाँ कलम हैं।

निष्कर्ष:

- I. कुछ मेज कलम हैं।
- II. सभी कलम मेज हैं।

Options :

1. ✓ केवल निष्कर्ष I अनुसरण करता है
2. ✗ केवल निष्कर्ष II अनुसरण करता है
3. ✗ दोनों निष्कर्ष I तथा II अनुसरण करते हैं
4. ✗ कोई भी निष्कर्ष अनुसरण नहीं करता है

Question Number : 19 Question Id : 5459275675 Question Type : MCQ Option Shuffling : Yes Display Question Number : Yes  
Single Line Question Option : No Option Orientation : Vertical

Correct Marks : 1 Wrong Marks : 0.25

In the following question below are given some statements followed by some conclusions based on those statements. Taking the given statements to be true even if they seem to be at variance from commonly known facts. Read all the conclusions and then decide which of the given conclusion logically follows the given statements.

Statements:

- I. All pencils are chairs.
- II. Some chairs are tables.
- III. Some tables are pens.

Conclusions:

- I. Some pens are pencils.
- II. All tables are pencils.
- III. All pens are chairs.

Options :

1. ✖ Both conclusion II and III follow
2. ✖ Both conclusion I and II follow
3. ✖ Only conclusion II follow
4. ✔ Neither conclusion follow

Question Number : 19 Question Id : 5459275675 Question Type : MCQ Option Shuffling : Yes Display Question Number : Yes  
Single Line Question Option : No Option Orientation : Vertical

Correct Marks : 1 Wrong Marks : 0.25

नीचे दिए गए प्रश्न में कुछ कथन और उनके बाद उन कथनों पर आधारित कुछ निष्कर्ष दिए गए हैं। दिए गए कथनों को सही माने, चाहे उनमें सामान्य ज्ञात तथ्यों से भिन्नता हो। सभी निष्कर्ष पढ़ें और फिर निर्धारित करें कि दिए गए कौन से निष्कर्ष, दिए गए कथनों के आधार पर युक्तिसंगत हैं।

कथन:

- I. सभी पेंसिल कुर्सियाँ हैं।
- II. कुछ कुर्सियाँ मेज हैं।
- III. कुछ मेज कलम हैं।

निष्कर्ष:

- I. कुछ कलम पेंसिल हैं।
- II. सभी मेज पेंसिल हैं।
- III. सभी कलम कुर्सियाँ हैं।

Options :

1. ✖ दोनों निष्कर्ष II तथा III अनुसरण करते हैं।
2. ✖ दोनों निष्कर्ष I तथा II अनुसरण करते हैं।
3. ✖ केवल निष्कर्ष II अनुसरण करता है।
4. ✔ कोई भी निष्कर्ष अनुसरण नहीं करता है।

Question Number : 20 Question Id : 5459275676 Question Type : MCQ Option Shuffling : Yes Display Question Number : Yes  
Single Line Question Option : No Option Orientation : Vertical

Correct Marks : 1 Wrong Marks : 0.25

In the following question, select the number which can be placed at the sign of question mark (?) from the given alternatives.

4	5
6	44

8	3
11	112

5	9
7	?

Options :

1. ✖ 120
2. ✖ 160

3. ✖ 100

4. ✔ 80

Question Number : 20 Question Id : 5459275676 Question Type : MCQ Option Shuffling : Yes Display Question Number : Yes  
Single Line Question Option : No Option Orientation : Vertical

Correct Marks : 1 Wrong Marks : 0.25

निम्नलिखित प्रश्न में दिए गए विकल्पों में से प्रश्न चिन्ह (?) के स्थान पर आने वाली संख्या को चुनिए।

4	5
6	44

8	3
11	112

5	9
7	?

Options :

1. ✖ 120

2. ✖ 160

3. ✖ 100

4. ✔ 80

Mental Ability2

Group Number :	2
Group Id :	545927282
Group Maximum Duration :	0
Group Minimum Duration :	0
Revisit allowed for view? :	No
Revisit allowed for edit? :	No
Break time:	0
Group Marks:	20
Revisit allowed for group Instructions? :	Yes
Maximum Instruction Time:	0
Minimum Instruction Time:	0

Mental Ability2

Section Id :	545927282
Section Number :	1
Section type :	Online
Mandatory or Optional:	Mandatory
Number of Questions:	20
Number of Questions to be attempted:	20
Section Marks:	20
Display Number Panel:	Yes
Group All Questions:	No

Sub-Section Number:	1
Sub-Section Id:	545927338
Question Shuffling Allowed :	Yes

Question Number : 21 Question Id : 5459275677 Question Type : MCQ Option Shuffling : Yes Display Question Number : Yes  
Single Line Question Option : No Option Orientation : Vertical

Correct Marks : 1 Wrong Marks : 0.25

In the following question, select the number which can be placed at the sign of question mark (?) from the given alternatives.

	2			
6	202	5		
	7			

	3			
8	194	5		
	2			

	6			
7	?	3		
	8			

Options :

- ✗ 202
- ✗ 312
- ✗ 303
- ✓ 296

Question Number : 21 Question Id : 5459275677 Question Type : MCQ Option Shuffling : Yes Display Question Number : Yes  
Single Line Question Option : No Option Orientation : Vertical

Correct Marks : 1 Wrong Marks : 0.25

निम्नलिखित प्रश्न में दिए गए विकल्पों में से प्रश्न चिन्ह (?) के स्थान पर आने वाली संख्या को चुनिए।

	2			
6	202	5		
	7			

	3			
8	194	5		
	2			

	6			
7	?	3		
	8			

Options :

- ✗ 202
- ✗ 312
- ✗ 303
- ✓ 296

Question Number : 22 Question Id : 5459275678 Question Type : MCQ Option Shuffling : Yes Display Question Number : Yes  
Single Line Question Option : No Option Orientation : Vertical

Correct Marks : 1 Wrong Marks : 0.25

In the following question, select the number which can be placed at the sign of question mark (?) from the given alternatives.

11	7	4
8	6	5
5	3	9
576	?	324

Options :

- ✗ 144
- ✓ 256
- ✗ 289
- ✗ 196

Question Number : 22 Question Id : 5459275678 Question Type : MCQ Option Shuffling : Yes Display Question Number : Yes  
Single Line Question Option : No Option Orientation : Vertical

Correct Marks : 1 Wrong Marks : 0.25

निम्नलिखित प्रश्न में दिए गए विकल्पों में से प्रश्न चिन्ह (?) के स्थान पर आने वाली संख्या को चुनिए।

11	7	4
8	6	5
5	3	9
576	?	324

Options :

- ✘ 144
- ✔ 256
- ✘ 289
- ✘ 196

Question Number : 23 Question Id : 5459275679 Question Type : MCQ Option Shuffling : Yes Display Question Number : Yes  
Single Line Question Option : No Option Orientation : Vertical

Correct Marks : 1 Wrong Marks : 0.25

Select the option that is related to the third number in the same way as the second number is related to the first number.

Note: For this question, discrepancy is found in question/answer. So, this question is ignored for all candidates.

Options :

- 100
- 90
- 130
- 170

Question Number : 23 Question Id : 5459275679 Question Type : MCQ Option Shuffling : Yes Display Question Number : Yes  
Single Line Question Option : No Option Orientation : Vertical

Correct Marks : 1 Wrong Marks : 0.25

दिए गए विकल्पों में से उस विकल्प को चुने जो तीसरी संख्या से उसी प्रकार से संबंधित है जिस प्रकार दूसरी संख्या पहले से संबंधित है।

Note: For this question, discrepancy is found in question/answer. So, this question is ignored for all candidates.

Options :

- 100
- 90
- 130
- 170

Question Number : 24 Question Id : 5459275680 Question Type : MCQ Option Shuffling : Yes Display Question Number : Yes  
Single Line Question Option : No Option Orientation : Vertical

Correct Marks : 1 Wrong Marks : 0.25

Select the option that is related to the third number in the same way as the second number is related to the first number.

Note: For this question, discrepancy is found in question/answer. So, this question is ignored for all candidates.

Options :

- 121
- 324

3. 144

4. 196

**Question Number : 24 Question Id : 5459275680 Question Type : MCQ Option Shuffling : Yes Display Question Number : Yes Single Line Question Option : No Option Orientation : Vertical**

**Correct Marks : 1 Wrong Marks : 0.25**

दिए गए विकल्पों में से उस विकल्प को चुने जो तीसरी संख्या से उसी प्रकार से संबंधित है जिस प्रकार दूसरी संख्या पहले से संबंधित है

**Note: For this question, discrepancy is found in question/answer. So, this question is ignored for all candidates.**

**Options :**

1. 121

2. 324

3. 144

4. 196

**Question Number : 25 Question Id : 5459275681 Question Type : MCQ Option Shuffling : Yes Display Question Number : Yes Single Line Question Option : No Option Orientation : Vertical**

**Correct Marks : 1 Wrong Marks : 0.25**

Select the option that is related to the third number in the same way as the second number is related to the first number.

**Note: For this question, discrepancy is found in question/answer. So, this question is ignored for all candidates.**

**Options :**

1. 182285

2. 196225

3. 176489

4. 144121

**Question Number : 25 Question Id : 5459275681 Question Type : MCQ Option Shuffling : Yes Display Question Number : Yes Single Line Question Option : No Option Orientation : Vertical**

**Correct Marks : 1 Wrong Marks : 0.25**

दिए गए विकल्पों में से उस विकल्प को चुने जो तीसरी संख्या से उसी प्रकार से संबंधित है जिस प्रकार दूसरी संख्या पहले से संबंधित है

**Note: For this question, discrepancy is found in question/answer. So, this question is ignored for all candidates.**

**Options :**

1. 182285

2. 196225

3. 176489

4. 144121

**Question Number : 26 Question Id : 5459275682 Question Type : MCQ Option Shuffling : Yes Display Question Number : Yes Single Line Question Option : No Option Orientation : Vertical**

**Correct Marks : 1 Wrong Marks : 0.25**

In the following question, select the missing number from the given series.

2, 2, 10, 6, 30, 12, 68, 20, ?

**Options :**

1. ✓ 130

2. ✗ 170

3. ✗ 210

4. ✗ 90

Question Number : 26 Question Id : 5459275682 Question Type : MCQ Option Shuffling : Yes Display Question Number : Yes  
Single Line Question Option : No Option Orientation : Vertical

Correct Marks : 1 Wrong Marks : 0.25

निम्नलिखित प्रश्न में दी गई श्रृंखला में से लुप्त अंक ज्ञात कीजिए।

2, 2, 10, 6, 30, 12, 68, 20, ?

Options :

1. ✓ 130
2. ✗ 170
3. ✗ 210
4. ✗ 90

Question Number : 27 Question Id : 5459275683 Question Type : MCQ Option Shuffling : Yes Display Question Number : Yes  
Single Line Question Option : No Option Orientation : Vertical

Correct Marks : 1 Wrong Marks : 0.25

In the following question, select the missing number from the given series.

5, 11, 32, 129, 644, ?

Options :

1. ✗ 3615
2. ✗ 3185
3. ✓ 3865
4. ✗ 3925

Question Number : 27 Question Id : 5459275683 Question Type : MCQ Option Shuffling : Yes Display Question Number : Yes  
Single Line Question Option : No Option Orientation : Vertical

Correct Marks : 1 Wrong Marks : 0.25

निम्नलिखित प्रश्न में दी गई श्रृंखला में से लुप्त अंक ज्ञात कीजिए।

5, 11, 32, 129, 644, ?

Options :

1. ✗ 3615
2. ✗ 3185
3. ✓ 3865
4. ✗ 3925

Question Number : 28 Question Id : 5459275684 Question Type : MCQ Option Shuffling : Yes Display Question Number : Yes  
Single Line Question Option : No Option Orientation : Vertical

Correct Marks : 1 Wrong Marks : 0.25

If 'P' means '+', 'Q' means '×', 'R' means '+' and 'S' means '-', then  $3 P 6 R 8 Q 2 S 4 Q 8 = ?$

Options :

1. ✗  $-(35/2)$
2. ✗  $-(33/2)$
3. ✓  $-(31/2)$
4. ✗  $-(29/2)$

Question Number : 28 Question Id : 5459275684 Question Type : MCQ Option Shuffling : Yes Display Question Number : Yes  
Single Line Question Option : No Option Orientation : Vertical

Correct Marks : 1 Wrong Marks : 0.25



यदि 'P' का अर्थ '÷', 'Q' का अर्थ '×', 'R' का अर्थ '+' तथा 'S' का अर्थ '-' हो, तो  $3P6R8Q2S4Q8 = ?$

Options :

1. ✘  $-(35/2)$
2. ✘  $-(33/2)$
3. ✔  $-(31/2)$
4. ✘  $-(29/2)$

Question Number : 29 Question Id : 5459275685 Question Type : MCQ Option Shuffling : Yes Display Question Number : Yes  
Single Line Question Option : No Option Orientation : Vertical

Correct Marks : 1 Wrong Marks : 0.25

If  $A * B = A^2 + B^2 + AB$ , then  $(3 * 4) + (2 * 5) = ?$

Options :

1. ✘ 72
2. ✔ 76
3. ✘ 82
4. ✘ 96

Question Number : 29 Question Id : 5459275685 Question Type : MCQ Option Shuffling : Yes Display Question Number : Yes  
Single Line Question Option : No Option Orientation : Vertical

Correct Marks : 1 Wrong Marks : 0.25

यदि  $A * B = A^2 + B^2 + AB$  है, तो  $(3 * 4) + (2 * 5) = ?$

Options :

1. ✘ 72
2. ✔ 76
3. ✘ 82
4. ✘ 96

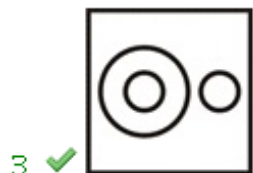

Question Number : 30 Question Id : 5459275686 Question Type : MCQ Option Shuffling : Yes Display Question Number : Yes  
Single Line Question Option : No Option Orientation : Vertical

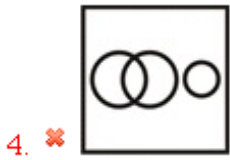
Correct Marks : 1 Wrong Marks : 0.25

Identify the diagram that best represents the relationship among the given classes.

Vehicle, Aeroplane, Calculator

Options :





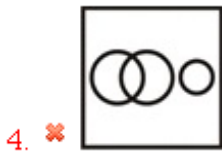
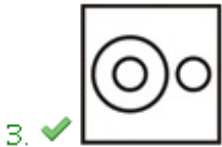

Question Number : 30 Question Id : 5459275686 Question Type : MCQ Option Shuffling : Yes Display Question Number : Yes  
Single Line Question Option : No Option Orientation : Vertical

Correct Marks : 1 Wrong Marks : 0.25

वह आरेख चुनिए जो नीचे दिए गए वर्गों के बीच के संबंध का सही निरूपण करता है।

वाहन, हवाई जहाज़, कैलकुलेटर

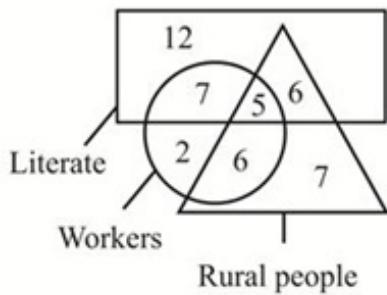
Options :



Question Number : 31 Question Id : 5459275687 Question Type : MCQ Option Shuffling : Yes Display Question Number : Yes  
Single Line Question Option : No Option Orientation : Vertical

Correct Marks : 1 Wrong Marks : 0.25

In the given figure, how many rural workers are literate?



Options :

1. ✘ 6

2. ✔ 5

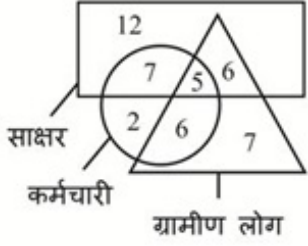
3. ✘ 7

4. ✘ 2

Question Number : 31 Question Id : 5459275687 Question Type : MCQ Option Shuffling : Yes Display Question Number : Yes  
Single Line Question Option : No Option Orientation : Vertical

Correct Marks : 1 Wrong Marks : 0.25

दी गई आकृति में कितने ग्रामीण कर्मचारी साक्षर हैं?



Options :

1. ✘ 6
2. ✔ 5
3. ✘ 7
4. ✘ 2

Question Number : 32 Question Id : 5459275688 Question Type : MCQ Option Shuffling : Yes Display Question Number : Yes  
Single Line Question Option : No Option Orientation : Vertical

Correct Marks : 1 Wrong Marks : 0.25

Rohan walks 10 km towards south. He turns left and walks 6 km. He again turns left and walks 4 km. He finally turns right and walks straight. In which direction is he walking now?

Options :

1. ✔ East
2. ✘ West
3. ✘ North
4. ✘ South

Question Number : 32 Question Id : 5459275688 Question Type : MCQ Option Shuffling : Yes Display Question Number : Yes  
Single Line Question Option : No Option Orientation : Vertical

Correct Marks : 1 Wrong Marks : 0.25

रोहन 10 कि.मी. दक्षिण की ओर चलता है। वह बायें मुड़ता है और 6 कि.मी. चलता है। वह फिर से बायें मुड़ता है तथा 4 कि.मी. चलता है। वह अंततः दायें मुड़ता है और सीधा चलता है। वह अब किस दिशा में चल रहा है?

Options :

1. ✔ पूर्व
2. ✘ पश्चिम
3. ✘ उत्तर
4. ✘ दक्षिण

Question Number : 33 Question Id : 5459275689 Question Type : MCQ Option Shuffling : Yes Display Question Number : Yes  
Single Line Question Option : No Option Orientation : Vertical

Correct Marks : 1 Wrong Marks : 0.25

Sharmila walks 20 metre towards south. Then she walks 30 metres after turning to left. Finally she walks 20 metres after turning to left. How far and in which direction is she now from her starting point?

Options :

1. ✘ 50 metres, North-east
2. ✘ 40 metres, North-west
3. ✔ 30 metres, East

4. ✘ 30 metres, West

Question Number : 33 Question Id : 5459275689 Question Type : MCQ Option Shuffling : Yes Display Question Number : Yes  
Single Line Question Option : No Option Orientation : Vertical

Correct Marks : 1 Wrong Marks : 0.25

शर्मिला दक्षिण की ओर 20 मीटर चलती है। फिर वह बायीं ओर मुड़ने के बाद 30 मीटर चलती है। अंततः वह बायीं ओर मुड़ने के बाद 20 मीटर चलती है। अब वह अपने प्रारंभिक बिंदु से कितनी दूर और किस दिशा में है?

Options :

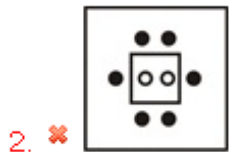
1. ✘ 50 मीटर, उत्तर-पूर्व
2. ✘ 40 मीटर, उत्तर-पश्चिम
3. ✔ 30 मीटर, पूर्व
4. ✘ 30 मीटर, पश्चिम

Question Number : 34 Question Id : 5459275690 Question Type : MCQ Option Shuffling : Yes Display Question Number : Yes  
Single Line Question Option : No Option Orientation : Vertical

Correct Marks : 1 Wrong Marks : 0.25

In the following question, select the odd figure from the given alternatives.

Options :



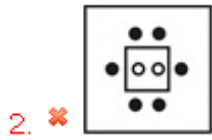
Question Number : 34 Question Id : 5459275690 Question Type : MCQ Option Shuffling : Yes Display Question Number : Yes  
Single Line Question Option : No Option Orientation : Vertical

Correct Marks : 1 Wrong Marks : 0.25

निम्नलिखित प्रश्न में दिए गए विकल्पों में से विषम आकृति को चुनिए।

Options :

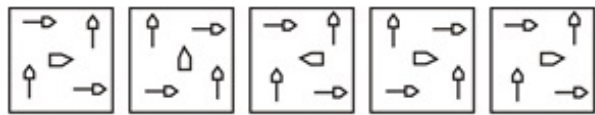




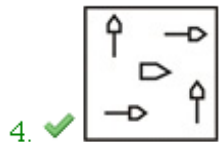
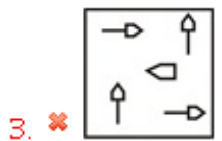
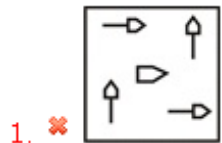
Question Number : 35 Question Id : 5459275691 Question Type : MCQ Option Shuffling : Yes Display Question Number : Yes  
Single Line Question Option : No Option Orientation : Vertical

Correct Marks : 1 Wrong Marks : 0.25

In the following question, select the wrong figure from the given series.



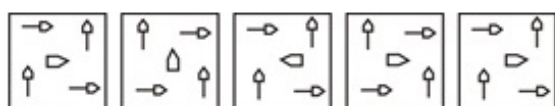
Options :



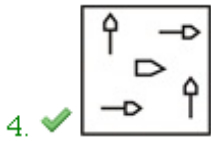
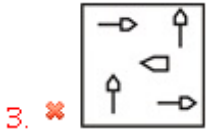
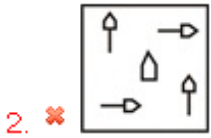
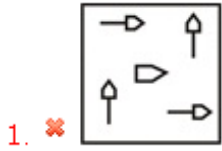
Question Number : 35 Question Id : 5459275691 Question Type : MCQ Option Shuffling : Yes Display Question Number : Yes  
Single Line Question Option : No Option Orientation : Vertical

Correct Marks : 1 Wrong Marks : 0.25

निम्नलिखित प्रश्न में, दी गयी श्रृंखला में से गलत आकृति को चुनिए



Options :



Question Number : 36 Question Id : 5459275692 Question Type : MCQ Option Shuffling : Yes Display Question Number : Yes  
 Single Line Question Option : No Option Orientation : Vertical

Correct Marks : 1 Wrong Marks : 0.25

Which answer figure will complete the pattern in the question figure?



Options :



Question Number : 36 Question Id : 5459275692 Question Type : MCQ Option Shuffling : Yes Display Question Number : Yes  
 Single Line Question Option : No Option Orientation : Vertical

Correct Marks : 1 Wrong Marks : 0.25

कौन सी उत्तर आकृति प्रश्न आकृति के प्रतिरूप को पूरा करेगी?



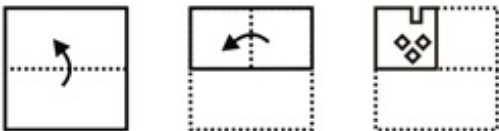
Options :



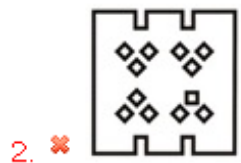
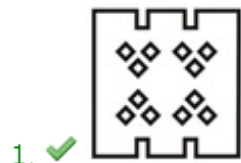
Question Number : 37 Question Id : 5459275693 Question Type : MCQ Option Shuffling : Yes Display Question Number : Yes Single Line Question Option : No Option Orientation : Vertical


Correct Marks : 1 Wrong Marks : 0.25

A piece of paper is folded and punched as shown below in the question figures. From the given answer figures, indicate how it will appear when opened?



Options :



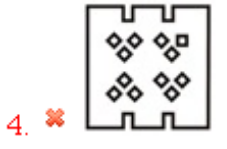
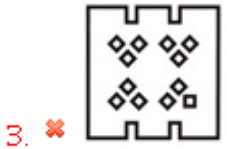
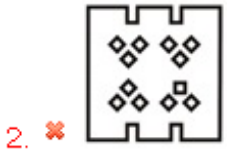
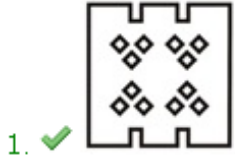


Question Number : 37 Question Id : 5459275693 Question Type : MCQ Option Shuffling : Yes Display Question Number : Yes  
Single Line Question Option : No Option Orientation : Vertical

Correct Marks : 1 Wrong Marks : 0.25

कागज का एक टुकड़ा मोड़ा तथा छेद (पंच) किया जाता है जैसे की नीचे प्रश्न आकृतियों में दिखाया गया है। जब वह टुकड़ा खोला जायेगा तो कैसे दिखाई देगा?

Options :



Question Number : 38 Question Id : 5459275694 Question Type : MCQ Option Shuffling : Yes Display Question Number : Yes  
Single Line Question Option : No Option Orientation : Vertical

Correct Marks : 1 Wrong Marks : 0.25

Three positions of a dice are given below. What will not come on the adjacent faces of a face containing '@'?



Options :

- 1. ✘ H, R
- 2. ✘ #, R
- 3. ✔ H, P
- 4. ✘ H, T

Question Number : 38 Question Id : 5459275694 Question Type : MCQ Option Shuffling : Yes Display Question Number : Yes  
Single Line Question Option : No Option Orientation : Vertical

Correct Marks : 1 Wrong Marks : 0.25



नीचे एक पासे की तीन अवस्थाएँ दी गयी है। '@' युक्त फलक की संलग्न फलकों पर क्या नहीं आएगा?



Options :

- ✘ H, R
- ✘ #, R
- ✔ H, P
- ✘ H, T

Question Number : 39 Question Id : 5459275695 Question Type : MCQ Option Shuffling : Yes Display Question Number : Yes Single Line Question Option : No Option Orientation : Vertical

Correct Marks : 1 Wrong Marks : 0.25

How many triangles are in the given figure?



Options :

- ✘ 10
- ✔ 11
- ✘ 13
- ✘ 12

Question Number : 39 Question Id : 5459275695 Question Type : MCQ Option Shuffling : Yes Display Question Number : Yes Single Line Question Option : No Option Orientation : Vertical

Correct Marks : 1 Wrong Marks : 0.25

दी गयी आकृति में कितने त्रिभुज हैं?



Options :

- ✘ 10
- ✔ 11
- ✘ 13
- ✘ 12

Question Number : 40 Question Id : 5459275696 Question Type : MCQ Option Shuffling : Yes Display Question Number : Yes Single Line Question Option : No Option Orientation : Vertical

Correct Marks : 1 Wrong Marks : 0.25

How many triangles are in the given figure?



Note: For this question, discrepancy is found in question/answer. So, this question is ignored for all candidates.

Options :

1. 7
2. 9
3. 8
4. 12

Question Number : 40 Question Id : 5459275696 Question Type : MCQ Option Shuffling : Yes Display Question Number : Yes Single Line Question Option : No Option Orientation : Vertical

Correct Marks : 1 Wrong Marks : 0.25

दी गयी आकृति में कितने त्रिभुज हैं?



Note: For this question, discrepancy is found in question/answer. So, this question is ignored for all candidates.

Options :

1. 7
2. 9
3. 8
4. 12

General Awareness 1

Group Number :	3
Group Id :	545927283
Group Maximum Duration :	0
Group Minimum Duration :	0
Revisit allowed for view? :	No
Revisit allowed for edit? :	No
Break time:	0
Group Marks:	20
Revisit allowed for group Instructions? :	Yes
Maximum Instruction Time:	0
Minimum Instruction Time:	0

General Awareness 1

Section Id :	545927283
Section Number :	1
Section type :	Online
Mandatory or Optional:	Mandatory
Number of Questions:	20
Number of Questions to be attempted:	20
Section Marks:	20
Display Number Panel:	Yes
Group All Questions:	No

Sub-Section Number:	1
Sub-Section Id:	545927339
Question Shuffling Allowed :	Yes

Question Number : 41 Question Id : 5459275697 Question Type : MCQ Option Shuffling : Yes Display Question Number : Yes  
Single Line Question Option : No Option Orientation : Vertical

Correct Marks : 1 Wrong Marks : 0.25

Rukmini Devi Arundale is famous for which form of dance?

Options :

- ✘ Kathakali
- ✔ Bharatanatyam
- ✘ Odissi
- ✘ Lavani

Question Number : 41 Question Id : 5459275697 Question Type : MCQ Option Shuffling : Yes Display Question Number : Yes  
Single Line Question Option : No Option Orientation : Vertical

Correct Marks : 1 Wrong Marks : 0.25

रुक्मिणी देवी अरुंडेल नृत्य के किस रूप के लिए प्रसिद्ध हैं?

Options :

- ✘ कथकली
- ✔ भरतनाट्यम
- ✘ ओडिसी
- ✘ लावणी

Question Number : 42 Question Id : 5459275698 Question Type : MCQ Option Shuffling : Yes Display Question Number : Yes  
Single Line Question Option : No Option Orientation : Vertical

Correct Marks : 1 Wrong Marks : 0.25

In which city is the Gateway of India located?

Options :

- ✘ Chennai
- ✔ Mumbai
- ✘ Kolkata
- ✘ New Delhi

Question Number : 42 Question Id : 5459275698 Question Type : MCQ Option Shuffling : Yes Display Question Number : Yes  
Single Line Question Option : No Option Orientation : Vertical

Correct Marks : 1 Wrong Marks : 0.25

गेटवे ऑफ इंडिया किस शहर में स्थित है?

Options :

1. ✘ चेन्नई
2. ✔ मुंबई
3. ✘ कोलकाता
4. ✘ नई दिल्ली

Question Number : 43 Question Id : 5459275699 Question Type : MCQ Option Shuffling : Yes Display Question Number : Yes  
Single Line Question Option : No Option Orientation : Vertical

Correct Marks : 1 Wrong Marks : 0.25

Konark Sun Temple is in \_\_\_\_\_.

Options :

1. ✘ Rajasthan
2. ✘ Tamil Nadu
3. ✔ Odisha
4. ✘ Andhra Pradesh

Question Number : 43 Question Id : 5459275699 Question Type : MCQ Option Shuffling : Yes Display Question Number : Yes  
Single Line Question Option : No Option Orientation : Vertical

Correct Marks : 1 Wrong Marks : 0.25

कोणार्क सूर्य मंदिर \_\_\_\_\_ में है।

Options :

1. ✘ राजस्थान
2. ✘ तमिलनाडु
3. ✔ ओडिशा
4. ✘ आंध्र प्रदेश

Question Number : 44 Question Id : 5459275700 Question Type : MCQ Option Shuffling : Yes Display Question Number : Yes  
Single Line Question Option : No Option Orientation : Vertical

Correct Marks : 1 Wrong Marks : 0.25

Musical instruments have been divided into how many main categories?

Options :

1. ✘ Two
2. ✔ Four
3. ✘ Six
4. ✘ Three

Question Number : 44 Question Id : 5459275700 Question Type : MCQ Option Shuffling : Yes Display Question Number : Yes  
Single Line Question Option : No Option Orientation : Vertical

Correct Marks : 1 Wrong Marks : 0.25

संगीत वाद्ययंत्रों को कितनी मुख्य श्रेणियों में विभाजित किया गया है?

Options :

1. ✘ दो
2. ✔ चार
3. ✘ छह
4. ✘ तीन

Question Number : 45 Question Id : 5459275701 Question Type : MCQ Option Shuffling : Yes Display Question Number : Yes  
Single Line Question Option : No Option Orientation : Vertical

Correct Marks : 1 Wrong Marks : 0.25

\_\_\_\_\_ is the difference between the government's total expenditure and its total receipts excluding borrowing.

Options :

1. ✓ Fiscal Deficit
2. ✗ Capital Expenditure
3. ✗ Capital Receipts
4. ✗ Foreign Reserves

Question Number : 45 Question Id : 5459275701 Question Type : MCQ Option Shuffling : Yes Display Question Number : Yes  
Single Line Question Option : No Option Orientation : Vertical

Correct Marks : 1 Wrong Marks : 0.25

\_\_\_\_\_ सरकार के कुल व्यय और उसकी उधार को छोड़कर कुल प्राप्तियों के बीच का अंतर है।

Options :

1. ✓ राजकोषीय घाटा
2. ✗ पूंजीगत व्यय
3. ✗ पूंजीगत प्राप्तियाँ
4. ✗ विदेश मुद्रा भंडार

Question Number : 46 Question Id : 5459275702 Question Type : MCQ Option Shuffling : Yes Display Question Number : Yes  
Single Line Question Option : No Option Orientation : Vertical

Correct Marks : 1 Wrong Marks : 0.25

\_\_\_\_\_ has been introduced by RBI for bank customers for resolution of complaints relating to certain services rendered by banks.

Options :

1. ✗ Banking Redressal Scheme
2. ✗ Complaints Scheme
3. ✓ Banking Ombudsman Scheme
4. ✗ Grievance Redressal Banking Scheme

Question Number : 46 Question Id : 5459275702 Question Type : MCQ Option Shuffling : Yes Display Question Number : Yes  
Single Line Question Option : No Option Orientation : Vertical

Correct Marks : 1 Wrong Marks : 0.25

\_\_\_\_\_ बैंक द्वारा प्रदान की जाने वाली कुछ सेवाओं से संबंधित शिकायतों के समाधान के लिए आरबीआई द्वारा बैंक ग्राहकों के लिए शुरू की गयी है।

Options :

1. ✗ बैंकिंग निवारण योजना
2. ✗ शिकायत योजना
3. ✓ बैंकिंग लोकपाल योजना
4. ✗ शिकायत निवारण बैंकिंग योजना

Question Number : 47 Question Id : 5459275703 Question Type : MCQ Option Shuffling : Yes Display Question Number : Yes  
Single Line Question Option : No Option Orientation : Vertical

Correct Marks : 1 Wrong Marks : 0.25

निम्नलिखित में से क्या पूंजीगत व्यय है?

- I. शेयरों में निवेश
- II. भूमि का अधिग्रहण
- III. मशीनरी का अधिग्रहण

Options :

1. ✗ I तथा II
2. ✗ II तथा III

3. ✖ I तथा III
4. ✔ I, II तथा III

Question Number : 47 Question Id : 5459275703 Question Type : MCQ Option Shuffling : Yes Display Question Number : Yes  
Single Line Question Option : No Option Orientation : Vertical

Correct Marks : 1 Wrong Marks : 0.25

Which of the following is a Capital Expenditure?

- I. Investment in shares
- II. Acquisition of land
- III. Acquisition of machinery

Options :

1. ✖ I and II
2. ✖ II and III
3. ✖ I and III
4. ✔ I, II and III

Question Number : 48 Question Id : 5459275704 Question Type : MCQ Option Shuffling : Yes Display Question Number : Yes  
Single Line Question Option : No Option Orientation : Vertical

Correct Marks : 1 Wrong Marks : 0.25

Suppose test tube 'P' contains acid and test tube 'Q' contains 'base'. When the contents of both the test tubes are mixed it results in which of the following reaction?

Options :

1. ✖ Acidification
2. ✔ Neutralisation
3. ✖ Basification
4. ✖ No reaction

Question Number : 48 Question Id : 5459275704 Question Type : MCQ Option Shuffling : Yes Display Question Number : Yes  
Single Line Question Option : No Option Orientation : Vertical

Correct Marks : 1 Wrong Marks : 0.25

मान लीजिए कि परीक्षण नली 'P' में अम्ल है और परीक्षण नली 'Q' में क्षारक है। जब दोनों परीक्षण नलियों की सामग्री को मिलाया जाता है, तो यह निम्नलिखित में से कौन सी अभिक्रिया होती है?

Options :

1. ✖ अम्लीकरण
2. ✔ उदासीनीकरण
3. ✖ क्षारकीयन
4. ✖ कोई अभिक्रिया नहीं

Question Number : 49 Question Id : 5459275705 Question Type : MCQ Option Shuffling : Yes Display Question Number : Yes  
Single Line Question Option : No Option Orientation : Vertical

Correct Marks : 1 Wrong Marks : 0.25

बैंगन का एक ताजा टुकड़ा काटें और कुछ समय के लिए रख दें। उसमें कुछ परिवर्तन दिखेगा। इस परिवर्तन को \_\_\_\_\_ के रूप में जाना जाता है।

Options :

1. ✔ रासायनिक परिवर्तन
2. ✖ भौतिक परिवर्तन
3. ✖ जैविक परिवर्तन
4. ✖ कोई परिवर्तन नहीं

Question Number : 49 Question Id : 5459275705 Question Type : MCQ Option Shuffling : Yes Display Question Number : Yes  
Single Line Question Option : No Option Orientation : Vertical

Correct Marks : 1 Wrong Marks : 0.25

Cut a fresh slice of brinjal and keep it away for some time. It will show some change. This change is known as

Options :

1. ✓ Chemical change
2. ✗ Physical change
3. ✗ Biological change
4. ✗ No change

Question Number : 50 Question Id : 5459275706 Question Type : MCQ Option Shuffling : Yes Display Question Number : Yes  
Single Line Question Option : No Option Orientation : Vertical

Correct Marks : 1 Wrong Marks : 0.25

When a magnesium ribbon is burnt in candle flame, it burns with \_\_\_\_\_ light.

Options :

1. ✗ brilliant yellow
2. ✗ brilliant orange
3. ✓ brilliant white
4. ✗ brilliant blue

Question Number : 50 Question Id : 5459275706 Question Type : MCQ Option Shuffling : Yes Display Question Number : Yes  
Single Line Question Option : No Option Orientation : Vertical

Correct Marks : 1 Wrong Marks : 0.25

जब एक मैग्नीशियम रिबन मोमबत्ती की लौ से जलाया जाता है, तो यह \_\_\_\_\_ प्रकाश के साथ जलता है।

Options :

1. ✗ चमकदार (brilliant) पीला
2. ✗ चमकदार (brilliant) नारंगी
3. ✓ चमकदार (brilliant) सफेद
4. ✗ चमकदार (brilliant) नीला

Question Number : 51 Question Id : 5459275707 Question Type : MCQ Option Shuffling : Yes Display Question Number : Yes  
Single Line Question Option : No Option Orientation : Vertical

Correct Marks : 1 Wrong Marks : 0.25

What is the colour of the Iron sulphate solution which forms by the addition of iron in copper sulphate?

Options :

1. ✓ Green
2. ✗ Brown
3. ✗ Blue
4. ✗ Orange

Question Number : 51 Question Id : 5459275707 Question Type : MCQ Option Shuffling : Yes Display Question Number : Yes  
Single Line Question Option : No Option Orientation : Vertical

Correct Marks : 1 Wrong Marks : 0.25

कॉपर सल्फेट में लोहे को मिलाने से बनने वाले लोह सल्फेट विलयन का रंग क्या होता है?

Options :

1. ✓ हरा
2. ✗ भूरा
3. ✗ नीला

4. ✖ नारंगी

Question Number : 52 Question Id : 5459275708 Question Type : MCQ Option Shuffling : Yes Display Question Number : Yes  
Single Line Question Option : No Option Orientation : Vertical

Correct Marks : 1 Wrong Marks : 0.25

The first type of engine developed in the 19th century was \_\_\_\_\_ based.

Options :

1. ✖ Nuclear
2. ✔ Steam
3. ✖ Petrol
4. ✖ Diesel

Question Number : 52 Question Id : 5459275708 Question Type : MCQ Option Shuffling : Yes Display Question Number : Yes  
Single Line Question Option : No Option Orientation : Vertical

Correct Marks : 1 Wrong Marks : 0.25

19 वीं शताब्दी में विकसित इंजन का पहला प्रकार \_\_\_\_\_ पर आधारित था

Options :

1. ✖ परमाणु
2. ✔ भाप
3. ✖ पेट्रोल
4. ✖ डीजल

Question Number : 53 Question Id : 5459275709 Question Type : MCQ Option Shuffling : Yes Display Question Number : Yes  
Single Line Question Option : No Option Orientation : Vertical

Correct Marks : 1 Wrong Marks : 0.25

Which of the following is NOT an example of rectilinear motion?

Options :

1. ✔ The hands of a wall clock
2. ✖ A car running on a straight road
3. ✖ A man walking on a straight footpath
4. ✖ March - past of soldiers

Question Number : 53 Question Id : 5459275709 Question Type : MCQ Option Shuffling : Yes Display Question Number : Yes  
Single Line Question Option : No Option Orientation : Vertical

Correct Marks : 1 Wrong Marks : 0.25

निम्नलिखित में से कया ऋजुरेखीय गति का उदाहरण नहीं है?

Options :

1. ✔ घड़ी की सुईयाँ
2. ✖ एक सीधी सड़क पर चलती हुई गाड़ी
3. ✖ एक सीधे पथ पर चलता हुआ व्यक्ति
4. ✖ सैनिकों की मार्च पास्ट

Question Number : 54 Question Id : 5459275710 Question Type : MCQ Option Shuffling : Yes Display Question Number : Yes  
Single Line Question Option : No Option Orientation : Vertical

Correct Marks : 1 Wrong Marks : 0.25

Which metal should be added to copper sulphate solution to observe a change of blue colour into green?

Options :

1. ✔ Iron
2. ✖ Aluminium



3. ✘ Gold
4. ✘ Zinc

Question Number : 54 Question Id : 5459275710 Question Type : MCQ Option Shuffling : Yes Display Question Number : Yes  
Single Line Question Option : No Option Orientation : Vertical

Correct Marks : 1 Wrong Marks : 0.25

नीले रंग के हरे रंग में परिवर्तन को देखने हेतु कॉपर सल्फेट विलयन में किस धातु को मिलाना पड़ेगा?

Options :

1. ✔ लोहा
2. ✘ ऐलुमिनियम
3. ✘ सोना
4. ✘ जस्ता

Question Number : 55 Question Id : 5459275711 Question Type : MCQ Option Shuffling : Yes Display Question Number : Yes  
Single Line Question Option : No Option Orientation : Vertical

Correct Marks : 1 Wrong Marks : 0.25

Gustatory Receptors in human beings detect \_\_\_\_\_.

Options :

1. ✘ temperature
2. ✘ smell
3. ✔ taste
4. ✘ pressure

Question Number : 55 Question Id : 5459275711 Question Type : MCQ Option Shuffling : Yes Display Question Number : Yes  
Single Line Question Option : No Option Orientation : Vertical

Correct Marks : 1 Wrong Marks : 0.25

मानव में रस संवेदीग्राही \_\_\_\_\_ का पता लगाते हैं।

Options :

1. ✘ तापमान
2. ✘ गंध
3. ✔ स्वाद
4. ✘ दाब

Question Number : 56 Question Id : 5459275712 Question Type : MCQ Option Shuffling : Yes Display Question Number : Yes  
Single Line Question Option : No Option Orientation : Vertical

Correct Marks : 1 Wrong Marks : 0.25

Which of the following factors affect the temperature of ocean water?

- I. Latitude
- II. Ocean current
- III. Prevailing wind

Options :

1. ✘ I and II
2. ✘ II and III
3. ✘ I and III
4. ✔ I, II and III

Question Number : 56 Question Id : 5459275712 Question Type : MCQ Option Shuffling : Yes Display Question Number : Yes  
Single Line Question Option : No Option Orientation : Vertical

Correct Marks : 1 Wrong Marks : 0.25

निम्नलिखित में से कौन सा कारक महासागर के पानी के तापमान को प्रभावित करता है?

- I. अक्षांश
- II. महासागर धारा
- III. प्रचलित वायु

Options :

- 1. ✘ I तथा II
- 2. ✘ II तथा III
- 3. ✘ I तथा III
- 4. ✔ I, II तथा III

Question Number : 57 Question Id : 5459275713 Question Type : MCQ Option Shuffling : Yes Display Question Number : Yes  
Single Line Question Option : No Option Orientation : Vertical

Correct Marks : 1 Wrong Marks : 0.25

\_\_\_\_\_ is the process of removal of silica from the soil.

Options :

- 1. ✘ Unsilication
- 2. ✔ Desilication
- 3. ✘ Resilication
- 4. ✘ Silication

Question Number : 57 Question Id : 5459275713 Question Type : MCQ Option Shuffling : Yes Display Question Number : Yes  
Single Line Question Option : No Option Orientation : Vertical

Correct Marks : 1 Wrong Marks : 0.25

\_\_\_\_\_ मिट्टी से सिलिका को हटाने की प्रक्रिया है।

Options :

- 1. ✘ अनसिलिकेशन
- 2. ✔ डिसिलिकेशन
- 3. ✘ रिसिलिकेशन
- 4. ✘ सिलिकेशन

Question Number : 58 Question Id : 5459275714 Question Type : MCQ Option Shuffling : Yes Display Question Number : Yes  
Single Line Question Option : No Option Orientation : Vertical

Correct Marks : 1 Wrong Marks : 0.25

Which of the following landforms can be seen in Himalayas?

- I. Gorges
- II. V-shaped valleys
- III. Waterfalls

Options :

- 1. ✘ I and II
- 2. ✘ II and III
- 3. ✘ I and III
- 4. ✔ I, II and III

Question Number : 58 Question Id : 5459275714 Question Type : MCQ Option Shuffling : Yes Display Question Number : Yes  
Single Line Question Option : No Option Orientation : Vertical

Correct Marks : 1 Wrong Marks : 0.25

निम्नलिखित में से कौन सा/से भूभाग हिमालय में पाए जाते हैं/हैं?

- I. महाखड्ड
- II. V-आकार की घाटियां
- III. झरने

Options :

1. ✘ I तथा II
2. ✘ II तथा III
3. ✘ I तथा III
4. ✔ I, II तथा III

Question Number : 59 Question Id : 5459275715 Question Type : MCQ Option Shuffling : Yes Display Question Number : Yes  
Single Line Question Option : No Option Orientation : Vertical

Correct Marks : 1 Wrong Marks : 0.25

The Barak river is in which of the following state?

Options :

1. ✔ Manipur
2. ✘ Punjab
3. ✘ Gujarat
4. ✘ Tamil Nadu

Question Number : 59 Question Id : 5459275715 Question Type : MCQ Option Shuffling : Yes Display Question Number : Yes  
Single Line Question Option : No Option Orientation : Vertical

Correct Marks : 1 Wrong Marks : 0.25

बराक नदी निम्नलिखित में से किस राज्य में है?

Options :

1. ✔ मणिपुर
2. ✘ पंजाब
3. ✘ गुजरात
4. ✘ तमिलनाडु

Question Number : 60 Question Id : 5459275716 Question Type : MCQ Option Shuffling : Yes Display Question Number : Yes  
Single Line Question Option : No Option Orientation : Vertical

Correct Marks : 1 Wrong Marks : 0.25

Which of the following factor leads to soil erosion?

- I. Wind
- II. Water
- III. Deforestation

Options :

1. ✘ I and II
2. ✘ II and III
3. ✘ I and III
4. ✔ I, II and III

Question Number : 60 Question Id : 5459275716 Question Type : MCQ Option Shuffling : Yes Display Question Number : Yes  
Single Line Question Option : No Option Orientation : Vertical

Correct Marks : 1 Wrong Marks : 0.25

निम्नलिखित में से किस के कारण मिट्टी का कटाव होता है?

- I. वायु
- II. जल
- III. वनोन्मूलन

Options :

1. ✘ I तथा II
2. ✘ II तथा III
3. ✘ I तथा III
4. ✔ I, II तथा III

#### General Awareness2

Group Number :	4
Group Id :	545927284
Group Maximum Duration :	0
Group Minimum Duration :	0
Revisit allowed for view? :	No
Revisit allowed for edit? :	No
Break time:	0
Group Marks:	20
Revisit allowed for group Instructions? :	Yes
Maximum Instruction Time:	0
Minimum Instruction Time:	0

#### General Awareness2

Section Id :	545927284
Section Number :	1
Section type :	Online
Mandatory or Optional:	Mandatory
Number of Questions:	20
Number of Questions to be attempted:	20
Section Marks:	20
Display Number Panel:	Yes
Group All Questions:	No

Sub-Section Number:	1
Sub-Section Id:	545927340
Question Shuffling Allowed :	Yes

Question Number : 61 Question Id : 5459275717 Question Type : MCQ Option Shuffling : Yes Display Question Number : Yes  
Single Line Question Option : No Option Orientation : Vertical

Correct Marks : 1 Wrong Marks : 0.25

Arid soil is found in which of the following Indian state?

Options :

1. ✘ Jammu and Kashmir
2. ✔ Rajasthan
3. ✘ Punjab

4. ✖ Mizoram

Question Number : 61 Question Id : 5459275717 Question Type : MCQ Option Shuffling : Yes Display Question Number : Yes  
Single Line Question Option : No Option Orientation : Vertical

Correct Marks : 1 Wrong Marks : 0.25

शुष्क मृदा निम्नलिखित में से किस भारतीय राज्य में पाई जाती है?

Options :

1. ✖ जम्मू और कश्मीर
2. ✔ राजस्थान
3. ✖ पंजाब
4. ✖ मिजोरम

Question Number : 62 Question Id : 5459275718 Question Type : MCQ Option Shuffling : Yes Display Question Number : Yes  
Single Line Question Option : No Option Orientation : Vertical

Correct Marks : 1 Wrong Marks : 0.25

Who formed Depressed Classes Association in 1930?

Options :

1. ✖ Mahatma Gandhi
2. ✖ J. L. Nehru
3. ✔ Dr. B. R. Ambedkar
4. ✖ E. V. Ramaswamy Naicker

Question Number : 62 Question Id : 5459275718 Question Type : MCQ Option Shuffling : Yes Display Question Number : Yes  
Single Line Question Option : No Option Orientation : Vertical

Correct Marks : 1 Wrong Marks : 0.25

1930 में डिप्रेसड क्लासेस एसोसिएशन का गठन किसने किया था?

Options :

1. ✖ महात्मा गांधी
2. ✖ जे. एल. नेहरू
3. ✔ डॉ. बी. आर. अंबेडकर
4. ✖ ई. वी. रामास्वामी नाइकर

Question Number : 63 Question Id : 5459275719 Question Type : MCQ Option Shuffling : Yes Display Question Number : Yes  
Single Line Question Option : No Option Orientation : Vertical

Correct Marks : 1 Wrong Marks : 0.25

Who won the Second Battle of Tarain?

Options :

1. ✖ Muhammad Shah
2. ✖ Mohammad Bin Qasim
3. ✖ Nasiruddin Mahmud
4. ✔ Muhammad Ghori

Question Number : 63 Question Id : 5459275719 Question Type : MCQ Option Shuffling : Yes Display Question Number : Yes  
Single Line Question Option : No Option Orientation : Vertical

Correct Marks : 1 Wrong Marks : 0.25

तराइन का दूसरा युद्ध किसने जीता था?

Options :

1. ✖ मुहम्मद शाह
2. ✖ मुहम्मद बिन कासिम

3. ✘ नसीरुद्दीन महमूद
4. ✔ मोहम्मद गोरी

Question Number : 64 Question Id : 5459275720 Question Type : MCQ Option Shuffling : Yes Display Question Number : Yes  
Single Line Question Option : No Option Orientation : Vertical

Correct Marks : 1 Wrong Marks : 0.25

Raziya Sultan was daughter of which ruler?

Options :

1. ✔ Iltutmish
2. ✘ Nasiruddin Mahmud
3. ✘ Qutbuddin Aibak
4. ✘ Mohammad Azam Shah

Question Number : 64 Question Id : 5459275720 Question Type : MCQ Option Shuffling : Yes Display Question Number : Yes  
Single Line Question Option : No Option Orientation : Vertical

Correct Marks : 1 Wrong Marks : 0.25

रज़िया सुल्तान किस शासक की बेटी थी?

Options :

1. ✔ इल्तुतमिश
2. ✘ नसीरुद्दीन महमूद
3. ✘ कुतुबुद्दीन ऐबक
4. ✘ मोहम्मद आजमशाह

Question Number : 65 Question Id : 5459275721 Question Type : MCQ Option Shuffling : Yes Display Question Number : Yes  
Single Line Question Option : No Option Orientation : Vertical

Correct Marks : 1 Wrong Marks : 0.25

Which cash crops were exported from India by British during early 19th Century?

- I. Indigo
- II. Opium
- III. Silk

Options :

1. ✘ I and II
2. ✘ II and III
3. ✘ I and III
4. ✔ I, II and III

Question Number : 65 Question Id : 5459275721 Question Type : MCQ Option Shuffling : Yes Display Question Number : Yes  
Single Line Question Option : No Option Orientation : Vertical

Correct Marks : 1 Wrong Marks : 0.25

ब्रिटिशों ने भारत से 19 वीं शताब्दी की शुरुआत में किन नकदी फसलों का निर्यात किया था?

- I. नील
- II. अफीम
- III. रेशम

Options :

1. ✘ I तथा II
2. ✘ II तथा III
3. ✘ I तथा III
4. ✔ I, II तथा III

Question Number : 66 Question Id : 5459275722 Question Type : MCQ Option Shuffling : Yes Display Question Number : Yes  
Single Line Question Option : No Option Orientation : Vertical

Correct Marks : 1 Wrong Marks : 0.25

Calcutta Madrasa was founded by?

Options :

1. ✓ Warren Hastings
2. ✗ William Bentinck
3. ✗ William Jones
4. ✗ Jonathan Duncan

Question Number : 66 Question Id : 5459275722 Question Type : MCQ Option Shuffling : Yes Display Question Number : Yes  
Single Line Question Option : No Option Orientation : Vertical

Correct Marks : 1 Wrong Marks : 0.25

कलकत्ता मद्रसा की स्थापना किसने की थी?

Options :

1. ✓ वारेन हेस्टिंग्स
2. ✗ विलियम बैन्टिक
3. ✗ विलियम जोन्स
4. ✗ जोनाथन डंकन

Question Number : 67 Question Id : 5459275723 Question Type : MCQ Option Shuffling : Yes Display Question Number : Yes  
Single Line Question Option : No Option Orientation : Vertical

Correct Marks : 1 Wrong Marks : 0.25

Hunter Commission was set up in which year to review the field of education?

Options :

1. ✗ 1880
2. ✗ 1901
3. ✓ 1882
4. ✗ 1900

Question Number : 67 Question Id : 5459275723 Question Type : MCQ Option Shuffling : Yes Display Question Number : Yes  
Single Line Question Option : No Option Orientation : Vertical

Correct Marks : 1 Wrong Marks : 0.25

शिक्षा के क्षेत्र की समीक्षा करने के लिए हंटर आयोग की स्थापना किस वर्ष में की गई थी?

Options :

1. ✗ 1880
2. ✗ 1901
3. ✓ 1882
4. ✗ 1900

Question Number : 68 Question Id : 5459275724 Question Type : MCQ Option Shuffling : Yes Display Question Number : Yes  
Single Line Question Option : No Option Orientation : Vertical

Correct Marks : 1 Wrong Marks : 0.25

The book "Mann ki Baat" is associated with \_\_\_\_\_.

Options :

1. ✗ Sushma Swaraj
2. ✗ Arun Jaitley
3. ✓ Narendra Modi

4. ✖ Rajesh Jain

Question Number : 68 Question Id : 5459275724 Question Type : MCQ Option Shuffling : Yes Display Question Number : Yes  
Single Line Question Option : No Option Orientation : Vertical

Correct Marks : 1 Wrong Marks : 0.25

"मन की बात" पुस्तक \_\_\_\_\_ से जुड़ी है।

Options :

1. ✖ सुष्मा स्वराज
2. ✖ अरुण जेटली
3. ✔ नरेंद्र मोदी
4. ✖ राजेश जैन

Question Number : 69 Question Id : 5459275725 Question Type : MCQ Option Shuffling : Yes Display Question Number : Yes  
Single Line Question Option : No Option Orientation : Vertical

Correct Marks : 1 Wrong Marks : 0.25

Who has been conferred the 19th Lal Bahadur Shastri National Award?

Options :

1. ✖ Bindeshwar Pathak
2. ✔ Fali S. Nariman
3. ✖ Pranoy Roy
4. ✖ Ashok Desai

Question Number : 69 Question Id : 5459275725 Question Type : MCQ Option Shuffling : Yes Display Question Number : Yes  
Single Line Question Option : No Option Orientation : Vertical

Correct Marks : 1 Wrong Marks : 0.25

19 वां लाल बहादुर शास्त्री राष्ट्रीय पुरस्कार से किसे सम्मानित किया गया है?

Options :

1. ✖ बिदेश्वर पाठक
2. ✔ फली एस. नरीमन
3. ✖ प्रणॉय रॉय
4. ✖ अशोक देसाई

Question Number : 70 Question Id : 5459275726 Question Type : MCQ Option Shuffling : Yes Display Question Number : Yes  
Single Line Question Option : No Option Orientation : Vertical

Correct Marks : 1 Wrong Marks : 0.25

Which of the following country has launched the nuclear-powered icebreaker name 'Ural' in 2019?

Options :

1. ✖ Japan
2. ✖ Germany
3. ✔ Russia
4. ✖ India

Question Number : 70 Question Id : 5459275726 Question Type : MCQ Option Shuffling : Yes Display Question Number : Yes  
Single Line Question Option : No Option Orientation : Vertical

Correct Marks : 1 Wrong Marks : 0.25

निम्नलिखित में से किस देश ने 2019 में 'उरल' नामक परमाणु-संचालित आइसब्रेकर लॉन्च किया है?

Options :

1. ✖ जापान
2. ✖ जर्मनी



3. ✓ रूस
4. ✗ भारत

Question Number : 71 Question Id : 5459275727 Question Type : MCQ Option Shuffling : Yes Display Question Number : Yes  
Single Line Question Option : No Option Orientation : Vertical

Correct Marks : 1 Wrong Marks : 0.25

The book titled "281 and Beyond" is an autobiography of \_\_\_\_\_.

Options :

1. ✗ MS Dhoni
2. ✓ VVS Laxman
3. ✗ Sachin Tendulkar
4. ✗ Shahid Afridi

Question Number : 71 Question Id : 5459275727 Question Type : MCQ Option Shuffling : Yes Display Question Number : Yes  
Single Line Question Option : No Option Orientation : Vertical

Correct Marks : 1 Wrong Marks : 0.25

"281 एंड बियॉन्ड" नामक पुस्तक \_\_\_\_\_ की आत्मकथा है।

Options :

1. ✗ एमएस धोनी
2. ✓ वीवीएस लक्ष्मण
3. ✗ सचिन तेंडुलकर
4. ✗ शाहिद अफरीदी

Question Number : 72 Question Id : 5459275728 Question Type : MCQ Option Shuffling : Yes Display Question Number : Yes  
Single Line Question Option : No Option Orientation : Vertical

Correct Marks : 1 Wrong Marks : 0.25

Which of the following is NOT a member of SAARC?

Options :

1. ✗ Afghanistan
2. ✗ Sri Lanka
3. ✗ Maldives
4. ✓ Australia

Question Number : 72 Question Id : 5459275728 Question Type : MCQ Option Shuffling : Yes Display Question Number : Yes  
Single Line Question Option : No Option Orientation : Vertical

Correct Marks : 1 Wrong Marks : 0.25

निम्नलिखित में से कौन सार्क का सदस्य नहीं है?

Options :

1. ✗ अफ़ग़ानिस्तान
2. ✗ श्रीलंका
3. ✗ मालदीव
4. ✓ ऑस्ट्रेलिया

Question Number : 73 Question Id : 5459275729 Question Type : MCQ Option Shuffling : Yes Display Question Number : Yes  
Single Line Question Option : No Option Orientation : Vertical

Correct Marks : 1 Wrong Marks : 0.25

The international Yoga day is celebrated on \_\_\_\_\_ every year.

Options :

1. ✗ 23 June

2. ✘ 24 June

3. ✔ 21 June

4. ✘ 19 June

Question Number : 73 Question Id : 5459275729 Question Type : MCQ Option Shuffling : Yes Display Question Number : Yes  
Single Line Question Option : No Option Orientation : Vertical

Correct Marks : 1 Wrong Marks : 0.25

अंतर्राष्ट्रीय योग दिवस हर साल \_\_\_\_\_ को मनाया जाता है।

Options :

1. ✘ 23 जून

2. ✘ 24 जून

3. ✔ 21 जून

4. ✘ 19 जून

Question Number : 74 Question Id : 5459275730 Question Type : MCQ Option Shuffling : Yes Display Question Number : Yes  
Single Line Question Option : No Option Orientation : Vertical

Correct Marks : 1 Wrong Marks : 0.25

Article 18 of the Indian Constitution deals with which of the following?

Options :

1. ✘ Right to freedom

2. ✔ Abolition of titles

3. ✘ Right to occupation

4. ✘ Freedom of right to speech

Question Number : 74 Question Id : 5459275730 Question Type : MCQ Option Shuffling : Yes Display Question Number : Yes  
Single Line Question Option : No Option Orientation : Vertical

Correct Marks : 1 Wrong Marks : 0.25

भारतीय संविधान का अनुच्छेद 18 निम्नलिखित में से किससे संबंधित है?

Options :

1. ✘ स्वतंत्रता का अधिकार

2. ✔ उपाधियों का अंत

3. ✘ कोई व्यापार करने का अधिकार

4. ✘ वाक-स्वतंत्रता का अधिकार

Question Number : 75 Question Id : 5459275731 Question Type : MCQ Option Shuffling : Yes Display Question Number : Yes  
Single Line Question Option : No Option Orientation : Vertical

Correct Marks : 1 Wrong Marks : 0.25

Vice President of India holds office for a term of how many years?

Options :

1. ✘ 7 years

2. ✘ 2 years

3. ✘ 3 years

4. ✔ 5 years

Question Number : 75 Question Id : 5459275731 Question Type : MCQ Option Shuffling : Yes Display Question Number : Yes  
Single Line Question Option : No Option Orientation : Vertical

Correct Marks : 1 Wrong Marks : 0.25

भारत के उपराष्ट्रपति का कार्यकाल कितने वर्षों का होता है?

Options :

- ✘ 7 वर्ष
- ✘ 2 वर्ष
- ✘ 3 वर्ष
- ✔ 5 वर्ष

Question Number : 76 Question Id : 5459275732 Question Type : MCQ Option Shuffling : Yes Display Question Number : Yes  
Single Line Question Option : No Option Orientation : Vertical

Correct Marks : 1 Wrong Marks : 0.25

Who is the ex officio chairman of the council of states?

Options :

- ✘ President
- ✔ Vice President
- ✘ Speaker
- ✘ Prime Minister

Question Number : 76 Question Id : 5459275732 Question Type : MCQ Option Shuffling : Yes Display Question Number : Yes  
Single Line Question Option : No Option Orientation : Vertical

Correct Marks : 1 Wrong Marks : 0.25

राज्य सभा के पदेन सभापति कौन है?

Options :

- ✘ राष्ट्रपति
- ✔ उप-राष्ट्रपति
- ✘ अध्यक्ष
- ✘ प्रधानमंत्री

Question Number : 77 Question Id : 5459275733 Question Type : MCQ Option Shuffling : Yes Display Question Number : Yes  
Single Line Question Option : No Option Orientation : Vertical

Correct Marks : 1 Wrong Marks : 0.25

The Second Amendment to the constitution of India was made in which year?

Options :

- ✘ 1947
- ✘ 1950
- ✘ 1954
- ✔ 1952

Question Number : 77 Question Id : 5459275733 Question Type : MCQ Option Shuffling : Yes Display Question Number : Yes  
Single Line Question Option : No Option Orientation : Vertical

Correct Marks : 1 Wrong Marks : 0.25

भारत के संविधान में दूसरा संशोधन किस वर्ष में किया गया था?

Options :

- ✘ 1947
- ✘ 1950
- ✘ 1954
- ✔ 1952

Question Number : 78 Question Id : 5459275734 Question Type : MCQ Option Shuffling : Yes Display Question Number : Yes  
Single Line Question Option : No Option Orientation : Vertical

Correct Marks : 1 Wrong Marks : 0.25

Who was awarded "Man of the Series" in ICC Men's Cricket World Cup 2019?

Options :

1. ✘ Joe Root
2. ✘ Ben Stokes
3. ✔ Kane Williamson
4. ✘ Rohit Sharma

Question Number : 78 Question Id : 5459275734 Question Type : MCQ Option Shuffling : Yes Display Question Number : Yes  
Single Line Question Option : No Option Orientation : Vertical

Correct Marks : 1 Wrong Marks : 0.25

आई.सी.सी. पुरुष क्रिकेट वर्ल्ड कप 2019 में "मैन ऑफ द सीरीज" का अवार्ड किसे दिया गया है?

Options :

1. ✘ जो रूट
2. ✘ बेन स्टोक्स
3. ✔ केन विलियमसन
4. ✘ रोहित शर्मा

Question Number : 79 Question Id : 5459275735 Question Type : MCQ Option Shuffling : Yes Display Question Number : Yes  
Single Line Question Option : No Option Orientation : Vertical

Correct Marks : 1 Wrong Marks : 0.25

Which of the following pair of player - game is NOT correct?

Options :

1. ✘ P.V. Sindhu- Badminton
2. ✘ Babita Kumari- Wrestling
3. ✔ Gaurav Solanki - Football
4. ✘ Manpreet Singh - Hockey

Question Number : 79 Question Id : 5459275735 Question Type : MCQ Option Shuffling : Yes Display Question Number : Yes  
Single Line Question Option : No Option Orientation : Vertical

Correct Marks : 1 Wrong Marks : 0.25

निम्नलिखित में से कौन सा खिलाड़ी- खेल का युग्म सही नहीं है?

Options :

1. ✘ पी.वी. सिंधु - बैडमिंटन
2. ✘ बबीता कुमारी - कुश्ती
3. ✔ गौरव सोलंकी - फुटबॉल
4. ✘ मनप्रीत सिंह - हॉकी

Question Number : 80 Question Id : 5459275736 Question Type : MCQ Option Shuffling : Yes Display Question Number : Yes  
Single Line Question Option : No Option Orientation : Vertical

Correct Marks : 1 Wrong Marks : 0.25

Which of the following team was NOT a part of Cricket World Cup 2019?

Options :

1. ✘ Australia
2. ✘ Afghanistan
3. ✔ Zimbabwe
4. ✘ Sri Lanka

Question Number : 80 Question Id : 5459275736 Question Type : MCQ Option Shuffling : Yes Display Question Number : Yes  
Single Line Question Option : No Option Orientation : Vertical

Correct Marks : 1 Wrong Marks : 0.25

निम्नलिखित में से कौन सी टीम आई.सी.सी क्रिकेट विश्व कप 2019 का हिस्सा नहीं थी?

Options :

1. ✘ ऑस्ट्रेलिया
2. ✘ अफ़ग़ानिस्तान
3. ✔ जिम्बाब्वे
4. ✘ श्रीलंका

Arithmetic Ability1

Group Number :	5
Group Id :	545927285
Group Maximum Duration :	0
Group Minimum Duration :	0
Revisit allowed for view? :	No
Revisit allowed for edit? :	No
Break time:	0
Group Marks:	20
Revisit allowed for group Instructions? :	Yes
Maximum Instruction Time:	0
Minimum Instruction Time:	0

Arithmetic Ability1

Section Id :	545927285
Section Number :	1
Section type :	Online
Mandatory or Optional:	Mandatory
Number of Questions:	20
Number of Questions to be attempted:	20
Section Marks:	20
Display Number Panel:	Yes
Group All Questions:	No

Sub-Section Number:	1
Sub-Section Id:	545927341
Question Shuffling Allowed :	Yes

Question Number : 81 Question Id : 5459275737 Question Type : MCQ Option Shuffling : Yes Display Question Number : Yes  
Single Line Question Option : No Option Orientation : Vertical

Correct Marks : 1 Wrong Marks : 0.25

If  $34X$  is divisible by 7, then what is the value of X?

Options :

1. ✘ 1
2. ✘ 2
3. ✔ 3
4. ✘ 7

Question Number : 81 Question Id : 5459275737 Question Type : MCQ Option Shuffling : Yes Display Question Number : Yes  
Single Line Question Option : No Option Orientation : Vertical

Correct Marks : 1 Wrong Marks : 0.25

यदि  $34X$ , 7 से विभाज्य है, तो X का मान क्या है?

Options :

1. ✘ 1
2. ✘ 2
3. ✔ 3
4. ✘ 7

Question Number : 82 Question Id : 5459275738 Question Type : MCQ Option Shuffling : Yes Display Question Number : Yes  
Single Line Question Option : No Option Orientation : Vertical

Correct Marks : 1 Wrong Marks : 0.25

What is the value of  $\sqrt{7.29} + \sqrt{0.81} + \sqrt{0.49}$  ?

Options :

1. ✔ 4.3
2. ✘ 3.4
3. ✘ 3.6
4. ✘ 3.9

Question Number : 82 Question Id : 5459275738 Question Type : MCQ Option Shuffling : Yes Display Question Number : Yes  
Single Line Question Option : No Option Orientation : Vertical

Correct Marks : 1 Wrong Marks : 0.25

What is the value of  $\sqrt{7.29} + \sqrt{0.81} + \sqrt{0.49}$  ?

Options :

1. ✔ 4.3
2. ✘ 3.4
3. ✘ 3.6
4. ✘ 3.9

Question Number : 83 Question Id : 5459275739 Question Type : MCQ Option Shuffling : Yes Display Question Number : Yes  
Single Line Question Option : No Option Orientation : Vertical

Correct Marks : 1 Wrong Marks : 0.25

If  $348X$  is divisible by 8, then what is the minimum value of X?

Options :

1. ✔ 0
2. ✘ 2
3. ✘ 4
4. ✘ 8

Question Number : 83 Question Id : 5459275739 Question Type : MCQ Option Shuffling : Yes Display Question Number : Yes  
Single Line Question Option : No Option Orientation : Vertical

Correct Marks : 1 Wrong Marks : 0.25

यदि  $348X$ , 8 से विभाज्य है, तो X का न्यूनतम मान क्या है?

Options :

1. ✔ 0
2. ✘ 2
3. ✘ 4

4. ✖ 8

Question Number : 84 Question Id : 5459275740 Question Type : MCQ Option Shuffling : Yes Display Question Number : Yes  
Single Line Question Option : No Option Orientation : Vertical

Correct Marks : 1 Wrong Marks : 0.25

How many numbers are there between 212 and 347 which are divisible by 7 but not by 6?

Note: For this question, discrepancy is found in question/answer. So, this question is ignored for all candidates.

Options :

1. 7
2. 8
3. 6
4. 9

Question Number : 84 Question Id : 5459275740 Question Type : MCQ Option Shuffling : Yes Display Question Number : Yes  
Single Line Question Option : No Option Orientation : Vertical

Correct Marks : 1 Wrong Marks : 0.25

212 तथा 347 के बीच ऐसी कितनी संख्याएँ हैं जो 7 से विभाज्य हैं परंतु 6 से नहीं?

Note: For this question, discrepancy is found in question/answer. So, this question is ignored for all candidates.

Options :

1. 7
2. 8
3. 6
4. 9

Question Number : 85 Question Id : 5459275741 Question Type : MCQ Option Shuffling : Yes Display Question Number : Yes  
Single Line Question Option : No Option Orientation : Vertical

Correct Marks : 1 Wrong Marks : 0.25

How many odd numbers are there between 10 and 200 which are divisible by 9?

Options :

1. ✖ 11
2. ✖ 9
3. ✔ 10
4. ✖ 8

Question Number : 85 Question Id : 5459275741 Question Type : MCQ Option Shuffling : Yes Display Question Number : Yes  
Single Line Question Option : No Option Orientation : Vertical

Correct Marks : 1 Wrong Marks : 0.25

10 तथा 200 के बीच ऐसी कितनी विषम संख्याएँ हैं जो 9 से विभाज्य हैं?

Options :

1. ✖ 11
2. ✖ 9
3. ✔ 10
4. ✖ 8

Question Number : 86 Question Id : 5459275742 Question Type : MCQ Option Shuffling : Yes Display Question Number : Yes  
Single Line Question Option : No Option Orientation : Vertical

Correct Marks : 1 Wrong Marks : 0.25

If  $A = \frac{1}{2} + \frac{1}{12} + \frac{1}{30}$  and  $B = \frac{1}{6} + \frac{1}{20} + \frac{1}{42}$ , then what is the value of  $A + B$ ?

Options :

1. ✘ 3/7
2. ✘ 4/7
3. ✘ 5/7
4. ✔ 6/7

Question Number : 86 Question Id : 5459275742 Question Type : MCQ Option Shuffling : Yes Display Question Number : Yes  
Single Line Question Option : No Option Orientation : Vertical

Correct Marks : 1 Wrong Marks : 0.25

If  $A = \frac{1}{2} + \frac{1}{12} + \frac{1}{30}$  and  $B = \frac{1}{6} + \frac{1}{20} + \frac{1}{42}$ , then what is the value of  $A + B$ ?

Options :

1. ✘ 3/7
2. ✘ 4/7
3. ✘ 5/7
4. ✔ 6/7

Question Number : 87 Question Id : 5459275743 Question Type : MCQ Option Shuffling : Yes Display Question Number : Yes  
Single Line Question Option : No Option Orientation : Vertical

Correct Marks : 1 Wrong Marks : 0.25

How many three digit numbers are there which when divided by 8, 7 and 6 leaves remainder 7, 6 and 5 respectively?

Options :

1. ✘ 7
2. ✔ 5
3. ✘ 6
4. ✘ 4

Question Number : 87 Question Id : 5459275743 Question Type : MCQ Option Shuffling : Yes Display Question Number : Yes  
Single Line Question Option : No Option Orientation : Vertical

Correct Marks : 1 Wrong Marks : 0.25

तीन अंको की ऐसी कितनी संख्याएँ हैं, जो 8, 7 तथा 6 से विभाजित करने पर शेषफल क्रमशः 7, 6 तथा 5 देती हैं?

Options :

1. ✘ 7
2. ✔ 5
3. ✘ 6
4. ✘ 4

Question Number : 88 Question Id : 5459275744 Question Type : MCQ Option Shuffling : Yes Display Question Number : Yes  
Single Line Question Option : No Option Orientation : Vertical

Correct Marks : 1 Wrong Marks : 0.25

If  $A = 7 \div 14 - 2 \times 5 + 4 \times 3$ ,  $B = 3 \div 6 + 4 \times 2 - 5$  and  $C = 8 \div 4 + 2 \times 3 + 5$ , then what is the value of  $A \div B \times C$ ?

Options :

1. ✘ 88/7



2. ✘ 90/7

3. ✔ 96/7

4. ✘ 91/9

Question Number : 88 Question Id : 5459275744 Question Type : MCQ Option Shuffling : Yes Display Question Number : Yes  
Single Line Question Option : No Option Orientation : Vertical

Correct Marks : 1 Wrong Marks : 0.25

यदि  $A = 7 \div 14 - 2 \times 5 + 4 \times 3$ ,  $B = 3 \div 6 + 4 \times 2 - 5$  तथा  $C = 8 \div 4 + 2 \times 3 + 5$  है, तो  $A \div B \times C$  का मान क्या है?

Options :

1. ✘ 88/7

2. ✘ 90/7

3. ✔ 96/7

4. ✘ 91/9

Question Number : 89 Question Id : 5459275745 Question Type : MCQ Option Shuffling : Yes Display Question Number : Yes  
Single Line Question Option : No Option Orientation : Vertical

Correct Marks : 1 Wrong Marks : 0.25

What is the value of  $\sqrt{10201} + \sqrt{102.01} + \sqrt{1.0201} + \sqrt{0.010201}$  ?

Options :

1. ✔ 112.211

2. ✘ 111.112

3. ✘ 121.121

4. ✘ 121.111

Question Number : 89 Question Id : 5459275745 Question Type : MCQ Option Shuffling : Yes Display Question Number : Yes  
Single Line Question Option : No Option Orientation : Vertical

Correct Marks : 1 Wrong Marks : 0.25

What is the value of  $\sqrt{10201} + \sqrt{102.01} + \sqrt{1.0201} + \sqrt{0.010201}$  ?

Options :

1. ✔ 112.211

2. ✘ 111.112

3. ✘ 121.121

4. ✘ 121.111

Question Number : 90 Question Id : 5459275746 Question Type : MCQ Option Shuffling : Yes Display Question Number : Yes  
Single Line Question Option : No Option Orientation : Vertical

Correct Marks : 1 Wrong Marks : 0.25

Which is the smallest fraction among  $5/7$ ,  $8/11$ ,  $4/9$  and  $11/3$ .

Options :

1. ✔ 4/9

2. ✘ 5/7

3. ✘ 8/11

4. ✘ 11/3

Question Number : 90 Question Id : 5459275746 Question Type : MCQ Option Shuffling : Yes Display Question Number : Yes  
Single Line Question Option : No Option Orientation : Vertical

Correct Marks : 1 Wrong Marks : 0.25

5/7, 8/11, 4/9 तथा 11/3 में से सबसे छोटा भिन्न कौन सा है?

Options :

- ✓ 4/9
- ✗ 5/7
- ✗ 8/11
- ✗ 11/3

Question Number : 91 Question Id : 5459275747 Question Type : MCQ Option Shuffling : Yes Display Question Number : Yes  
Single Line Question Option : No Option Orientation : Vertical

Correct Marks : 1 Wrong Marks : 0.25

Average of 34, 72, 45, 79, 42 and N is 49. What is the value of N?

Options :

- ✗ 32
- ✓ 22
- ✗ 26
- ✗ 20

Question Number : 91 Question Id : 5459275747 Question Type : MCQ Option Shuffling : Yes Display Question Number : Yes  
Single Line Question Option : No Option Orientation : Vertical

Correct Marks : 1 Wrong Marks : 0.25

34, 72, 45, 79, 42 तथा N का औसत 49 है। N का मान क्या है?

Options :

- ✗ 32
- ✓ 22
- ✗ 26
- ✗ 20

Question Number : 92 Question Id : 5459275748 Question Type : MCQ Option Shuffling : Yes Display Question Number : Yes  
Single Line Question Option : No Option Orientation : Vertical

Correct Marks : 1 Wrong Marks : 0.25

If Aman marks the price of his articles 70% more than their cost price and allows a discount of 40%, then what is his gain percent?

Options :

- ✗ 12 percent
- ✗ 4 percent
- ✓ 2 percent
- ✗ 8 percent

Question Number : 92 Question Id : 5459275748 Question Type : MCQ Option Shuffling : Yes Display Question Number : Yes  
Single Line Question Option : No Option Orientation : Vertical

Correct Marks : 1 Wrong Marks : 0.25

यदि अमन अपनी वस्तुओं के मूल्य को उनके क्रय मूल्य से 70% अधिक अंकित करता है तथा 40% की छूट देता है, तो उसका लाभ प्रतिशत क्या है?

Options :

- ✗ 12 प्रतिशत
- ✗ 4 प्रतिशत
- ✓ 2 प्रतिशत
- ✗ 8 प्रतिशत

Question Number : 93 Question Id : 5459275749 Question Type : MCQ Option Shuffling : Yes Display Question Number : Yes  
Single Line Question Option : No Option Orientation : Vertical

Correct Marks : 1 Wrong Marks : 0.25

Average weight of a group of 12 fruits is 20 kg. Average weight of a group of 18 fruits is 35 kg. What will be the combined average weight of both the groups?

Options :

1. ✘ 31 kg
2. ✘ 33 kg
3. ✔ 29 kg
4. ✘ 27 kg

Question Number : 93 Question Id : 5459275749 Question Type : MCQ Option Shuffling : Yes Display Question Number : Yes  
Single Line Question Option : No Option Orientation : Vertical

Correct Marks : 1 Wrong Marks : 0.25

12 फलों के एक समूह का औसत भार 20 कि.ग्रा. है। 18 फलों के एक समूह का औसत भार 35 कि.ग्रा. है। दोनों समूहों की संयुक्त औसत भार क्या होगा?

Options :

1. ✘ 31 कि.ग्रा.
2. ✘ 33 कि.ग्रा.
3. ✔ 29 कि.ग्रा.
4. ✘ 27 कि.ग्रा.

Question Number : 94 Question Id : 5459275750 Question Type : MCQ Option Shuffling : Yes Display Question Number : Yes  
Single Line Question Option : No Option Orientation : Vertical

Correct Marks : 1 Wrong Marks : 0.25

What is the value of 75% of 120% of 2160?

Options :

1. ✘ 1964
2. ✘ 2084
3. ✔ 1944
4. ✘ 2014

Question Number : 94 Question Id : 5459275750 Question Type : MCQ Option Shuffling : Yes Display Question Number : Yes  
Single Line Question Option : No Option Orientation : Vertical

Correct Marks : 1 Wrong Marks : 0.25

2160 के 120% के 75% का मान क्या है?

Options :

1. ✘ 1964
2. ✘ 2084
3. ✔ 1944
4. ✘ 2014

Question Number : 95 Question Id : 5459275751 Question Type : MCQ Option Shuffling : Yes Display Question Number : Yes  
Single Line Question Option : No Option Orientation : Vertical

Correct Marks : 1 Wrong Marks : 0.25

If a number M1 is 25% less than another number M2 and M2 is 30% less than 360, then what is the value of M1?

Options :

1. ✘ 169

2. ✘ 207
3. ✘ 197
4. ✔ 189

Question Number : 95 Question Id : 5459275751 Question Type : MCQ Option Shuffling : Yes Display Question Number : Yes  
Single Line Question Option : No Option Orientation : Vertical

Correct Marks : 1 Wrong Marks : 0.25

यदि एक संख्या M1, दूसरी संख्या M2 से 25% कम है तथा M2, 360 से 30% कम है, तो M1 का मान क्या है?

Options :

1. ✘ 169
2. ✘ 207
3. ✘ 197
4. ✔ 189

Question Number : 96 Question Id : 5459275752 Question Type : MCQ Option Shuffling : Yes Display Question Number : Yes  
Single Line Question Option : No Option Orientation : Vertical

Correct Marks : 1 Wrong Marks : 0.25

If a number is decreased successively by 20%, 35% and 25%, then what is the effective rate of decrease?

Options :

1. ✘ 71 percent
2. ✘ 39 percent
3. ✘ 49 percent
4. ✔ 61 percent

Question Number : 96 Question Id : 5459275752 Question Type : MCQ Option Shuffling : Yes Display Question Number : Yes  
Single Line Question Option : No Option Orientation : Vertical

Correct Marks : 1 Wrong Marks : 0.25

यदि एक संख्या को बारी बारी से 20%, 35% तथा 25% से कम किया गया है, तो कमी की प्रभावी दर क्या है?

Options :

1. ✘ 71 प्रतिशत
2. ✘ 39 प्रतिशत
3. ✘ 49 प्रतिशत
4. ✔ 61 प्रतिशत

Question Number : 97 Question Id : 5459275753 Question Type : MCQ Option Shuffling : Yes Display Question Number : Yes  
Single Line Question Option : No Option Orientation : Vertical

Correct Marks : 1 Wrong Marks : 0.25

The selling price of a chair is Rs 714 and the profit percentage is 19%. What is the cost price of the chair?

Options :

1. ✘ Rs 650
2. ✘ Rs 720
3. ✔ Rs 600
4. ✘ Rs 780

Question Number : 97 Question Id : 5459275753 Question Type : MCQ Option Shuffling : Yes Display Question Number : Yes  
Single Line Question Option : No Option Orientation : Vertical

Correct Marks : 1 Wrong Marks : 0.25

एक कुर्सी का विक्रय मूल्य 714 रुपये है तथा लाभ प्रतिशत 19% है। कुर्सी का क्रय मूल्य क्या है?

Options :

- ✘ 650 रुपये
- ✘ 720 रुपये
- ✔ 600 रुपये
- ✘ 780 रुपये

Question Number : 98 Question Id : 5459275754 Question Type : MCQ Option Shuffling : Yes Display Question Number : Yes  
Single Line Question Option : No Option Orientation : Vertical

Correct Marks : 1 Wrong Marks : 0.25

A wholeseller earns a profit of 40% by selling an article for Rs 196. To earn a profit of 60%, by how much percentage should he increase his selling price?

Options :

- ✘ 28.56 percent
- ✘ 42 percent
- ✘ 30 percent
- ✔ 14.28 percent

Question Number : 98 Question Id : 5459275754 Question Type : MCQ Option Shuffling : Yes Display Question Number : Yes  
Single Line Question Option : No Option Orientation : Vertical

Correct Marks : 1 Wrong Marks : 0.25

एक वस्तु 196 रुपये में बेचकर एक थोक विक्रेता 40% का लाभ कमाता है। 60% का लाभ कमाने के लिए उसे अपने विक्रय मूल्य को कितने प्रतिशत से बढ़ाना चाहिए?

Options :

- ✘ 28.56 प्रतिशत
- ✘ 42 प्रतिशत
- ✘ 30 प्रतिशत
- ✔ 14.28 प्रतिशत

Question Number : 99 Question Id : 5459275755 Question Type : MCQ Option Shuffling : Yes Display Question Number : Yes  
Single Line Question Option : No Option Orientation : Vertical

Correct Marks : 1 Wrong Marks : 0.25

Cost price of article R is Rs 20 more than the cost price of article T. Selling price of both the articles is same. Profit earned on article T is 40% and profit earned on article R is 20%. What is the cost price of the article R?

Options :

- ✘ Rs 120
- ✘ Rs 160
- ✔ Rs 140
- ✘ Rs 130

Question Number : 99 Question Id : 5459275755 Question Type : MCQ Option Shuffling : Yes Display Question Number : Yes  
Single Line Question Option : No Option Orientation : Vertical

Correct Marks : 1 Wrong Marks : 0.25

वस्तु R का क्रय मूल्य, वस्तु T के क्रय मूल्य से 20 रुपये अधिक है। दोनों वस्तुओं का क्रय मूल्य समान है। वस्तु T पर 40% का लाभ कमाया गया है तथा वस्तु R पर 20% का लाभ कमाया गया है। वस्तु R का क्रय मूल्य क्या है?

Options :

- ✘ 120 रुपये
- ✘ 160 रुपये
- ✔ 140 रुपये
- ✘ 130 रुपये

Question Number : 100 Question Id : 5459275756 Question Type : MCQ Option Shuffling : Yes Display Question Number : Yes  
Single Line Question Option : No Option Orientation : Vertical

Correct Marks : 1 Wrong Marks : 0.25

Anil, Kamal and Rahul hired a car for Rs 3600. Anil used it for 6 hours, Kamal used it for 12 hours and Rahul used it for 18 hours. What is the share that Kamal has to pay as cost of hire?

Options :

1. ✓ Rs 1200
2. ✗ Rs 1400
3. ✗ Rs 1000
4. ✗ Rs 1800

Question Number : 100 Question Id : 5459275756 Question Type : MCQ Option Shuffling : Yes Display Question Number : Yes  
Single Line Question Option : No Option Orientation : Vertical

Correct Marks : 1 Wrong Marks : 0.25

अनिल, कमल तथा राहुल ने एक कार को 3600 रुपये में किराये पर लिया। अनिल ने इसका 6 घंटे उपयोग किया, कमल ने इसका 12 घंटे उपयोग किया तथा राहुल ने इसका 18 घंटे उपयोग किया। कमल को किराये का कितना हिस्सा देना पड़ेगा?

Options :

1. ✓ 1200 रुपये
2. ✗ 1400 रुपये
3. ✗ 1000 रुपये
4. ✗ 1800 रुपये

#### Arithmetic Ability2

Group Number :	6
Group Id :	545927286
Group Maximum Duration :	0
Group Minimum Duration :	0
Revisit allowed for view? :	No
Revisit allowed for edit? :	No
Break time:	0
Group Marks:	20
Revisit allowed for group Instructions? :	Yes
Maximum Instruction Time:	0
Minimum Instruction Time:	0

#### Arithmetic Ability2

Section Id :	545927286
Section Number :	1
Section type :	Online
Mandatory or Optional:	Mandatory
Number of Questions:	20
Number of Questions to be attempted:	20
Section Marks:	20
Display Number Panel:	Yes
Group All Questions:	No

Sub-Section Id:

545927342

Question Shuffling Allowed :

Yes

Question Number : 101 Question Id : 5459275757 Question Type : MCQ Option Shuffling : Yes Display Question Number : Yes  
Single Line Question Option : No Option Orientation : Vertical

Correct Marks : 1 Wrong Marks : 0.25

If  $a : b = 3 : 4$  and  $c : d = 2a : 3b$ , then what is the value of  $ac : bd$ ?

Options :

1. ✘ 1 : 2
2. ✔ 3 : 8
3. ✘ 1 : 3
4. ✘ 8 : 3

Question Number : 101 Question Id : 5459275757 Question Type : MCQ Option Shuffling : Yes Display Question Number : Yes  
Single Line Question Option : No Option Orientation : Vertical

Correct Marks : 1 Wrong Marks : 0.25

यदि  $a : b = 3 : 4$  तथा  $c : d = 2a : 3b$  हो, तो  $ac : bd$  का मान क्या है?

Options :

1. ✘ 1 : 2
2. ✔ 3 : 8
3. ✘ 1 : 3
4. ✘ 8 : 3

Question Number : 102 Question Id : 5459275758 Question Type : MCQ Option Shuffling : Yes Display Question Number : Yes  
Single Line Question Option : No Option Orientation : Vertical

Correct Marks : 1 Wrong Marks : 0.25

X started a business by investing Rs 40000. After 3 months Y joined the business by investing Rs 50000. After 3 more months Z joined the business with Rs 60000. What will be the ratio of profits of X, Y and Z at end of 2 years?

Options :

1. ✘ 4 : 5 : 6
2. ✔ 32 : 35 : 36
3. ✘ 38 : 25 : 26
4. ✘ 28 : 15 : 16

Question Number : 102 Question Id : 5459275758 Question Type : MCQ Option Shuffling : Yes Display Question Number : Yes  
Single Line Question Option : No Option Orientation : Vertical

Correct Marks : 1 Wrong Marks : 0.25

X ने 40000 रुपये निवेश करके एक व्यापार आरंभ किया। 3 महीने पश्चात Y, 50000 रुपये के निवेश के साथ व्यापार से जुड़ गया। 3 और महीने पश्चात Z 60000 रुपये के साथ व्यापार से जुड़ गया। 2 वर्ष के अंत में X, Y तथा Z के लाभ का अनुपात क्या होगा?

Options :

1. ✘ 4 : 5 : 6
2. ✔ 32 : 35 : 36
3. ✘ 38 : 25 : 26
4. ✘ 28 : 15 : 16

Question Number : 103 Question Id : 5459275759 Question Type : MCQ Option Shuffling : Yes Display Question Number : Yes  
Single Line Question Option : No Option Orientation : Vertical

Correct Marks : 1 Wrong Marks : 0.25

A sum of money becomes 3 times in 4 years when kept on simple interest. In how many years will it become 15 times?

Options :

- ✓ 28 years
- ✗ 14 years
- ✗ 15 years
- ✗ 30 years

Question Number : 103 Question Id : 5459275759 Question Type : MCQ Option Shuffling : Yes Display Question Number : Yes Single Line Question Option : No Option Orientation : Vertical

Correct Marks : 1 Wrong Marks : 0.25

एक धनराशि जब साधारण ब्याज पर रखी जाती है तो 4 वर्ष में 3 गुना हो जाती है वह कितने वर्षों में 15 गुना हो जाएगी?

Options :

- ✓ 28 वर्ष
- ✗ 14 वर्ष
- ✗ 15 वर्ष
- ✗ 30 वर्ष

Question Number : 104 Question Id : 5459275760 Question Type : MCQ Option Shuffling : Yes Display Question Number : Yes Single Line Question Option : No Option Orientation : Vertical

Correct Marks : 1 Wrong Marks : 0.25

Rs 22000 are kept at compound interest (compounding annually). If the rate of interest is 10% per annum, then what is the amount after 2 years?

Options :

- ✗ Rs 27220
- ✗ Rs 25240
- ✓ Rs 26620
- ✗ Rs 27840

Question Number : 104 Question Id : 5459275760 Question Type : MCQ Option Shuffling : Yes Display Question Number : Yes Single Line Question Option : No Option Orientation : Vertical

Correct Marks : 1 Wrong Marks : 0.25

22000 रुपये को चक्रवृद्धि ब्याज (वार्षिक संयोजन) पर रखा गया है। यदि ब्याज की दर 10% प्रति वर्ष है, तो 2 वर्ष पश्चात मिश्रधन क्या है?

Options :

- ✗ 27220 रुपये
- ✗ 25240 रुपये
- ✓ 26620 रुपये
- ✗ 27840 रुपये

Question Number : 105 Question Id : 5459275761 Question Type : MCQ Option Shuffling : Yes Display Question Number : Yes Single Line Question Option : No Option Orientation : Vertical

Correct Marks : 1 Wrong Marks : 0.25

A sum of money becomes Rs 29282 in 4 years and Rs 26620 in 3 years when kept at compound interest (compounding annually). What is the per annum rate of interest?

Options :

- ✗ 16 percent
- ✗ 14 percent
- ✓ 1 percent
- ✗ 12 percent



Question Number : 105 Question Id : 5459275761 Question Type : MCQ Option Shuffling : Yes Display Question Number : Yes  
Single Line Question Option : No Option Orientation : Vertical

Correct Marks : 1 Wrong Marks : 0.25

चक्रवृद्धि ब्याज (वार्षिक संयोजन) पर रखे जाने पर एक धनराशि 4 वर्ष में 29282 रुपये तथा 3 वर्ष में 26620 रुपये हो जाती है। प्रति वर्ष ब्याज की दर क्या है?

Options :

1. ✘ 16 प्रतिशत
2. ✘ 14 प्रतिशत
3. ✔ 1 प्रतिशत
4. ✘ 12 प्रतिशत

Question Number : 106 Question Id : 5459275762 Question Type : MCQ Option Shuffling : Yes Display Question Number : Yes  
Single Line Question Option : No Option Orientation : Vertical

Correct Marks : 1 Wrong Marks : 0.25

A 400 metres long train takes 16 seconds to cross a pole. What is the speed of the train?

Options :

1. ✔ 90 km/hr
2. ✘ 120 km/hr
3. ✘ 80 km/hr
4. ✘ 70 km/hr

Question Number : 106 Question Id : 5459275762 Question Type : MCQ Option Shuffling : Yes Display Question Number : Yes  
Single Line Question Option : No Option Orientation : Vertical

Correct Marks : 1 Wrong Marks : 0.25

एक 400 मीटर लम्बी रेलगाड़ी एक खम्बे को पार करने में 16 सेकण्ड लेती है। रेलगाड़ी की गति क्या है?

Options :

1. ✔ 90 कि.मी./घंटा
2. ✘ 120 कि.मी./घंटा
3. ✘ 80 कि.मी./घंटा
4. ✘ 70 कि.मी./घंटा

Question Number : 107 Question Id : 5459275763 Question Type : MCQ Option Shuffling : Yes Display Question Number : Yes  
Single Line Question Option : No Option Orientation : Vertical

Correct Marks : 1 Wrong Marks : 0.25

A car travelled four equal distances of 10 km at speeds of 30, 60, 90 and 120 km/hr respectively. What is the average speed of the car?

Options :

1. ✘ 47.2 km/hr
2. ✘ 48.8 km/hr
3. ✘ 54.3 km/hr
4. ✔ 57.6 km/hr

Question Number : 107 Question Id : 5459275763 Question Type : MCQ Option Shuffling : Yes Display Question Number : Yes  
Single Line Question Option : No Option Orientation : Vertical

Correct Marks : 1 Wrong Marks : 0.25

एक गाडी 10 कि.मी. की चार समान दूरियों को क्रमशः 30, 60, 90 तथा 120 कि.मी./घंटा की गति से तय करता है। गाडी की औसत गति क्या है?

Options :

1. ✘ 47.2 कि.मी./घंटा

2. ✘ 48.8 कि.मी./घंटा
3. ✘ 54.3 कि.मी./घंटा
4. ✔ 57.6 कि.मी./घंटा

Question Number : 108 Question Id : 5459275764 Question Type : MCQ Option Shuffling : Yes Display Question Number : Yes Single Line Question Option : No Option Orientation : Vertical

Correct Marks : 1 Wrong Marks : 0.25

Two trains leave S1 and S2 towards S2 and S1 respectively at same time. Speeds of train coming from S1 and S2 are 18 km/hr and 32 km/hr respectively. When they meet then it is found that the train coming from S2 has travelled 84 km distance more than train coming from S1. What is the distance between S1 and S2?

Options :

1. ✘ 150 km
2. ✘ 180 km
3. ✘ 240 km
4. ✔ 300 km

Question Number : 108 Question Id : 5459275764 Question Type : MCQ Option Shuffling : Yes Display Question Number : Yes Single Line Question Option : No Option Orientation : Vertical

Correct Marks : 1 Wrong Marks : 0.25

दो रेलगाड़ियाँ S1 तथा S2 से S2 तथा S1 के लिए एक ही समय पर निकलती हैं। S1 तथा S2 से चलने वाली रेलगाड़ियों की गति क्रमशः 18 कि.मी./घंटा तथा 32 कि.मी./घंटा है। जब वह मिली तो यह पता चलता है कि S2 से आ रही रेलगाड़ी ने S1 से आ रही रेलगाड़ी से 84 कि.मी. दूरी अधिक तय कर ली है। S1 तथा S2 के मध्य कितनी दूरी है?

Options :

1. ✘ 150 कि.मी
2. ✘ 180 कि.मी
3. ✘ 240 कि.मी
4. ✔ 300 कि.मी

Question Number : 109 Question Id : 5459275765 Question Type : MCQ Option Shuffling : Yes Display Question Number : Yes Single Line Question Option : No Option Orientation : Vertical

Correct Marks : 1 Wrong Marks : 0.25

E1 and E2 together can complete a work in 15 days. E1 alone can complete the same work in 40 days. If they together complete the same work and they get Rs 80000, then what is the share of E2?

Options :

1. ✘ Rs 30000
2. ✔ Rs 50000
3. ✘ Rs 40000
4. ✘ Rs 32000

Question Number : 109 Question Id : 5459275765 Question Type : MCQ Option Shuffling : Yes Display Question Number : Yes Single Line Question Option : No Option Orientation : Vertical

Correct Marks : 1 Wrong Marks : 0.25

E1 तथा E2 मिलकर एक कार्य 15 दिन में पूरा कर सकते हैं। E1 अकेला समान कार्य 40 दिन में पूरा कर सकता है। यदि वे मिलकर समान कार्य पूरा करते हैं तथा उन्हें 80000 रुपये मिलते हैं, तो E2 का हिस्सा क्या है?

Options :

1. ✘ 30000 रुपये
2. ✔ 50000 रुपये
3. ✘ 40000 रुपये
4. ✘ 32000 रुपये

Question Number : 110 Question Id : 5459275766 Question Type : MCQ Option Shuffling : Yes Display Question Number : Yes  
Single Line Question Option : No Option Orientation : Vertical

Correct Marks : 1 Wrong Marks : 0.25

Yogesh and Vivek alone can do a work in 72 and 8 days respectively. They both start working together, but after 6 days, Vivek left the work. In how many days will Yogesh alone complete the remaining work?

Options :

1. ✘ 24 days
2. ✘ 18 days
3. ✔ 12 days
4. ✘ 16 days

Question Number : 110 Question Id : 5459275766 Question Type : MCQ Option Shuffling : Yes Display Question Number : Yes  
Single Line Question Option : No Option Orientation : Vertical

Correct Marks : 1 Wrong Marks : 0.25

योगेश तथा विवेक अकेले एक कार्य को क्रमशः 72 तथा 8 दिन में कर सकते हैं। वह दोनों साथ कार्य करना शुरू करते हैं, परंतु 6 दिन बाद विवेक कार्य छोड़ कर चला जाता है। योगेश अकेला बचे हुए कार्य को कितने दिन में कर लेगा?

Options :

1. ✘ 24 दिन
2. ✘ 18 दिन
3. ✔ 12 दिन
4. ✘ 16 दिन

Question Number : 111 Question Id : 5459275767 Question Type : MCQ Option Shuffling : Yes Display Question Number : Yes  
Single Line Question Option : No Option Orientation : Vertical

Correct Marks : 1 Wrong Marks : 0.25

Virat, Sumit and Pawan together can complete a work in 24 days. Efficiency of Virat is thrice that of Sumit and efficiency of Pawan is four times that of Sumit. How many days Pawan alone will take to complete this work?

Options :

1. ✘ 84 days
2. ✘ 64 days
3. ✘ 36 days
4. ✔ 48 days

Question Number : 111 Question Id : 5459275767 Question Type : MCQ Option Shuffling : Yes Display Question Number : Yes  
Single Line Question Option : No Option Orientation : Vertical

Correct Marks : 1 Wrong Marks : 0.25

विराट, सुमित तथा पवन मिलकर एक कार्य को 24 दिन में पूरा कर सकते हैं। विराट की क्षमता सुमित की तिगुनी है तथा पवन की क्षमता सुमित की चार गुना है। पवन अकेला इस कार्य को करने में कितने दिन लेगा?

Options :

1. ✘ 84 दिन
2. ✘ 64 दिन
3. ✘ 36 दिन
4. ✔ 48 दिन

Question Number : 112 Question Id : 5459275768 Question Type : MCQ Option Shuffling : Yes Display Question Number : Yes  
Single Line Question Option : No Option Orientation : Vertical

Correct Marks : 1 Wrong Marks : 0.25

The perimeter of a rectangular table is 34 cm and its area is  $60 \text{ cm}^2$ . What is the length of its diagonal?

Options :

- ✓ 13 cm
- ✗ 16 cm
- ✗ 12 cm
- ✗ 26 cm

Question Number : 112 Question Id : 5459275768 Question Type : MCQ Option Shuffling : Yes Display Question Number : Yes  
Single Line Question Option : No Option Orientation : Vertical

Correct Marks : 1 Wrong Marks : 0.25

किसी आयताकार मेज़ का परिमाण 34 से.मी. है तथा उसका क्षेत्रफल 60 से.मी.<sup>2</sup> है। उसके विकर्ण की लम्बाई क्या है?

Options :

- ✓ 13 से.मी.
- ✗ 16 से.मी.
- ✗ 12 से.मी.
- ✗ 26 से.मी.

Question Number : 113 Question Id : 5459275769 Question Type : MCQ Option Shuffling : Yes Display Question Number : Yes  
Single Line Question Option : No Option Orientation : Vertical

Correct Marks : 1 Wrong Marks : 0.25

A copper sphere of radius 15 cm is drawn into a cylindrical wire of length 20 metre. What is the radius of the wire?

Options :

- ✗ 1.7 cm
- ✓ 1.5 cm
- ✗ 2 cm
- ✗ 1.2 cm

Question Number : 113 Question Id : 5459275769 Question Type : MCQ Option Shuffling : Yes Display Question Number : Yes  
Single Line Question Option : No Option Orientation : Vertical

Correct Marks : 1 Wrong Marks : 0.25

15 से.मी. त्रिज्या वाले तांबे के एक गोले को एक 20 मीटर लम्बी बेलनाकार तार में बदला जाता है। तार की त्रिज्या क्या है?

Options :

- ✗ 1.7 से.मी.
- ✓ 1.5 से.मी.
- ✗ 2 से.मी.
- ✗ 1.2 से.मी.

Question Number : 114 Question Id : 5459275770 Question Type : MCQ Option Shuffling : Yes Display Question Number : Yes  
Single Line Question Option : No Option Orientation : Vertical

Correct Marks : 1 Wrong Marks : 0.25

The side of a rhombus measures 10 cm and one diagonal is 12 cm. What is the area of the rhombus?

Options :

- ✗ 84 cm<sup>2</sup>
- ✗ 120 cm<sup>2</sup>

3. ✓ 96 cm<sup>2</sup>

4. ✗ 104 cm<sup>2</sup>

Question Number : 114 Question Id : 5459275770 Question Type : MCQ Option Shuffling : Yes Display Question Number : Yes Single Line Question Option : No Option Orientation : Vertical

Correct Marks : 1 Wrong Marks : 0.25

एक विषमकोण की भुजा 10 से.मी. है तथा एक विकर्ण 12 से.मी. है। विषमकोण का क्षेत्रफल क्या है?

Options :

1. ✗ 84 से.मी.<sup>2</sup>

2. ✗ 120 से.मी.<sup>2</sup>

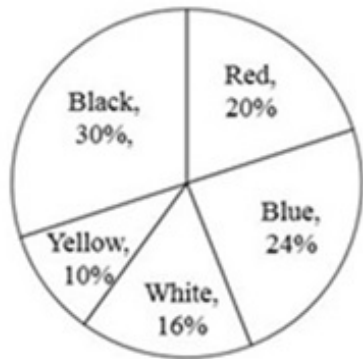
3. ✓ 96 से.मी.<sup>2</sup>

4. ✗ 104 से.मी.<sup>2</sup>

Question Number : 115 Question Id : 5459275771 Question Type : MCQ Option Shuffling : Yes Display Question Number : Yes Single Line Question Option : No Option Orientation : Vertical

Correct Marks : 1 Wrong Marks : 0.25

The pie chart given below shows the number of cars of different colours in a showroom. The numbers are shown as a percentage of total cars in the showroom.



If the total number of cars in the showroom are 300, then what is the difference between the number of red colour cars and yellow colour cars?

Options :

1. ✗ 20

2. ✗ 25

3. ✓ 30

4. ✗ 35

Question Number : 115 Question Id : 5459275771 Question Type : MCQ Option Shuffling : Yes Display Question Number : Yes Single Line Question Option : No Option Orientation : Vertical

Correct Marks : 1 Wrong Marks : 0.25

नीचे दिया गया वृत्त चित्र एक शोरूम में विभिन्न रंग की गाड़ियों की संख्या को दर्शाता है। संख्या को शोरूम में कुल गाड़ियों के प्रतिशत के रूप में दर्शाया गया है।



यदि शोरूम में गाड़ियों की कुल संख्या 300 है, तो लाल रंग की गाड़ियों की संख्या तथा पीले रंग की गाड़ियों की संख्या के बीच अंतर क्या है?

Options :

- ✘ 20
- ✘ 25
- ✔ 30
- ✘ 35

Question Number : 116 Question Id : 5459275772 Question Type : MCQ Option Shuffling : Yes Display Question Number : Yes Single Line Question Option : No Option Orientation : Vertical

Correct Marks : 1 Wrong Marks : 0.25

The table given below shows the number of persons visiting on different days of a week.

Days	Number of person
D1	120
D2	140
D3	154
D4	157
D5	163
D6	173

What is the percentage increase in number of persons visiting from D1 to D5?

Options :

- ✔ 35.83 percent
- ✘ 40.83 percent
- ✘ 45.83 percent
- ✘ 50.83 percent

Question Number : 116 Question Id : 5459275772 Question Type : MCQ Option Shuffling : Yes Display Question Number : Yes Single Line Question Option : No Option Orientation : Vertical

Correct Marks : 1 Wrong Marks : 0.25

नीचे दी गयी तालिका हफ्ते के विभिन्न दिनों पर आगंतुक व्यक्तियों की संख्या को दर्शाती है।

दिन	व्यक्तियों की संख्या
D1	120
D2	140
D3	154
D4	157
D5	163
D6	173

D1 से D5 तक आगंतुक व्यक्तियों की संख्या में प्रतिशत वृद्धि क्या है?

Options :

- ✓ 35.83 प्रतिशत
- ✗ 40.83 प्रतिशत
- ✗ 45.83 प्रतिशत
- ✗ 50.83 प्रतिशत

Question Number : 117 Question Id : 5459275773 Question Type : MCQ Option Shuffling : Yes Display Question Number : Yes Single Line Question Option : No Option Orientation : Vertical

Correct Marks : 1 Wrong Marks : 0.25

The table given below shows the number of right handed players in different teams.

Team	Number of right hand player
T1	4
T2	6
T3	5
T4	4
T5	3
T6	2
T7	1
T8	7
T9	8
T10	3

What is the average number of right hand players per team?

Options :

- ✗ 3.9
- ✗ 4.1
- ✗ 3.3
- ✓ 4.3

Question Number : 117 Question Id : 5459275773 Question Type : MCQ Option Shuffling : Yes Display Question Number : Yes Single Line Question Option : No Option Orientation : Vertical

Correct Marks : 1 Wrong Marks : 0.25

नीचे दी गयी तालिका विभिन्न टीमों में दाएँ हाथ के खिलाड़ियों की संख्या को दर्शाती है।

टीम	दाएँ हाथ के खिलाड़ियों की संख्या
T1	4
T2	6
T3	5
T4	4
T5	3
T6	2
T7	1
T8	7
T9	8
T10	3

प्रति टीम दाएँ हाथ खिलाड़ियों की औसत संख्या क्या है?

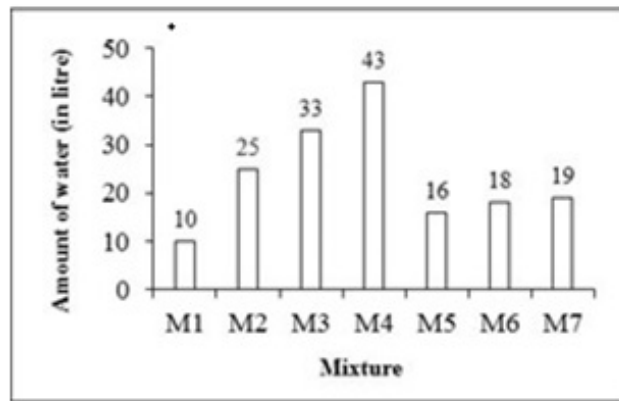
Options :

- ✘ 3.9
- ✘ 4.1
- ✘ 3.3
- ✔ 4.3

Question Number : 118 Question Id : 5459275774 Question Type : MCQ Option Shuffling : Yes Display Question Number : Yes Single Line Question Option : No Option Orientation : Vertical

Correct Marks : 1 Wrong Marks : 0.25

The bar graph given below shows the amount of water (in litre) in different mixtures.



The amount of water (in litre) in M1 mixture is how much percent less than the amount of water (in litre) in M7 mixture?

Options :

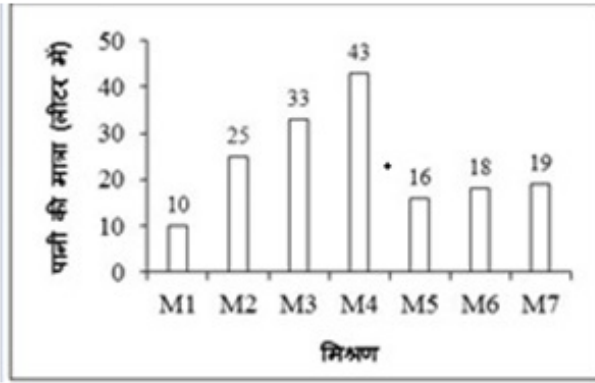
- ✔ 47.36 percent
- ✘ 57.36 percent
- ✘ 67.36 percent
- ✘ 77.36 percent

Question Number : 118 Question Id : 5459275774 Question Type : MCQ Option Shuffling : Yes Display Question Number : Yes Single Line Question Option : No Option Orientation : Vertical



Correct Marks : 1 Wrong Marks : 0.25

नीचे दिया गया दण्ड चित्र विभिन्न मिश्रणों में पानी की मात्रा (लीटर में) को दर्शाता है।



मिश्रण M1 में पानी की मात्रा (लीटर में) मिश्रण M7 में पानी की मात्रा (लीटर में) से कितने प्रतिशत कम है?

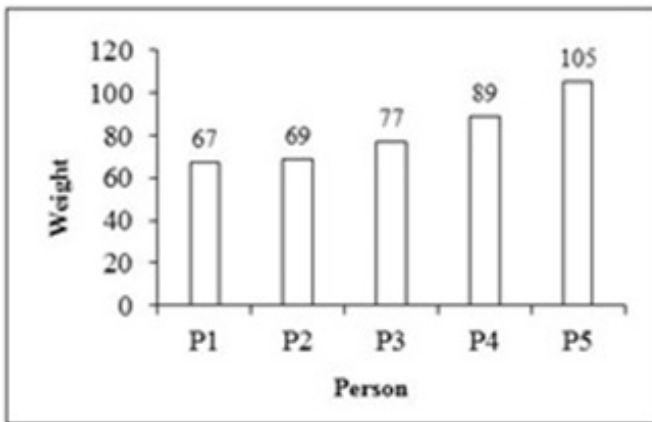
Options :

- ✓ 47.36 प्रतिशत
- ✗ 57.36 प्रतिशत
- ✗ 67.36 प्रतिशत
- ✗ 77.36 प्रतिशत

Question Number : 119 Question Id : 5459275775 Question Type : MCQ Option Shuffling : Yes Display Question Number : Yes Single Line Question Option : No Option Orientation : Vertical

Correct Marks : 1 Wrong Marks : 0.25

The bar graph given below shows the weight of different persons.



The weight of P5 is how much percent less than the sum of weights of P1 and P3?

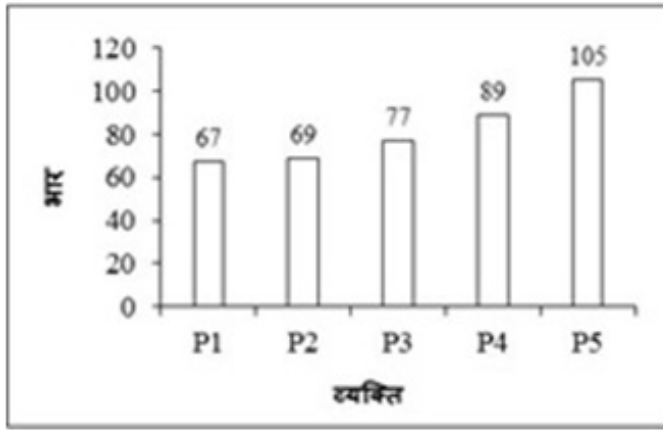
Options :

- ✗ 17.08 percent
- ✓ 27.08 percent
- ✗ 37.08 percent
- ✗ 47.08 percent

Question Number : 119 Question Id : 5459275775 Question Type : MCQ Option Shuffling : Yes Display Question Number : Yes Single Line Question Option : No Option Orientation : Vertical

Correct Marks : 1 Wrong Marks : 0.25

नीचे दिया गया दण्ड चित्र विभिन्न व्यक्तियों का भार दर्शाता है।



P5 का भार P1 तथा P3 के भार के योग से कितने प्रतिशत कम है?

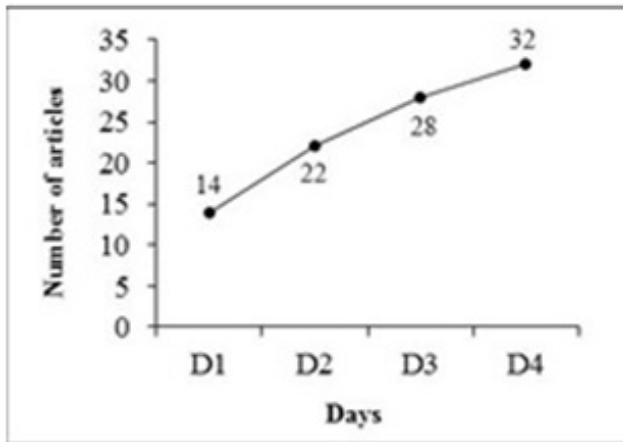
Options :

- ✘ 17.08 प्रतिशत
- ✔ 27.08 प्रतिशत
- ✘ 37.08 प्रतिशत
- ✘ 47.08 प्रतिशत

Question Number : 120 Question Id : 5459275776 Question Type : MCQ Option Shuffling : Yes Display Question Number : Yes Single Line Question Option : No Option Orientation : Vertical

Correct Marks : 1 Wrong Marks : 0.25

The line graph given below shows the number of article produced on different days of a week.



What are the total number of articles produced on all the 4 days?

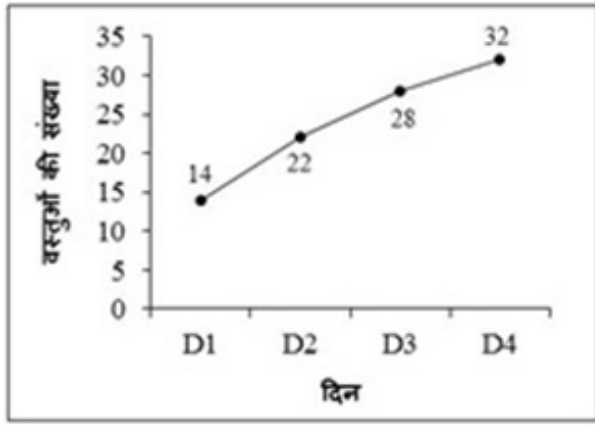
Options :

- ✘ 88
- ✘ 92
- ✔ 96
- ✘ 84

Question Number : 120 Question Id : 5459275776 Question Type : MCQ Option Shuffling : Yes Display Question Number : Yes Single Line Question Option : No Option Orientation : Vertical

Correct Marks : 1 Wrong Marks : 0.25

नीचे दिया गया रेखा चित्र हफ्ते के विभिन्न दिनों पर उत्पादित वस्तुओं की संख्या को दर्शाता है।



सभी 4 दिनों के उत्पादित वस्तुओं की कुल संख्या क्या है?

Options :

- ✘ 88
- ✘ 92
- ✔ 96
- ✘ 84

#### General English1

Group Number :	7
Group Id :	545927287
Group Maximum Duration :	0
Group Minimum Duration :	0
Revisit allowed for view? :	No
Revisit allowed for edit? :	No
Break time:	0
Group Marks:	20
Revisit allowed for group Instructions? :	Yes
Maximum Instruction Time:	0
Minimum Instruction Time:	0

#### General English1

Section Id :	545927287
Section Number :	1
Section type :	Online
Mandatory or Optional:	Mandatory
Number of Questions:	20
Number of Questions to be attempted:	20
Section Marks:	20
Display Number Panel:	Yes
Group All Questions:	No

Sub-Section Number:	1
Sub-Section Id:	545927343
Question Shuffling Allowed :	Yes

Question Number : 121 Question Id : 5459275777 Question Type : MCQ Option Shuffling : Yes Display Question Number : Yes  
Single Line Question Option : No Option Orientation : Vertical

Correct Marks : 1 Wrong Marks : 0.25

Find the part of the given sentence that has an error in it. If there is no error, choose 'No error'.

An old man (1) / is selling fruits (2) / in the market (3) /. No error (4)

Options :

1. ✘ 1
2. ✘ 2
3. ✘ 3
4. ✔ 4

Question Number : 121 Question Id : 5459275777 Question Type : MCQ Option Shuffling : Yes Display Question Number : Yes  
Single Line Question Option : No Option Orientation : Vertical

Correct Marks : 1 Wrong Marks : 0.25

Find the part of the given sentence that has an error in it. If there is no error, choose 'No error'.

An old man (1) / is selling fruits (2) / in the market (3) /. No error (4)

Options :

1. ✘ 1
2. ✘ 2
3. ✘ 3
4. ✔ 4

Question Number : 122 Question Id : 5459275778 Question Type : MCQ Option Shuffling : Yes Display Question Number : Yes  
Single Line Question Option : No Option Orientation : Vertical

Correct Marks : 1 Wrong Marks : 0.25

Find the part of the given sentence that has an error in it. If there is no error, choose 'No error'.

We went (1) / in the cinema (2) / last night (3) /. No error (4)

Options :

1. ✘ 1
2. ✔ 2
3. ✘ 3
4. ✘ 4

Question Number : 122 Question Id : 5459275778 Question Type : MCQ Option Shuffling : Yes Display Question Number : Yes  
Single Line Question Option : No Option Orientation : Vertical

Correct Marks : 1 Wrong Marks : 0.25

Find the part of the given sentence that has an error in it. If there is no error, choose 'No error'.

We went (1) / in the cinema (2) / last night (3) /. No error (4)

Options :

1. ✘ 1
2. ✔ 2
3. ✘ 3
4. ✘ 4

Question Number : 123 Question Id : 5459275779 Question Type : MCQ Option Shuffling : Yes Display Question Number : Yes  
Single Line Question Option : No Option Orientation : Vertical

**Correct Marks : 1 Wrong Marks : 0.25**

Find the part of the given sentence that has an error in it. If there is no error, choose 'No error'.

The book (1) / who has pictures (2) / in it is mine (3) /. No error (4)

**Options :**

1. ✘ 1

2. ✔ 2

3. ✘ 3

4. ✘ 4

**Question Number : 123 Question Id : 5459275779 Question Type : MCQ Option Shuffling : Yes Display Question Number : Yes Single Line Question Option : No Option Orientation : Vertical**

**Correct Marks : 1 Wrong Marks : 0.25**

Find the part of the given sentence that has an error in it. If there is no error, choose 'No error'.

The book (1) / who has pictures (2) / in it is mine (3) /. No error (4)

**Options :**

1. ✘ 1

2. ✔ 2

3. ✘ 3

4. ✘ 4

**Question Number : 124 Question Id : 5459275780 Question Type : MCQ Option Shuffling : Yes Display Question Number : Yes Single Line Question Option : No Option Orientation : Vertical**

**Correct Marks : 1 Wrong Marks : 0.25**

Find the part of the given sentence that has an error in it. If there is no error, choose 'No error'.

A fire breaked (1) / out in the factory (2) / last night (3) /. No error (4)

**Options :**

1. ✔ 1

2. ✘ 2

3. ✘ 3

4. ✘ 4

**Question Number : 124 Question Id : 5459275780 Question Type : MCQ Option Shuffling : Yes Display Question Number : Yes Single Line Question Option : No Option Orientation : Vertical**

**Correct Marks : 1 Wrong Marks : 0.25**

Find the part of the given sentence that has an error in it. If there is no error, choose 'No error'.

A fire breaked (1) / out in the factory (2) / last night (3) /. No error (4)

**Options :**

1. ✔ 1

2. ✘ 2

3. ✘ 3

4. ✘ 4

**Question Number : 125 Question Id : 5459275781 Question Type : MCQ Option Shuffling : Yes Display Question Number : Yes Single Line Question Option : No Option Orientation : Vertical**

**Correct Marks : 1 Wrong Marks : 0.25**

Find the part of the given sentence that has an error in it. If there is no error, choose 'No error'.

When are you (1) coming back (2) / in Mumbai? (3) / No error (4)

Options :

1. ✘ 1
2. ✘ 2
3. ✔ 3
4. ✘ 4

Question Number : 125 Question Id : 5459275781 Question Type : MCQ Option Shuffling : Yes Display Question Number : Yes  
Single Line Question Option : No Option Orientation : Vertical

Correct Marks : 1 Wrong Marks : 0.25

Find the part of the given sentence that has an error in it. If there is no error, choose 'No error'.

When are you (1) coming back (2) / in Mumbai? (3) / No error (4)

Options :

1. ✘ 1
2. ✘ 2
3. ✔ 3
4. ✘ 4

Question Number : 126 Question Id : 5459275782 Question Type : MCQ Option Shuffling : Yes Display Question Number : Yes  
Single Line Question Option : No Option Orientation : Vertical

Correct Marks : 1 Wrong Marks : 0.25

Improve the bracketed part of the sentence.

She doesn't mind (to be disturbed).

Options :

1. ✔ being disturbed
2. ✘ to being disturbed
3. ✘ being disturbing
4. ✘ No Improvement

Question Number : 126 Question Id : 5459275782 Question Type : MCQ Option Shuffling : Yes Display Question Number : Yes  
Single Line Question Option : No Option Orientation : Vertical

Correct Marks : 1 Wrong Marks : 0.25

Improve the bracketed part of the sentence.

She doesn't mind (to be disturbed).

Options :

1. ✔ being disturbed
2. ✘ to being disturbed
3. ✘ being disturbing
4. ✘ No Improvement

Question Number : 127 Question Id : 5459275783 Question Type : MCQ Option Shuffling : Yes Display Question Number : Yes  
Single Line Question Option : No Option Orientation : Vertical

Correct Marks : 1 Wrong Marks : 0.25

Improve the bracketed part of the sentence.

(The Gold) is a precious metal.

Options :

1. ✘ A
2. ✘ An
3. ✔ Gold
4. ✘ No Improvement

Question Number : 127 Question Id : 5459275783 Question Type : MCQ Option Shuffling : Yes Display Question Number : Yes  
Single Line Question Option : No Option Orientation : Vertical

Correct Marks : 1 Wrong Marks : 0.25

Improve the bracketed part of the sentence.

(The Gold) is a precious metal.

Options :

1. ✘ A
2. ✘ An
3. ✔ Gold
4. ✘ No Improvement

Question Number : 128 Question Id : 5459275784 Question Type : MCQ Option Shuffling : Yes Display Question Number : Yes  
Single Line Question Option : No Option Orientation : Vertical

Correct Marks : 1 Wrong Marks : 0.25

Improve the bracketed part of the sentence.

I am sorry, but I (don't believe) what you say.

Options :

1. ✘ will not believe
2. ✘ will not be believing
3. ✘ am no believing
4. ✔ No Improvement

Question Number : 128 Question Id : 5459275784 Question Type : MCQ Option Shuffling : Yes Display Question Number : Yes  
Single Line Question Option : No Option Orientation : Vertical

Correct Marks : 1 Wrong Marks : 0.25

Improve the bracketed part of the sentence.

I am sorry, but I (don't believe) what you say.

Options :

1. ✘ will not believe
2. ✘ will not be believing
3. ✘ am no believing
4. ✔ No Improvement

Question Number : 129 Question Id : 5459275785 Question Type : MCQ Option Shuffling : Yes Display Question Number : Yes  
Single Line Question Option : No Option Orientation : Vertical

Correct Marks : 1 Wrong Marks : 0.25

Improve the bracketed part of the sentence.

Keats (describe) the idea very well in his poems.

Options :

1. ✔ describes

- ✘ is descried
- ✘ describing
- ✘ No Improvement

Question Number : 129 Question Id : 5459275785 Question Type : MCQ Option Shuffling : Yes Display Question Number : Yes  
Single Line Question Option : No Option Orientation : Vertical

Correct Marks : 1 Wrong Marks : 0.25

Improve the bracketed part of the sentence.

Keats (describe) the idea very well in his poems.

Options :

- ✔ describes
- ✘ is descried
- ✘ describing
- ✘ No Improvement

Question Number : 130 Question Id : 5459275786 Question Type : MCQ Option Shuffling : Yes Display Question Number : Yes  
Single Line Question Option : No Option Orientation : Vertical

Correct Marks : 1 Wrong Marks : 0.25

Improve the bracketed part of the sentence.

She met a lot of people (at) her holiday.

Options :

- ✘ in
- ✘ on
- ✔ during
- ✘ No Improvement

Question Number : 130 Question Id : 5459275786 Question Type : MCQ Option Shuffling : Yes Display Question Number : Yes  
Single Line Question Option : No Option Orientation : Vertical

Correct Marks : 1 Wrong Marks : 0.25

Improve the bracketed part of the sentence.

She met a lot of people (at) her holiday.

Options :

- ✘ in
- ✘ on
- ✔ during
- ✘ No Improvement

Question Number : 131 Question Id : 5459275787 Question Type : MCQ Option Shuffling : Yes Display Question Number : Yes  
Single Line Question Option : No Option Orientation : Vertical

Correct Marks : 1 Wrong Marks : 0.25

A sentence has been given with a blank to be filled with an appropriate word. Choose the correct alternative.

Sanya doesn't \_\_\_\_\_ much money to buy a phone.

Options :

- ✘ has
- ✔ have
- ✘ is



4. ✘ are

Question Number : 131 Question Id : 5459275787 Question Type : MCQ Option Shuffling : Yes Display Question Number : Yes  
Single Line Question Option : No Option Orientation : Vertical

Correct Marks : 1 Wrong Marks : 0.25

A sentence has been given with a blank to be filled with an appropriate word. Choose the correct alternative.

Sanya doesn't \_\_\_\_\_ much money to buy a phone.

Options :

1. ✘ has
2. ✔ have
3. ✘ is
4. ✘ are

Question Number : 132 Question Id : 5459275788 Question Type : MCQ Option Shuffling : Yes Display Question Number : Yes  
Single Line Question Option : No Option Orientation : Vertical

Correct Marks : 1 Wrong Marks : 0.25

A sentence has been given with a blank to be filled with an appropriate word. Choose the correct alternative.

Aman was appointed \_\_\_\_\_ the monitor of the class.

Options :

1. ✔ as
2. ✘ to
3. ✘ so
4. ✘ because

Question Number : 132 Question Id : 5459275788 Question Type : MCQ Option Shuffling : Yes Display Question Number : Yes  
Single Line Question Option : No Option Orientation : Vertical

Correct Marks : 1 Wrong Marks : 0.25

A sentence has been given with a blank to be filled with an appropriate word. Choose the correct alternative.

Aman was appointed \_\_\_\_\_ the monitor of the class.

Options :

1. ✔ as
2. ✘ to
3. ✘ so
4. ✘ because

Question Number : 133 Question Id : 5459275789 Question Type : MCQ Option Shuffling : Yes Display Question Number : Yes  
Single Line Question Option : No Option Orientation : Vertical

Correct Marks : 1 Wrong Marks : 0.25

A sentence has been given with a blank to be filled with an appropriate word. Choose the correct alternative.

We intend to \_\_\_\_\_ there for a month.

Options :

1. ✘ stayed
2. ✘ stays
3. ✔ stay
4. ✘ staying

Question Number : 133 Question Id : 5459275789 Question Type : MCQ Option Shuffling : Yes Display Question Number : Yes  
Single Line Question Option : No Option Orientation : Vertical

Correct Marks : 1 Wrong Marks : 0.25

A sentence has been given with a blank to be filled with an appropriate word. Choose the correct alternative.

We intend to \_\_\_\_\_ there for a month.

Options :

1. ✘ stayed
2. ✘ stays
3. ✔ stay
4. ✘ staying

Question Number : 134 Question Id : 5459275790 Question Type : MCQ Option Shuffling : Yes Display Question Number : Yes  
Single Line Question Option : No Option Orientation : Vertical

Correct Marks : 1 Wrong Marks : 0.25

A sentence has been given with a blank to be filled with an appropriate word. Choose the correct alternative.

\_\_\_\_\_ the students have done well in the competition.

Options :

1. ✘ Each
2. ✘ Every
3. ✘ Either
4. ✔ All

Question Number : 134 Question Id : 5459275790 Question Type : MCQ Option Shuffling : Yes Display Question Number : Yes  
Single Line Question Option : No Option Orientation : Vertical

Correct Marks : 1 Wrong Marks : 0.25

A sentence has been given with a blank to be filled with an appropriate word. Choose the correct alternative.

\_\_\_\_\_ the students have done well in the competition.

Options :

1. ✘ Each
2. ✘ Every
3. ✘ Either
4. ✔ All

Question Number : 135 Question Id : 5459275791 Question Type : MCQ Option Shuffling : Yes Display Question Number : Yes  
Single Line Question Option : No Option Orientation : Vertical

Correct Marks : 1 Wrong Marks : 0.25

A sentence has been given with a blank to be filled with an appropriate word. Choose the correct alternative.

Abhi \_\_\_\_\_ German very fluently.

Options :

1. ✘ speak
2. ✘ have spoken
3. ✔ speaks
4. ✘ speaking

Question Number : 135 Question Id : 5459275791 Question Type : MCQ Option Shuffling : Yes Display Question Number : Yes  
Single Line Question Option : No Option Orientation : Vertical

Correct Marks : 1 Wrong Marks : 0.25

A sentence has been given with a blank to be filled with an appropriate word. Choose the correct alternative.

Abhi \_\_\_\_\_ German very fluently.

Options :

1. ✘ speak
2. ✘ have spoken
3. ✔ speaks
4. ✘ speaking

Question Number : 136 Question Id : 5459275792 Question Type : MCQ Option Shuffling : Yes Display Question Number : Yes  
Single Line Question Option : No Option Orientation : Vertical

Correct Marks : 1 Wrong Marks : 0.25

A sentence has been given with a blank to be filled with an appropriate word. Choose the correct alternative.

Your son should have asked you before \_\_\_\_\_.

Options :

1. ✘ leave
2. ✔ leaving
3. ✘ to leave
4. ✘ left

Question Number : 136 Question Id : 5459275792 Question Type : MCQ Option Shuffling : Yes Display Question Number : Yes  
Single Line Question Option : No Option Orientation : Vertical

Correct Marks : 1 Wrong Marks : 0.25

A sentence has been given with a blank to be filled with an appropriate word. Choose the correct alternative.

Your son should have asked you before \_\_\_\_\_.

Options :

1. ✘ leave
2. ✔ leaving
3. ✘ to leave
4. ✘ left

Question Number : 137 Question Id : 5459275793 Question Type : MCQ Option Shuffling : Yes Display Question Number : Yes  
Single Line Question Option : No Option Orientation : Vertical

Correct Marks : 1 Wrong Marks : 0.25

A sentence has been given with a blank to be filled with an appropriate word. Choose the correct alternative.

She will have to start \_\_\_\_\_ once.

Options :

1. ✘ on
2. ✘ of
3. ✔ at
4. ✘ in

Question Number : 137 Question Id : 5459275793 Question Type : MCQ Option Shuffling : Yes Display Question Number : Yes  
Single Line Question Option : No Option Orientation : Vertical

Correct Marks : 1 Wrong Marks : 0.25

A sentence has been given with a blank to be filled with an appropriate word. Choose the correct alternative.

She will have to start \_\_\_\_\_ once.

Options :

1. ✘ on
2. ✘ of
3. ✔ at
4. ✘ in

Question Number : 138 Question Id : 5459275794 Question Type : MCQ Option Shuffling : Yes Display Question Number : Yes  
Single Line Question Option : No Option Orientation : Vertical

Correct Marks : 1 Wrong Marks : 0.25

A sentence has been given with a blank to be filled with an appropriate word. Choose the correct alternative.

We must serve \_\_\_\_\_ country.

Options :

1. ✔ our
2. ✘ himself
3. ✘ ourself
4. ✘ themself

Question Number : 138 Question Id : 5459275794 Question Type : MCQ Option Shuffling : Yes Display Question Number : Yes  
Single Line Question Option : No Option Orientation : Vertical

Correct Marks : 1 Wrong Marks : 0.25

A sentence has been given with a blank to be filled with an appropriate word. Choose the correct alternative.

We must serve \_\_\_\_\_ country.

Options :

1. ✔ our
2. ✘ himself
3. ✘ ourself
4. ✘ themself

Question Number : 139 Question Id : 5459275795 Question Type : MCQ Option Shuffling : Yes Display Question Number : Yes  
Single Line Question Option : No Option Orientation : Vertical

Correct Marks : 1 Wrong Marks : 0.25

The question below consists of a set of labeled sentences. Out of the four options given, select the most logical order of the sentences to form a coherent paragraph.

P: of knowledge sometimes

Q: becomes the cause

R: The forbidden fruit

S: of great distress and anguish

Options :

1. ✘ PQRS
2. ✔ RPQS
3. ✘ RQSP
4. ✘ RSQP

Question Number : 139 Question Id : 5459275795 Question Type : MCQ Option Shuffling : Yes Display Question Number : Yes  
Single Line Question Option : No Option Orientation : Vertical

Correct Marks : 1 Wrong Marks : 0.25

The question below consists of a set of labeled sentences. Out of the four options given, select the most logical order of the sentences to form a coherent paragraph.

P: of knowledge sometimes  
Q: becomes the cause  
R: The forbidden fruit  
S: of great distress and anguish

Options :

1. ✘ PQRS
2. ✔ RPQS
3. ✘ RQSP
4. ✘ RSQP

Question Number : 140 Question Id : 5459275796 Question Type : MCQ Option Shuffling : Yes Display Question Number : Yes  
Single Line Question Option : No Option Orientation : Vertical

Correct Marks : 1 Wrong Marks : 0.25

The question below consists of a set of labeled sentences. Out of the four options given, select the most logical order of the sentences to form a coherent paragraph.

P: Diwali is held at  
Q: the beginning of the Hindu  
R: commercial year in honour  
S: of the goddess Lakshmi

Options :

1. ✔ PQRS
2. ✘ QRSP
3. ✘ PRSQ
4. ✘ PSQR

Question Number : 140 Question Id : 5459275796 Question Type : MCQ Option Shuffling : Yes Display Question Number : Yes  
Single Line Question Option : No Option Orientation : Vertical

Correct Marks : 1 Wrong Marks : 0.25

The question below consists of a set of labeled sentences. Out of the four options given, select the most logical order of the sentences to form a coherent paragraph.

P: Diwali is held at  
Q: the beginning of the Hindu  
R: commercial year in honour  
S: of the goddess Lakshmi

Options :

1. ✔ PQRS
2. ✘ QRSP
3. ✘ PRSQ
4. ✘ PSQR

General English2

Group Number :	8
Group Id :	545927288
Group Maximum Duration :	0
Group Minimum Duration :	0
Revisit allowed for view? :	No

Revisit allowed for edit? :	No
Break time:	0
Group Marks:	20
Revisit allowed for group Instructions? :	Yes
Maximum Instruction Time:	0
Minimum Instruction Time:	0

## General English2

Section Id :	545927288
Section Number :	1
Section type :	Online
Mandatory or Optional:	Mandatory
Number of Questions:	16
Number of Questions to be attempted:	16
Section Marks:	20
Display Number Panel:	Yes
Group All Questions:	No

Sub-Section Number:	1
Sub-Section Id:	545927344
Question Shuffling Allowed :	Yes

Question Number : 141 Question Id : 5459275797 Question Type : MCQ Option Shuffling : Yes Display Question Number : Yes  
Single Line Question Option : No Option Orientation : Vertical

Correct Marks : 1 Wrong Marks : 0.25

The question below consists of a set of labeled sentences. Out of the four options given, select the most logical order of the sentences to form a coherent paragraph.

- P: Ashoka was a kind ruler.  
Q: Many kings have lived and died;  
R: My favourite hero in history is Ashoka the Great.  
S: nobody remembers them but Ashoka's name will live of ever.

Options :

1. ✘ PQRS
2. ✘ RSQP
3. ✔ RPQS
4. ✘ RSPQ

Question Number : 141 Question Id : 5459275797 Question Type : MCQ Option Shuffling : Yes Display Question Number : Yes  
Single Line Question Option : No Option Orientation : Vertical

Correct Marks : 1 Wrong Marks : 0.25

The question below consists of a set of labeled sentences. Out of the four options given, select the most logical order of the sentences to form a coherent paragraph.

- P: Ashoka was a kind ruler.  
Q: Many kings have lived and died;  
R: My favourite hero in history is Ashoka the Great.  
S: nobody remembers them but Ashoka's name will live of ever.

Options :

1. ✘ PQRS
2. ✘ RSQP

3. ✓ RPQS

4. ✗ RSPQ

Question Number : 142 Question Id : 5459275798 Question Type : MCQ Option Shuffling : Yes Display Question Number : Yes  
Single Line Question Option : No Option Orientation : Vertical

Correct Marks : 1 Wrong Marks : 0.25

Choose the word that is opposite in meaning to the given word.

Kidnap

Note: For this question, discrepancy is found in question/answer. So, this question is ignored for all candidates.

Options :

1. Abduct
2. Liberate
3. Salvage
4. Rescue

Question Number : 142 Question Id : 5459275798 Question Type : MCQ Option Shuffling : Yes Display Question Number : Yes  
Single Line Question Option : No Option Orientation : Vertical

Correct Marks : 1 Wrong Marks : 0.25

Choose the word that is opposite in meaning to the given word.

Kidnap

Note: For this question, discrepancy is found in question/answer. So, this question is ignored for all candidates.

Options :

1. Abduct
2. Liberate
3. Salvage
4. Rescue

Question Number : 143 Question Id : 5459275799 Question Type : MCQ Option Shuffling : Yes Display Question Number : Yes  
Single Line Question Option : No Option Orientation : Vertical

Correct Marks : 1 Wrong Marks : 0.25

Choose the word that means the same as the given word.

Notion

Options :

1. ✗ Reality
2. ✗ Spirit
3. ✓ Perception
4. ✗ Thoughts

Question Number : 143 Question Id : 5459275799 Question Type : MCQ Option Shuffling : Yes Display Question Number : Yes  
Single Line Question Option : No Option Orientation : Vertical

Correct Marks : 1 Wrong Marks : 0.25

Choose the word that means the same as the given word.

Notion

Options :

1. ✗ Reality

2. ✘ Spirit
3. ✔ Perception
4. ✘ Thoughts

Question Number : 144 Question Id : 5459275800 Question Type : MCQ Option Shuffling : Yes Display Question Number : Yes  
Single Line Question Option : No Option Orientation : Vertical

Correct Marks : 1 Wrong Marks : 0.25

Choose the word that means the same as the given word.

Permit

Options :

1. ✘ Deny
2. ✘ Reject
3. ✘ Encourage
4. ✔ Sanction

Question Number : 144 Question Id : 5459275800 Question Type : MCQ Option Shuffling : Yes Display Question Number : Yes  
Single Line Question Option : No Option Orientation : Vertical

Correct Marks : 1 Wrong Marks : 0.25

Choose the word that means the same as the given word.

Permit

Options :

1. ✘ Deny
2. ✘ Reject
3. ✘ Encourage
4. ✔ Sanction

Question Number : 145 Question Id : 5459275801 Question Type : MCQ Option Shuffling : Yes Display Question Number : Yes  
Single Line Question Option : No Option Orientation : Vertical

Correct Marks : 1 Wrong Marks : 0.25

Choose the word that is opposite in meaning to the given word.

Reprimand

Options :

1. ✘ Reveal
2. ✔ Praise
3. ✘ Repel
4. ✘ Acceptance

Question Number : 145 Question Id : 5459275801 Question Type : MCQ Option Shuffling : Yes Display Question Number : Yes  
Single Line Question Option : No Option Orientation : Vertical

Correct Marks : 1 Wrong Marks : 0.25

Choose the word that is opposite in meaning to the given word.

Reprimand

Options :

1. ✘ Reveal
2. ✔ Praise
3. ✘ Repel



#### 4. ✘ Acceptance

Question Number : 146 Question Id : 5459275802 Question Type : MCQ Option Shuffling : Yes Display Question Number : Yes  
Single Line Question Option : No Option Orientation : Vertical

Correct Marks : 1 Wrong Marks : 0.25

Choose the word that means the same as the given word.

Interpret

Options :

1. ✘ Narrate
2. ✘ Suppress
3. ✔ Decipher
4. ✘ Dwell

Question Number : 146 Question Id : 5459275802 Question Type : MCQ Option Shuffling : Yes Display Question Number : Yes  
Single Line Question Option : No Option Orientation : Vertical

Correct Marks : 1 Wrong Marks : 0.25

Choose the word that means the same as the given word.

Interpret

Options :

1. ✘ Narrate
2. ✘ Suppress
3. ✔ Decipher
4. ✘ Dwell

Question Number : 147 Question Id : 5459275803 Question Type : MCQ Option Shuffling : Yes Display Question Number : Yes  
Single Line Question Option : No Option Orientation : Vertical

Correct Marks : 1 Wrong Marks : 0.25

In the given question, four words are given out of which one word is correctly spelt. Choose the correctly spelt word.

Options :

1. ✘ Amatuer
2. ✔ Amateur
3. ✘ Ammateur
4. ✘ Emateur

Question Number : 147 Question Id : 5459275803 Question Type : MCQ Option Shuffling : Yes Display Question Number : Yes  
Single Line Question Option : No Option Orientation : Vertical

Correct Marks : 1 Wrong Marks : 0.25

In the given question, four words are given out of which one word is correctly spelt. Choose the correctly spelt word.

Options :

1. ✘ Amatuer
2. ✔ Amateur
3. ✘ Ammateur
4. ✘ Emateur

Question Number : 148 Question Id : 5459275804 Question Type : MCQ Option Shuffling : Yes Display Question Number : Yes  
Single Line Question Option : No Option Orientation : Vertical

**Correct Marks : 1 Wrong Marks : 0.25**

In the given question, four words are given out of which one word is correctly spelt. Choose the correctly spelt word.

**Options :**

1. ✘ Aparent
2. ✘ Aparant
3. ✔ Apparent
4. ✘ Apparant

**Question Number : 148 Question Id : 5459275804 Question Type : MCQ Option Shuffling : Yes Display Question Number : Yes Single Line Question Option : No Option Orientation : Vertical**

**Correct Marks : 1 Wrong Marks : 0.25**

In the given question, four words are given out of which one word is correctly spelt. Choose the correctly spelt word.

**Options :**

1. ✘ Aparent
2. ✘ Aparant
3. ✔ Apparent
4. ✘ Apparant

**Question Number : 149 Question Id : 5459275805 Question Type : MCQ Option Shuffling : Yes Display Question Number : Yes Single Line Question Option : No Option Orientation : Vertical**

**Correct Marks : 1 Wrong Marks : 0.25**

In the given question, four words are given out of which one word is correctly spelt. Choose the correctly spelt word.

**Options :**

1. ✔ Bellwether
2. ✘ Ballwether
3. ✘ Bullwether
4. ✘ Bellweather

**Question Number : 149 Question Id : 5459275805 Question Type : MCQ Option Shuffling : Yes Display Question Number : Yes Single Line Question Option : No Option Orientation : Vertical**

**Correct Marks : 1 Wrong Marks : 0.25**

In the given question, four words are given out of which one word is correctly spelt. Choose the correctly spelt word.

**Options :**

1. ✔ Bellwether
2. ✘ Ballwether
3. ✘ Bullwether
4. ✘ Bellweather

**Question Number : 150 Question Id : 5459275806 Question Type : MCQ Option Shuffling : Yes Display Question Number : Yes Single Line Question Option : No Option Orientation : Vertical**

**Correct Marks : 1 Wrong Marks : 0.25**

In the following question, out of the given four alternatives, select the alternative which best expresses the meaning of the Idiom/Phrase.

Out of the way

**Options :**

1. ✘ Impossible
2. ✘ To think of the future
3. ✘ Human body
4. ✔ Not convenient

**Question Number : 150 Question Id : 5459275806 Question Type : MCQ Option Shuffling : Yes Display Question Number : Yes Single Line Question Option : No Option Orientation : Vertical**

**Correct Marks : 1 Wrong Marks : 0.25**

In the following question, out of the given four alternatives, select the alternative which best expresses the meaning of the Idiom/Phrase.

Out of the way

**Options :**

1. ✘ Impossible
2. ✘ To think of the future
3. ✘ Human body
4. ✔ Not convenient

**Question Number : 151 Question Id : 5459275807 Question Type : MCQ Option Shuffling : Yes Display Question Number : Yes Single Line Question Option : No Option Orientation : Vertical**

**Correct Marks : 1 Wrong Marks : 0.25**

In the following question, out of the given four alternatives, select the alternative which best expresses the meaning of the Idiom/Phrase.

The gift of the gab

**Options :**

1. ✘ In disorder
2. ✘ In any case
3. ✔ Talent of speaking
4. ✘ Rare

**Question Number : 151 Question Id : 5459275807 Question Type : MCQ Option Shuffling : Yes Display Question Number : Yes Single Line Question Option : No Option Orientation : Vertical**

**Correct Marks : 1 Wrong Marks : 0.25**

In the following question, out of the given four alternatives, select the alternative which best expresses the meaning of the Idiom/Phrase.

The gift of the gab

**Options :**

1. ✘ In disorder
2. ✘ In any case
3. ✔ Talent of speaking
4. ✘ Rare

**Question Number : 152 Question Id : 5459275808 Question Type : MCQ Option Shuffling : Yes Display Question Number : Yes Single Line Question Option : No Option Orientation : Vertical**

**Correct Marks : 1 Wrong Marks : 0.25**

In the following question, out of the given four alternatives, select the alternative which best expresses the meaning of the Idiom/Phrase.

Fair play

Options :

1. ✓ Equal conditions for all
2. ✗ Destruction
3. ✗ In danger
4. ✗ Usually

Question Number : 152 Question Id : 5459275808 Question Type : MCQ Option Shuffling : Yes Display Question Number : Yes  
Single Line Question Option : No Option Orientation : Vertical

Correct Marks : 1 Wrong Marks : 0.25

In the following question, out of the given four alternatives, select the alternative which best expresses the meaning of the Idiom/Phrase.

Fair play

Options :

1. ✓ Equal conditions for all
2. ✗ Destruction
3. ✗ In danger
4. ✗ Usually

Question Number : 153 Question Id : 5459275809 Question Type : MCQ Option Shuffling : Yes Display Question Number : Yes  
Single Line Question Option : No Option Orientation : Vertical

Correct Marks : 1 Wrong Marks : 0.25

Choose the word that can substitute the given sentence.

A public room or building where gambling games are played.

Options :

1. ✗ Lounge
2. ✗ Creche
3. ✗ Burrow
4. ✓ Casino

Question Number : 153 Question Id : 5459275809 Question Type : MCQ Option Shuffling : Yes Display Question Number : Yes  
Single Line Question Option : No Option Orientation : Vertical

Correct Marks : 1 Wrong Marks : 0.25

Choose the word that can substitute the given sentence.

A public room or building where gambling games are played.

Options :

1. ✗ Lounge
2. ✗ Creche
3. ✗ Burrow
4. ✓ Casino

Question Number : 154 Question Id : 5459275810 Question Type : MCQ Option Shuffling : Yes Display Question Number : Yes  
Single Line Question Option : No Option Orientation : Vertical

Correct Marks : 1 Wrong Marks : 0.25

Choose the word that can substitute the given sentence.

One who makes sculptures

Options :

1. ✓ Sculptor
2. ✗ Artist
3. ✗ Linguist
4. ✗ Curator

**Question Number : 154 Question Id : 5459275810 Question Type : MCQ Option Shuffling : Yes Display Question Number : Yes**  
**Single Line Question Option : No Option Orientation : Vertical**

**Correct Marks : 1 Wrong Marks : 0.25**

Choose the word that can substitute the given sentence.

One who makes sculptures

**Options :**

1. ✓ Sculptor
2. ✗ Artist
3. ✗ Linguist
4. ✗ Curator

**Question Number : 155 Question Id : 5459275811 Question Type : MCQ Option Shuffling : Yes Display Question Number : Yes**  
**Single Line Question Option : No Option Orientation : Vertical**

**Correct Marks : 1 Wrong Marks : 0.25**

Choose the word that can substitute the given sentence.

A piece of enclosed land planted with fruit trees

**Options :**

1. ✗ Reservoir
2. ✓ Orchard
3. ✗ Island
4. ✗ Shed

**Question Number : 155 Question Id : 5459275811 Question Type : MCQ Option Shuffling : Yes Display Question Number : Yes**  
**Single Line Question Option : No Option Orientation : Vertical**

**Correct Marks : 1 Wrong Marks : 0.25**

Choose the word that can substitute the given sentence.

A piece of enclosed land planted with fruit trees

**Options :**

1. ✗ Reservoir
2. ✓ Orchard
3. ✗ Island
4. ✗ Shed

<b>Sub-Section Number:</b>	2
<b>Sub-Section Id:</b>	545927345
<b>Question Shuffling Allowed :</b>	Yes

**Question Id : 5459275812 Question Type : COMPREHENSION Sub Question Shuffling Allowed : Yes Group Comprehension Questions : No**

**Question Numbers : (156 to 160)**

Question Label : Comprehension

Read the following information carefully and answer the given questions.

American politician cartoons often follow the general displeasure of the government by the American people. They run the gamut from economics to foreign policy to the overwhelming popular topic of bureaucracy. As an avid reader of politician cartoons on a daily basis, I enjoy the humour and cynicism found within these forms of speech. Not only can they poke fun at politicians for their behaviour, but they often raise a strong sense of values and morals in the person that reads him. From topics currently facing the United Nations, our federal government or current news events, the cartoonists use a medium that was once reserved for innocent humour and changes it, so that it draws the readers attention.

Since the beginnings of American political cartoons have often portrayed government officials as inept and sometimes just plain stupid. Politicians are very easy targets for the press and so became the subject of many daily papers editorial page cartoons. Although sometimes the cartoonist draws on current events and pay tribute to people who are often thought of with reverence. Take e.g. Charles Schultz on the day following his death most cartoons as well as political cartoons paid homage to a person who is considered the great cartoonist of all time. Other cartoon strips showed their characters attending his funeral or missing him in some other way. While the most poignant political cartoons I remembered about his death was by a cartoonist Mike Thompson of the Detroit free press. It showed Charlie Brown walking through the gates of heaven with an older man walking beside him and saying to him. "Now, a few pointers about kicking a football". The person walking with Charlie brown was Tom Landry. Political cartoons stay on the pulse of the current affairs and in doing so try to draw the attention of their audience of the topic and nudges them to take some kind of action. So if you want to know about how a segment of America feels turn to their editorials and read the political cartoons.

**Sub questions**

**Question Number : 156 Question Id : 5459275813 Question Type : MCQ Option Shuffling : Yes Display Question Number : Yes Single Line Question Option : No Option Orientation : Vertical**

**Correct Marks : 1 Wrong Marks : 0.25**

Choose a word which means the same as poignant

**Options :**

1. ✘ Cheerful
2. ✔ Disturbing
3. ✘ Wonderful
4. ✘ Blunt

**Question Number : 157 Question Id : 5459275814 Question Type : MCQ Option Shuffling : Yes Display Question Number : Yes Single Line Question Option : No Option Orientation : Vertical**

**Correct Marks : 1 Wrong Marks : 0.25**

Which of the following statements is not true?

**Options :**

1. ✔ American political cartoons never make fun of the politicians
2. ✘ Politicians are the subject of newspaper editorials page cartoon
3. ✘ In order to understand the feelings of Americans towards their politicians, one needs to read the editorials.
4. ✘ Political cartoons attract the attention of their readers.

**Question Number : 158 Question Id : 5459275815 Question Type : MCQ Option Shuffling : Yes Display Question Number : Yes Single Line Question Option : No Option Orientation : Vertical**

**Correct Marks : 1 Wrong Marks : 0.25**

Which of the following statements is false?

**Options :**

1. ✘ According to political cartoons, government officials are stupid.
2. ✔ It is not easy to target politicians because they are very powerful.
3. ✘ Political cartoons keep a watch on the day to day events.
4. ✘ No option is correct

Question Number : 159 Question Id : 5459275816 Question Type : MCQ Option Shuffling : Yes Display Question Number : Yes  
Single Line Question Option : No Option Orientation : Vertical

Correct Marks : 1 Wrong Marks : 0.25

Which of the following is true?

Options :

- ✘ Political cartoons often portray government officials as incapable or plain stupid
- ✘ Political cartoons stay on the pulse of current affairs
- ✔ Political cartoons often portray government officials as incapable or plain stupid and Political cartoons stay on the pulse of current affairs
- ✘ No option is correct

Question Number : 160 Question Id : 5459275817 Question Type : MCQ Option Shuffling : Yes Display Question Number : Yes  
Single Line Question Option : No Option Orientation : Vertical

Correct Marks : 1 Wrong Marks : 0.25

According to the passage how people with reverence are portrayed through a cartoon?

Options :

- ✘ These types of people do not get any mention in the cartoons
- ✘ A tribute through obituary is paid
- ✔ With the help of a poignant cartoon, the cartoonist tries to pay homage to the esteemed personality
- ✘ Such people are mentioned only in editorials

Question Id : 5459275812 Question Type : COMPREHENSION Sub Question Shuffling Allowed : Yes Group Comprehension  
Questions : No

Question Numbers : (156 to 160)

Question Label : Comprehension

Read the following information carefully and answer the given questions.

American politician cartoons often follow the general displeasure of the government by the American people. They run the gamut from economics to foreign policy to the overwhelming popular topic of bureaucracy. As an avid reader of politician cartoons on a daily basis, I enjoy the humour and cynicism found within these forms of speech. Not only can they poke fun at politicians for their behaviour, but they often raise a strong sense of values and morals in the person that reads him. From topics currently facing the United Nations, our federal government or current news events, the cartoonists use a medium that was once reserved for innocent humour and changes it, so that it draws the readers attention.

Since the beginnings of American political cartoons have often portrayed government officials as inept and sometimes just plain stupid. Politicians are very easy targets for the press and so became the subject of many daily papers editorial page cartoons. Although sometimes the cartoonist draws on current events and pay tribute to people who are often thought of with reverence. Take e.g. Charles Schultz on the day following his death most cartoons as well as political cartoons paid homage to a person who is considered the great cartoonist of all time. Other cartoon strips showed their characters attending his funeral or missing him in some other way. While the most poignant political cartoons I remembered about his death was by a cartoonist Mike Thompson of the Detroit free press. It showed Charlie Brown walking through the gates of heaven with an older man walking beside him and saying to him. "Now, a few pointers about kicking a football". The person walking with Charlie brown was Tom Landry. Political cartoons stay on the pulse of the current affairs and in doing so try to draw the attention of their audience of the topic and nudges them to take some kind of action. So if you want to know about how a segment of America feels turn to their editorials and read the political cartoons.

Sub questions

Question Number : 156 Question Id : 5459275813 Question Type : MCQ Option Shuffling : Yes Display Question Number : Yes  
Single Line Question Option : No Option Orientation : Vertical

Correct Marks : 1 Wrong Marks : 0.25

Choose a word which means the same as poignant

Options :

- ✘ Cheerful



2. ✓ Disturbing
3. ✗ Wonderful
4. ✗ Blunt

Question Number : 157 Question Id : 5459275814 Question Type : MCQ Option Shuffling : Yes Display Question Number : Yes  
Single Line Question Option : No Option Orientation : Vertical

Correct Marks : 1 Wrong Marks : 0.25

Which of the following statements is not true?

Options :

1. ✓ American political cartoons never make fun of the politicians
2. ✗ Politicians are the subject of newspaper editorials page cartoon
3. ✗ In order to understand the feelings of Americans towards their politicians, one needs to read the editorials.
4. ✗ Political cartoons attract the attention of their readers.

Question Number : 158 Question Id : 5459275815 Question Type : MCQ Option Shuffling : Yes Display Question Number : Yes  
Single Line Question Option : No Option Orientation : Vertical

Correct Marks : 1 Wrong Marks : 0.25

Which of the following statements is false?

Options :

1. ✗ According to political cartoons, government officials are stupid.
2. ✓ It is not easy to target politicians because they are very powerful.
3. ✗ Political cartoons keep a watch on the day to day events.
4. ✗ No option is correct

Question Number : 159 Question Id : 5459275816 Question Type : MCQ Option Shuffling : Yes Display Question Number : Yes  
Single Line Question Option : No Option Orientation : Vertical

Correct Marks : 1 Wrong Marks : 0.25

Which of the following is true?

Options :

1. ✗ Political cartoons often portray government officials as incapable or plain stupid
2. ✗ Political cartoons stay on the pulse of current affairs
3. ✓ Political cartoons often portray government officials as incapable or plain stupid and Political cartoons stay on the pulse of current affairs
4. ✗ No option is correct

Question Number : 160 Question Id : 5459275817 Question Type : MCQ Option Shuffling : Yes Display Question Number : Yes  
Single Line Question Option : No Option Orientation : Vertical

Correct Marks : 1 Wrong Marks : 0.25

According to the passage how people with reverence are portrayed through a cartoon?

Options :

1. ✗ These types of people do not get any mention in the cartoons
2. ✗ A tribute through obituary is paid
3. ✓ With the help of a poignant cartoon, the cartoonist tries to pay homage to the esteemed personality
4. ✗ Such people are mentioned only in editorials



Group Number :	9
Group Id :	545927289
Group Maximum Duration :	0
Group Minimum Duration :	0
Revisit allowed for view? :	No
Revisit allowed for edit? :	No
Break time:	0
Group Marks:	20
Revisit allowed for group Instructions? :	Yes
Maximum Instruction Time:	0
Minimum Instruction Time:	0

### General Hindi 1

Section Id :	545927289
Section Number :	1
Section type :	Online
Mandatory or Optional:	Mandatory
Number of Questions:	20
Number of Questions to be attempted:	20
Section Marks:	20
Display Number Panel:	Yes
Group All Questions:	No

Sub-Section Number:	1
Sub-Section Id:	545927346
Question Shuffling Allowed :	Yes

Question Number : 161 Question Id : 5459275818 Question Type : MCQ Option Shuffling : Yes Display Question Number : Yes  
Single Line Question Option : No Option Orientation : Vertical

Correct Marks : 1 Wrong Marks : 0.25

दिए गए शब्द में उपसर्ग का चयन कीजिए।

अनुशासन

Options :

1. ✘ अ
2. ✘ शासन
3. ✘ सन
4. ✔ अनु

Question Number : 161 Question Id : 5459275818 Question Type : MCQ Option Shuffling : Yes Display Question Number : Yes  
Single Line Question Option : No Option Orientation : Vertical

Correct Marks : 1 Wrong Marks : 0.25

दिए गए शब्द में उपसर्ग का चयन कीजिए।

अनुशासन

Options :

1. ✘ अ
2. ✘ शासन
3. ✘ सन

4. ✓ अनु

Question Number : 162 Question Id : 5459275819 Question Type : MCQ Option Shuffling : Yes Display Question Number : Yes  
Single Line Question Option : No Option Orientation : Vertical

Correct Marks : 1 Wrong Marks : 0.25

दिए गए शब्द का संधि विच्छेद कीजिए।

मतैक्य

Options :

1. ✓ मत + ऐक्य
2. ✗ मत + तैक्य
3. ✗ मत + क्य
4. ✗ मतै + क्य

Question Number : 162 Question Id : 5459275819 Question Type : MCQ Option Shuffling : Yes Display Question Number : Yes  
Single Line Question Option : No Option Orientation : Vertical

Correct Marks : 1 Wrong Marks : 0.25

दिए गए शब्द का संधि विच्छेद कीजिए।

मतैक्य

Options :

1. ✓ मत + ऐक्य
2. ✗ मत + तैक्य
3. ✗ मत + क्य
4. ✗ मतै + क्य

Question Number : 163 Question Id : 5459275820 Question Type : MCQ Option Shuffling : Yes Display Question Number : Yes  
Single Line Question Option : No Option Orientation : Vertical

Correct Marks : 1 Wrong Marks : 0.25

निम्नलिखित शब्द में से कौन सा तद्भव शब्द नहीं है?

Options :

1. ✗ नींद
2. ✗ चाँद
3. ✗ दही
4. ✓ हस्त

Question Number : 163 Question Id : 5459275820 Question Type : MCQ Option Shuffling : Yes Display Question Number : Yes  
Single Line Question Option : No Option Orientation : Vertical

Correct Marks : 1 Wrong Marks : 0.25

निम्नलिखित शब्द में से कौन सा तद्भव शब्द नहीं है?

Options :

1. ✗ नींद
2. ✗ चाँद
3. ✗ दही
4. ✓ हस्त

Question Number : 164 Question Id : 5459275821 Question Type : MCQ Option Shuffling : Yes Display Question Number : Yes  
Single Line Question Option : No Option Orientation : Vertical

Correct Marks : 1 Wrong Marks : 0.25

निम्नलिखित में से कौन सा उदाहरण पूर्वकालिक क्रिया का नहीं है?

Note: For this question, discrepancy is found in question/answer. So, this question is ignored for all candidates.

Options :

1. नंदन घर आकर खेलने गया
2. चिड़िया उड़कर पेड़ पर बैठ गई
3. बेटा, खाना खाकर चले जाना
4. रेवा सोने चली गई

Question Number : 164 Question Id : 5459275821 Question Type : MCQ Option Shuffling : Yes Display Question Number : Yes Single Line Question Option : No Option Orientation : Vertical

Correct Marks : 1 Wrong Marks : 0.25

निम्नलिखित में से कौन सा उदाहरण पूर्वकालिक क्रिया का नहीं है?

Note: For this question, discrepancy is found in question/answer. So, this question is ignored for all candidates.

Options :

1. नंदन घर आकर खेलने गया
2. चिड़िया उड़कर पेड़ पर बैठ गई
3. बेटा, खाना खाकर चले जाना
4. रेवा सोने चली गई

Question Number : 165 Question Id : 5459275822 Question Type : MCQ Option Shuffling : Yes Display Question Number : Yes Single Line Question Option : No Option Orientation : Vertical

Correct Marks : 1 Wrong Marks : 0.25

दिए गए वाक्य में रेखांकित भाग किस प्रकार विशेषण का भेद है ज्ञात कीजिए

लड़के ने नुकीला भाला फेंका

Options :

1. ✘ परिमाणवाचक
2. ✘ संख्यावाचक
3. ✔ गुणवाचक
4. ✘ सार्वनामिक

Question Number : 165 Question Id : 5459275822 Question Type : MCQ Option Shuffling : Yes Display Question Number : Yes Single Line Question Option : No Option Orientation : Vertical

Correct Marks : 1 Wrong Marks : 0.25

दिए गए वाक्य में रेखांकित भाग किस प्रकार विशेषण का भेद है ज्ञात कीजिए

लड़के ने नुकीला भाला फेंका

Options :

1. ✘ परिमाणवाचक
2. ✘ संख्यावाचक
3. ✔ गुणवाचक
4. ✘ सार्वनामिक

Question Number : 166 Question Id : 5459275823 Question Type : MCQ Option Shuffling : Yes Display Question Number : Yes Single Line Question Option : No Option Orientation : Vertical

Correct Marks : 1 Wrong Marks : 0.25

निम्नलिखित में से कौन सा समानार्थक शब्द का युग्म का उदाहरण है?

Options :

1. ✘ सुबह - शाम

2. ✘ सुख - दुःख
3. ✔ मार - पीट
4. ✘ आदान - प्रदान

Question Number : 166 Question Id : 5459275823 Question Type : MCQ Option Shuffling : Yes Display Question Number : Yes  
Single Line Question Option : No Option Orientation : Vertical

Correct Marks : 1 Wrong Marks : 0.25

निम्नलिखित में से कौन सा समानार्थक शब्द का युग्म का उदाहरण है?

Options :

1. ✘ सुबह - शाम
2. ✘ सुख - दुःख
3. ✔ मार - पीट
4. ✘ आदान - प्रदान

Question Number : 167 Question Id : 5459275824 Question Type : MCQ Option Shuffling : Yes Display Question Number : Yes  
Single Line Question Option : No Option Orientation : Vertical

Correct Marks : 1 Wrong Marks : 0.25

दिए गए वाक्य के लिए उचित शब्द का चयन कीजिए  
जो अपना वध स्वयं करता हो।

Options :

1. ✔ आत्मवध
2. ✘ आत्मरक्षा
3. ✘ आत्मघाती
4. ✘ आत्मघाति

Question Number : 167 Question Id : 5459275824 Question Type : MCQ Option Shuffling : Yes Display Question Number : Yes  
Single Line Question Option : No Option Orientation : Vertical

Correct Marks : 1 Wrong Marks : 0.25

दिए गए वाक्य के लिए उचित शब्द का चयन कीजिए  
जो अपना वध स्वयं करता हो।

Options :

1. ✔ आत्मवध
2. ✘ आत्मरक्षा
3. ✘ आत्मघाती
4. ✘ आत्मघाति

Question Number : 168 Question Id : 5459275825 Question Type : MCQ Option Shuffling : Yes Display Question Number : Yes  
Single Line Question Option : No Option Orientation : Vertical

Correct Marks : 1 Wrong Marks : 0.25

निम्नलिखित में से समानार्थक शब्द का युग्म कौन सा है?

Options :

1. ✔ इष्ट - मित्र
2. ✘ इधर - उधर
3. ✘ लेन - देन
4. ✘ हार - जीत

Question Number : 168 Question Id : 5459275825 Question Type : MCQ Option Shuffling : Yes Display Question Number : Yes  
Single Line Question Option : No Option Orientation : Vertical

Correct Marks : 1 Wrong Marks : 0.25

निम्नलिखित में से समानार्थक शब्द का युग्म कौन सा है?

Options :

1. ✓ इष्ट - मित्र
2. ✗ इधर - उधर
3. ✗ लेन - देन
4. ✗ हार - जीत

Question Number : 169 Question Id : 5459275826 Question Type : MCQ Option Shuffling : Yes Display Question Number : Yes  
Single Line Question Option : No Option Orientation : Vertical

Correct Marks : 1 Wrong Marks : 0.25

दिए गए शब्द का विलोम शब्द ज्ञात कीजिए।

भौतिक

Options :

1. ✓ आध्यात्मिक
2. ✗ पैतिक
3. ✗ वैदिक
4. ✗ नैतिक

Question Number : 169 Question Id : 5459275826 Question Type : MCQ Option Shuffling : Yes Display Question Number : Yes  
Single Line Question Option : No Option Orientation : Vertical

Correct Marks : 1 Wrong Marks : 0.25

दिए गए शब्द का विलोम शब्द ज्ञात कीजिए।

भौतिक

Options :

1. ✓ आध्यात्मिक
2. ✗ पैतिक
3. ✗ वैदिक
4. ✗ नैतिक

Question Number : 170 Question Id : 5459275827 Question Type : MCQ Option Shuffling : Yes Display Question Number : Yes  
Single Line Question Option : No Option Orientation : Vertical

Correct Marks : 1 Wrong Marks : 0.25

दिए गए वाक्य के लिए उचित शब्द का चयन कीजिए।

जिसका पान न किया जा सके।

Options :

1. ✗ अपान
2. ✗ अनपान
3. ✓ अपेय
4. ✗ नपान

Question Number : 170 Question Id : 5459275827 Question Type : MCQ Option Shuffling : Yes Display Question Number : Yes  
Single Line Question Option : No Option Orientation : Vertical

Correct Marks : 1 Wrong Marks : 0.25

दिए गए वाक्य के लिए उचित शब्द का चयन कीजिए।

जिसका पान न किया जा सके।

Options :

1. ✘ अपान
2. ✘ अनपान
3. ✔ अपेय
4. ✘ नपान

Question Number : 171 Question Id : 5459275828 Question Type : MCQ Option Shuffling : Yes Display Question Number : Yes  
Single Line Question Option : No Option Orientation : Vertical

Correct Marks : 1 Wrong Marks : 0.25

दिए गए शब्दों में से शुद्ध शब्द का चयन कीजिए

Options :

1. ✘ सम्पूर्ण
2. ✘ सपूर्ण
3. ✔ संपूर्ण
4. ✘ संपूर्ण

Question Number : 171 Question Id : 5459275828 Question Type : MCQ Option Shuffling : Yes Display Question Number : Yes  
Single Line Question Option : No Option Orientation : Vertical

Correct Marks : 1 Wrong Marks : 0.25

दिए गए शब्दों में से शुद्ध शब्द का चयन कीजिए

Options :

1. ✘ सम्पूर्ण
2. ✘ सपूर्ण
3. ✔ संपूर्ण
4. ✘ संपूर्ण

Question Number : 172 Question Id : 5459275829 Question Type : MCQ Option Shuffling : Yes Display Question Number : Yes  
Single Line Question Option : No Option Orientation : Vertical

Correct Marks : 1 Wrong Marks : 0.25

दिए गए शब्द किसके पर्यायवाची हैं ज्ञात कीजिए

शैलेश, गिरीश, नगेश

Options :

1. ✘ बादल
2. ✔ हिमालय
3. ✘ भगवान
4. ✘ सूर्य

Question Number : 172 Question Id : 5459275829 Question Type : MCQ Option Shuffling : Yes Display Question Number : Yes  
Single Line Question Option : No Option Orientation : Vertical

Correct Marks : 1 Wrong Marks : 0.25

दिए गए शब्द किसके पर्यायवाची हैं ज्ञात कीजिए

शैलेश, गिरीश, नगेश

Options :

1. ✘ बादल
2. ✔ हिमालय
3. ✘ भगवान
4. ✘ सूर्य

Question Number : 173 Question Id : 5459275830 Question Type : MCQ Option Shuffling : Yes Display Question Number : Yes  
Single Line Question Option : No Option Orientation : Vertical

Correct Marks : 1 Wrong Marks : 0.25

दिए गए शब्द युग्म का अर्थ ज्ञात कीजिए

कटि - कटी

Options :

1. ✘ कमर - हथियार
2. ✘ कंजूस - माता
3. ✘ पुराना - कमर
4. ✔ कमर - कटना

Question Number : 173 Question Id : 5459275830 Question Type : MCQ Option Shuffling : Yes Display Question Number : Yes  
Single Line Question Option : No Option Orientation : Vertical

Correct Marks : 1 Wrong Marks : 0.25

दिए गए शब्द युग्म का अर्थ ज्ञात कीजिए

कटि - कटी

Options :

1. ✘ कमर - हथियार
2. ✘ कंजूस - माता
3. ✘ पुराना - कमर
4. ✔ कमर - कटना

Question Number : 174 Question Id : 5459275831 Question Type : MCQ Option Shuffling : Yes Display Question Number : Yes  
Single Line Question Option : No Option Orientation : Vertical

Correct Marks : 1 Wrong Marks : 0.25

दिए गए में रिक्त स्थान की पूर्ति कीजिए

राम \_\_\_\_\_ सोच कर बोला करो

Options :

1. ✔ जरा
2. ✘ कुछ
3. ✘ अधिक
4. ✘ पर्याप्त

Question Number : 174 Question Id : 5459275831 Question Type : MCQ Option Shuffling : Yes Display Question Number : Yes  
Single Line Question Option : No Option Orientation : Vertical

Correct Marks : 1 Wrong Marks : 0.25

दिए गए में रिक्त स्थान की पूर्ति कीजिए

राम \_\_\_\_\_ सोच कर बोला करो

Options :

1. ✔ जरा
2. ✘ कुछ
3. ✘ अधिक
4. ✘ पर्याप्त

Question Number : 175 Question Id : 5459275832 Question Type : MCQ Option Shuffling : Yes Display Question Number : Yes  
Single Line Question Option : No Option Orientation : Vertical

Correct Marks : 1 Wrong Marks : 0.25

दिए गए शब्द का विलोम शब्द ज्ञात कीजिए।

कृत्रिम

Options :

1. ✘ सामिष
2. ✔ स्वाभाविक
3. ✘ सरल
4. ✘ बनावटी

Question Number : 175 Question Id : 5459275832 Question Type : MCQ Option Shuffling : Yes Display Question Number : Yes  
Single Line Question Option : No Option Orientation : Vertical

Correct Marks : 1 Wrong Marks : 0.25

दिए गए शब्द का विलोम शब्द ज्ञात कीजिए।

कृत्रिम

Options :

1. ✘ सामिष
2. ✔ स्वाभाविक
3. ✘ सरल
4. ✘ बनावटी

Question Number : 176 Question Id : 5459275833 Question Type : MCQ Option Shuffling : Yes Display Question Number : Yes  
Single Line Question Option : No Option Orientation : Vertical

Correct Marks : 1 Wrong Marks : 0.25

दिए गए वाक्य के लिए एक शब्द का चयन कीजिए।

विष्णु का भक्त

Options :

1. ✘ कृष्णन
2. ✔ वैष्णव
3. ✘ सनातनी
4. ✘ आर्यसमाजी

Question Number : 176 Question Id : 5459275833 Question Type : MCQ Option Shuffling : Yes Display Question Number : Yes  
Single Line Question Option : No Option Orientation : Vertical

Correct Marks : 1 Wrong Marks : 0.25

दिए गए वाक्य के लिए एक शब्द का चयन कीजिए।

विष्णु का भक्त

Options :

1. ✘ कृष्णन
2. ✔ वैष्णव
3. ✘ सनातनी
4. ✘ आर्यसमाजी

Question Number : 177 Question Id : 5459275834 Question Type : MCQ Option Shuffling : Yes Display Question Number : Yes  
Single Line Question Option : No Option Orientation : Vertical

Correct Marks : 1 Wrong Marks : 0.25

दिए गए शब्दों में से स्त्रीलिंग शब्द का चयन कीजिए।

Options :



1. ✘ नगर
2. ✘ सोमवार
3. ✘ चैत्र
4. ✔ ऋतु

Question Number : 177 Question Id : 5459275834 Question Type : MCQ Option Shuffling : Yes Display Question Number : Yes  
Single Line Question Option : No Option Orientation : Vertical

Correct Marks : 1 Wrong Marks : 0.25

दिए गए शब्दों में से स्त्रीलिंग शब्द का चयन कीजिए।

Options :

1. ✘ नगर
2. ✘ सोमवार
3. ✘ चैत्र
4. ✔ ऋतु

Question Number : 178 Question Id : 5459275835 Question Type : MCQ Option Shuffling : Yes Display Question Number : Yes  
Single Line Question Option : No Option Orientation : Vertical

Correct Marks : 1 Wrong Marks : 0.25

दिए गए शब्द का विभक्ति चिह्न ज्ञात कीजिए।  
सम्बन्ध कारक

Options :

1. ✘ को, के लिए
2. ✔ का, की, के, रा, री, रे
3. ✘ में, पर
4. ✘ से

Question Number : 178 Question Id : 5459275835 Question Type : MCQ Option Shuffling : Yes Display Question Number : Yes  
Single Line Question Option : No Option Orientation : Vertical

Correct Marks : 1 Wrong Marks : 0.25

दिए गए शब्द का विभक्ति चिह्न ज्ञात कीजिए।  
सम्बन्ध कारक

Options :

1. ✘ को, के लिए
2. ✔ का, की, के, रा, री, रे
3. ✘ में, पर
4. ✘ से

Question Number : 179 Question Id : 5459275836 Question Type : MCQ Option Shuffling : Yes Display Question Number : Yes  
Single Line Question Option : No Option Orientation : Vertical

Correct Marks : 1 Wrong Marks : 0.25

दिए गए वाक्य के वाच्य का चयन कीजिए।

लिखा नहीं जाता

Options :

1. ✘ कर्तृवाच्य
2. ✔ भाववाच्य
3. ✘ कर्मवाच्य
4. ✘ इनमें से कोई नहीं

Question Number : 179 Question Id : 5459275836 Question Type : MCQ Option Shuffling : Yes Display Question Number : Yes  
Single Line Question Option : No Option Orientation : Vertical

Correct Marks : 1 Wrong Marks : 0.25

दिए गए वाक्य के वाच्य का चयन कीजिए।

लिखा नहीं जाता

Options :

1. ✘ कर्तृवाच्य
2. ✔ भाववाच्य
3. ✘ कर्मवाच्य
4. ✘ इनमें से कोई नहीं

Question Number : 180 Question Id : 5459275837 Question Type : MCQ Option Shuffling : Yes Display Question Number : Yes  
Single Line Question Option : No Option Orientation : Vertical

Correct Marks : 1 Wrong Marks : 0.25

'भूतकाल' के कितने भेद होते हैं?

Options :

1. ✘ चार
2. ✔ छः
3. ✘ आठ
4. ✘ दस

Question Number : 180 Question Id : 5459275837 Question Type : MCQ Option Shuffling : Yes Display Question Number : Yes  
Single Line Question Option : No Option Orientation : Vertical

Correct Marks : 1 Wrong Marks : 0.25

'भूतकाल' के कितने भेद होते हैं?

Options :

1. ✘ चार
2. ✔ छः
3. ✘ आठ
4. ✘ दस

## General Hindi2

Group Number :	10
Group Id :	545927290
Group Maximum Duration :	0
Group Minimum Duration :	120
Revisit allowed for view? :	No
Revisit allowed for edit? :	No
Break time:	0
Group Marks:	20
Revisit allowed for group Instructions? :	Yes
Maximum Instruction Time:	0
Minimum Instruction Time:	0

## General Hindi2

Section Id : 545927290

Section Number :	1
Section type :	Online
Mandatory or Optional:	Mandatory
Number of Questions:	16
Number of Questions to be attempted:	16
Section Marks:	20
Display Number Panel:	Yes
Group All Questions:	No

Sub-Section Number:	1
Sub-Section Id:	545927347
Question Shuffling Allowed :	Yes

Question Number : 181 Question Id : 5459275838 Question Type : MCQ Option Shuffling : Yes Display Question Number : Yes  
Single Line Question Option : No Option Orientation : Vertical

Correct Marks : 1 Wrong Marks : 0.25

दिए गए वाक्य का पक्ष ज्ञात कीजिए।

जिससे कार्य के बार - बार होने का पता चलता हो

Options :

1. ✓ नित्य पक्ष
2. ✗ सातत्य बोधक पक्ष
3. ✗ पूर्ण पक्ष
4. ✗ स्थित्यामक पक्ष

Question Number : 181 Question Id : 5459275838 Question Type : MCQ Option Shuffling : Yes Display Question Number : Yes  
Single Line Question Option : No Option Orientation : Vertical

Correct Marks : 1 Wrong Marks : 0.25

दिए गए वाक्य का पक्ष ज्ञात कीजिए।

जिससे कार्य के बार - बार होने का पता चलता हो

Options :

1. ✓ नित्य पक्ष
2. ✗ सातत्य बोधक पक्ष
3. ✗ पूर्ण पक्ष
4. ✗ स्थित्यामक पक्ष

Question Number : 182 Question Id : 5459275839 Question Type : MCQ Option Shuffling : Yes Display Question Number : Yes  
Single Line Question Option : No Option Orientation : Vertical

Correct Marks : 1 Wrong Marks : 0.25

निम्नलिखित में से कौन सा उदाहरण स्थित्यामक पक्ष का नहीं है?

Options :

1. ✗ किताब अलमारी में है
2. ✗ राम डाक्टर है
3. ✗ किताब मेज पर थी
4. ✓ मैं रोज सैर करती हूँ

Question Number : 182 Question Id : 5459275839 Question Type : MCQ Option Shuffling : Yes Display Question Number : Yes  
Single Line Question Option : No Option Orientation : Vertical

Correct Marks : 1 Wrong Marks : 0.25

निम्नलिखित में से कौन सा उदाहरण स्थित्यामक पक्ष का नहीं है?

Options :

1. ✘ किताब अलमारी में है
2. ✘ राम डाक्टर है
3. ✘ किताब मेज पर थी
4. ✔ मैं रोज सैर करती हूँ

Question Number : 183 Question Id : 5459275840 Question Type : MCQ Option Shuffling : Yes Display Question Number : Yes  
Single Line Question Option : No Option Orientation : Vertical

Correct Marks : 1 Wrong Marks : 0.25

दिया गया वाक्य कौन सी वृत्ति का उदाहरण है ज्ञात कीजिए।

मेरा काम जल्दी करो।

Options :

1. ✔ आज्ञार्थक
2. ✘ निश्चियार्थक
3. ✘ संकेतार्थक
4. ✘ संभावनार्थक

Question Number : 183 Question Id : 5459275840 Question Type : MCQ Option Shuffling : Yes Display Question Number : Yes  
Single Line Question Option : No Option Orientation : Vertical

Correct Marks : 1 Wrong Marks : 0.25

दिया गया वाक्य कौन सी वृत्ति का उदाहरण है ज्ञात कीजिए।

मेरा काम जल्दी करो।

Options :

1. ✔ आज्ञार्थक
2. ✘ निश्चियार्थक
3. ✘ संकेतार्थक
4. ✘ संभावनार्थक

Question Number : 184 Question Id : 5459275841 Question Type : MCQ Option Shuffling : Yes Display Question Number : Yes  
Single Line Question Option : No Option Orientation : Vertical

Correct Marks : 1 Wrong Marks : 0.25

दिए गए वाक्यों में से शुद्ध वाक्य का चयन कीजिए।

Options :

1. ✘ कल रात बारात में मैं एक सज्जन पुरुष से मिला।
2. ✘ कल रात बरात में मैं सज्जन पुरुष से मिला।
3. ✘ कल रात बरात में मैं एक पुरुष सज्जन से मिला।
4. ✔ कल रात बरात में मैं एक सज्जन से मिला।

Question Number : 184 Question Id : 5459275841 Question Type : MCQ Option Shuffling : Yes Display Question Number : Yes  
Single Line Question Option : No Option Orientation : Vertical

Correct Marks : 1 Wrong Marks : 0.25

दिए गए वाक्यों में से शुद्ध वाक्य का चयन कीजिए।

Options :

1. ✘ कल रात बारात में मैं एक सज्जन पुरुष से मिला।
2. ✘ कल रात बरात में मैं सज्जन पुरुष से मिला।
3. ✘ कल रात बरात में मैं एक पुरुष सज्जन से मिला।

4. ✓ कल रात बरात में मैं एक सज्जन से मिला।

Question Number : 185 Question Id : 5459275842 Question Type : MCQ Option Shuffling : Yes Display Question Number : Yes  
Single Line Question Option : No Option Orientation : Vertical

Correct Marks : 1 Wrong Marks : 0.25

दिए वाक्य में रेखांकित भाग किस प्रकार का पुरुष है ज्ञात कीजिए।

सचिन एक ईमानदार व्यक्ति है

Options :

1. ✓ अन्य
2. ✗ उत्तम
3. ✗ मध्यम
4. ✗ कोई नहीं

Question Number : 185 Question Id : 5459275842 Question Type : MCQ Option Shuffling : Yes Display Question Number : Yes  
Single Line Question Option : No Option Orientation : Vertical

Correct Marks : 1 Wrong Marks : 0.25

दिए वाक्य में रेखांकित भाग किस प्रकार का पुरुष है ज्ञात कीजिए।

सचिन एक ईमानदार व्यक्ति है

Options :

1. ✓ अन्य
2. ✗ उत्तम
3. ✗ मध्यम
4. ✗ कोई नहीं

Question Number : 186 Question Id : 5459275843 Question Type : MCQ Option Shuffling : Yes Display Question Number : Yes  
Single Line Question Option : No Option Orientation : Vertical

Correct Marks : 1 Wrong Marks : 0.25

दिए गए वाक्य के प्रकार की पहचान कीजिए।

वह कानपुर गया और काम करने लगा

Options :

1. ✓ संयुक्त
2. ✗ सरल
3. ✗ मिश्र
4. ✗ उपवाक्य

Question Number : 186 Question Id : 5459275843 Question Type : MCQ Option Shuffling : Yes Display Question Number : Yes  
Single Line Question Option : No Option Orientation : Vertical

Correct Marks : 1 Wrong Marks : 0.25

दिए गए वाक्य के प्रकार की पहचान कीजिए।

वह कानपुर गया और काम करने लगा

Options :

1. ✓ संयुक्त
2. ✗ सरल
3. ✗ मिश्र
4. ✗ उपवाक्य

Question Number : 187 Question Id : 5459275844 Question Type : MCQ Option Shuffling : Yes Display Question Number : Yes  
Single Line Question Option : No Option Orientation : Vertical

Correct Marks : 1 Wrong Marks : 0.25

निम्नलिखित प्रश्न में, दिए गए चार विकल्पों में से, उस विकल्प का चयन करें जो दिए गए मुहावरे के अर्थ को सर्वश्रेष्ठ रूप से व्यक्त करता है।

अन्धों में काना राजा

Options :

1. ✘ राजा हमेशा अन्धा होता है
2. ✘ प्रजा की आँखे खराब होती है
3. ✔ मूर्खों में कम विद्वान भी श्रेष्ठ माना जाता है
4. ✘ मूर्खों में मूर्ख ही श्रेष्ठ माना जाता है

Question Number : 187 Question Id : 5459275844 Question Type : MCQ Option Shuffling : Yes Display Question Number : Yes  
Single Line Question Option : No Option Orientation : Vertical

Correct Marks : 1 Wrong Marks : 0.25

निम्नलिखित प्रश्न में, दिए गए चार विकल्पों में से, उस विकल्प का चयन करें जो दिए गए मुहावरे के अर्थ को सर्वश्रेष्ठ रूप से व्यक्त करता है।

अन्धों में काना राजा

Options :

1. ✘ राजा हमेशा अन्धा होता है
2. ✘ प्रजा की आँखे खराब होती है
3. ✔ मूर्खों में कम विद्वान भी श्रेष्ठ माना जाता है
4. ✘ मूर्खों में मूर्ख ही श्रेष्ठ माना जाता है

Question Number : 188 Question Id : 5459275845 Question Type : MCQ Option Shuffling : Yes Display Question Number : Yes  
Single Line Question Option : No Option Orientation : Vertical

Correct Marks : 1 Wrong Marks : 0.25

निम्नलिखित प्रश्न में, दिए गए चार विकल्पों में से, उस विकल्प का चयन करें जो दिए गए मुहावरे के अर्थ को सर्वश्रेष्ठ रूप से व्यक्त करता है।

अपना उल्लू सीधा करना

Options :

1. ✔ मतलब निकालना
2. ✘ उल्लू को सीधा बिठाना
3. ✘ पैसा निकालना
4. ✘ लक्ष्मी पूजन करना

Question Number : 188 Question Id : 5459275845 Question Type : MCQ Option Shuffling : Yes Display Question Number : Yes  
Single Line Question Option : No Option Orientation : Vertical

Correct Marks : 1 Wrong Marks : 0.25

निम्नलिखित प्रश्न में, दिए गए चार विकल्पों में से, उस विकल्प का चयन करें जो दिए गए मुहावरे के अर्थ को सर्वश्रेष्ठ रूप से व्यक्त करता है।

अपना उल्लू सीधा करना

Options :

1. ✔ मतलब निकालना
2. ✘ उल्लू को सीधा बिठाना
3. ✘ पैसा निकालना
4. ✘ लक्ष्मी पूजन करना

Question Number : 189 Question Id : 5459275846 Question Type : MCQ Option Shuffling : Yes Display Question Number : Yes  
Single Line Question Option : No Option Orientation : Vertical

Correct Marks : 1 Wrong Marks : 0.25

निम्नलिखित प्रश्न में, दिए गए चार विकल्पों में से, उस विकल्प का चयन करें जो दिए गए मुहावरे के अर्थ को सर्वश्रेष्ठ रूप से व्यक्त करता है।

ग्वालिन अपने दही को खट्टा नहीं कहती

Options :

1. ✘ ग्वालिन मीठी दही बेचती है।
2. ✘ अपनी वस्तु का बखान करना।
3. ✘ अपनी दही को मीठा कहना।
4. ✔ कोई भी व्यक्ति अपनी वस्तु की बुराई नहीं करता।

Question Number : 189 Question Id : 5459275846 Question Type : MCQ Option Shuffling : Yes Display Question Number : Yes  
Single Line Question Option : No Option Orientation : Vertical

Correct Marks : 1 Wrong Marks : 0.25

निम्नलिखित प्रश्न में, दिए गए चार विकल्पों में से, उस विकल्प का चयन करें जो दिए गए मुहावरे के अर्थ को सर्वश्रेष्ठ रूप से व्यक्त करता है।

ग्वालिन अपने दही को खट्टा नहीं कहती

Options :

1. ✘ ग्वालिन मीठी दही बेचती है।
2. ✘ अपनी वस्तु का बखान करना।
3. ✘ अपनी दही को मीठा कहना।
4. ✔ कोई भी व्यक्ति अपनी वस्तु की बुराई नहीं करता।

Question Number : 190 Question Id : 5459275847 Question Type : MCQ Option Shuffling : Yes Display Question Number : Yes  
Single Line Question Option : No Option Orientation : Vertical

Correct Marks : 1 Wrong Marks : 0.25

दिए गए शब्दों के लिए उचित मुहावरे का चयन कीजिए।

धोखेबाज

Options :

1. ✔ आस्तीन का साँप
2. ✘ काठ का उल्लू
3. ✘ भैंस के आगे बीन बजाना
4. ✘ घोड़े पर सवार होना

Question Number : 190 Question Id : 5459275847 Question Type : MCQ Option Shuffling : Yes Display Question Number : Yes  
Single Line Question Option : No Option Orientation : Vertical

Correct Marks : 1 Wrong Marks : 0.25

दिए गए शब्दों के लिए उचित मुहावरे का चयन कीजिए।

धोखेबाज

Options :

1. ✔ आस्तीन का साँप
2. ✘ काठ का उल्लू
3. ✘ भैंस के आगे बीन बजाना
4. ✘ घोड़े पर सवार होना

Question Number : 191 Question Id : 5459275848 Question Type : MCQ Option Shuffling : Yes Display Question Number : Yes  
Single Line Question Option : No Option Orientation : Vertical

Correct Marks : 1 Wrong Marks : 0.25

दिए गए वाक्य के लिए सही लोकोक्ति का चयन कीजिए।

दूर की वस्तु अच्छी लगना।

Options :

1. ✘ दूर की आवाज
2. ✘ दूर रहने में भलाई होना
3. ✘ ढोल पीटना
4. ✔ दूर के ढोल सुहावने

Question Number : 191 Question Id : 5459275848 Question Type : MCQ Option Shuffling : Yes Display Question Number : Yes  
Single Line Question Option : No Option Orientation : Vertical

Correct Marks : 1 Wrong Marks : 0.25

दिए गए वाक्य के लिए सही लोकोक्ति का चयन कीजिए।

दूर की वस्तु अच्छी लगना।

Options :

1. ✘ दूर की आवाज
2. ✘ दूर रहने में भलाई होना
3. ✘ ढोल पीटना
4. ✔ दूर के ढोल सुहावने

Question Number : 192 Question Id : 5459275849 Question Type : MCQ Option Shuffling : Yes Display Question Number : Yes  
Single Line Question Option : No Option Orientation : Vertical

Correct Marks : 1 Wrong Marks : 0.25

अर्थ को स्पष्ट करने तथा संदेह दूर करने के लिए किस विराम चिह्न का प्रयोग किया जाता है?

Options :

1. ✘ अल्पविराम
2. ✘ पूर्णविराम
3. ✘ प्रश्नवाचक
4. ✔ अर्द्धविराम

Question Number : 192 Question Id : 5459275849 Question Type : MCQ Option Shuffling : Yes Display Question Number : Yes  
Single Line Question Option : No Option Orientation : Vertical

Correct Marks : 1 Wrong Marks : 0.25

अर्थ को स्पष्ट करने तथा संदेह दूर करने के लिए किस विराम चिह्न का प्रयोग किया जाता है?

Options :

1. ✘ अल्पविराम
2. ✘ पूर्णविराम
3. ✘ प्रश्नवाचक
4. ✔ अर्द्धविराम

Question Number : 193 Question Id : 5459275850 Question Type : MCQ Option Shuffling : Yes Display Question Number : Yes  
Single Line Question Option : No Option Orientation : Vertical

Correct Marks : 1 Wrong Marks : 0.25

दिए गए विराम चिह्न के रूप की पहचान कीजिए।

‘।’

Note: For this question, discrepancy is found in question/answer. So, this question is ignored for all candidates.

Options :

1. लाघव
2. उद्धरण



3. संयोजक
4. कोष्ठक

Question Number : 193 Question Id : 5459275850 Question Type : MCQ Option Shuffling : Yes Display Question Number : Yes  
Single Line Question Option : No Option Orientation : Vertical

Correct Marks : 1 Wrong Marks : 0.25

दिए गए विराम चिह्न के रूप की पहचान कीजिए

'।'

Note: For this question, discrepancy is found in question/answer. So, this question is ignored for all candidates.

Options :

1. लाघव
2. उद्धरण
3. संयोजक
4. कोष्ठक

Question Number : 194 Question Id : 5459275851 Question Type : MCQ Option Shuffling : Yes Display Question Number : Yes  
Single Line Question Option : No Option Orientation : Vertical

Correct Marks : 1 Wrong Marks : 0.25

दिए गए वाक्य में कौन सा विराम चिह्न है ज्ञात कीजिए

गांधी जी ने कहा है - करो या मरो

Options :

1. ✘ ०, ।
2. ✘ 0, ।
3. ✔ " ", ।
4. ✘ -, ।

Question Number : 194 Question Id : 5459275851 Question Type : MCQ Option Shuffling : Yes Display Question Number : Yes  
Single Line Question Option : No Option Orientation : Vertical

Correct Marks : 1 Wrong Marks : 0.25

दिए गए वाक्य में कौन सा विराम चिह्न है ज्ञात कीजिए

गांधी जी ने कहा है - करो या मरो

Options :

1. ✘ ०, ।
2. ✘ 0, ।
3. ✔ " ", ।
4. ✘ -, ।

Question Number : 195 Question Id : 5459275852 Question Type : MCQ Option Shuffling : Yes Display Question Number : Yes  
Single Line Question Option : No Option Orientation : Vertical

Correct Marks : 1 Wrong Marks : 0.25

दिए गए मुहावरे के सही अर्थ का चयन कीजिए

नाच ना आए आंगन टेढ़ा

Options :

1. ✘ आंगन का टेढ़ा होना
2. ✔ कार्य न आने पर बहाना बनाना
3. ✘ पैर फिसल जाना

4. ✘ नाच गलत करना

Question Number : 195 Question Id : 5459275852 Question Type : MCQ Option Shuffling : Yes Display Question Number : Yes  
Single Line Question Option : No Option Orientation : Vertical

Correct Marks : 1 Wrong Marks : 0.25

दिए गए मुहावरे के सही अर्थ का चयन कीजिए।

नाच ना आए आंगन टेढ़ा

Options :

1. ✘ आंगन का टेढ़ा होना
2. ✔ कार्य न आने पर बहाना बनाना
3. ✘ पैर फिसल जाना
4. ✘ नाच गलत करना

Sub-Section Number: 2  
Sub-Section Id: 545927348  
Question Shuffling Allowed : Yes

Question Id : 5459275853 Question Type : COMPREHENSION Sub Question Shuffling Allowed : Yes Group Comprehension  
Questions : No

Question Numbers : (196 to 200)

Question Label : Comprehension

एक गद्यांश दिया गया है। गद्यांश के आधार पर पाँच प्रश्न दिए गए हैं। गद्यांश को ध्यानपूर्वक पढ़ें तथा प्रत्येक प्रश्न में चार विकल्पों में से सही विकल्प चुनें।

आजकल हंसी भी दुर्लभ होती जा रही है। सभी के चेहरों पर तनाव, चिंता, दुख, उदासी अधिकतर दिखाई देती है। मुस्कराते हुए चेहरों का मानों अकाल ही पड़ गया है। क्या आप जानते हैं कि एक व्यस्क मनुष्य एक बच्चे के मुकाबले केवल 30% हंसता है। यही कारण है कि आजकल के तनावपूर्ण जीवन में मनुष्य अनेक घातक बीमारियों का शिकार होता जा रहा है। हंसना सेहत के लिए उतना ही आवश्यक है, जितना कि भोजन करना। हंसने से शरीर में रक्त संचार भली प्रकार से होता है और अनेक प्रकार के रोगों से तथा तनाव से लड़ने की क्षमता बढ़ती है। चाहे आपको कितनी देर क्यों ना हो परंतु अपने लिए समय अवश्य निकालना चाहिए जिसमें आप दोबारा बच्चा बनकर वही हंसी और खुशी प्राप्त कर सकें जो आपको बचपन में मिली थी। आज तो यह नारा होना चाहिए हँसो-हँसाओ, जीवन खुशहाल बनाओ।

Sub questions

Question Number : 196 Question Id : 5459275854 Question Type : MCQ Option Shuffling : Yes Display Question Number : Yes  
Single Line Question Option : No Option Orientation : Vertical

Correct Marks : 1 Wrong Marks : 0.25

आजकल क्या कम देखने को मिलता है?

Options :

1. ✔ हँसी
2. ✘ कारें
3. ✘ मुखौटे
4. ✘ दुख

Question Number : 197 Question Id : 5459275855 Question Type : MCQ Option Shuffling : Yes Display Question Number : Yes  
Single Line Question Option : No Option Orientation : Vertical

Correct Marks : 1 Wrong Marks : 0.25

उपर्युक्त गद्यांश के लिए शीर्षक क्या है?

Options :

1. ✘ खुशहाल जीवन
2. ✘ हँसी की दुर्लभता
3. ✔ हँसी का महत्व

#### 4. ✖ तनावग्रस्त जीवन

Question Number : 198 Question Id : 5459275856 Question Type : MCQ Option Shuffling : Yes Display Question Number : Yes  
Single Line Question Option : No Option Orientation : Vertical

Correct Marks : 1 Wrong Marks : 0.25

हँसना शरीर के लिए कितना आवश्यक है?

Options :

1. ✖ सांस लेना
2. ✔ खाना खाना
3. ✖ नाचना
4. ✖ गुस्सा करना

Question Number : 199 Question Id : 5459275857 Question Type : MCQ Option Shuffling : Yes Display Question Number : Yes  
Single Line Question Option : No Option Orientation : Vertical

Correct Marks : 1 Wrong Marks : 0.25

हँसने से क्या फायदा होता है?

Options :

1. ✖ पैसे मिलते हैं
2. ✖ तनावमुक्त होते हैं
3. ✔ तनाव से लड़ने की क्षमता मिलती है
4. ✖ बीमार होते हैं

Question Number : 200 Question Id : 5459275858 Question Type : MCQ Option Shuffling : Yes Display Question Number : Yes  
Single Line Question Option : No Option Orientation : Vertical

Correct Marks : 1 Wrong Marks : 0.25

अपने लिए समय अवश्य जरूर निकालना चाहिए से क्या तात्पर्य है?

Options :

1. ✖ अपने को शीशे में देखना चाहिए
2. ✖ अपने साथ खेलना चाहिए
3. ✔ अपने बचपन जैसे हँसना खेलना चाहिए
4. ✖ अपने बच्चों को खेलने नहीं देना चाहिए

Question Id : 5459275853 Question Type : COMPREHENSION Sub Question Shuffling Allowed : Yes Group Comprehension  
Questions : No

Question Numbers : (196 to 200)

Question Label : Comprehension

एक गद्यांश दिया गया है। गद्यांश के आधार पर पाँच प्रश्न दिए गए हैं। गद्यांश को ध्यानपूर्वक पढ़ें तथा प्रत्येक प्रश्न में चार विकल्पों में से सही विकल्प चुनें।

आजकल हंसी भी दुर्लभ होती जा रही है। सभी के चेहरों पर तनाव, चिंता, दुख, उदासी अधिकतर दिखाई देती है। मुस्कराते हुए चेहरों का मानों अकाल ही पड़ गया है। क्या आप जानते हैं कि एक व्यस्क मनुष्य एक बच्चे के मुकाबले केवल 30% हँसता है! यही कारण है कि आजकल के तनावपूर्ण जीवन में मनुष्य अनेक घातक बीमारियों का शिकार होता जा रहा है। हँसना सेहत के लिए उतना ही आवश्यक है, जितना कि भोजन करना। हँसने से शरीर में रक्त संचार भली प्रकार से होता है और अनेक प्रकार के रोगों से तथा तनाव से लड़ने की क्षमता बढ़ती है। चाहे आपको कितनी देर क्यों ना हो परंतु अपने लिए समय अवश्य निकालना चाहिए जिसमें आप दोबारा बच्चा बनकर वही हंसी और खुशी प्राप्त कर सकें जो आपको बचपन में मिली थी। आज तो यह नारा होना चाहिए हँसो-हँसाओ, जीवन खुशहाल बनाओ।

Sub questions

Question Number : 196 Question Id : 5459275854 Question Type : MCQ Option Shuffling : Yes Display Question Number : Yes  
Single Line Question Option : No Option Orientation : Vertical

Correct Marks : 1 Wrong Marks : 0.25

आजकल क्या कम देखने को मिलता है?

Options :

1. ✓ हँसी
2. ✗ कारें
3. ✗ मुखौटे
4. ✗ दुख

Question Number : 197 Question Id : 5459275855 Question Type : MCQ Option Shuffling : Yes Display Question Number : Yes  
Single Line Question Option : No Option Orientation : Vertical

Correct Marks : 1 Wrong Marks : 0.25

उपर्युक्त गद्यांश के लिए शीर्षक क्या है?

Options :

1. ✗ खुशहाल जीवन
2. ✗ हँसी की दुर्लभलता
3. ✓ हँसी का महत्व
4. ✗ तनावग्रस्त जीवन

Question Number : 198 Question Id : 5459275856 Question Type : MCQ Option Shuffling : Yes Display Question Number : Yes  
Single Line Question Option : No Option Orientation : Vertical

Correct Marks : 1 Wrong Marks : 0.25

हँसना शरीर के लिए कितना आवश्यक है?

Options :

1. ✗ सांस लेना
2. ✓ खाना खाना
3. ✗ नाचना
4. ✗ गुस्सा करना

Question Number : 199 Question Id : 5459275857 Question Type : MCQ Option Shuffling : Yes Display Question Number : Yes  
Single Line Question Option : No Option Orientation : Vertical

Correct Marks : 1 Wrong Marks : 0.25

हँसने से क्या फायदा होता है?

Options :

1. ✗ पैसे मिलते हैं
2. ✗ तनावमुक्त होते हैं
3. ✓ तनाव से लड़ने की क्षमता मिलती है
4. ✗ बीमार होते हैं

Question Number : 200 Question Id : 5459275858 Question Type : MCQ Option Shuffling : Yes Display Question Number : Yes  
Single Line Question Option : No Option Orientation : Vertical

Correct Marks : 1 Wrong Marks : 0.25

अपने लिए समय अवश्य जरूर निकालना चाहिए से क्या तात्पर्य है?

Options :

1. ✗ अपने को शीशे में देखना चाहिए
2. ✗ अपने साथ खेलना चाहिए
3. ✓ अपने बचपन जैसे हँसना खेलना चाहिए
4. ✗ अपने बच्चों को खेलने नहीं देना चाहिए