

Reasoning Mega Quiz for SSC CHSL

Directions (1-10): In the following question, select the related word from the given alternatives.

Q1. Influenza : Virus :: Ringworm : ?

- (a) Bacteria
- (b) Fungi
- (c) Parasite
- (d) Protozoa

Q2. LSFW : NTHX :: PKWE : ?

- (a) RYLF
- (b) RLYE
- (c) RLYF
- (d) RLGf

Q3. 11 : 120 :: 13 : ?

- (a) 165
- (b) 168
- (c) 170
- (d) 169

Q4. Chicken : Hen :: ? : ?

- (a) Horse: Mare
- (b) Rabbit: Goose
- (c) Bull: Doe
- (d) Boar: Foal

Q5. BKPG : DNRJ :: CMOG : ?

- (a) DOQI
- (b) EPQJ
- (c) EQPJ
- (d) EQJP

Q6. 256 : 290 :: 961 : ?

- (a) 1011
- (b) 1017
- (c) 1025
- (d) 1023

Complete Preparation for
SSC Exams

SSC
EXTREME

Video Courses, Test Series,
eBooks

Q7. Leaves : Rustle :: ? : ?

- (a) Rain: Jingle
- (b) Tyres : Sizzle
- (c) Clouds: Thunder
- (d) Snow: Drizzle

Q8. RVLP : SWMQ :: GLKP : ?

- (a) HQLM
- (b) HMST
- (c) HMLQ
- (d) FKSQ

Q9. 3 : 30 :: 7 : ?

- (a) 310
- (b) 320
- (c) 340
- (d) 350

Q10. EFGH : JJJJ :: ADMN : ?

- (a) FFFF
- (b) FHPP
- (c) HHHH
- (d) FHOO

Q11. In the following question, select the related word from the given alternatives.

Ramanujan : Mathematician :: Sushruta : ?

- (a) Scientist
- (b) Architect
- (c) Physician
- (d) Astronomer

Q12. In the following question, select the related letters from the given alternatives.

MTBO : KRZM :: RJMD : ?

- (a) PHKB
- (b) PHKA
- (c) HPKA
- (d) PHBK

Q13. In the following question, select the related number from the given alternatives.

108 : 11664 :: 112 : ?

- (a) 12504
- (b) 12544
- (c) 13644
- (d) 17644

Q14. In the following question, select the odd word pair from the given alternatives.

- (a) Writer : Pen
- (b) Doctor : Chisel
- (c) Plumber : Wrench
- (d) Carpenter : Saw

Q15. In the following question, select the odd number pair from the given alternatives.

- (a) 14 - 48
- (b) 12 - 72
- (c) 11 - 88
- (d) 8 - 24

Q16. Arrange the given words in the sequence in which they occur in the dictionary.

- 1. Opperate
 - 2. Oyster
 - 3. Oracle
 - 4. Otis
 - 5. Official
- (a) 51324
 - (b) 53124
 - (c) 53142
 - (d) 51342

Q17. In the following question, select the word which cannot be formed using the letters of the given word.

TRANSPORTED

- (a) PORT
- (b) SPORTS
- (c) TRAP
- (d) TREAT

Q18. In a certain code language, "BANGED" is written as "JJKQCC" and "TILTS" is written as "XXOKU". How is "STRAY" written in that code language?

- (a) ZBSUT
- (b) XZQSR
- (c) EFUUS
- (d) DEUVT



LIVE **BILINGUAL**

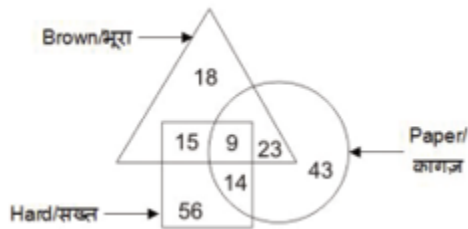
**ENGLISH
BY
NEETU SINGH
12th May**

Tue, Thr, Sat 5 pm - 7 pm

Q19. If $17 * 36 = 17$ and $41 * 56 = 16$, then $41 * 32 = ?$

- (a) 6
- (b) 12
- (c) 10
- (d) 8

Q20. In the given figure, how many papers are also hard?



- (a) 14
- (b) 23
- (c) 37
- (d) 32

Q21. In the following question, select the odd number pair from the given alternatives.

- (a) 3 - 27
- (b) 7 - 49
- (c) 5 - 125
- (d) 6 - 216

Q22. Arrange the given words in the sequence in which they occur in the dictionary.

1. Strain
2. Strom
3. Stark
4. Stored
5. Stamp

- (a) 54312
- (b) 53421
- (c) 53412
- (d) 54321

Q23. If $2 = 0$, $5 = 1$ and $8 = 4$, then $11 = ?$

- (a) 8
- (b) 9
- (c) 10
- (d) 6

Q24. In the following question, select the number which can be placed at the sign of question mark (?) from the given alternatives.

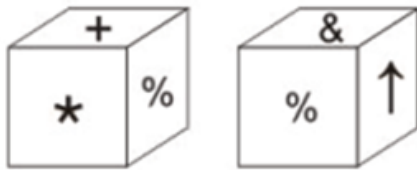
5	11
2	6

13	4
6	1

8	7
5	?

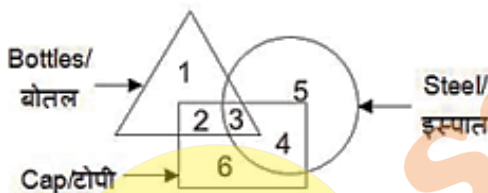
- (a) 3
- (b) 4
- (c) 6
- (d) 7

Q25. Two positions of a cube are shown below. What will come opposite to face containing '*'?



- (a) ↑
- (b) %
- (c) +
- (d) &

Q26. In the given figure, which number represents steel bottles which are caps?



- (a) 2
- (b) 4
- (c) 3
- (d) 6

Q27. How many triangles are there in the given figure?



- (a) 12
- (b) 14
- (c) 16
- (d) 20

TEST SERIES

Bilingual

SSC CGL TIER-II

PRIME

59 Total Tests | eBooks

Q28. Which answer figure will complete the pattern in the question figure?



(a)



(b)



(c)



(d)



Q29. From the given answer figures, select the one in which the question figure is hidden/embedded.



(a)



(b)



(c)



(d)



Q30. A piece of paper is folded and punched as shown below in the question figures. From the given answer figures, indicate how it will appear when opened?



(a)



(b)



(c)



(d)



6 Months Subscription

SSC CGL TIER-II MAHA PACK

Test Series, Live Classes,
Video Course, Ebooks

Bilingual (With e-Books)

sscadda.com

