

SSC CGL SUNDAY REASONING QUIZ (Question)

Q1. Two statements are given followed by three conclusions numbered I, II and III. Assuming the statements to be true even if they seem to be at variance with commonly known facts, decide which of the conclusions logically follow (s) from the statements.

Statements:

No crow is a bird.

All birds are animals

Conclusions:

I. Some animals are crows.

II. Some animals are birds.

III. No animal is a crow.

(a) Only conclusion I and III follows.

(b) None of the conclusion follows.

(c) Only conclusion III follows

(d) Conclusion II and either conclusion I and III follows

Q2. D is son of C and brother of E and E is niece of F. C is sister of B and aunt of A. Father of B has two children i.e. one son and one daughter. If A is son of F then how is F related to C?

(a) Cousin-brother

(b) Aunt

(c) Sister-in-law

(d) Sister

Q3. Two different positions of the same dice are shown. Which numbers will be at the top if 4 is at the bottom?



(a) 3

(b) 6

(c) 5

(d) 1

Q4. In a code language, COMPUTER is written as OCREPMTU. How will DAUGHTER be written in the same language?

(a) READTHGU

(b) ADTHREGU

(c) ADREGUTH

(d) ADERUGTH

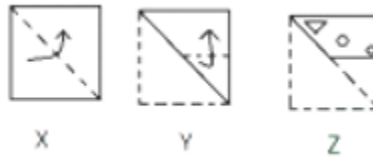
TEST SERIES
Bilingual



SSC CGL T-I
Most Expected
Questions

15 Full Length Mocks

Q5. The sequence of folding a piece of square paper (figures X and Y) and the manner in which the folded paper has been cut (figure Z) are shown. How will paper appear when unfolded?



(a)



(b)



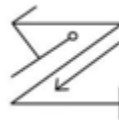
(c)



(d)



Q6. Select the correct mirror image of the given figure when the mirror is placed to the right of the figure.



(a)



(b)



(c)



(d)



Q7. Three of the following four words are alike in a certain way and one is different. Pick the odd word out.

- (a) Krishna
- (b) Mahanadi
- (c) Tapti
- (d) Godavari

Q8. Which two sign should be interchanged in the following equation to make it correct?

$$10+5\div 10\times 8-10=16$$

- (a) + and×
- (b) -and+
- (c) ÷and×
- (d) - and ÷

Q9. Select the combination of letters that when sequentially placed in the gaps of the given letter series will complete the series.

bac_cab_cd_a_ac_ca

- (a) bdabc
- (b) dcbac
- (c) cadbc
- (d) dacbd

Q10. Three of the following four numbers are alike in a certain way and one is different. Pick the number that is different from the rest.

- (a) 338
- (b) 217
- (c) 28
- (d) 65

Q11. Select the Venn diagram that best illustrates the relationship between the following classes. Snakes, Reptiles, Poisonous

(a)



(b)



(c)



(d)



TEST SERIES	
Bilingual	
SSC KA SOORMA CGL TIER-I	
140+ TOTAL TESTS	

Q12. Two mixtures contain milk and juice in the ratio of 2 : 1 and 4 : 5. If equal volumes of the two mixtures are mixed together, what would be ratio of milk to juice in the resulting mixture?

- (a) 7 : 5
- (b) 1 : 1
- (c) 5 : 3
- (d) 5 : 4

Q13. Select the word-pair in which the two words are related in the same way as are the two words in the following word-pair.

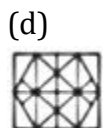
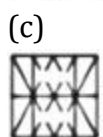
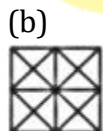
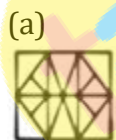
Disinterested : enthusiasm

- (a) War : attack
- (b) Treaty : friendship
- (c) Nomination : Employment
- (d) Condemnation: respect

Q14. Arrange the following words in a logical and meaningful order.

1. Students
 2. Job
 3. Interview
 4. Education
 5. Retirement
 6. Degree
- (a) 1, 5, 3, 6, 4, 2
 - (b) 1, 4, 6, 3, 2, 5
 - (c) 5, 3, 2, 1, 4, 6
 - (d) 3, 5, 4, 6, 1, 2

Q15. Select the option in which the given figure is embedded.



Q16. Select the number-pair in which the two numbers are related in the same way as are the two numbers of the following number-pairs.

7 : 32

- (a) 3 : 11
- (b) 13 : 98
- (c) 12 : 85
- (d) 16 : 145

Q17. 'Cinema' is related to 'Audience' in the same way as 'Church' is related to '_____'.

- (a) Congregation
- (b) Meditation
- (c) Concentration
- (d) Prayer

Q18. Three of the following four letter-clusters are alike in a certain way and one is different. Pick the odd one out.

- (a) RQST
- (b) FGHJ
- (c) MLNO
- (d) CBDE

Q19. Select the set in which the numbers are related in the same way as are the numbers of the following set.

(5, 13, 12)

- (a) (13, 17, 11)
- (b) (11, 15, 9)
- (c) (15, 19, 13)
- (d) (6, 10, 8)

Q20. If CAB is coded as 6 and BED is coded as 40, then how will HAD be coded as?

- (a) 16
- (b) 52
- (c) 32
- (d) 46

Q21. In a family of eight persons, there are two couples, each having two children. C and D are cousin brothers. The father of E is married to G, who is the aunt of F. F's mother, H, is married to B, the brother of A. C is the nephew of H. How is A related to D?

- (a) Uncle
- (b) Brother
- (c) Nephew
- (d) Father

TEST SERIES	
Bilingual	
SSC CGL TIER-I	
2016-18	
Previous Year Questions	
99 Full Length Mocks	
Validity : 12 Months	

Q22. 'Dumbness' is related to 'Speech' in the same way as ' _____ ' is related to 'Memory'.

- (a) Thoughtlessness
- (b) Amnesia
- (c) Recognition
- (d) Illusion

Q23. Select the set in which the numbers are related in the same way as are the numbers of the following set.

(15, 22, 31)





- (a) (7, 14, 23)
- (b) (5, 11, 20)
- (c) (23, 30, 40)
- (d) (11, 18, 29)

Q24. Select the combination of letters that when sequentially placed in the gaps of the given letter series will complete the series.

dc_abc_cb_bcd_ba_c

- (a) dbacb
- (b) cbadb
- (c) bdacb
- (d) bdcab

Q25. Select the Venn diagram that best illustrates the relationship between the following classes. Doctors, Salaried Persons, Parents

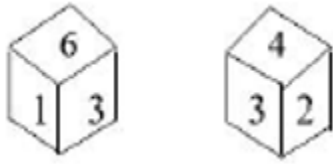
- (a) 
- (b) 
- (c) 
- (d) 

Q26. Select the option that is related to the third term in the same way as the second term is related to the first term.

Happy : Mirthful :: Sad : ?

- (a) Contented
- (b) Jolly
- (c) Morose
- (d) Gleeful

Q27. Two different positions of the same dice are shown. Which number will be at the top if 1 is at the bottom?



- (a) 4
- (b) 2
- (c) 6
- (d) 5

12 Months Subscription

SSC

Useful for CGL, CHSL & others

TEST PACK

Q28. Which number will replace the question mark (?) in the following series?

2, 3, 6, 10, 17, 28, ?

- (a) 45
- (b) 39
- (c) 43
- (d) 46

Q29. Three of the following four letter clusters are alike in a certain way and one is different. Pick the odd one out.

- (a) ZOOM
- (b) PAST
- (c) BIRD
- (d) DECK

Q30. Select the number pair in which the two numbers are related in the same way as are the two numbers of the following number pair.

28 : 63

- (a) 16:36
- (b) 36:78
- (c) 12:28
- (d) 48:98