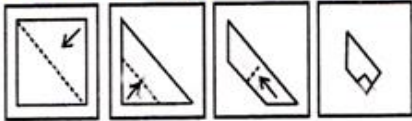


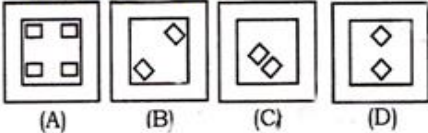
Reasoning Mega Quiz for SSC CGL – Advance Level

Q1. A piece of paper is folded and cut as shown below in the question figures. From the given answer figures, indicate how it will appear when opened.

Question Figure :



Answer Figure :



- (a) a
- (b) b
- (c) c
- (d) d

Directions (2-6): In the questions select the related word/letters/number from the given alternatives.

Q2. Crime : Punishment :: Honesty : ?

- (a) Award
- (b) Recognition
- (c) Reward
- (d) Pride

Q3. VOHA : WPIB :: CJQX : ?

- (a) DKRY
- (b) YRKD
- (c) RKDY
- (d) YDKR

Q4. PRINTING : RPNIITGN :: PROTOCOL : ?

- (a) RPTOOCOL
- (b) RPOTCOLO
- (c) PRTOOCOL
- (d) RPTOOCOLO

12 Months Subscription

SSC CHSL

KA MAHA PACK

Live Class, Video Course,
Test Series, eBooks

Bilingual (with eBooks)

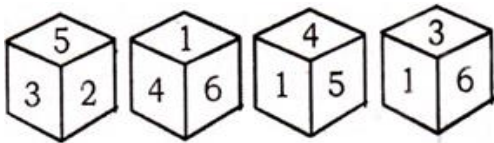
Q5. 20 : 11 :: 102 : ?

- (a) 52
- (b) 49
- (c) 61
- (d) 96

Q6. 6415 : 5304 :: 7896 : ?

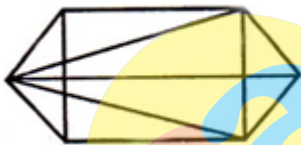
- (a) 6705
- (b) 6905
- (c) 6907
- (d) 6785

Q7. Four positions of a dice are given below. Identify the number at the bottom when top is 1.



- (a) 6
- (b) 3
- (c) 2
- (d) 5

Q8. Find the number of triangles in the given figure.



- (a) 11
- (b) 14
- (c) 16
- (d) 22 or more

Q9. In the question, find the missing number from the given responses.

72	44	68
91	?	86
43	66	37

- (a) 33
- (b) 22
- (c) 11
- (d) 55

Q10. In the question, find the missing number from the given responses.

8	3	12
2	3	6
4	3	3
4	3	?

- (a) 5
- (b) 6
- (c) 7
- (d) 15

Q11. In the question, find the odd number/ letters/number pair from the given alternatives.

- (a) RISH
- (b) TGUF
- (c) NMOL
- (d) PKQI

Q12. In the question, find the odd number/ letters/number pair from the given alternatives.

- (a) 28 – 32
- (b) 21 – 24
- (c) 70 – 80
- (d) 54 – 62

Q13. In the question, find the odd number/ letters/number pair from the given alternatives.

- (a) Ladyfinger
- (b) Grapes
- (c) Mango
- (d) Orange

Q14. In the question, find the odd number/ letters/number pair from the given alternatives.

- (a) 144
- (b) 152
- (c) 38
- (d) 114

Q15. In questions find the odd number/ letters/number pair from the given alternatives.

- (a) EGIL
- (b) MOQS
- (c) BDFH
- (d) PRTV

12 Months Subscription

SSC PREMIUM

Useful for CGL | CHSL | CPO & Others

900+ TESTS

Q16. One morning after sunrise, Rajan was standing facing a pole. The shadow of the pole fell exactly to his left. Which direction was he facing ?

- (a) East
- (b) West
- (c) South
- (d) North

Q17. P is 35 m South - West of Q, R is 35 m South-East of Q, then R is in which direction of P ?

- (a) North
- (b) South
- (c) East
- (d) West

Q18. In the question, two statements are given followed by two conclusion I and II. You have to consider the statements to be true even if they seem to be at variance from commonly known facts. You have to decide which of the given conclusions if any, follow from the given statements.

Indicate your answer.

Statements:

These apples are too expensive to be bad.

Conclusions:

1. When apples are in short supply the prices go up
2. The higher the price the superior the quality of apples.

- (a) Neither I nor II follows
- (b) Both I and II follow
- (c) Only I follows
- (d) Only II follows.

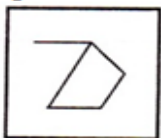
Q19. Which is the mirror image of WATERFALL?

- (a) WATERFALL
- (b) WATERFALL
- (c) WATERFALL
- (d) WATERFALL

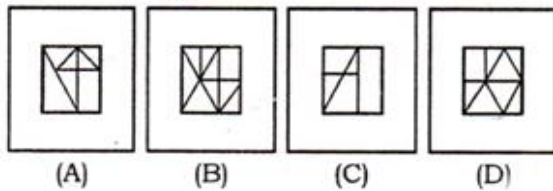
- (a) A
- (b) B
- (c) C
- (d) D

Q20. From the given answer figures, select the one in which the question figure is hidden/embedded.

Question Figure :



Answer Figure :



- (a) A
- (b) B
- (c) C
- (d) D

Directions (21-25): select the related word/letters/number from the given alternatives.

Q21. Produce : Destroy :: Contrast : ?

- (a) Similar
- (b) Correct
- (c) Oppose
- (d) Contradict

Q22. Knife : Chef :: ?

- (a) Carpenter : Saw
- (b) Newspaper : Editor
- (c) Oxygen : Men
- (d) Plough : Farmer

Q23. NIATRUC : CURTAIN :: ENILUCSAM : ?

- (a) MNIUSLUCE
- (b) MASCULINE
- (c) MUNISLCUE
- (d) MSINUCLUE


Q24. 112 : 222 :: 442 : ?

- (a) 884
- (b) 886
- (c) 552
- (d) 882

Q25. 08 : 09 :: ? : 25

- (a) 64
- (b) 16
- (c) 27
- (d) 36

TEST SERIES
English



**SSC CPO
TIER-II**

10 Full-Length Mocks

Validity : 12 Months